

DISTINCTION SCHOOL BASED ASSESSMENT TEST



MONITORING LEARNER'S PROGRESS

GRADE 6 -2026



001

CREATIVE ARTS, SOCIAL STUDIES & RELIGION

Time: 1 hour 40 Minutes

PART I: CREATIVE ARTS AND SPORTS


Use the following picture to answer questions 1-3.



- Which of the following was not needed in drawing the image above?
A. Ruler B. Water C. Rubber D. Pencil
- Which picture making technique was used in the drawing above?
A. Stippling B. Still life
C. Crayon etching D. Painting
- Which media would be best for drawing the image above?
A. Crayon B. Paint brush
C. Pencil D. Charcoal
- Jane mixed red and yellow. Which colour did she finally get?
A. Green B. Orange C. Brown D. Purple
- What is the meaning of still life composition in drawing?
A. Is where lines are used to show darker and lighter parts of a drawing.
B. Is a drawing where a pencil is the only media used.
C. Is drawing well arranged items from observation.
D. Is when a drawer balances the image to match the size of page.
- Nafula was practising tonal variation in stippling technique in drawing. What exactly was she doing?
A. Shading dark and light areas using dots.
B. Drawing using charcoal sticks.
C. Drawing using crayons
D. Drawing using dots.

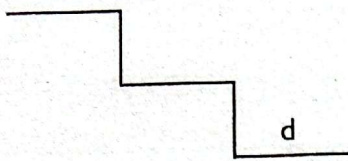
Study the following image and answer question 7 and 8.



- Which technique was used to create the picture?
A. Collage B. Colour wheel
C. Etching D. Still life
- Which of the following locally available materials is not likely to be used?
A. Leaves B. Glue
C. Banana fibre D. Grass
- Study the following picture.

What is the name given to the picture?
A. Cross hatching
B. Tonal gradation strip in stippling
C. Tonal gradation in painting
D. Overlapping in stippling
- John was listening to an Art and Craft lesson over the radio when he heard the term brush stroke. Which topic was being taught?
A. Weaving B. Modeling
C. Drawing D. Painting
- During a harambee meeting, the Grade Six class sang some songs in praise of the guest of honour, the headteacher and other teachers. What kind of songs did they sing?
A. Wedding songs B. National songs
C. Patriotic songs D. Game songs
- Choose the odd one out.
A. Eshiriri B. Nyatiti
C. Marimba D. Adeudeu
- Grade Six learners were discussing how to play string musical instruments. Who was correct?
A. Alpha: Litungu - plucking
B. Anita: Wandindi - striking
C. Asembo: Nderemo - bowing
D. Amurono: Obokano - plucking
- Which of the following is not a wind instrument?
A. Guitar B. Horn
C. Descant recorder D. Flute
- What is not an item that can cause accidents during a folk song performance?
A. Prop B. Costumes
C. Sticks D. Wet or slippery stage
- What is the name of the note d?
A. Semibreve B. Quaver
C. Minim D. Crotchet

17. ta-aa has _____ value
 A. 1 B. $\frac{1}{2}$ C. 2 D. 3

18. Complete the ladder below.



A. d, r B. r, m C. f, s D. f, r


19. What is the name of the note \circ ?

A. Semibreve B. Quaver
 C. Minim D. Crotchet

20. What is the note value for a crotchet?

A. $\frac{1}{2}$ B. $\frac{1}{4}$ C. 1 D. $\frac{1}{8}$


21. Study the picture below.



What game is being practised?

A. Netball B. Athletics
 C. Volleyball D. Basketball.

22. Study the picture below.



What skill is being practised?

A. Dig service B. Frontal crawl
 C. Receiving D. Overhead service

23. Why is it important to be honest in sports competition?

A. It reduces graceful acceptance of results.
 B. It promotes the spirit of sportsmanship and fair play.
 C. It discourages the referee.
 D. It fuels rivalry between teams.

24. Which one of following is **not** a safety measure to be observed while taking part in a Volleyball game?

A. Do not cross into the other teams court when playing.
 B. Wear appropriate sport's attire.
 C. Warm up adequately before participating in the race.
 D. Overlook the instructions given by the officials.

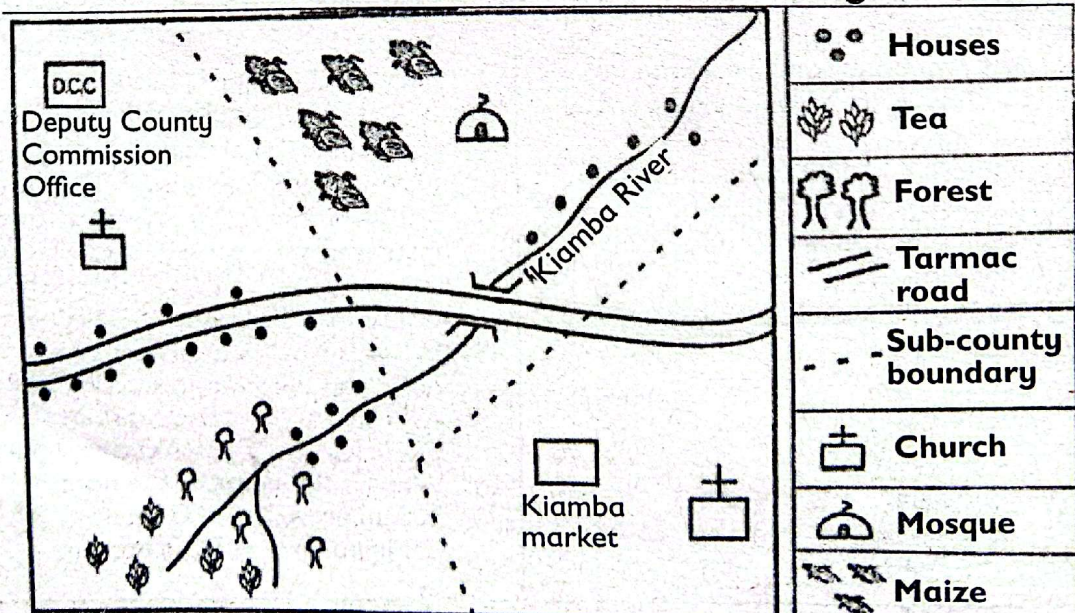
25. The following are materials one can use to improvise a ball. Which one is **not**?

A. Plastic shopping bags B. Cloth rags.
 C. Plastic bottle D. Thread

PART II: SOCIAL STUDIES

Study the map below and answer questions 1 - 7.

Kiamba Area



- Kiamba area is likely to be a _____.
A. District B. County
C. Sub-county D. Sub-location
- The general flow of the Kiamba river flows from _____ to _____.
A. East to West
B. North to East
C. South West to North East
D. North West to East
- Name the physical feature found in Kiamba area.
A. Roads B. Schools C. River D. Hills
- Which is the population settlement pattern shown in Kiamba area?
A. Light shade
B. Sparsely populated area
C. Linear settlement pattern
D. Deep shade
- What is the direction of the Mosque from the forest?
A. North East B. South West
C. North West D. North
- The elected head of Kiamba area is a _____.
A. Member of Parliament
B. Member of County Assembly
C. Governor
D. Senator
- The main economic activity carried out in Kiamba area is _____.
A. Lumbering B. Fishing
C. Crop growing D. Livestock keeping
- Why do roads attract many people?
A. Because people use them to travel and transport goods
B. Because people go there to swim
C. Because people grow crops on roads
D. Because people build houses on roads
- People prefer to live and build houses in some areas more than other. Which is most suitable for settlement?
A. Dense forest B. Flat plains
C. Steep mountains D. Swampy areas
- In traditional African communities, games and sports were played during important occasions. Which of the following occasions did **not** involve such games?
A. Initiation ceremonies
B. Wedding ceremonies
C. Birth of a child
D. Worship activities
- What do we call a picture that shows the whole earth or part of it drawn on a flat surface?
A. Map B. Compass C. Symbol D. Key
- To determine the school's location in relation to his home on a map, which map feature should Steve use?
A. Title B. Compass
C. Key D. Frame

- What type of climate is experienced around Mt. Kenya?
A. Desert climate B. Coastal climate
C. Mountain climate D. Tropical climate
- The government studied the distribution of people in Kenya. Why is this information important?
A. To know where to build Schools, hospitals and roads.
B. To know people's favourite food.
C. To know the colour of houses.
D. To know the games people like.
- If you travel from Kenya straight towards Ethiopia, which direction would you move?
A. North B. South C. East D. South

PART III:

SECTION B

CHRISTIAN RELIGIOUS EDUCATION

Choose the correct answer from the choices.

- How does a doctor use his abilities to fulfill God's purpose?
A. By treating patients.
B. By charging a lot of money.
C. By making friends.
D. By greeting the patients.
- Philip and Jenny wanted to be united in marriage. They visited a County Commissioner's Office. There was a government official who helped them to carry out the process. Soon after, they signed the marriage certificate. They had two witnesses. Which type of a marriage is this?
A. Civil marriage
C. Cultural marriage
B. Traditional marriage
D. Religious marriage
- Alison says, 'My talent is drawing.'
Jackson says, 'My talent is playing chess.'
Miranda says, 'My talent is sleeping.'
Derek says, 'My talent is drawing pictures.'
Which one of the above children needs to develop a better talent?
A. Alison B. Derek
C. Jackson D. Miranda
- Which of these children has been denied their rights?
A. Annete - Arranging the books on the shelf.
B. Brenda - Helping with chores around the house.
C. Imelda - She works in a coffee plantation during school hours.
D. Charles - He can play together with his friends.

5. Sharon was told by her teacher to be careful as she played outside. Sharon did not listen. A few minutes later, Sharon fell down the stairs and got hurt. What is the result of Sharon choosing not to listen to her teacher?
 - A. When she disobeyed, she pleased her teacher.
 - B. She fell down and hurt herself.
 - C. She was pleased with herself.
 - D. She received many blessings.
6. Why did Eve agree to eat the forbidden fruit?
 - A. She wanted to be wise like God.
 - B. She did not know it was forbidden.
 - C. She wanted to be foolish.
 - D. She was not hungry.
7. Which one of the following is a negative emotion?

A. Happiness	B. Excitement
C. Anxiety	D. Satisfaction
8. The lady who is the mother of my father is related to me. What is our relationship?
 - A. She is my grandmother.
 - B. She is his sister-in-law.
 - C. She is his mother-in-law.
 - D. She is not his relative.
9. Which of these values is not taught by the parable of the talents?

A. Loyalty	B. Disobedience
C. Respect	D. Responsibility
10. It is correct to spend our leisure time doing all the following except?
 - A. Knitting a sweater.
 - B. Reading a storybook.
 - C. Chatting all day on social media.
 - D. Going for a walk.

PART III:

SECTION B

ISLAMIC RELIGIOUS EDUCATION

1. Which one of the following surah warns Muslims against backbiting?

A. Al-Maun	B. Al-Takathur
C. Al-Fil	D. Al-Humazah
2. Inn-nal Insaana lafiy khusr is a verse from surah Al-sr that states that indeed mankind.
 - A. Should be kind and generous
 - B. Is in great loss
 - C. Should practice patience
 - D. Has turned away from the truth
3. Which surah of the Quran reminds mankind not to be in great competition for worldly gains?
 - A. Surah Al-zilzalah
 - B. Surah At-Tjin
 - C. Surah Al-Fil
 - D. Surah At-Takathur

4. During Friday Khutba in a local Masjid, Omar heard the preacher give sermon on hadith on good behavior. Which one is the best lesson that he could learn from the hadith?
 - A. Sharing food and other items with those who do not have
 - B. Fighting with thieves who have broken into their house
 - C. Using rude language to police officers who want to be bribed
 - D. Abusing drugs with boys who have dropped out of school.
5. Naima was walking home from school when she met her friend Asia. She greeted her by saying Assalam aleikum warahmatullahi wabarakatuh. She responded by saying.
 - A. Waaleika
 - B. Waleikum salam warahmatullah wabarakatuh
 - C. Alhamdulillah
 - D. MashaAllah
6. Malik a grade six pupil was using his laptop to find the meanings of the beautiful names of Allah (s.w.t). Which one among these describes Allah (s.w.t) as The Protector?

A. Al- Ghaffar	B. Al-Hafeedh
C. Al- Hayyuh	D. Al- Aliim
7. Three of the following are significances of believing in angels except one. Which one is it?
 - A. They help us to understand the power of Allah (s.w.t)
 - B. They increase our Iman and belief in Allah (s.w.t)
 - C. They teach us to learn and appreciate Allah (s.w.t) creations
 - D. They teach us to change our forms and be sinless
8. Halima has been listening to stories about qualities of prophets of Allah (s.w.t) which one of the following is not among them?
 - A. They were sinless
 - B. They told the truth
 - C. They were impatient
 - D. They were knowledgeable
9. Muzamil, a grade six pupil collected a wallet near the school gate and handed it to his class teacher. Which value of the prophets did he demonstrate?

A. Patience	B. Obedience
C. Courage	D. Honesty
10. Which one of the following miracles was performed by nabii Issa (a.s)?
 - A. Talking while still an infant
 - B. Separating the water of the red sea by striking it with a stick
 - C. Turning a rod into a big snake
 - D. Making an ark that could float on water for days and nights