



001

STEP FLYER SERIES

MONITORING LEARNERS PROGRESS

GRADE 5 - YEAR 2026

MATHEMATICS

5

Time: 2hrs

READ THESE INSTRUCTIONS CAREFULLY.

1. You have been given this question paper and a separate answer sheet. The question paper contains 30 questions.

2. Make sure that you have written on the answer sheet.

(i) Your name

(ii) Name of your school

(iii) Assessment number

1. In Parklands Zone there are 8567 learners in primary schools. What is the place value of digit 8 in the number of learners?

- A. Hundreds
- B. Eight thousands
- C. Ten thousands
- D. Thousands


2. Bamburi Cement Factory processed 543289 bags of cement. Find the total value of digit 4 in the figure of bags of cement.

- A. 40
- B. 4000
- C. 40000
- D. 400,000

3. Rianyanchabera Primary School received a cheque written ninety five thousand eight hundred and eight shillings. Write the amount in symbols.

- A. 95880
- B. 95808
- C. 95888
- D. 95080

4. Find the perimeter of the rectangular shape drawn below.



- A. 308m
- B. 154m
- C. 252m
- D. 380m

5. Use digits 3, 8, 9, and 5 to form a four largest digit number.

- A. 3589
- B. 5893
- C. 9583
- D. 9853

6. John counted his school days for term two 2025 and found it to be 112 days. How many weeks are those days?

- A. 14
- B. 18
- C. 16
- D. 17

7. Work out;

Days	Hours
8	2
- 2	10
<hr/>	
<hr/>	

- A. 6 days 4 hours
- B. 6 days 16 hours
- C. 9 days 12 hours
- D. 5 days 16 hours

8. Anyona had Sh.250 for buying a packet of flour. He converted the amount of money into cents. How much was this amount in cents?
- A. 250
B. 2500
C. 25000
D. 25

9. Convert $5\frac{3}{8}$ into an improper fraction.

A. $\frac{53}{8}$

B. $\frac{43}{8}$

C. $\frac{58}{3}$

D. $\frac{8}{43}$

10. Work out;

$99 \div 9 =$


A. 10

B. 101

C. 11

D. 90

11. What fraction is shaded? Write your answer in words.



A. Five ninths

B. Four ninths

C. Four over nine

D. Five over nine

12. How many $\frac{1}{2}$ -kg packets of sugar can be obtained from 16kg of sugar?

A. 32

B. 18

C. 8

D. 16

13. Which of the following numbers comes just before 1001?



A. 1002

B. 1000

C. 999

D. 1001

14. Grade Five learners were discussing types of angles. If one of the learners was selected to identify the reflex angle, which one will be the best option?



15. Work out;

469528

+ 286671

A. 756299

B. 656199

C. 755199

D. 756199

16. The following is a set of numbers.
0.61, 0.67, 0.62, 0.81, 0.84

Arrange them in ascending order.

- A. 0.61, 0.62, 0.67, 0.81, 0.84
 B. 0.84, 0.81, 0.67, 0.62, 0.61
 C. 0.84, 0.61, 0.81, 0.62, 0.67
 D. 0.61, 0.84, 0.62, 0.81, 0.67
17. Bisera bought n goats and John bought y sheep. How many animals were bought altogether?
 A. ny
 B. $n + y$
 C. $n - y$
 D. $n \div y$
18. Among the following numbers, which one is an odd number?
 A. 18
 B. 24
 C. 33
 D. 22

Use the price list below to answer questions

19 and 20.

Item	Ksh
A packet of maize flour	180
A packet of wheat flour	240
A 120 page exercise book	80
A pen	30
A pencil	25
One kg of rice	250

19. Makori bought the following items;

2 pkts of maize flour

1 pkt of wheat flour

3 Exercise books

2 pens

2kg of rice

How much money had he paid for the items?

- A. Ksh. 805
 B. Ksh. 1500
 C. Ksh. 1300
 D. Sh. 1400
20. If Makori paid Sh. 2000 to the shopkeeper what balance did he get?
 A. Sh. 1195
 B. Sh. 700
 C. Sh. 600
 D. Sh. 500
21. Nelson walked 300m 85cm from his kitchen to an office. He then walked 250m 65cm from the office to Grade Four classroom. Find the distance he covered altogether.
 A. 550m 50cm
 B. 551cm 50cm
 C. 551m 40cm
 D. 550m 150cm

22. Simplify the following;

$$8a - 6b + 2a + 14b$$

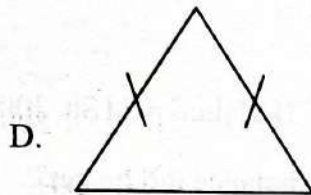

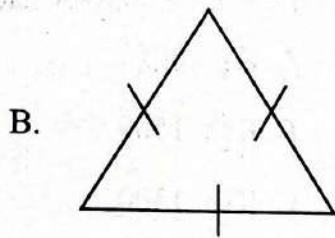
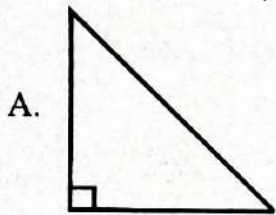
A. $10a - 8b$

B. $14a + 8b$

C. $10a + 8b$

D. $2a + 16b$

23. Below are different types of triangles. Which one of the following is an isosceles triangle?



24. Fill in the number pattern below.

37, 41, 43, ___

What will be next number in the pattern?

A. 47

B. 46

C. 45

D. 49

25. Among the following numbers, which one is divisible by 5?

A. 68

B. 70

C. 87

D. 83

26. A train has 38 coaches. Each coach carries 40 passengers. How many passengers does the train carry when in full capacity?

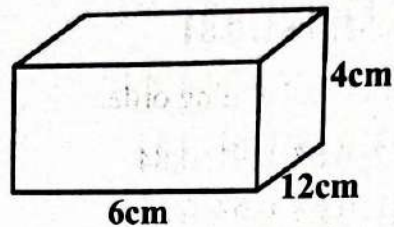
A. 78

B. 88

C. 1520

D. 1420

27. Calculate the volume of the figure below



A. 22cm^3

B. 278cm^3

C. 298cm^3

D. 288cm^3

28. Ophir bought 36 oranges. If she sold $\frac{1}{3}$ of them. How many oranges were not sold?

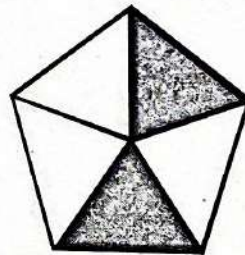
A. 24

B. 12

C. 32

D. 39

29. Which fraction is unshaded?



A. $\frac{2}{5}$

B. $\frac{3}{5}$

C. $\frac{3}{4}$

D. $\frac{2}{7}$

30. Work out;

$$6 \overline{) 84}$$

A. 90

B. 13

C. 14

D. 77

STEP FLYER SERIES

MONITORING LEARNERS PROGRESS

GRADE 5 - YEAR 2026

ENGLISH: LANGUAGE

Time: 1 hour 40 minutes

READ THESE INSTRUCTIONS CAREFULLY.

- You have been given this question paper and a separate answer sheet. The question paper contains 30 questions.
- Make sure that you have written on the answer sheet.
 - Your name
 - Name of your school
 - Assessment number

Read the dialogue below. It contains blank spaces numbered 1 to 5. For each blank space, select the best alternative from the choices given.

Doctor : Hello! 1 ?

Patient : I am suffering 2 fever and headache since yesterday.

Doctor : Do you have any other problem?

Patient : 3 . I also feel dizzy when I stand up.

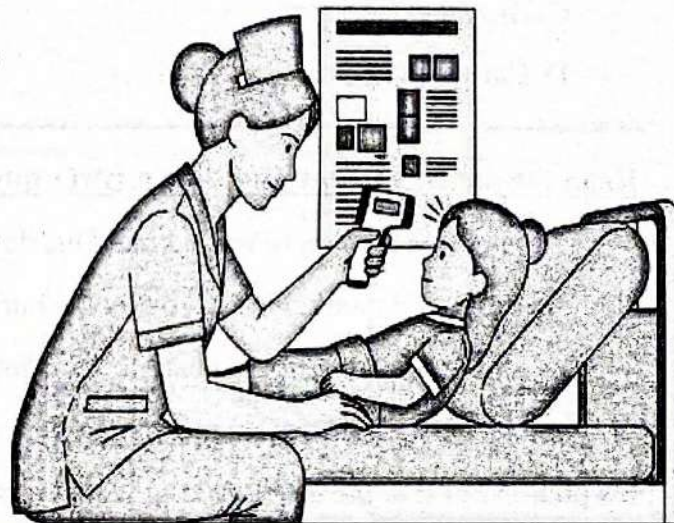
Doctor : Let me first 4 your temperature.

Patient : Is there 5 serious, doctor?

Doctor : No, don't worry. You'll get well soon.

Patient : Thank you.

Doctor : You're welcome.



1. A. Why are you here

B. What can I do for you

C. Where do you come from

D. What is your problem

2. A. with

B. by

C. of

D. from

3. A. Yes, I have

B. Yes, I don't have

C. No, I don't have

D. No, I have

4. A. write

B. ask

C. check

D. remember

5. A. somebody

B. anything

C. everything

D. nothing

Read the passage below and then answer questions 6 to 10.

Four tourists went to a game park. Carlos and Danny saw a leopard and a rhino. Henry and Billy saw an elephant and a rhino. Henry saw a leopard and a buffalo.

6. Which animal was seen by all the tourists?

A. Elephant

B. Rhino

C. Buffalo

D. Leopard

7. Which animal was seen by only one tourist?
- Buffalo
 - Rhino
 - Leopard
 - Elephant
8. The elephant was seen by
- Danny and Henry
 - Henry and Billy
 - Billy and Carlos
 - Carlos and Danny
9. How many animals were seen in the game park?
- Eight
 - Two
 - Four
 - Five
10. Who saw the most animals?
- Henry
 - Carlos
 - Danny
 - Billy

Read the passage below and then answer questions 11 to 15.

Many years ago, there was a king. One day, his stables of horses caught fire. He quickly ordered his soldiers to bring a monkey's fat, so that the burnt horses could be treated by applying the fatty balm. When the king of the monkeys heard this, he got angry and went to meet a giant at the great lake. He knew the giant lived there. The giant met him and asked him what he wanted. The monkey king told the giant of his plan. After that the monkey king went to meet the king and told him there was a treasure in the lake. The greedy king sent all his best soldiers to the lake to get the treasure. The giant captured the soldiers. It was only after the king promised never to hurt the monkeys that the soldiers were set free by the giant.

11. Why was Monkey's fat needed?
- To treat the soldiers
 - To treat the burnt horses
 - To cook in the palace
 - To put out the fire
12. According to the passage, it is **not** true to say that
- monkeys had their king
 - a giant lived at the great lake
 - monkeys' fat was medicinal
 - the king was killed by the giant
13. When the monkey king mentioned the treasure, the king became
- greedy
 - angry
 - jealous
 - brave
14. The soldiers were **not** released until
- the king apologised
 - the king invited all the monkeys for a feast
 - the king promised never to hurt monkeys
 - the giant was given a reward
15. The story you have read teaches us to
- love and respect animals
 - go to hospital for treatment
 - become friends with strangers
 - make good use of soldiers

Read the passage below. It contains blank spaces numbered 16 to 20. For each blank space, select the best alternative from the choices given.

The skin covers 16 whole body. It protects 17 from dirt, germs 18 the sun. The skin also 19 keep our body warm or cool. It is the 20 organ in the body.

16. A. their B. your C. my D. our
17. A. them B. we C. us D. it
18. A. but B. and C. or D. also
19. A. helps B. helping C. help D. helped
20. A. large B. larger C. largest D. big

For questions 21 to 30, fill in the blank spaces with the correct alternative from the choices given.

21. It took us _____ hour to find the lost dog.
A. the B. a
C. an D. any
22. Janet has an umbrella. It belongs to _____.
A. them
B. him
C. her
D. you
23. Our library has _____ of storybooks.
A. many
B. more
C. some
D. a lot
24. Odongo and _____ are classmates.
A. me
B. I
C. myself
D. mine
25. Make _____ a cup of tea.
A. yourself
B. myself
C. itself
D. ourselves
26. Chebet ran _____ than Moraa.
A. fast
B. faster
C. fastest
D. fastly
27. I have _____ biscuits to share with you all.
A. little
B. most
C. some
D. any
28. The match has not _____.
A. begins
B. began
C. begins
D. begun
29. The bull broke _____ horns.
A. its
B. their
C. it's
D. his
30. We _____ crossed the busy road.
A. seriously
B. carefully
C. quietly
D. leisurely

SEHEMU YA KWANZA :LUGHA
SOMA MAAGIZO HAYA KWA MAKINI

1. Umepeva kijikaratasi hiki cha maswali na karatasi ya majibu. Kijikaratasi hiki kina maswali 30.
2. Katika karatasi ya majibu hakikisha umeandika:-
(i) Jina lako (ii) Jina la shule yako (iii). Nambari ya Kneec

Muda:Saa 1 Dak 40

Soma mazungumzo yafuatayo kisha ujibu maswali 1 hadi 5.

(Maya amemtembelea nyanyake nyumbani mwake mchana)

Maya: (Akinyoosha mkono) Shikamoo nyanya?

Nyanya: ___ 1 ___ mjukuu wangu Maya. Habari za nyumbani?

Maya: Kwema nyanya. Nimetumwa na mama nikuletee samaki hawa.

Nyanya: (Kwa furaha) Asante sana. Ninashukuru kwa ukarimu huu. Mungu aendelee kuwabariki na kuwapanua zaidi.

Maya: Karibu ___ 4 ___. Haya basi, naomba kuondoka.

Nyanya: (Kwa nyenyekevu) sawa. Wasalimu wote. Kwaheri.

Maya: Kwaheri ya kuonana.



1. Jaza sehemu ya ___ 1 ___ iliyoachwa kwa kuchagua jibu sahihu ya maamkizi.

- A. Asante B. Marahaba
C. Vyema D. Binuru

2. Mazungumzo haya yanafanyika wakati gani?

- A. Usiku B. Jioni
C. Asubuhi D. Mchana

3. Maya alikuwa ametumwa na nani?

- A. Mama B. Nyanya
C. Baba D. Shangazi

4. Chagua jibu mwafaka la kujaza nafasi iliyoachwa ya 4.

- A. mjomba B. halati
C. nyanya D. mkozi

5. Kulingana na mazungumzo haya, sifa moja ya Maya ni

- A. mwenye kiburi
B. mwenye heshima
C. mwenye bidii
D. mwenye chuki

Soma kifungu kifuatacho kisha ujibu maswali 6 hadi 10.

Swara walikuwa wakila nyasi mbugani. Ghafla Simba aliwavamia. Swara walimuogopa sana Simba. Kwa hivyo walipomwona walitoroka ili kuyaokoa maisha yao. Ilikuwa ni hali ya mguu niponye. Hata hivyo wakati wote walikasirishwa na Simba kwa kuwa aliwaharibia raha yao ya kula.

Wakati wote Simba alikuwa analenga windo lake vizuri sana. Alimfukuza mwana wa swara na kumwangusha. Shibli wa Simba walipoona mama yao amemwangusha mnyama, walikaribia na kuimba kwa furaha. Walikuwa tayari kula na kushiba.

6. Swara walikuwa wakila nini?
 A. Nyama B. Mahindi
 C. Machungwa D. Nyasi
7. Mtoto wa Simba huitwa nani?
 A. Kimatu
 B. Kiyoyo
 C. Kinyemere
 D. Shibli
8. Simba alikimbia na kumwanguka nani?
 A. Mwanawe
 B. Mtoto wa swara
 C. Swara
 D. Fisi

9. Je, kwa nini watoto wa Simba walifurahia na kuanza kuimba kwa furaha?
 A. Walimwona mama
 B. Kwa sababu mama yao alikuwa amewatafutia chakula
 C. Kwa sababu pundamilia walikimbia
 D. Kwa sababu ya kuona maji
10. Ni mnyama yupi hajatajwa kwenye hadithi hii?
 A. Mbuzi
 B. Simba
 C. Swara
 D. Shibli

Soma kifungu kifuatacho kisha ujibu maswali 11 hadi 15.

Tamara, Aisha, Zuri na Sasha hupenda michezo. Pamoja na michezo wao hupenda kufanya mazoezi ya mwili. Jedwali lifuatalo linaonyesha ratiba ya michezo ambayo wanafunzi hawa hushiriki.

Siku Mwanafunzi	Jumatatu	Jumanne	Jumatano	Alhamisi
Tamara	Chesi	Soka	Miereka	Netiboli
Aisha	Miereka	Magongo	Chesi	Soka
Zuri	Vikapu	Vikapu	Chesi	Miereka
Sasha	Netiboli	Vikapu	Soka	Chesi

11. Ni mchezo upi huchezwa mara moja pekee?
 A. Chesi
 B. Netiboli
 C. Magongo
 D. Soka
12. Ni michezo ipi ambayo huchezwa siku mbili tu?
 A. Vikapu, soka
 B. Miereka, chesi
 C. Magongo, vikapu
 D. Vikapu, Netiboli
13. Jumla ya wanafunzi wangapi wameshiriki michezo?
 A. Kumi B. Saba
 C. Wanne D. Wanane
14. Kulingana na ratiba, wanafunzi huwa hawashiriki michezo siku ya:
 A. Alhamisi B. Ijumaa
 C. Jumatano D. Jumatatu
15. Kati ya michezo hii, ni ipi haijazungumziwa kulingana na jedwali?
 A. Naga B. Chesi
 C. Miereka D. Netiboli

Jaza nafasi zilizoachwa kutoka swali la 16 hadi 20 kwa jibu sahihi.

Shairi ___16___ utunzi maalum wa lugha ya kisanaa. ___17___ katika shairi huunda ubeti. Mashairi mengine hutuhimiza ___18___ bidii masomoni ili tufaulu maishani. Tunaweza kutumia ___19___ kujua maana ya maneno yaliyotumiwa kwenye shairi. ___20___ wanapojadiliana kuhusu shairi darasani wanaweza kujua shairi linatoa maana gani.

- | | | | | |
|-----|--------------|--------------|-----------|------------|
| 16. | A. la | B. si | C. ni | D. na |
| 17. | A. Kibwagizo | B. Mishororo | C. Vina | D. Silabi |
| 18. | A. tutie | B. tupalilie | C. tuwe | D. tueneze |
| 19. | A. daftari | B. dira | C. beti | D. kamusi |
| 20. | A. Walezi | B. Wanafunzi | C. Watoto | D. Walimu |

Kutoka swali la 21 hadi 30, jibu kila swali kwa kufuata maagizo.

21. Chagua sehemu ambayo haipatikani mguuni
A. Paja
B. Wayo
C. Muundi
D. Kiganja
22. Nomino 'mtoto' iko katika ngeli gani?
A. LI-YA B. KI-VI
C. A-WA D. U-I
23. Malipo yanayolipiwa shuleni huitwaje?
A. Karo
B. Mahari
C. Nauli
D. Koto
24. **Kamilisha tashbihi;**
Mrefu kama _____
A. sindano B. twiga
C. ng'onda D. shubiri
25. **Tambua kifaa hiki cha mawasiliano**



- | | |
|-------------|------------------|
| A. Runinga | B. Kipakatalishi |
| C. Seredani | D. Rununu |

26. **Kamilisha sentensi kwa kiunganishi kifaaacho.**

- Taboi alituzwa _____ ya bidii yake michezoni
A. pia
B. ilhali
C. kwa sababu
D. ingawa
27. **'Alamsiki' ni maagano ya wakati gani?**
A. Usiku
B. Mchana
C. Wakati wowote
D. Asubuhi
28. Kisawe cha neno, "shamba" ni
A. kiambo
B. konde
C. baraste
D. hamamu
29. Mama wa kaka yangu ni
A. halati
B. shangazi
C. nyanya
D. mama
30. Mshipi hufungwa wapi?
A. Shingoni
B. Begani
C. Kiunoni
D. Mkononi

STEP FLYER SERIES

MONITORING LEARNERS PROGRESS

GRADE 5 - YEAR 2026

INTEGRATED SCIENCE

5



001

READ THESE INSTRUCTIONS CAREFULLY.

1. You have been given this question paper and a separate answer sheet. The question paper contains 50 questions.

2. Make sure that you have written on the answer sheet.

(i) Your name

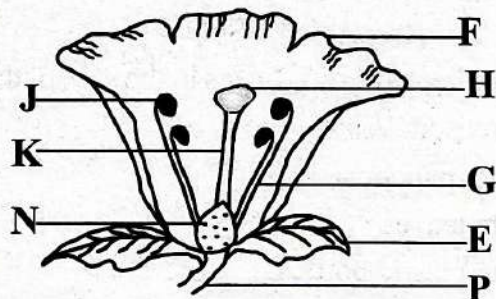
(ii) Name of your school

(iii) Assessment number

Time: 2 hours 15 minutes

SCIENCE AND TECHNOLOGY

Grade Five learners collected samples of flowers during Science and Technology nature walk and drew a flower as shown. Use it to answer questions 1 to 4.

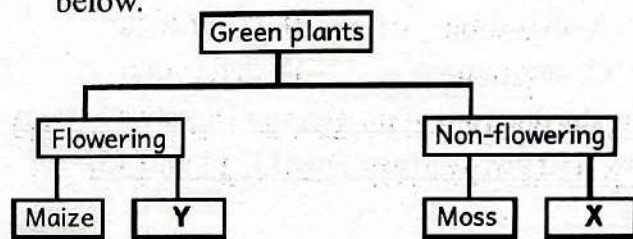


- The part marked **F** is called
A. sepal B. stigma
C. stalk D. petal
- The part that receives pollen grains is labelled
A. H B. J
C. E D. K
- The male parts of the flower are marked
A. G, H
B. J, G
C. M, N
D. H, K
- The function of the part labelled **J** is
A. receive pollen
B. produce pollen
C. develop into seeds
D. supports the stigma
- A learner listed down examples of flowering plants. Which one is **not**?
A. Maize plant
B. Tomato plant
C. Fern plant
D. Acacia plant

6. When studying plants in the environment you should observe the following safety measures **except**

- A. do not smell poisonous plants
- B. do not eat fruits of plants you do not know
- C. be careful near thorny plants
- D. eat fruits of plants you do not know

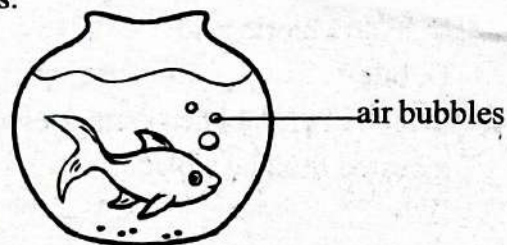
7. The chart below shows how green plants are classified. Study it and answer the question below.



What is X and Y respectively

	X	Y
A.	Mushroom	Hibiscus
B.	Toadstool	Fern
C.	Beans	Carrots
D.	Millet	Mushroom

- Plants that do not produce flowers are called
A. green plants B. flowering plants
C. non-flowering plants D. bush plants
- The diagram shows a certain characteristic of animals.

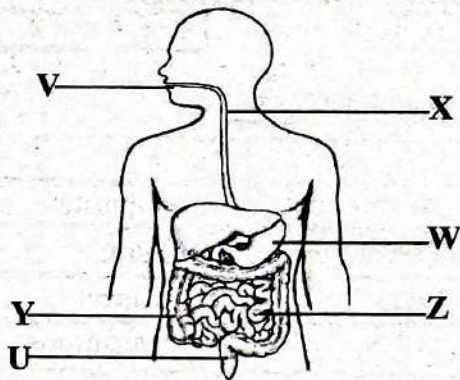


It shows that animals

- A. grow B. reproduce
- C. feed D. breathe

10. Adele described functions of roots in plants. Which one is **not**?
- Absorb mineral salts from soil
 - Support the plant
 - Storage of plants
 - Make plant food
11. A Grade 4 learner collected samples of invertebrates during Science and Technology nature walk. Which one were they **unlikely** to have collected?
- Butterfly
 - Lizard
 - Locust
 - Centipede
12. The breaking down of the food we eat into small particles that are absorbed by our bodies is called
- digestion
 - respiration
 - egestion
 - defecation

Study the diagram of the Human Digestive System below and answer questions 13, 14 and 15.



13. The digestive juice that mixes with food at part V is called
- gastric juice
 - saliva
 - hydrochloric acid
 - bile
14. Which of the labelled parts does absorption of digested food take place?
- Y
 - V
 - Z
 - W
15. The part labelled U is called
- caecum
 - appendix
 - rectum
 - large intestines

16. Anything that occupies space and has mass is known as
- water
 - element
 - material
 - matter
17. Patrick collected examples of solids. Which one did he collect?
- Flour
 - Milk
 - Air
 - Grease
18. Which state of matter takes the shape of the container they are put in?
- Gas
 - Liquid
 - Ice
 - Solid
19. Amadi collected solid wastes in the school that can be reused. Which one is it?
- Waste papers
 - Waste leaves
 - Waste plastic bottles
 - Broken pieces of glass
20. Four learners were using water in various ways. Who among them is **not** conserving water?

A. Best	Washing utensils using flowing water from tap.
B. Wall	Uses water for washing vegetables to water kitchen garden.
C. Endo	Uses water used for washing clothes to mop the floor.
D. Gamet	Uses drip irrigation to water plants.

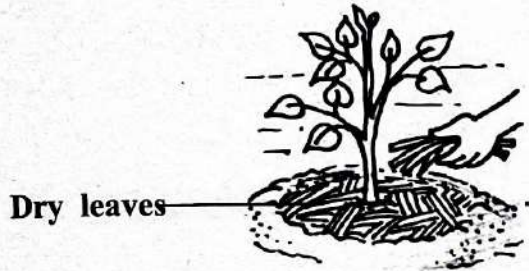
21. The push or pull on an object is called
- energy
 - work
 - power
 - force
22. Force that opposes motion is called
- friction
 - inertia
 - weight
 - gravity
23. Grade Four learners can light their classroom naturally by
- using a tin lamp
 - using electric bulbs
 - opening windows
 - using a torch

24. Heat can be used to do all the following **except**
- A. drying clothes
 - B. keeping warm
 - C. ironing clothes
 - D. taking photographs

25. The **main** source of heat on earth is
- A. the moon
 - B. the sun
 - C. electricity
 - D. fire

SECTION B: AGRICULTURE


26. Mukare cared for crops in his farm as shown



The method used is called

- A. mulching
 - B. weeding
 - C. drip irrigation
 - D. shading
27. Compost manure can be made using the following **except**
- A. waste papers
 - B. Cow dung
 - C. maize stalk
 - D. waste glasses

Pambo kept the domestic animal shown in the picture in his farm. Use it to answer questions 28 and 29.




28. The animal is kept for the following **except**
- A. milk
 - B. transport
 - C. meat
 - D. mohair
29. The young one of the animal is called
- A. lamb
 - B. kid
 - C. calf
 - D. kitten
30. A learner prepared an organic waste pit. He used the following materials **except**
- A. egg-shells
 - B. banana peels
 - C. polythene bags
 - D. saw-dust

31. Name one site in the school compound that can have poor soil for crop growth.
- A. Eroded areas
 - B. School garden
 - C. At the compost heap
 - D. Soil deposit areas

32. A farmer sprinkled water on an organic waste pit. This was to
- A. aerate the pit
 - B. add nutrients
 - C. introduce bacteria
 - D. increase decomposition

33. Identify the type of fuel in use below




- A. Electricity
 - B. Firewood
 - C. Gas
 - D. Kerosene
34. At what time should drip irrigation water source be refilled with water?
- A. In the evening
 - B. Day time
 - C. Lunch hour
 - D. Midday

Grade 5 learners observed the following small wild animal in the farm. Use it to answer questions 35 and 36.




35. The wild animal is called
- A. hare
 - B. monkey
 - C. squirrel
 - D. mole
36. The animal destroys the
- A. crops in store
 - B. small seedlings
 - C. vegetables in the field
 - D. cereal crops in the field

A farmer constructed the structure below in his farm. Use it to answer questions 37 and 38.





37. The structure is called
 A. scarecrow B. nest
 C. shade D. fence
38. The structure is used to
 A. keep off wild animals from the farm
 B. attract animals to the farm
 C. make the farm beautiful
 D. control soil erosion
39. Rafiki established some crops through direct sowing of tiny seeds. An example of such crop is
 A. cotton B. maize
 C. carrots D. beans
40. Removing overcrowded plants so that the remaining crops can grow well is called
 A. gapping B. pruning
 C. training D. thinning
41. Zainabu grew fruits in her farm. She grew the following **except**
 A. guava B. cotton
 C. mango D. passion
42. Eating fruits is important because fruits are
 A. body building foods
 B. water crops
 C. protective foods
 D. energy giving foods
43. Punde wants to prepare the food below for lunch.

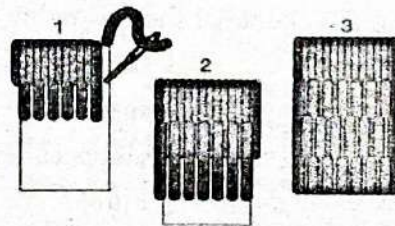


- The **best** method to use will be
 A. deep frying B. shallow frying
 C. roasting D. baking

44. Boiling can be used to cook
 A. sweet potatoes B. mandazi
 C. pancake D. pork
45. Important substances found in food is called
 A. content B. materials
 C. juices D. nutrients
46. Mama Mboga uses the following personal protective clothing. Which one does she use to prevent her from breathing dust while sweeping?
 A. Face masks B. Hand gloves
 C. Apron D. Head gear
47. When sweeping a dusty floor you should first
 A. sweep the floor
 B. collect wastes
 C. sprinkle water
 D. dust the furniture
48. After sweeping you can put the waste in a



49. Nyenje, a Grade Four learner, needs the following to clean his canvas shoes. Which one is **not**
 A. soft cloth B. Scrubbing brush
 C. Old newspaper D. Water
50. The diagram below represents a certain stitch



- The stitch is called
 A. running stitch
 B. backstitch
 C. even tacking stitch
 D. long and short tacking stitch.

READ THESE INSTRUCTIONS CAREFULLY.


1. You have been given this question paper and a separate answer sheet. The question paper contains 50 questions.
2. Make sure that you have written on the answer sheet.

(i) Your name (ii) Name of your school (iii) KNEC Assessment number

1. Identify the artwork below.



- A. Mosaic
 - B. Painting
 - C. Collage
 - D. Drawing
2. Which one of the following is a body percussion?
 - A. Hopping
 - B. Skipping
 - C. Clapping
 - D. Dancing
 3. Which of the following is a primary colour?
 - A. Black
 - B. White
 - C. Red
 - D. Green
 4. Grade Five learners were making a photomontage artwork, which of the following items was **not** used?
 - A. Pictures
 - B. Balls
 - C. Glue
 - D. Scissors
 5. Which of the following is a solfa syllable that has the **highest** pitch?
 - A. d
 - B. m
 - C. r
 - D. ta-te
 6. Study the following image and identify what the learners are doing.



- A. Throwing
- B. Dribbling
- C. Kicking
- D. Stopping

7. When we skip ropes we become
 - A. sad
 - B. old
 - C. fit
 - D. sick
8. Singing games make us
 - A. bad
 - B. good
 - C. young
 - D. happy
9. Which of the following is a quality of a good melody?
 - A. It is long
 - B. It is short
 - C. It ends on a d
 - D. It uses one solfa syllable.
10. Study the following music note and identify its name.




- A. Pair of quavers
 - B. Crotchet
 - C. French rhythm name
 - D. Taa
11. The highness or lowness of sound is known as
 - A. pitch
 - B. rhythm
 - C. melody
 - D. tune
 12. Which of the following colours is **not** found on the Kenyan flag?
 - A. Red
 - B. Black
 - C. Blue
 - D. White
 13. How many stanzas does the Kenyan National Anthem have?
 - A. 4
 - B. 3
 - C. 2
 - D. 1

14. Study the following image and identify the netball skill being executed.



- A. Low pass
 B. Overhead pass
 C. Chest pass
 D. Double handed catch
15. Isikuti is a Kenyan folk song performed by the _____ community.
 A. Agikuyu B. Abagusii
 C. Luyha D. Luo
16. Songs that are sung to show one's love and pride for a country are known as
 A. topical songs B. action songs
 C. love songs D. patriotic songs
17. Which one of the following is an element of photography?
 A. Camera
 B. Light
 C. Smart phone
 D. Digital devices
18. Which of the following is a technique of playing the descant recorder?
 A. Fingering B. Hitting
 C. Shaking D. Wiping
19. A person who plays musical instruments during a folk song performance is known as
 A. soloist B. singer
 C. instrumentalist D. leader
20. Study the following image and identify the gymnastic skill being executed.




- A. T-balance B. Crab balance
 C. Egg roll D. Swan balance

21. Teacher Buko asked some of the Grade Five learners to sing quickly and others to sing slowly. Identify the aspect of music he was testing. •
 A. Tempo
 B. Diction
 C. Gestures
 D. Facial expressions

22. Teacher Ben asked the Grade Five learners to collect materials for improvising the shakers musical instrument. Who among the following collected an item that was **not** used?
 A. Alpha - Y-shaped sticks
 B. Sango - Wire
 C. Asaph - Macramé string
 D. Anika - Bottle tops

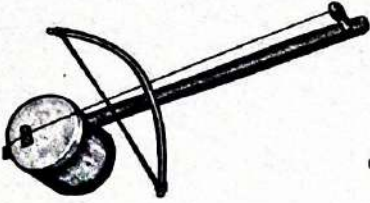
23. Study the following image.



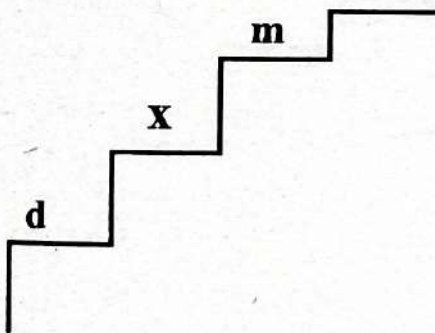
- Identify what the learner in the image above is **executing**.
 A. Medium sprint start
 B. Elongated sprint start
 C. Sprints
 D. Racing
24. Which of the following materials is used to make a skipping rope?
 A. Old clothes
 B. Bottle tops
 C. Wood
 D. Plastic
25. Which of the following parts of a percussion instrument is used to amplify sound?
 A. Head B. Resonator
 C. Sling D. Base
26. How many players make a team in a game of netball?
 A. 5 B. 4
 C. 6 D. 7

27. Which of the following items is **not** used to take a photograph?
- School tablet
 - Camera
 - Smartphone
 - Smart watch

28. Identify the method used to play the following musical instrument



- | | |
|-------------|------------|
| A. Blowing | B. Bowing |
| C. Plucking | D. Hitting |
29. A moment of silence in music is known as
- rest
 - short sound
 - rhythm
 - pair of quavers
30. Adrian drew the following solfa ladder.



Identify the solfa sound he placed in the step marked X.

- d
 - r
 - m
 - crotchet
31. Grade Five learners were asked to tune their drums before playing them. Who among the following did the **correct** tuning?
- Amos - Rubbing the sling with his palm
 - Becky - Warming the drum under the sun
 - Rachel - Cutting the laces
 - Kaylah - Buying a new drum

32. Which of the following animals gives us a material used to make drums?
- Snake
 - Crocodile
 - Cow
 - Dog

33. Which of the following is a tool used to classify colours?
- Colour compass
 - Colour chart
 - Colour pie
 - Colour wheel

34. Which of the following is used to score goals in a game of netball?
- Netball hoop
 - Football goal posts
 - Volleyball net
 - Two goal posts and no net


35. Which of the following is a secondary colour?
- Red
 - Green
 - Blue
 - Yellow

36. Kimani mixed a black colour and a yellow colour. This process of colour preparation is known as
- blotting
 - shading
 - tinting
 - toning

37. On Mondays and Fridays, we raise the Kenyan Flag as we sing the National Anthem. Which of the following is an action that we should do as we raise the flag and sing the National Anthem?
- Clap happily
 - Dance to the tune
 - Stand at attention
 - Kneel respectfully

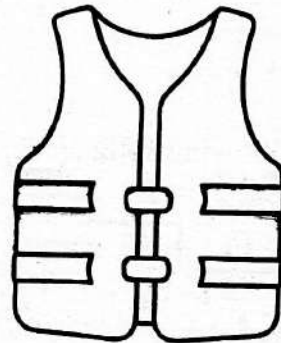
38. The lightness or darkness of a picture is known as
- | | |
|-----------|---------|
| A. shade | B. tone |
| C. colour | D. tint |

39. Grade Five learners were modelling solfa syllables using locally available materials. Which of the following was **not** used?
- A. Sand
 - B. Clay
 - C. Plasticine
 - D. Tabletop
40. When performing a folk song, the clothes that are worn by the performers are known as
- A. ornaments
 - B. costumes
 - C. folk clothes
 - D. song clothes
41. The art of smearing paint on a piece of paper to create an artwork is known as
- A. drawing
 - B. painting
 - C. colouring
 - D. montage
42. The following animal moves by



- A. hopping
 - B. running
 - C. swimming
 - D. walking
43. Teacher Ann wanted to show the Grade Five learners pictures of learners playing a game of netball using a digital device. Which of the following was used?
- A. Digital clock
 - B. Digital radio
 - C. Laptop
 - D. Smart watch
44. Glue is used for
- A. making artworks colourful
 - B. sticking objects
 - C. making paint strong
 - D. mixing with primary colours to make secondary colours.

45. Which of the following is a water game?
- A. Football
 - B. Athletics
 - C. Egg roll
 - D. Whirl pool
46. Grade Five learners were improvising a ball. Which of the following materials was used?
- A. Stones
 - B. Green sticks
 - C. Gunny bags
 - D. Seeds
47. Which of the following is a sprint race?
- A. 200m
 - B. 800m
 - C. 5000m
 - D. 1500m
48. Study the following image.



- Identify the use of the item above.
- A. Dancing
 - B. Life saving during swimming
 - C. Protect clothes when painting
 - D. Worn by goal scorer in a game of netball.
49. When players play together to win a game of netball, it is known as
- A. teamwork
 - B. group work
 - C. group play
 - D. working together
50. Which of the following **best** describes improvising?
- A. Buying new items
 - B. Cleaning the environment after using locally available materials to make something
 - C. Making something using locally available materials.
 - D. Making drums

READ THESE INSTRUCTIONS CAREFULLY.

1. You have been given this question paper and a separate answer sheet. The question paper contains 50 questions.

2. Make sure that you have written on the answer sheet.

(i) Your name

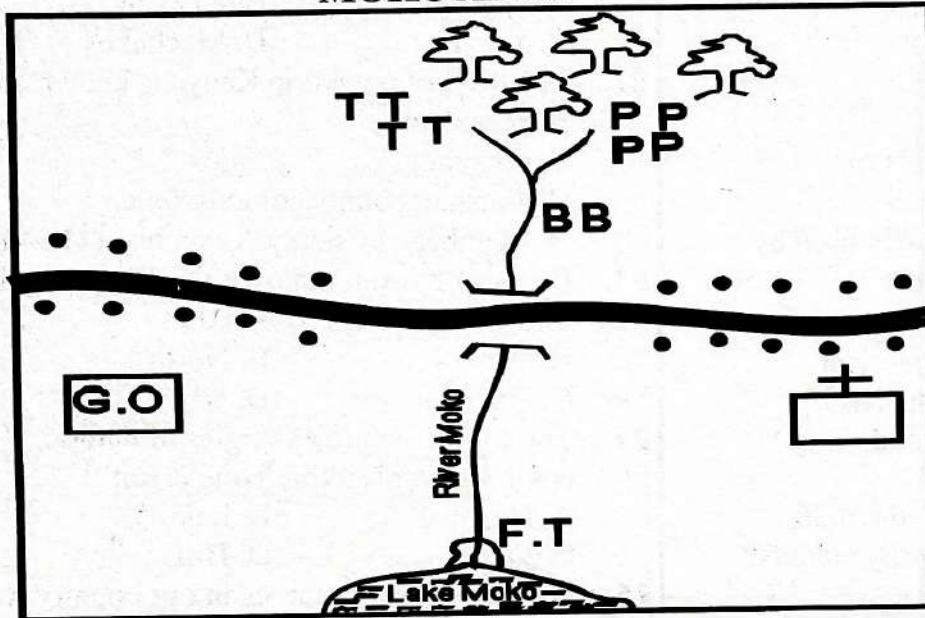
(ii) Name of your school

(iii) KNEC Assessment number




Time: 2hrs 15mins

Study the map of Moko Area below and answer questions 1 to 5

MOKO AREA



KEY

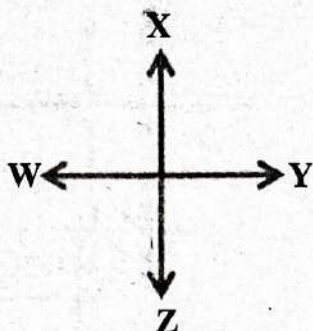
	Forest
F.T	Fish traps
TT	Tea
PP	Pyrethrum
BB	Beans
	Church
G.O	Governor's office
	Settlements

Scale 0 1 2 3 4 5 6 7 8 9 10 Km

- Which of the following food crop is grown in Moko area?
 - Pyrethrum
 - Beans
 - Tea
 - Maize
- The common means of transport used in Moko area is
 - railway
 - water
 - air
 - road
- The people of Moko area are
 - Muslims
 - Pagans
 - Christians
 - Hindus
- Moko area is likely to be a
 - county
 - location
 - sub-location
 - sub-county
- What is the direction of the forest from the lake?
 - North
 - South
 - East
 - West
- If we want to see wild animals we go to the
 - dispensary
 - children's home
 - church
 - national park
- When do we celebrate Madaraka Day?
 - 1st June
 - 10th October
 - 12th December
 - 1st May
- The green colour of our national flag stands for
 - our skin colour
 - peace
 - our plants
 - blood shed
- The visitors who come to our country to see wild animals are called
 - journalists
 - traders
 - game wardens
 - tourists
- Which of the following activities in not practised during the dry seasons?
 - Ploughing
 - Planting
 - Harvesting
 - Irrigation

11. Forests grow in areas that receive
 A. high rainfall
 B. low rainfall
 C. little rainfall
 D. average rainfall

12. Points W, X, Y and Z are called



- A. compass B. direction
 C. cardinal points D. north

13. The instrument above is **mostly** used by

- A. doctors B. pilots
 C. drivers D. farmers

14. When you walk along the road you

- A. walk on the left side of the road
 B. walk on any side of the road
 C. run across the road
 D. walk on the right side of the road

15. The Kenyan flag has how many colours?

- A. Four B. Six
 C. Three D. Five

16. Vegetation that grows on its own is called

- A. scrub B. planted
 C. natural D. riverine

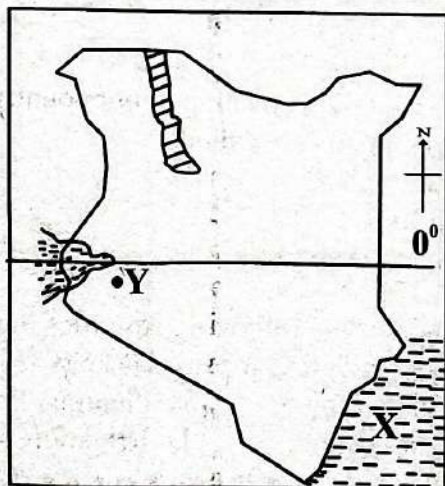
17. People go to Lake Nakuru always to see

- A. snakes B. flamingoes
 C. monkeys D. giraffes

18. The **largest** county in Kenya is

- A. Nairobi B. Kakamega
 C. Siaya D. Turkana

Use the map below to answer questions 19 to 21.



19. The line marked 0° on the map is called

- A. Equator
 B. Tropic of Cancer
 C. Tropic of Capricorn
 D. Longitude

20. The water body marked X is known as

- A. Lake victoria
 B. River Tana
 C. Indian Ocean
 D. Lake Nakuru

21. The town marked Y is

- A. Nairobi B. Kisumu
 C. Vanga D. Machakos

22. The head of a ward in Kenya is known as

- A. president
 B. governor
 C. assistant county commissioner
 D. Member of County Assembly (MCA)

23. Dan saw the sun rising in the morning it is **likely** that the sun was in the

- A. West B. North
 C. South D. East

24. The following are examples of natural environmental. Which one is **not**?

- A. Hospital B. Lake
 C. Valley D. Hill

25. When we grow potatoes in our country we can _____ them to other countries.

- A. buy B. borrow
 C. sell D. plant


26. When you are about to cross the road and the traffic turns red, you should

- A. get ready B. go back
 C. go D. stop

27. An area in our country where many trees grow together is called a

- A. plateau B. forest
 C. swamp D. farm

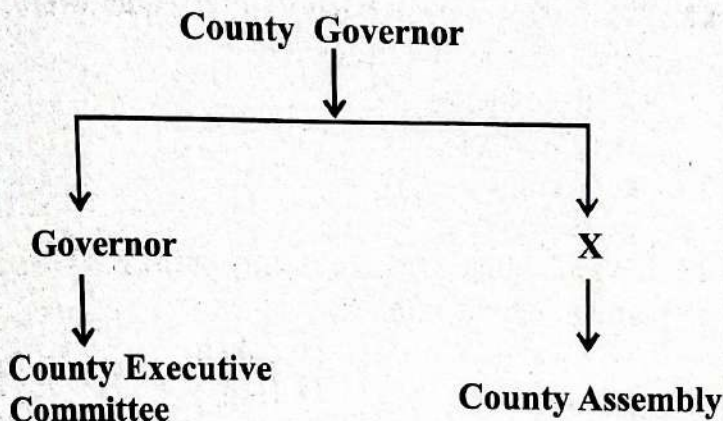
28. The road sign below shows that



- A. there are children crossing
 B. there is a hospital ahead
 C. there are bumps ahead
 D. there is a junction ahead

29. Animals kept for milk only are referred to as
 A. beef B. layers
 C. dairy D. dual purpose

30. Look at the chart below.



Which county officer is represented by letter X?

- A. Deputy Governor B. Chief
 C. Senator D. Speaker
31. Which one of the following is a traditional crop?
 A. Coffee B. Millet
 C. Wheat D. Tea
32. Which one of the following countries is **not** an immediate neighbour to Kenya?
 A. Eritrea B. Uganda
 C. Tanzania D. Somalia
33. Our nation Kenya maintains good relations with her neighbours through the following ways **except**
 A. games and sports
 B. trade
 C. war and conflict
 D. transport and communication
34. The following are traditional artefacts found in a museum **except**
 A. calabash B. spear
 C. traditional stool D. laptop
35. Traditional education had the following characteristics **except**
 A. teachers were mainly the elders
 B. had no reading and writing
 C. learners used tablets to acquire knowledge
 D. had no common syllabus

SECTION B

CHRISTIAN RELIGIOUS EDUCATION

36. The weather system was created by
 A. Eve B. God
 C. Adam D. man

37. The day the disciples received the Holy Spirit is known as
 A. Pentecost B. Good Friday
 C. Sabbath D. Easter Monday
38. "*Your people shall be my people*" Who said these words?
 A. Naomi B. Orpha
 C. Sarah D. Ruth
39. Who was swallowed by a fish?
 A. Noah B. Philip
 C. Jonah D. Peter
40. Which of these means '**God with us**'?
 A. Abba B. Emmanuel
 C. Bethlehem D. Ebenezer
41. The parable of 'The Good Samaritan' teaches Christians about
 A. young children
 B. good people
 C. friendship
 D. good neighbour
42. Who among the following people was Moses sister?
 A. Miriam B. Leah
 C. Racheal D. Peninah
43. From the story of King Solomon, Christians learn that they should
 A. not forgive those who wrong them
 B. pray for their neighbours only
 C. ask God for wisdom
 D. solve cases unfairly
44. Learners of Wisdom Primary School discussed values taught by John the Baptist. Select the values taught by John the Baptist while preaching in the wilderness.
 A. Faith, corruption
 B. Justice, sharing
 C. Love, dishonesty
 D. Injustice, caring
45. The following are events that took place during the baptism of Jesus Christ. Which event took place second?
 A. A voice was heard from heaven
 B. Heaven opened
 C. Jesus was baptised
 D. The Holy Spirit came down from heaven
46. The call of Moses teaches leaders to
 A. Be patient
 B. Be kind to others
 C. Trust one another
 D. Obey the instructions of God

47. God created man in His own
 A. image
 B. plan
 C. fashion
 D. mind
48. Cain and Abel were sons of
 A. Noah
 B. Abraham
 C. Adam
 D. Jacob
49. The first book in the New Testament is
 A. Genesis
 B. Matthew
 C. Malachi
 D. Revelation
50. I denied Jesus three times. I was the brother of
 A. Peter
 B. John
 C. Andrew
 D. James

SECTION B

ISLAMIC RELIGIOUS EDUCATION

36. The following are manners of handling the Quran. Which one is **not**?
 A. Carry Quran when clean
 B. Take Wudhu before reading the Quran
 C. Say audhubillahi minashaydani rajiriin before reading
 D. Recite very fast
37. A learner listed the following pillars. Which one is the fifth pillar of Iman
 A. belief in last day
 B. belief in qadar
 C. belief in his prophets
 D. belief in his books
38. During the day of Judgement people will stand for a long time. Which term is used to refer to that day?
 A. Yaumul Hisaab
 B. Yaumul Qiyama
 C. Yaumul akhir
 D. Yaumul Barzaq
39. What was the work of the prophet when young?
 A. Shephard
 B. Merchant
 C. Farmer
 D. Butcher
40. What is the meaning of Ihsan?
 A. To worship Allah as if he is with us
 B. To worship Allah as if he is in the heaven
 C. To worship Allah as if you see him
 D. To worship Allah with fear

41. Complete the hadith "*Speak the truth even if it is.....*"
 A. better
 B. bad
 C. good
 D. bitter
42. The following are qualities of a leader, which one is for a good leader?
 A. Role model
 B. Unfairness
 C. Tribalist
 D. Corrupt
43. Which pillar of Islam is only performed in the month of Ramadhan?
 A. Swalah
 B. Zakah
 C. Saum
 D. Hajj
44. Which prayer has the least number of rakaa?
 A. Fajr
 B. Dhuhr
 C. Asr
 D. Maghrib
45. What does a Muslim say in I'tidaal?
 A. Subhanarabiyaaladheem
 B. Rabanawalakalhamd
 C. AllahuAkbar
 D. Rabbigfirlii
46. When a person close to you sneezes and says Alhamdulillah. What should you say?....."
 A. Yahdikumullah
 B. Inshaallah
 C. Alhamdulillah
 D. Yarhamukallah
47. A group of people celebrated Idul fitr on Friday. Friday was likely to be
 A. 1st of Shawwal
 B. 10th of Dhul Hijja
 C. 30th of Ramadhan
 D. 10th of Muharram
48. Prophet Muhammad (S.A.W) was born in the third month of the Islamic calender. Which month was this?
 A. Safar
 B. Rabiul thani
 C. Jumadaula
 D. Rabiul Awwal
49. Which attribute of Allah is found in Surah Al-Fatiha
 A. Al Waduud
 B. As Salaam
 C. Al Qudus
 D. Al Malik
50. Which two surahs must be recited before going to bed?
 A. Maun and Naas
 B. Naas and Falaq
 C. Falaq and Tiyn
 D. Ikhlas and Fajr



STEP FLYER SERIES

GRADE 5 - YEAR 2026

MARKING SCHEME

5

MATHS	ENGLISH	KISWAHILI	INTEGRATED SCIENCE	CREATIVE ARTS	SOCIAL STUDIES & R.E
1. D	1. B	1. B	1. D 31. A	1. A 31. B	SST C.R.E
2. C	2. D	2. D	2. A 32. D	2. C 32. C	1. B 36. B
3. B	3. A	3. A	3. B 33. C	3. C 33. D	2. D 37. A
4. A	4. C	4. C	4. B 34. A	4. B 34. A	3. C 38. D
5. D	5. B	5. B	5. C 35. B	5. B 35. B	4. A 39. C
6. C	6. D	6. D	6. D 36. D	6. A 36. B	5. B 40. B
7. D	7. A	7. D	7. D 37. A	7. C 37. C	6. D 41. D
8. C	8. B	8. B	8. C 38. A	8. D 38. B	7. A 42. A
9. B	9. C	9. B	9. D 39. C	9. C 39. A	8. C 43. C
10. C	10. A	10. A	10. D 40. D	10. B 40. B	9. D 44. B
11. B	11. B	11. C	11. B 41. B	11. A 41. B	10. B 45. D
12. A	12. D	12. D	12. A 42. C	12. C 42. A	11. A 46. D
13. B	13. A	13. C	13. B 43. B	13. B 43. C	12. C 47. A
14. C	14. C	14. B	14. C 44. A	14. B 44. B	13. B 48. C
15. D	15. A	15. A	15. C 45. D	15. C 45. D	14. D 49. B
16. A	16. D	16. C	16. D 46. A	16. D 46. C	15. A 50. C
17. B	17. C	17. B	17. A 47. C	17. B 47. A	16. C I.R.E
18. C	18. B	18. A	18. B 48. B	18. A 48. B	17. B 36. D
19. D	19. A	19. D	19. C 49. A	19. C 49. A	18. D 37. A
20. C	20. C	20. B	20. A 50. D	20. B 50. C	19. A 38. A
21. B	21. C	21. D	21. D	21. A	20. C 39. A
22. C	22. C	22. C	22. A	22. C	21. B 40. C
23. D	23. D	23. A	23. C	23. A	22. D 41. D
24. A	24. B	24. B	24. D	24. A	23. D 42. A
25. B	25. A	25. D	25. B	25. B	24. A 43. C
26. C	26. B	26. C	26. A	26. D	25. C 44. A
27. D	27. C	27. A	27. D	27. D	26. D 45. A
28. A	28. D	28. B	28. B	28. B	27. B 46. D
29. B	29. A	29. D	29. B	29. A	28. A 47. A
30. C	30. B	30. C	30. C	30. B	29. C 48. D
					30. D 49. D
					31. B 50. B
					32. A
					33. C
					34. D
					35. C

NB: Please teachers are requested to scrutinize this marking scheme before use. Its worthy.

GRADE 5