



STARLIGHT ASSESSMENT TEST

COMPETENCY BASED EDUCATION

GRADE 5 2026

STR001 - 26

- MATHEMATICS -

Time: 1hr 15min

Learner's Name: Admission No:
 School: Date:

- | | |
|---|--|
| <p>1. Momanyi's parents bought him a toy car worth sh. 3083. What was this amount in words?</p> <p>A. Thirty thousand and eight shillings.
 B. Thirty three million and eighty three shillings.
 C. Three hundred and eighty three shillings,
 D. Three thousand and eighty three shillings.</p> <p>2. Felister collected sh. 21378 from her poultry farm in one month. What is the place value of digit 2 in the number?</p> <p>A. Thousands
 B. Hundreds
 C. Tens
 D. Ones</p> <p>3. A church water tank has 37295 litres of water. How many litres of water are represented by digit 7?</p> <p>A. 7000 litres
 B. Thousands litres
 C. 70000 litres
 D. 700 litres</p> | <p>4. Ouma was asked to round off 448 to the nearest ten. What answer did he get?</p> <p>A. 440
 B. 500
 C. 445
 D. 450</p> <p>5. A Grade 5 pupil was given 9 sweets to share with his friends. What was the number of sweets in Roman numerals?</p> <p>A. XI
 B. IX
 C. X
 D. VX</p> <p>6. Nyaruri arranged the numbers below from the smallest to the largest.
 3302, 3033, 3030, 3330
 What was the correct order?</p> <p>A. 3030, 3302, 3330, 3033
 B. 3030, 3033, 3302, 3330
 C. 3033, 3302, 3330, 3030
 D. 3330, 3302, 3033, 3030</p> |
|---|--|

ASSESSMENT RUBRICS

Exceeding Expectation			Meeting Expectation			Approaching Expectation			Below Expectation		
EE1	4.0	90-99	ME1	3.0	58-74	AE1	2.0	31-40	BE1	1.0	11-20
EE2	3.5	75-89	ME2	2.5	41-57	AE2	1.5	21-30	BE2	0.5	1-10

7. Which multiple of 6 comes just after 72?

- A. 78
- B. 80
- C. 66
- D. 60

8. Which of the numbers below is not an even number?

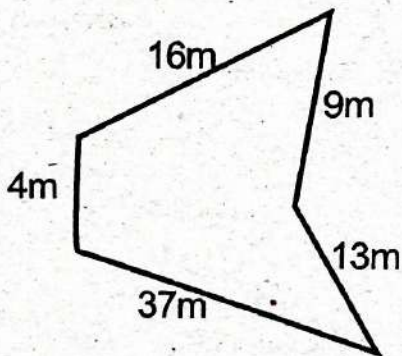
- A. 64
- B. 44
- C. 29
- D. 78

9. Complete the following.

$$12 \times \square = 96$$

- A. 4
- B. 12
- C. 8
- D. 6

10. The figure below shows Henry's plot of



Work out the perimeter

- A. 62m
- B. 58m
- C. 68m
- D. 79m

11. Identify the place value of digit 9 in decimal number below.

6.493

- A. ones
- B. Tenths
- C. hundreds
- D. hundredths

12. Hekima had a wire measuring 3m 45cm.

What will be the length of 4 such wires?

- A. 13m 80cm
- B. 12m 180cm
- C. 7m 45cm
- D. 7m 49cm

13. John woke up at the time shown on the face below.



What time did he wake up?

- A. Half past nine
- B. Quarter to nine
- C. Half past six
- D. Half past eight.

14. Jane bought items totalling to shs 2163. If she gave the shopkeeper 1000 notes, what balance did he get?

- A. 163
- B. 837
- C. 737
- D. 937


15. A farmer harvested 2850 bags in 2023 and 3579 bags in 2024. How many bags did he harvest in the two years altogether?
- A. 6429
B. 6329
C. 729
D. 6320

16. Convert $5\frac{1}{4}$ into an improper fraction

- A. $\frac{20}{4}$
B. $\frac{21}{4}$
C. $\frac{6}{4}$
D. $\frac{4}{21}$

17. Trevis walked a distance of 705 cm from the school to his home. How many metres and centimetres did he cover?
- A. 7 cm and 5 cm
B. 7m and 50 cm
C. 7cm and 40 cm
D. 7m and 5cm

18. Malaika drew the square grid below to represent a vegetable garden.



What was the area of the garden?

- A. 12 square units
B. 8 square units
C. 36 square units
D. 34 square units

19. Express $\frac{23}{100}$ as a decimal

- A. 2.30
B. 0.23
C. 2.3
D. 0.023

20. Felix bought 5m mangoes while her sister Joy bought 3m mangoes. How many mangoes did they buy altogether?

- A. 8m
B. 53m
C. 15m
D. 2m

21. Arrange the following descending order

0.9, 0.5, 0.7, 0.1

- A. 0.9, 0.5, 0.7, 0.9
B. 0.9, 0.7, 0.5, 0.1
C. 0.9, 0.5, 0.7, 0.1
D. 0.1, 0.7, 0.5, 0.9

22. 18 grade5 learners were given 13 books each by their class teacher. How many books were given altogether?

- A. 31
B. 5
C. 90
D. 234

23. How many 50 shillings notes are in one 1000 shillings note?

- A. 10
B. 50
C. 20
D. 100


24. Which of the following numbers is **not** a divisor 18?

- A. 9
- B. 6
- C. 3
- D. 4

25. Convert $\frac{23}{5}$ into a mixed number.

- A. $5\frac{2}{3}$
- B. $4\frac{3}{5}$
- C. 2
- D. 3

26. Which fraction is shaded in the figure below?



- A. $\frac{5}{12}$
- B. $\frac{9}{14}$
- C. $\frac{5}{14}$
- D. 5

27. Norah had 9 shillings in her savings box. How many Cents are equal to that amount?

- A. 90
- B. 190
- C. 9
- D. 900

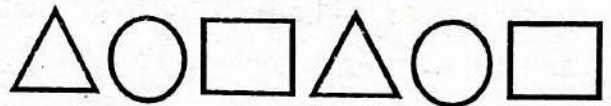
28. Abel used 180 minutes to walk from home to church. How Many hours are there?

- A. 18hrs
- B. 4hrs
- C. 3hrs
- D. 6hrs

29. Umbati bought a cloth 13m 55cm long. He later bought another 24m 88cm long. What was the total length of cloth he bought?

- A. 38m 4cm
- B. 37m 143cm
- C. 38m 43cm
- D. 38m 143cm

30. What is the next shape that complete the following pattern?



- A. Circle, Triangle, Square
- B. Triangle, Square, Circle
- C. Triangle, Circle, Square
- D. Triangle, Square, Circle



STARLIGHT ASSESSMENT TEST

COMPETENCY BASED EDUCATION

GRADE 5 2026

STR001 - 26

- ENGLISH -

Time: 1hr 15min

Learner's Name:..... Admission No:
 School:..... Date:.....

Read the following conversation then answer the questions that follow.

Brian: Hi, Zawadi
Zawadi: Hellow, Brian. What are you doing on the computer?
Brian: I'm sending an email to my cousin.
Zawadi: An email? Why don't you just write a letter and send it by post?
Brian: Emails are much faster! My cousin will get the message in a few seconds.
Zawadi: That's interesting. I've never sent an email before.
Brian: It's very easy. You just need an internet connection and an email address.
Zawadi: Can we use email to send other things too?
Brian: Yes! You can send pictures, documents, even videos through email.
Zawadi: That sounds very useful. I should learn how to use it.
Brian: Sure! I can help you create an email account after school.
Zawadi: Thank you, Brian. I've learnt something new today.

- | | |
|--|---|
| <ol style="list-style-type: none"> 1. What was Brian doing on the computer?
 A. Playing games
 B. Watching a video
 C. Sending an email
 D. Reading a story 2. What is the opposite of the word "fast" as used in the dialogue?
 A. Quick B. Slow
 C. Short D. Sharp 3. What does Zawadi say she has never done before?
 A. Use a computer
 B. Sent a letter
 C. Sent an email
 D. Created an email account | <ol style="list-style-type: none"> 4. According to Brian, what do you need to send an email?
 A. A mobile phone and a stamp
 B. An email address and envelope
 C. Internet connection and an email address
 D. A printer and a pen. 5. What did Zawadi learn from Brian?
 A. How to draw pictures
 B. How to write a story
 C. How to use a computer
 D. How to send an email |
|--|---|

ASSESSMENT RUBRICS

Exceeding Expectation			Meeting Expectation			Approaching Expectation			Below Expectation		
EE1	4.0	90-99	ME1	3.0	58-74	AE1	2.0	31-40	BE1	1.0	11-20
EE2	3.5	75-89	ME2	2.5	41-57	AE2	1.5	21-30	BE2	0.5	1-10

Read the passage below then answer the questions that follow:

It is important to keep ourselves clean in order to avoid diseases. Each one of us should observe cleanliness both at home and at school. Everybody likes clean children but nobody likes dirty children.

There are certain things that we have to do to be clean. First of all, we must bathe every day. We should wash our bodies properly with soap, a sponge and clean water. We should also brush our teeth with a toothbrush. Remember to comb your hair with a clean comb. You can also brush your hair with a hair brush. It is important to clean your nose with a handkerchief. Do not stick your finger into your nose! It is bad manners.

6. To avoid diseases by
- A. being clean at home only
 - B. being clean at school only
 - C. being clean after school
 - D. being clean all the time
7. Which of these sentences is **not** true?
- A. Everybody likes dirty children
 - B. Nobody likes dirty children
 - C. Everybody likes clean children
 - D. Nobody likes untidy children.

8. How often should we bathe?
- A. Every time
 - B. Only after school
 - C. Daily
 - D. Using soap and water
9. The word remember has been used in Paragraph two. It means the opposite of
- A. recall
 - B. recollect
 - C. forget
 - D. memory.
10. We should wash our body with the following **except**
- A. towel
 - B. soap
 - C. water
 - D. sponge

Fill in the blank spaces 11-15 using the best answer from the alternative given.

Forests 11 very important to human beings 17 animals. Because of this, 18 should conserve forests. Forests have very 19 uses and we cannot mention all 20 them.

- | | | | |
|------------|-----------|----------|---------|
| 11. A. are | B. is | C. were | D. was |
| 12. A. but | B. except | C. and | D. only |
| 13. A. us | B. we | C. it | D. them |
| 14. A. few | B. much | C. a lot | D. many |
| 15. A. of | B. for | C. off | D. with |

Choose the best answer to conjunction to fill in the blank space.

16. Mary walked ... the head teacher's office
- A. in
 - B. above
 - C. through
 - D. along
17. The thief jumped _____ the fence and escaped.
- A. on
 - B. over
 - C. above
 - D. into

Choose the correct form of verbs in brackets to complete the sentences.

18. Jude has _____ to school (go)
- A. going
 - B. good
 - C. went
 - D. gone
19. The farmer has _____ (cut) the tree when it started raining
- A. cut
 - B. cutting
 - C. cutted
 - D. cuted

Choose the correctly spelt word.

20. A. joaney
B. joney
C. journey
D. jorney

21. A. receive
B. recieve
C. reicieve
D. ricieve

Complete the following similes

22. As light as a
A. giant
B. mouse
C. feather
D. soil

23. As graceful as a
A. swan
B. peacock
C. chicken
D. queen

Use the correct adjectives to complete the following sentences.

24. Malaria is _____ than common cold.
A. dangerous
B. more dangerous
C. most dangerous
D. more danger

25. Ole is _____ intelligent than Leting.
A. much
B. most
C. more
D. better

26. What is the past tense of 'go'?

- A. Went
B. Come
C. Go
D. Goed

27. Who is the **main** character in a story?

- A. Narrator
B. Villain
C. Protagonist
D. Author

28. What do we call words that describe a noun?

- A. Verb
B. Adjectives
C. Nouns
D. Pronouns

29. What punctuation mark ends a question?

- A. Full stop
B. Comma
C. Question marks
D. Exclamation

30. What is the synonym for "happy"?

- A. Angry
B. lonely
C. Joyful
D. Sad



STARLIGHT ASSESSMENT TEST

COMPETENCY BASED EDUCATION

GRADI LA 5 2026

- KISWAHILI -

STR001 - 26

Jina la mtahiniwa: Nambari ya Tathmini:
 Jina la shule: Tarehe:

Soma mazungumzo yafuatayo kisha ujibu maswali yatakayofuata.

(Ni jioni, Malaika na ndugu yake Hekima wamo nyumbani. Mama yao anaingia huku amebeba hambo kila mmoja embe)

Mama: Hamjambo wanangu? Mwambaje?
Watoto: Hatujambo mama, hatuna la kuamba.
Malaika: Mama, asante kwa embe.
Mama: Njema nashukuru.
Hekima: Asante mama kwa embe (anaanza kuuma na kutafuna).
Malaika: (Akishuka) Hekima, mbona unakula embe kabla hujaliosha?
Mama: (Akigeuka upesi na kumwambia Hekima) Hekima, ni mara ngapi nimekuonya kukuhiyo tabia?
Hekima: Mara nyingi mama Nisamehe, nilisahau.
Mama: Siku nyingine usijaribu kula chochote hasa matunda ambayo hayajaoshwa.
Hekima: Naam, mama nisamehe, sitarudia.
Mama: Asante, Malaika kwa kuwa mwangalifu. Endelea vivyo hivyo.
Malaika: Karibu mama (anachukua embe la Hekima na lake, anaingia jikoni na kuyaosha)

- | | |
|--|---|
| 1. Mazungumzo haya yanafanyika wapi?
A. Nyumbani
B. Kanisani
C. Sokoni
D. Kazini | 4. Ni neno lipi kati ya haya si neno la heshima?
A. Nisamehe
B. Asante
C. Karibu
D. Njema |
| 2. Ni kweli kusema kuwa
A. Malaika ha Hekima ni pacha.
B. Hekima ni ndugu mkubwa wa Malaika.
C. Malaika ni ndugu mdogo wa Hekima.
D. Hekima ni ndugu mdogo wa Malaika. | 5. Kitendo ambacho Malaika anakitenda mwishoni mwa mazungumzo haya kinatuonyesha nini?
A. Hamjali nduguye
B. Anamjali nduguye
C. Hamjali mamaye
D. Anamchukua nduguye |
| 3. Kulingana na mazungumzo haya, Hekima alikuwa amekanywa tabia gani mara nyingi?
A. Kula chakula bila kunywa
B. Kula matunda bila kuyaosha | |

Kuna ndege wa aina ainati kama vile Korongo, Kasuku na njiwa. Kati ya ndege hawa wote mimi ninampenda kuku. Kuku wana rangi tofauti tofauti. Kuna kuku jike ambaye huitwa koo na kuku dume. Mtoto wa kuku huitwa kifaranga.

Kuku hula nafaka kama vile mahindi. Kuku wengine huachiliwa nje ili kujitafutia chakula kama vile wadudu na kuwala. Jioni huwa wanarudi kwenye kizimba chao.

Kuku anafaa kutunzwa vizuri asinyakuliwe na mwewe au mbwakoko. Apewe chakula, maji safi, makazi ili asipate magonjwa na wadudu. Kuku mizuri kwa sababu ana faida nyingi.

VIWANGO VYA KUTATHMINI

Kuzindisha Matarajio			Kufikia Matarajio			Kukaribia Matarajio			Mball na Matarajio	
KZ1	4.0	90-99	KF1	3.0	58-74	KK1	2.0	31-40	MB1	1.0 11-20
KZ2	3.5	75-89	KF2	2.5	41-57	KK2	1.5	21-30	MB2	0.5 1-10



6. Ndege wangapi waneta wakaka barafu hii?
 A. Wawili
 B. Wataatu
 C. Mmoja
 D. Wanne

8. Nyumba ya kuku huitwa
 A. kizimba
 B. zizi
 C. jikoni
 D. makazi

7. Kulingana na ufahamu huu, koo ni nani?
 A. Kuku wa kiume
 B. Mtoto wa kuku
 C. Sehemu ya mwili
 D. Kuku wa lake

9. Kuku anastahili kufanyiwa yote yafuatayo
 A. kupewa maji chafu
 B. kupewa maji safi
 C. kupewa chakula
 D. kupewa makazi

Soma ufahamu ufuatao kisha ujibu maswali wambāri ya 10 hadi 12.

Siku ya Jumatano mimi, mama yangu na kaka yangu tuliondoka sokoni. Sokoni tuliona watu wengi wakiwa katika shughuli zao za uuzaji na ununuzi. Tulienda katika kibanda, kimoja, hapo mama alinunua maembe, nyanya, machungwa na tikiti maji.

Tulienda kibanda cha pili, mama alinunua unga wa ngano na mafuta ya samli. Kwenye kibanda cha tatu, tulinunua karoti na kabeji. Tulipokuwa tukielekea kwenye vibanda vya ingūb, hamali mmoja alitokea ghafla na akaomba kusaidia mamangu kubeba mizigo wake.

10. Mwandishi wa habari hii alienda sokoni siku gani?
 A. Jumatano
 B. Jumatatu
 C. Jumatano
 D. Jumapili

12. Neno hamali linetunika katika ufahamu huu, bama hufanya kazi gani?
 A. Kuza bidhaa sokoni
 B. Kuza maji sokoni
 C. Kubeba watu mizigo
 D. Kulipisha nauli katika matatu

11. Katika kibanda cha tatu mama ya mwandishi alinunua nini?
 A. Machungwa
 B. Unga wa ngano
 C. Maembe
 D. Kabeji

Soma ufahamu ufuatao kisha ujibu swali la 13 hadi 15.

Katika familia ya Mzee Juma na Mama Amina, malezi bora yalikuwa msingi wa mafanikio ya watoto wao. Mzee Juma, mchoraji maarufu, alifundisha watoto wake umuhimu wa ubunifu na kujitolea kupitia sanaa. Mama Amina, mhasibu katika ofisi ya kijiji, alisisitiza elimu na kuwasaidia watoto wake masomoni. Watoto wao, Amani, Jamal na Zahara, walikuwa na vipaji vya kipekee, na familia iliweka kipaumbele katika kuwatia moyo na kuwasaidia kufikia malengo yao.

13. Msingi wa mafanikio ya watoto wa familia hii ulikuwa
 A. Wazazi wao
 B. Bidii yao
 C. Mwalimu
 D. Malezi bora

15. Mama Amina alikuwa anafanya kazi kama
 A. Mchoraji
 B. Mwalimu
 C. Mhasibu
 D. Mutiguzi

14. Familia hii Mzee Juma alikuwa na watoto wangapi kwa jumla?

WAWAZI		WATOTO	
A. Wataatu	B. Wawili	C. Wanne	D. Wataano
MB1	3-10	MB1	5-0
MB2	0-3	MB2	1-2

Chagua jibu mwafaka kujaza mapengo katika kifungu kifuatacho.

Mama au ukipenda 16 ni mzazi wa 17 katika familia. Yeye ndiye mara nyingi hujihusisha na 18 wa nyumbani. Mama huhakikisha 19 jikoni vimeoshwa na 20 pia zimeoshwa.

- | | | | |
|--------------|-----------|-------------|-------------|
| 16. A nyanya | B. baba | C. nina | D. shangazi |
| 17. A kiume | B. kike | C. kipekee | D. kitoto |
| 18. A usafi | B. uchafu | C. uchafuzi | D. uoshaji |
| 19. A chombo | B. viombo | C. vyombo | D. malazi |
| 20. A manguo | B. nguo | C. maguo | D. malazi |

21. Ni nomino ipi kati ya hizi hupatikana katika ngeli ya U-I?

- | | |
|--------|-----------|
| A. mti | B. miwani |
| C. uji | D. ugali |

22. Andika wingi wa: Mkeka umeanikwa.

- A. Mkeka umeanuliwa.
- B. Mikeka umeanikwa.
- C. Mkeka imeanikwa.
- D. Mikeka imeanikwa.

23. Nomino zituatazo ziko katika ngeli ya LI- YA isipokuwa

- | | |
|----------|-----------|
| A. embe | B. gazeti |
| C. jasho | D. dawati |

24. Umoja wa Vyakula vimeiva ni

- A. Vyakula vimeiva.
- B. Vyakula kimeiva.
- C. Chakula kimeiva
- D. Chakula vimeiva.

25. Kisawe cha tajiri ni

- A. maskini
- B. utajiri
- C. mlalaheri
- D. fukara

26. Kitenzi pika katika kauli ya kutendwa ni

- | | |
|-----------|----------|
| A. pikiwa | B. pikwa |
| C. pikika | D. pikua |

27. Kamilisha methali:

Umoja ni

- | | |
|-------------|------------|
| A. hasara | B. utajiri |
| C. kuungana | D. nguvu |

28. Hili ni umbo gani?



- | | |
|-------------|----------|
| A. Mstatili | B. Nyota |
| C. Kopa | D. Mraba |

29. Jibu Salamu sahihi:

Habari za asubuhi

- A. nzuri
- B. vyema
- C. salama
- D. zuri

30. Mtu akipatwa na msiba utamwambia

- | | |
|-----------|-------------|
| A. asante | B. makiwa |
| C. pole | D. samahani |


INSHA

Mama au ukipenda 16 ni mzazi wa 17 katika familia. **Andika insha kuhusu:** Yeye ndiye mzazi
 nyingi hujihusisha na 18 wa nyumbani. Mama huhakikisha 19 jikoni
 vimeoshwa na 20 pia zina **SHULEYU**

16. A. nyanya B. babu C. mima D. shangazi
 17. A. kiumbe B. kike C. kipekee D. kifoto
 18. A. usafi B. uchafu C. uchafuzi D. uoshaji
 19. A. chombo B. viombo C. vyombo D. malazi
 20. A. magno B. ngno C. magno D. malazi

21. Ni nommo ipi kati ya hizi huhakikama katika ngeli ya U-1?
 A. mii B. miwani C. riji D. ugali
 26. Kitenzi pika katika kauli ya kutendwa ni
 A. pikawa B. pikwa C. pikika D. pikwa

27. Kamilisha methali: Umoja ni
 A. hasara B. utajiri C. kuingana D. nguvu
 28. Hili ni umbo gani?
 A. Mkeka imeanikwa B. Mkeka imeanikwa C. Mkeka imeanikwa D. Mkeka imeanikwa



29. Nommo zilizotoa ziko katika ngeli ya II- YA isipokuwa
 A. embe B. gazeti C. jasto D. dawati
 A. Mstaji B. Nyota C. Kopa D. Mipa

30. Jibu Salamu sahihi: Hapari za asubuhi
 A. nzuri B. vyema C. salama D. zuri
 24. Umoja wa Vyakula vimevami
 A. Vyakula vimeva B. Vyakula kimeva C. Chakula kimeva D. Chakula vimeva
 25. Kiswe cha tajiri ni
 A. maskini B. utajiri C. mlalshari D. fakari

30. Mtu akiptwa na msiba utamwambia
 A. asante B. maskwa C. pole D. sambarani



STARLIGHT ASSESSMENT TEST

COMPETENCY BASED EDUCATION

GRADE 5 2026

STR001 - 26

- INTEGRATED SCIENCE -

Time: 1hr 15min

Learner's Name: Admission No:
 School: Date:

INSTRUCTIONS

- Write your name, school, admission number and date in the spaces provided above.
- Answer all questions in this paper.
- Circle the answer of the questions with multiple choices.

1. During a trip, Grade 5 learners took pictures of the following items. Which among them is a liquid?

- A. Smoke B. Stones
 C. Water D. Buildings

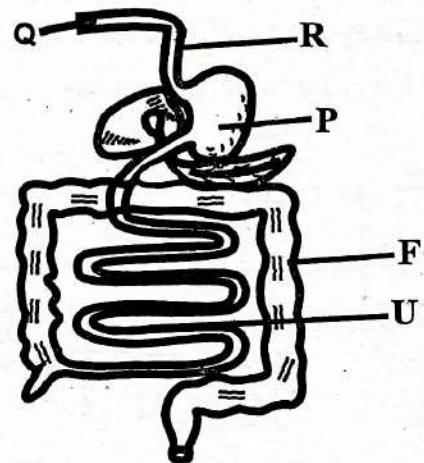
2. Juma was identifying characteristics of living things. Which of the following characteristics is for plants?

- A. They remove waste.
 B. They move.
 C. They respond to changes in the environment.
 D. They make their own food.

3. When handling plants, learners were guided to observe all the following precautions **except**

- A. smell on plants as they observe
 B. do not taste plants and leaves
 C. wear protective clothing
 D. wash hands after handling plants

The diagram below shows the human digestive system. Study it and use to answer questions 4 and 5.



4. Which part contains hydrochloric acid?

- A. R B. Q
 C. F D. P

5. Which is **wrongly** matched with its name?

- A. R - food pipe
 B. Q - oesophagus
 C. F - colon
 D. U - ileum


ASSESSMENT RUBRICS

Exceeding Expectation			Meeting Expectation			Approaching Expectation			Below Expectation		
EE1	4.0	90-99	ME1	3.0	58-74	AE1	2.0	31-40	BE1	1.0	11-20
EE2	3.5	75-89	ME2	2.5	41-57	AE2	1.5	21-30	BE2	0.5	1-10

6. Tashed used water used to rinse clothes to mop the house. Which method of conserving water is this?
- A. Recycling
 B. Reducing
 C. Harvesting
 D. Reusing

7. Which of the following statements is not true about solids?
- A. They occupy space.
 B. They have no definite shape
 C. They have definite volume
 D. They have definite mass

8. The diagram below shows a types of teeth.



Of the teeth above, which one is not a milk tooth?

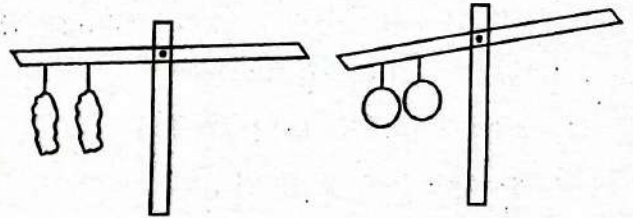
- A. i B. ii
 C. iii D. iv
9. Which type of force opposes motion?
- A. Friction B. gravity
 C. Push D. pull

10. Which one of the following is not a way of managing waste?
- A. Reducing B. Reusing
 C. Refilling D. Recycling

11. _____ helps us prevent ourselves from inhaling dust particles or poisonous gases.

- A. Goggles B. Face mask
 C. Dust coat D. Gloves

12. The set up below was carried out by Grade five learners. What were they trying to investigate?



- A. Gases occupy space
 B. Gases have mass
 C. Balloons have weight
 D. Matter occupies space

13. Which of the following is a non decomposable solid waste?

- A. Glass B. Food remains
 C. Banana peelings D. Leaves

14. The diagram below shows parts of a plant.



Which is the reproductive part of the plant?

- A. K B. Z
 C. R D. H

15. Which of the following is the main source of light on earth?

- A. Electricity
- B. Candles
- C. Stars
- D. Sun

AGRICULTURE & NUTRITION

16. The following materials can be used to make a compost manure **except**

- A. plastic paper
- B. maize stalk
- C. potato peelings
- D. leaves

17. Which one of the following is an advantage of compost manure?

- A. It pollutes the soil
- B. It makes soil colourful
- C. It adds fertility to the soil.
- D. It is bulky.

18. Which one of the following types of irrigation conserves water?

- A. Sprinkle irrigation
- B. Overhead irrigation
- C. Basin irrigation
- D. Drip irrigation

19. The following are fuels used at home **except**

- A. gas
- B. petrol
- C. kerosene
- D. charcoal


20. The following are ways of conserving fuel at home **except**

- A. using an improved jiko.
- B. turning off the stove when not in use.
- C. lighting a match stick before turning on the gas.
- D. refilling the gas cylinder

21. Brenda saw the following animals in a zoo. Which one is **not** a small animal that destroys crops?

- A. Squirrel
- B. Birds
- C. Hare
- D. Monkey

22. A farmer rears the following animal in his farm. Which of the following is the farmer **likely** to get from the animal?



- A. milk
- B. honey
- C. manure
- D. eggs

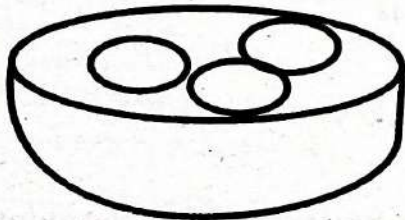
23. Which of the following trees can be grown from cuttings?

- A. Passion fruit
- B. Guava
- C. Ovacado
- D. Strawberry

24. Grade five learners were sowing tiny seeds. The sowed all the following seeds **except**

- A. kales
- B. carrot
- C. spinach
- D. beans

25. Weny, a school cook, prepares her eggs using the method below. Which cooking method is it?



- A. Deep frying
- B. Baking
- C. Boiling
- D. Shallow frying

26. Which of the following foods repairs worn out body tissues?

- A. Fats and oils
- B. Vitamins
- C. Proteins
- D. Carbohydrates

27. We should wash our hands regularly, especially after doing all the following **except**

- A. greeting your friend
- B. using the toilet
- C. eating
- D. handling rubbish


28. Mary used a soft cloth to remove dust from their table at home. Which of the activities below refers to what Gloria was doing?

- A. Mopping
- B. Dusting
- C. Rinsing
- D. Sweeping

29. The following items are used when making stitches **except**

- A. needle
- B. thread
- C. thimble
- D. yarn

30. Grace made the following stitches on a fabric. The stitches are called



- A. even stitches
- B. long stitches
- C. uneven stitches
- D. short stitches



STARLIGHT ASSESSMENT TEST

COMPETENCY BASED EDUCATION

GRADE 5 2026

STR001 - 26

- CREATIVE ARTS & SPORTS -

Time: 1hr 15min

Learner's Name: Admission No:
 School: Date:


INSTRUCTIONS

- Write your name, school, admission number and date in the spaces provided above.
- Answer all questions in this paper.
- Circle the answer of the questions with multiple choices.

1. Linet wants to improvise charcoal sticks. She will need all the following items **except**

A. metal tin B. green sticks
 C. charcoal D. knife

2. Linda drew the diagram shown below.



Which technique did she use?

- A. Shading B. Smudging
 C. Scrubbing D. Crayon etching

3. Patrick made a pictorial composition by cutting and pasting pictures. Which technique did he use?

A. Mosaic B. Collage
 C. Stippling D. Montage

4. Rosemary bought purple, green and orange flowers to an art class. Which class of colours did she bring?

A. Tertiary colours
 B. Primary colours
 C. Secondary colours
 D. Neutral colours

5. All the following letters are descenders **except**

A. y B. q
 C. d D. g

6. Malaika created the item below on a chart and asked her classmates to name it.



Who gave the correct answer?

- A. Tom: Value gradation strip
 B. Joy: Value strip
 C. Alex: Gradation
 D. Ronald: Shaded strip

ASSESSMENT RUBRICS

Exceeding Expectation			Meeting Expectation			Approaching Expectation			Below Expectation		
EE1	4.0	90-99	ME1	3.0	58-74	AE1	2.0	31-40	BE1	1.0	11-20
EE2	3.5	75-89	ME2	2.5	41-57	AE2	1.5	21-30	BE2	0.5	1-10

7. Which of the following tools can be used to paint?

- A. Brush
- B. Hammer
- C. Earpad
- D. Scissors

8. Coiling is a technique associated with

- A. leather shoes
- B. plastic buckets
- C. clay pots
- D. fabric

9. Grade 5 learners collected locally available materials to make a ball using macrame technique. Which one of the following is **not** a material they collected?

- A. Old clothes
- B. Carrier bags
- C. Wires
- D. Wrapping papers

10. All the following can be used to take photographs **except**

- A. camera
- B. smartphone
- C. desktop
- D. tablet

11. The line below was extracted in the national anthem. 'Nchi yetu ya Kenya, tunayoipenda'. Which stanza was it extracted from?

- A. Stanza 1
- B. Stanza 2
- C. Stanza 3
- D. Stanza 4

12. In which of the following occasions is the National Anthem sang?

- A. When naming a child
- B. Weddings
- C. When raising the national flag
- D. During the birth of a child

13. Which of the following is a mood that can be expressed while singing?

- A. Happy
- B. Laughing
- C. Smiling
- D. Sickness


14. During a music lesson, a teacher came to class carrying a kayamba. Kayamba is a musical instrument used by which community?

- A. Mijikenda
- B. Giriama
- C. Agikuyu
- D. Luo

15. A marimba produces sound when

- A. shaken
- B. hit
- C. bowed
- D. blown

16. Mr. Mwanzia drew the music instrument shown below.



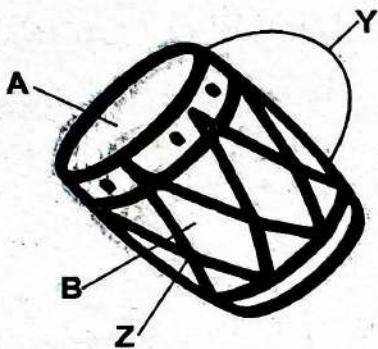
Name the musical instrument drawn above

- A. descant recorder
- B. chivoti
- C. nzumari
- D. zeze

17. Mulei a grade 5 learner was asked by his Creative Art teacher to state four examples of folk songs. Which of the answers below is **not** correct?

- A. Work folk songs
- B. Funeral folk songs
- C. Marriage folk songs
- D. Defamation folk songs

18. Grade 4 learners made the percussion musical instruments shown below.



The part marked A is called

- A. resonator
- B. membrane
- C. sling
- D. stand

19. Instrument that produce sound when hit or shaken are known as

- A. melodic
- B. non melodic
- C. percussion
- D. wind

20. Mr. Samuel drew the following music note symbol and asked his learners to name it. What is its correct name?

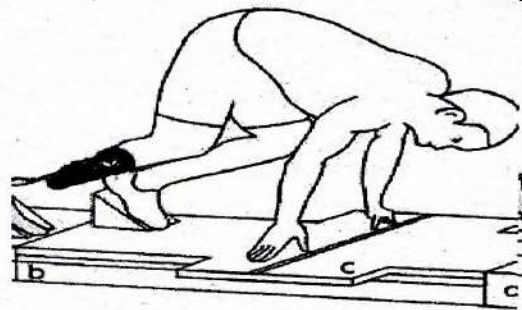


- A. Crotchet
- B. Quaver
- C. A pair of quavers
- D. Minim

21. Which of the following is not a passing skill in netball?


- A. Chest pass
- B. Flick pass
- C. Side pass
- D. Through pass

22. Name the type of start of race drawn below.



- A. stand start
- B. squat start
- C. medium start
- D. elongated

23. The following diagram illustrates a type of balance used in gymnastics. Which one is it?



- A. T-balance
- B. Head balance
- C. Crab balance
- D. Hand leg balance

24. The field of netball is divided into _____ parts.
- A. 2
 - B. 12
 - C. 10
 - D. 15
25. Ouma wanted to perform a sprint. He had to demonstrate the three techniques. Which one was **incorrect**?
- A. On your mark
 - B. Set
 - C. Move
 - D. Go
26. During a discussion on different shapes of different games, grade 4 learners of Highgate academy learnt that the field of netball is _____ in shape.
- A. rectangular
 - B. circular
 - C. triangular
 - D. square
27. Wisdom, an athlete in Grade 5 can use the medium start in all the following short races **except**
- A. 100m
 - B. 200m
 - C. 1500m
 - D. 400m
28. A teacher reminded the Grade four pupils to do all the following before running. Which one of the following did they not do?
- A. Wear appropriate clothes
 - B. Warm up before running
 - C. Clear the track
 - D. Be crowded and push one another when running.
29. Anita performed the following skills in gymnastics. Which one did she not perform?
- A. Crab balance
 - B. Elongated start
 - C. Side roll
 - D. Tank roll
30. In a game of netball, all the following skills are taught **except**
- A. kicking
 - B. passing
 - C. catching
 - D. shooting



STARLIGHT ASSESSMENT TEST

COMPETENCY BASED EDUCATION

GRADE 5 2026

STR001 - 26

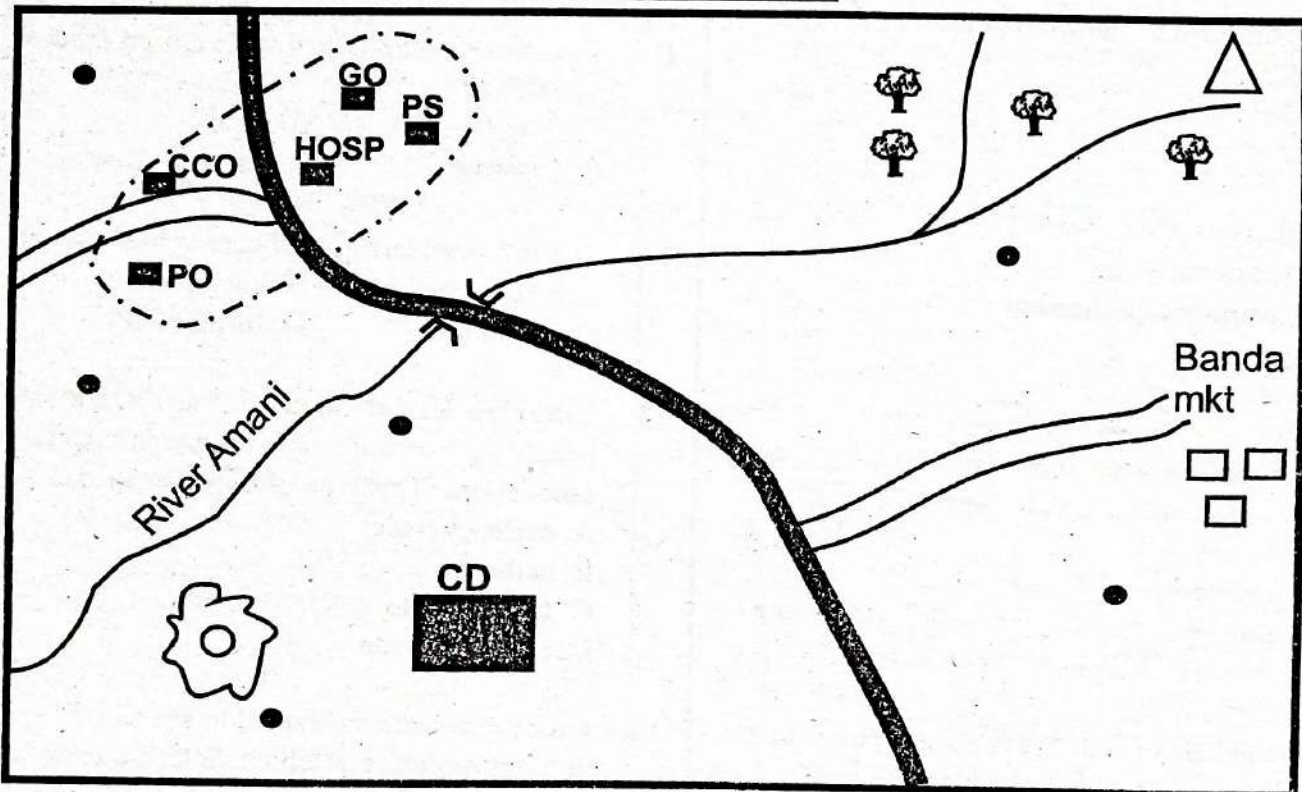
SOCIAL STUDIES & RELIGIOUS EDUCATION

Time: 1hr 15min

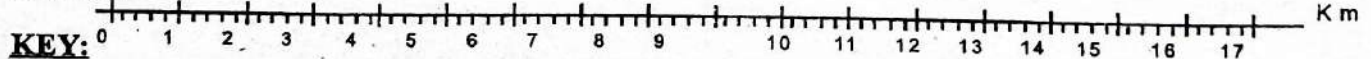
Learner's Name: Admission No:

School: Date:

MAKUTANO AREA



SCALE:



KEY:

	Tarmac road		Permanent houses
	Murram road		Quarry
	Forest	CCO	County commissioner's office
HOSP	Hospital	GO	Governor's office
	Hill	CD	Cattle dip
	Houses	PO	Post office

ASSESSMENT RUBRICS

Exceeding Expectation			Meeting Expectation			Approaching Expectation			Below Expectation		
EE1	4.0	90-99	ME1	3.0	58-74	AE1	2.0	31-40	BE1	1.0	11-20
EE2	3.5	75-89	ME2	2.5	41-57	AE2	1.5	21-30	BE2	0.5	1-10

Study the map of Makutano area and answer questions 1-7.

1. River Amani flows towards
A. North East B. South West
C. North D. South
2. Which is the highest point in Makutano area?
A. North B. South East
C. North East D. East
3. Which form of transport is used in Makutano area?
A. Vehicles B. Water
C. Air D. Road
4. Makutano area is headed by a
A. president
B. member of parliament
C. governor
D. senator
5. The following are economic activities carried out in Makutano area **except**
A. fishing
B. trading
C. mining
D. livestock keeping
6. The needle of a compass always points to the
A. East B. North
C. South D. West
7. What is interdependence of people?
A. People depending on animals.
B. Relationship between people.
C. People depending on each other.
D. People depending on resources.
8. _____ refers to the number of people living in a particular area.
A. Population
B. Population distribution
C. Settlement
D. Dependence

9. Which one of the following is **not** a natural resource?
A. Wild animals B. Money
C. Minerals D. Forests
10. Learners in Grade 4 were asked to mention built environments all the following are answers they gave **except**
A. mosque B. post office
C. river D. school
11. Which one of the following is **not** an aspect of culture?
A. Language B. Food
C. Clothing D. Games
12. The following are school core values **except**
A. hardwork B. integrity
C. discipline D. fortune
13. Grade four learners went to the market and saw people exchanging goods for goods to get other goods. This type of trade is called?
A. currency trade
B. barter trade
C. foreign trade
D. exchange trade
14. Grade four learners wanted to start an enterprise project in school. Which one of the following is the best project you would advise them to start?
A. rearing chicken
B. planting tea
C. rearing cattle
D. making shoes
15. Your friend has not finished her home work. She wants to copy from you before the teacher comes for the lesson. Which quality of a good citizen is your friend lacking?
A. Love
B. Humility
C. Kindness
D. Integrity

16. Juma dropped out of school to herd his father's cattle. Which child right has he been denied
- right to shelter
 - right to education
 - right to vote
 - right to expression
17. Which one of the following is a form of child abuse?
- Children being denied phones
 - Children doing chores at home
 - Children in Early Marriages
 - Children being given homework
18. Who is the head of the county government?
- governor
 - senate
 - Member of Parliament
 - Member of County Assembly
19. All the following are members of the county executive except
- Governor
 - deputy governor
 - senator
 - county cabinet secretary
20. Kenya has ___ counties.
- | | |
|-------|-------|
| A. 54 | B. 48 |
| C. 47 | D. 45 |
24. "Jesus Son of David, take pity on me" who said these words?
- Peter
 - a leper
 - Bartimaeus
 - Jairus
25. Grade 5 learners were asked to mention parables of Jesus. Which answer is not correct?
- Healing Bartimaeus
 - The Parable of the Mustard seed
 - friend at midnight
 - Lost coin
26. To do something bad to someone because they were bad to you is referred to as
- kindness
 - revenge
 - hate
 - jelousy
27. Mary was beaten by one of her classmates. As a friend you can advise her to report to
- chief
 - police officer
 - class teacher
 - pastor
28. According to Exodus 20:12 which commandment has a promise
- Do not steal
 - Obey your parents
 - Remember the sabbath day
 - Do not covet

CHRISTIAN RELIGIOUS EDUCATION

21. Grade five learners were told to name the birth place of Jesus. Which one of the following is the correct answer?
- | | |
|--------------|-------------|
| A. Bethlehem | B. Nazareth |
| C. Jerusalem | D. Jericho |
22. Which of the following prophets prophesied the birth place of Jesus?
- | | |
|-------------|----------|
| A. Isaiah | B. Amos |
| C. Jeremiah | D. Micah |
23. What was Zachariah doing in the temple when the Angel appeared to him?
- | | |
|------------|--------------------|
| A. Praying | B. Burning incense |
| C. Denying | D. Preaching |
29. Which one of the following is not a personal item that you can share
- handkerchief
 - inner wear
 - toothbrush
 - textbooks
30. Which fruit of the holy spirit encourages us to control our feelings?
- | | |
|-----------------|-----------------|
| A. Self control | B. Love |
| C. Patience | D. Faithfulness |

PART B

ISLAMIC RELIGIOUS EDUCATION

31. How many verses are there in Surah Fatiha?
A. Four B. Nine
C. Seven D. Five
32. The chapters of protection in the Qur'an are referred to as
A. Al-Thuluth/Qur'an
B. Al-Muawidhatein
C. Al-Qalbul Qur'an
D. Al-Sab'al Mathan
33. Before handling the holy Qur'an it is good to perform
A. Ghust
B. Tayanimum
C. Istinja
D. Wudhu
34. The Kafiruns liked worshipping
A. idols
B. the sun
C. creatures
D. animals
35. One thing that prophet Muhammad (S.A.W) was sent to show us as a good example is
A. good friends B. good behaviour
C. good knowledge D. good people
36. Saying 'Bismillah' mentions the name of
A. Allah (S.W.T)
B. Prophet Muhammad (SAW)
C. Angel Jibril (AS)
D. Food
37. Jaffary has made a Miswaak, he will use it together with
A. a toothpick B. soap
C. a toothpaste D. a lipstick
38. Attribute of Allah (S.W.T) "As-Salaam" means. The source of
A. riches B. faith
C. water D. peace
39. Everywhere we go, we move with two angels _____ and _____
A. Raqid and Atid
B. Istraiil and Israfiil
C. Munkar and Nakir
D. Jibril and Mikail
40. All these prophets are Ulul Azm except
A. prophet Nuh (A.s)
B. prophet Musa (As)
C. prophet Issa (As)
D. prophet Dawud (A.s)
41. Even the _____ can produce Najjis Mughalladha.
A. chicks
B. calfs
C. piglets
D. kittens
42. One of the things that nullify wudhu is
A. coughing
B. vomiting
C. sneezing
D. eating
43. In swalah we change from one posture to another when the Imaam says
A. Allahu Akbar
B. Sumia Llahu liman Hamida
C. Takbiir
D. Assalaam Aleikum
44. Muslims should choose the work to do in order to keep off from
A. borrowing
B. grazing
C. begging
D. splitting firewood
45. During Isra Wal Miiraj the prophet went through a town called
A. Madina
B. Taif
C. Jerusalem
D. Khaibar



STARLIGHT ASSESSMENT TEST

COMPETENCY BASED EDUCATION

GRADE 5 2026

MARKING SCHEME

KPSEA

STR001 - 26

MATHEMATICS ACTIVITIES	ENGLISH ACTIVITIES	KISWAHILI ACTIVITIES	INTERGRATED SCIENCE ACTIVITIES	CREATIVE ARTS & ACTIVITIES	SOCIAL STUDIES & RELIGIOUS ACT.
1. D	1. C	1. A	1. C	1. C	1. B <u>IRE</u>
2. C	2. B	2. D	2. D	2. B	31. C
3. A	3. C	3. B	3. A	3. D	32. B
4. D	4. C	4. D	4. D	4. C	33. D
5. B	5. D	5. B	5. B	5. C	34. A
6. B	6. D	6. B	6. D	6. A	35. B
7. A	7. A	7. D	7. B	7. A	36. A
8. C	8. C	8. A	8. D	8. C	37. C
9. C	9. C	9. A	9. A	9. C	38. D
10. D	10. A	10. C	10. C	10. C	39. A
11. D	11. A	11. D	11. B	11. B	40. D
12. A	12. C	12. C	12. B	12. C	41. C
13. D	13. B	13. D	13. A	13. A	42. B
14. B	14. D	14. D	14. A	14. B	43. C
15. A	15. A	15. C	15. D	15. B	44. A
16. B	16. C	16. C	16. A	16. A	45. C
17. D	17. B	17. B	17. C	17. D	
18. C	18. D	18. A	18. D	18. B	
19. B	19. A	19. C	19. B	19. C	
20. A	20. C	20. B	20. D	20. C	<u>CRE</u>
21. A	21. A	21. A	21. D	21. B	21. A
22. D	22. C	22. D	22. C	22. D	22. D
23. C	23. A	23. C	23. A	23. D	23. B
24. D	24. B	24. C	24. D	24. A	24. C
25. B	25. C	25. B	25. C	25. C	25. A
26. C	26. A	26. B	26. C	26. A	26. B
27. D	27. C	27. D	27. A	27. C	27. C
28. C	28. B	28. B	28. B	28. D	28. B
29. C	29. C	29. A	29. D	29. B	29. D
30. C	30. C	30. C	30. C	30. A	30. A