



# TARGETER WINGS

## MONITORING LEARNER'S PROGRESS

### GRADE 4 - 2026

### MATHEMATICS

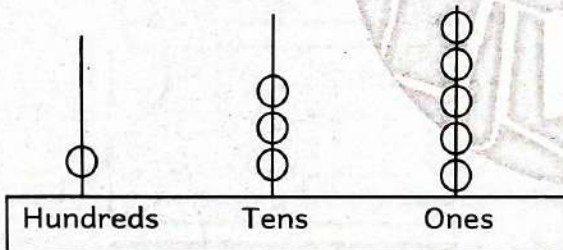
Wings  
001

**TIME: 1 Hour 20 Minutes**

1. There are 802 registered voters in a certain ward. Write the number of voters in words.
- A. Eighty hundred and two
  - B. Eight hundred and twenty
  - C. Eight hundred and two
  - D. Eight zero two

2. The number of loaves of bread produced by a factory in a certain year was 6983. What is the place value of digit 9.
- A. Tens
  - B. Nine
  - C. Thousands
  - D. Hundreds

3. Write the number represented on the abacus.






- A. 531
  - B. 135
  - C. 351
  - D. 513
4. Subtract 782kg from 934kg.
- A. 152kg
  - B. 1706kg
  - C. 262kg
  - D. 242kg

5. A tank contains 598 litres of water. How much water to the nearest 10 litres is in the tank?
- A. 690 litres
  - B. 590 litres
  - C. 600 litres
  - D. 608 litres

6. Which one is heavier 1kg of cotton wool or 1kg of sand?
- A. 1kg of cotton
  - B. None
  - C. Both
  - D. 1 kg of sand

7. Find a quarter of 36 apples.
- A. 40
  - B. 9
  - C. 6
  - D. 8

8. A milk vendor filled the containers below with milk. Which container holds the least amount of milk?



**Use the price list below to answer question 9 and 10**

**Ukwala's shop price list**

Item	Price
2kg packet of flour	shs. 134
1kg of sugar	shs. 147
1 pencil	shs. 20
A rubber	shs. 10
1 loaf of bread	shs. 88

9. Orengo bought 1kg of sugar and 1 loaf of bread. How much money did he pay for the items?  
 A. sh. 399  
 B. sh. 225  
 C. sh. 235  
 D. sh. 222
10. If Orengo gave the shopkeeper sh. 450, how much money did he get as his balance?  
 A. sh. 335  
 B. sh. 735  
 C. sh. 365  
 D. sh. 215
11. Musa a grade 4 learner measured the length from their classroom to the headteacher's office. Which unit did he use?  
 A. Kilograms  
 B. Litres  
 C. Metres  
 D. Minutes
12. Joy had 3 bags of oranges. Each bag had 4 oranges. How many oranges did she have altogether?  
 A. 7  
 B. 12  
 C. 21  
 D. 34

13. A water tanker carried 210 litres of water. What is the total value of digit 2?  
 A. Hundreds  
 B. 20  
 C. Zero  
 D. 200
14. Obinja made a rectangular cut-out and folded it to get 8 equal parts. What part of a whole did he make?  
 A.  $\frac{1}{8}$   
 B.  $\frac{1}{4}$   
 C.  $\frac{1}{2}$   
 D. 8
15. A grade four boy had the notes shown below in his piggy bank. How much money had he saved?



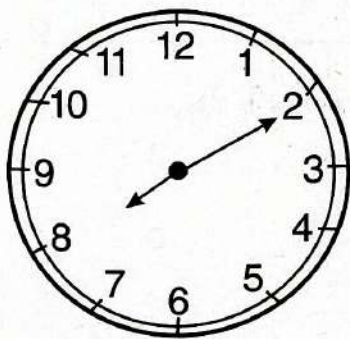
- A. sh. 150  
 B. sh. 100  
 C. sh. 600  
 D. sh. 50

16. Miss June a grade three teacher, celebrates her birthday in the eighth month of the year. Which month does she celebrate?
- June
  - September
  - August
  - October

17. During a P.E lesson grade four learners played a rope skipping game and counted as follows.  
76, 70, 64, \_\_\_\_\_, \_\_\_\_\_
- 68, 76
  - 58, 52
  - 60, 56
  - 62, 58

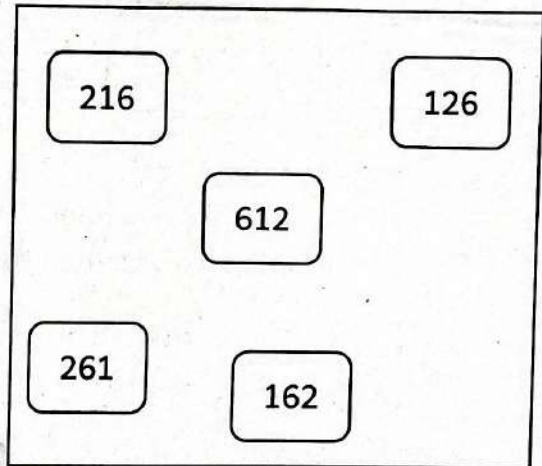
18. Isaac bought 54 oranges. He equally shared the oranges among his 6 brothers. How many oranges did each brother get?
- 48
  - 60
  - 9
  - 8

19. A farmer milked his cow at the time shown below. At what time did he milk his cow?



- 2 minutes past 8
- 10 minutes to 8
- 8 minutes to 2
- 10 minutes past 8


20. Grade four-learners from Muthaiga primary school wrote numbers on the number cards below. Arrange the number cards from the smallest to the largest.



- 126, 162, 216, 261, 612
- 612, 216, 261, 162, 126
- 126, 162, 261, 216, 612
- 612, 261, 216, 162, 126

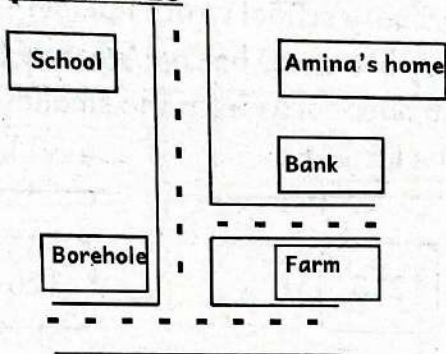
21. Achieng's home is 320 metres from school. Onyango's home to school is 215metres. How many metres does Achieng walk more than Onyango?
- 535 metres
  - 105 metres
  - 115 metres
  - 131 metres

22. A grade three learner used plasticine to model the shape below. What is the name of the shape modelled?



- Rectangle
- Oval
- Circle
- Square

**Use the map below to answer question 23**



23. To visit the farm from school, Mrs. Mwala will walk straight then turn to the \_\_\_\_\_
- left
  - straight
  - right
  - ahead
24. A trader took 708 mangoes to the market. On reaching the market 95 mangoes were spoilt. How many mangoes remained for sale?
- 793
  - 613
  - 713
  - 803
25. In Nairobi County, schools closed in the month of November and December. For how many days did the schools remain closed?
- 60 days
  - 62 days
  - 61 days
  - 91 days
26. A farmer took 3 hours 40 minutes to feed his cows. He took 2 hours 25 minutes to milk the cows. How much longer did he take to feed the cows than to milk the cows?
- 1 hour 15 minutes
  - 1 hour 25 minutes
  - 5 hours 65 minutes
  - 6 hours 05 minutes

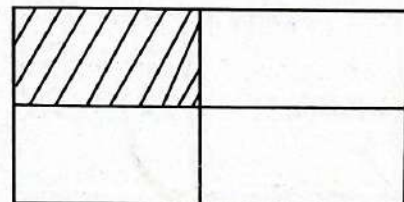
27. Grade four learners went for an educational trip to a snake park and saw a snake moving as shown below.



Which line did it form?

- Zigzag
  - Straight line
  - Curved line
  - Wavy line
28. The total number of teachers and learners in a school is 205. There are 12 teachers. How many learners are there in the school?
- 217
  - 193
  - 293
  - 213

29. Hesbon drew a rectangle and shaded it as shown below



Which fraction was not shaded?

- $\frac{1}{4}$
  - $\frac{3}{4}$
  - $\frac{2}{4}$
  - $\frac{3}{1}$
30. Mwende was sent to buy juice for her birthday party. Which unit did she use to buy the juice?
- Metres
  - Kilograms
  - Litres
  - Centimetres



# TARGETER WINGS

## MONITORING LEARNER'S PROGRESS


### GRADE 4 - 2026

Wings  
001

## ENGLISH LANGUAGE

TIME: 1 Hour

Read the following dialogue and answer questions 1 - 5.



Aisha : Hello Leila. 1 ?

Leila : I am fine, Aisha. 2 ?

Aisha : I am great. We 3 met a long time. How did you spend your holidays?

Leila : I went to Mombasa with my parents. We really had a good time there. And 4 ?

Aisha : I did not go anywhere. I stayed at home and played with my cousin.

Leila : Oh! 5 .

1. A. Good morning  
C. What are you

- B. How are you  
D. Who are you

2. A. What is your name  
C. Good afternoon

- B. Where are you going  
D. What about you

3. A. won't  
C. haven't

- B. can't  
D. hasn't

4. A. where did you go  
C. when is it today

- D. how do you do  
D. why are you here

5. A. I am sorry  
C. Excuse me

- B. Goodbye  
D. That's nice

**Read the passage below and use it to answer questions 6 to 9.**



Computers are machines that help us do many tasks. They can store information, play games and help us learn new things. We use computers in school to write, draw and find answers. People also use them at work and home. Computers connect us to friends and family through internet. If we don't use computers carefully, they can become harmful.

6. From the passage, computers can help us do the following except  
A. storing information  
B. sleeping better  
C. playing games  
D. learning new things
7. People cannot use computers at  
A. the playground  
B. work  
C. school  
D. home
8. When not used carefully, computers  
A. make our life easier  
B. can be harmful  
C. make our life more fun  
D. help us make friends
9. Choose the best title for the passage.  
A. Internet  
B. Friends and family  
C. Computers  
D. Machines

**Read the passage below and then answer questions 10 to 12.**



Saturday and Sunday are my days off. I don't go to school. I usually get up at 7a.m. I do morning exercises and go to the bathroom. We have breakfast at half past eight. After breakfast my parents and I go for a walk to the park. We play different fun games there. In the afternoon we have dinner. Every Saturday I help my mother in the house. Sometimes in the evenings, we go to the cinema. By half past ten in the evening, I go to bed.

10. According to the passage, the writer is off on  
A. Thursday  
B. Monday  
C. Friday  
D. Saturday
11. The following activities take place in the morning except  
A. going for a walk  
B. eating dinner  
C. doing exercises  
D. taking a bath
12. What time does the writer go to sleep?  
A. 10.30p.m.  
B. 8.30a.m.  
C. 7.00a.m.  
D. 7.30p.m.

Read the passage below and then answer questions 13 to 15.



One day, the sun and wind disagreed about who was stronger than the other. At last they agreed to have a competition.

“Here comes the man! Let us see who can make him take off his jacket,” said the sun. The wind agreed and chose to have the first turn. He blew as hard as he could. However, the man clung to his jacket even more tightly. Then it was the turn of the sun. At the first he shone gently. He went on shining brighter and hotter. Before long, the man took off his jacket and put it in his bag. The sun won!

13. The sun and the wind competed to find out who was  
A. cleverer  
B. stronger  
C. braver  
D. faster
14. Who won the competition?  
A. The sun  
B. The man  
C. The wind  
D. The sun the wind
15. When the sun shone brighter and hotter  
A. the man sat under a tree  
B. the man clung to his jacket  
C. the wind complained  
D. the man removed his jacket

**Read the passage below keenly. It contains blank spaces numbered 16 to 20. Fill in the spaces using the best alternative from the choices given.**

Handwashing 16 very important to stay 17. When we wash 18 hands, we remove 19 that can make us 20.

- |              |            |          |           |
|--------------|------------|----------|-----------|
| 16. A. be    | B. are     | C. is    | D. was    |
| 17. A. happy | B. healthy | C. alive | D. brave  |
| 18. A. my    | B. your    | C. his   | D. our    |
| 19. A. germs | B. mud     | C. dust  | D. poison |
| 20. A. dirty | B. clean   | C. sick  | D. dead   |

**For questions 21 to 30, fill in the blank spaces with the correct alternative from the choices given.**

21. Every boy \_\_\_\_\_ a kite.  
A. has  
B. does  
C. have  
D. do
22. She \_\_\_\_\_ her grandma every Saturday.  
A. visit  
B. visits  
C. visiting  
D. visitor
23. I cannot see my storybook. \_\_\_\_\_ might have take it.  
A. Something  
B. Nothing  
C. Someone  
D. No one
24. We have a flower garden. \_\_\_\_\_ flower garden is beautiful.  
A. My  
B. Our  
C. Their  
D. Her
25. These \_\_\_\_\_ are not crying anymore.  
A. child  
B. childrens  
C. chils  
D. children
26. She ran very fast \_\_\_\_\_ won the race.  
A. and  
B. than  
C. or  
D. but
27. We watched \_\_\_\_\_ moon in the evening.  
A. these  
B. a  
C. the  
D. an
28. \_\_\_\_\_ people came to the meeting.  
A. Much  
B. Many  
C. Most  
D. Each
29. Simon can use both right and \_\_\_\_\_ leg when playing football.  
A. left  
B. back  
C. front  
D. bottom
30. The old lady rested \_\_\_\_\_ a tree.  
A. on  
B. above  
C. through  
D. under





# TARGETER WINGS

## KUTATHMINI HATUA YA MWANAFUNZI

### GREDI 4 - 2026



## SHUGHULI ZA KISWAHILI

Muda: Saa 1

### KUSIKILIZA NA KUZUNGUMZA

**Soma kifungu kifuatacho kisha ujibu swali la 1 hadi 5.**

- Taya** : hujambo? Unapendeleaje mchezo huu?
- Maya** : 1. Siujui kabisa. Nimejifunza jana tu. Wewe je, umekula nini kabla ya kuja? Unaonekana mwenye nguvu.
- Taya** : (Akicheka) nimepata kula chakula cha simba, ndo maana nina nguvu namna hii.
- Maya** : Aisee! Chakula cha simba? Ndio mboga ama nyama?
- Taya** : Hapana, chakula cha simba ni moyo wa kujitahidi kila wakati.
- Maya** : Kweli kabisa, sasa naona utakuwa mshindani mkubwa.
- Taya** : (Akijisifia) hata hivyo usisahau kuwa kila simba anakosa usingizi.

1. Maya alikuwa amejifunza mchezo huo wanaozungumzia lini?  
A. Leo asubuhi  
B. Siku iliyopita  
C. Wiki iliyopita  
D. Mwezi uliopita
2. Taya anamaanisha nini kwa kusema kuwa "nimepata kula chakula cha simba"?  
A. Alikula chakula chenye Ladha kali  
B. Ana nguvu kwa sababu ya kujitahidi  
C. Alikula chakula cha Wanyama  
D. Alikula mboga na nyama
3. Katika mazungumzo haya, ni kweli kusema kuwa :  
A. Taya ni mdogo wa maya  
B. Vijana hawa wawili ni marafiki wa zamani  
C. Vijana hawa wawili hawakujuana kabla ya kukutana  
D. Maya alikataa kuzungumza na Taya
4. Jibu sahihi la maamkuzi katika sehemu ya 1 iliyoachwa ni?  
A. Marahaba  
B. Njema  
C. Hatujambo  
D. Sijambo
5. Maya alimtaja Taya kama mshindani wa aina gani?  
A. Mshindani shupavu  
B. Mshindani dhaifu  
C. Mshindani ambaye ni rafiki wa mbali  
D. Mshindani mwenye mchezo

**Soma kifungu kifuatacho kisha ujibu swali la 6 hadi 9**

Nyumbani ni makazi ambapo watu huishi na kutengeneza mazingira ya usalama, faraja, na utulivu. Ndani ya nyumba hupatikana sehemu mbalimbali kama vile sebuleni, chumba cha kulala, jiko, choo na bafu na wakati mwingine ghala. Kila sehemu hutumiwa kwa shughuli tofauti na huhifadhi vifaa na bidhaa zinazohitajika katika maisha ya kila siku.

Kwa mfano, sebuleni huwa na kocha, televisheni, meza, taa na zulia. Chumbani hupatikana kitanda, kabati, shuka na kioo. Jikoni kuna jiko, friji, sufuria, sahani, vikombe, vijiko na bidhaa ya chakula. Bafuni mara nyingi kuna sabuni, dawa ya meno, taalo, bomba la maji na vifaa vya usafi. Kila kifaa au bidhaa husaidia kufanya maisha ya nyumbani kuwa rahisi na yenye mpangilio.

6. Kulingana na ufahamu, nyumbani humaanisha nini kwa watu wengi?
  - A. Mahali pa kufanyia kazi tu
  - B. Makazi yetu ya kila siku ambapo sisi hupata usalama na utulivu
  - C. Mahali pa kulelea mifugo wetu
  - D. Mahali pa kuhifadhi vifaa pekee
7. Sehemu ipi ya nyumbani hutumiwa kupokea wageni na kupumzika?
  - A. Bafuni
  - B. Chumba cha kulala
  - C. Sebuleni
  - D. Jikoni
8. Kifaa kipi kilitajwa ambacho kinapatikana jikoni?
  - A. Kitanda
  - B. Friji
  - C. Zulia
  - D. Kioo
9. Bidhaa gani inapatikana bafuni kulingana na ufahamu?
  - A. Sofa
  - B. Sabuni
  - C. Kabati la nguo
  - D. Taa ya mezani

**Soma kifungu kifuatacho kisha ujibu swali la 10 hadi 12**

Asubuhi yenyewe jua lilikuwa hafifu, Sungura aliamka akiwa na uchovu wa safari ya jana. Alitembea polepole kuelekea mtoni ili kunywa maji. Njiani alimuona Kipepeo akipeperuka kwa shida juu ya maua yaliyokauka.

Sungura alitambua kwamba maua hayo hayakuwa na maua mapya kwa sababu mvua ilikuwa imechelewa. Akaamua kumpeleka Kipepeo kwenye sehemu ya msitu yenye majani mabichi na maua mapya ambayo hakuwahi kuyatembelea. Wote wakaenda kwa utaratibu, Sungura akiongoza.

Walipofika, Kipepeo akapata nafasi ya kunyonya utomvu na kupata nguvu mpya. Sungura alitulia chini ya kivuli cha mti na kutazama rafiki yake huyo mdogo akirejea katika uchangamfu wake.

Tangu siku hiyo, Kipepeo alimfuata Sungura mara kwa mara na wakawa marafiki wanaosaidiana bila kutarajia chochote kama malipo. Msitu ukawa mahali pao pa amani na urafiki.

10. Sungura alikuwa anaelekea wapi asubuhi iliyoelezwa kwenye kisa?
  - A. Kwenye shamba la mahindi
  - B. Kwenye mto kunywa maji
  - C. Kwenye pango lake kulala
  - D. Kwenye msitu kucheza

11. Ni tatizo gani lililokuwa likimkumba Kipepeo mwanzoni mwa kisa?  
 A. Alikuwa amejeruhiwa  
 B. Alikuwa amepotea  
 C. Alikuwa akipeperuka kwa shida kwa sababu ya kukosa utomvu  
 D. Alikuwa anatafuta rafiki
12. Sungura aliamua kumsaidia Kipepeo kwa njia gani?  
 A. Kumjengea kiota  
 B. Kumpa chakula kutoka nyumbani  
 C. Kumpeleka kwenye eneo lenye maua mapya  
 D. Kumfunza kukimbia

**Soma kifungu kifuatacho kisha ujibu swali la 13 hadi 15**

Siku moja Mwalimu Kalamoja aliingia darasani akiwa amebeba mfuko mdogo wa karatasi. Wanafunzi wote walidhani kuna Zawadi, lakini badala yake alitangaza kuwa mfukoni kulikuwa na kitu cha kuwasaidia wale wanaochelewa kufika shuleni. Wanafunzi wakaangaliana kwa hamu, wengine wakifikiria huenda ilikuwa saa au kifaa kingine cha ajabu.

Mwalimu alifungua mfuko polepole na kutoa kioo. Aliwaeleza kwamba mtu yeyote anayefika shuleni kuchelewa angejitazama humo ili kuona anavyoonekana wakati wa mbio za asubuhi. Darasani wanafunzi walicheka sana, hata wanafunzi waliokuwa wakichelewa wakajiona wakikimbia katika Mawazo yao. Tangu siku hiyo wengi wao walianza kufika mapema shuleni ili kuepuka kuonyeshwa kwenye kioo cha Mwalimu Kalamoja.

13. Mwalimu Kalamoja alitoka nini kutoka kwenye mfuko?  
 A. Saa mpya  
 B. Kioo  
 C. Kitabu  
 D. Kalamu
14. Wanafunzi walirekebisha tabia gani baada ya tukio hili?  
 A. Walianza kukaa nyuma darasani  
 B. Walianza kukaa mbele darasani  
 C. Walirudi nyumbani mapema baada ya shule  
 D. Walianza kufika shuleni mapema.
15. Wanafunzi walionyesha hisia zipi walipoona kioo?  
 A. Walikasirika  
 B. Walicheka sana  
 C. Walionyesha huzuni  
 D. Walilia darasani

**Jaza nafasi zilizoachwa kwa jibu sahihi**

Tunatumia masikio ili 16 sauti na maneno mbalimbali. 17 hutusaidia kugusa na kushika vitu. Ili kuona vizuri, tunategemea macho yetu ili kuona vitu 18 vinavyotuzunguka. Ili kunusa na kupumua, tunatumia 19 ambazo ziko katikati ya uso. Ili kusonga kutoka sehemu moja kwenda nyingine, tunategemea miguu inayotusaidia sana katika harakati 20.

- |                |           |            |             |
|----------------|-----------|------------|-------------|
| 16. A. kusikia | B. kutoa  | C. kuimba  | D. kufuata  |
| 17. A. Mikono  | B. Kinywa | C. Miguu   | D. Macho    |
| 18. A. chote   | B. vyote  | C. vingine | D. vyovyote |
| 19. A. vidole  | B. mikono | C. kinywa  | D. pua      |
| 20. A. yetu    | B. zetu   | C. chetu   | D. kwetu    |

**Jibu maswali yafuatayo kwa kufuata maagizo uliyopewa**

21. Jibu la maamkizi haya ni? Hamjambo? \_\_\_\_\_  
A. Asante  
B. Sijambo  
C. Hatujambo  
D. Njema
22. Yupi sio mnyama wa nyumbani?  
A. Kuku  
B. Tai  
C. Kondoo  
D. Batamzinga
23. Andika wingi wa : Karatasi  
A. Makaratasi  
B. Vikaratasi  
C. Karatasi  
D. Kikaratasi
24. Alama ifuatayo huitwaje?  
A. Kiulizi  
B. Kikomo  
C. Koma  
D. Herufi kubwa
25. Ipi ni sehemu ya mwili inayotumiwa kunusa?  
A. Macho  
B. Mdomo  
C. Pua  
D. Mkonono
26. Kanusha sentensi ifuatayo: Yeye anaandika insha  
A. Mimi siandiki insha  
B. Yeye haandiki insha  
C. Yeye anaandika barua  
D. Mimi ninaandika barua
27. Kipi ni kitendo katika sentensi ifuatayo: Baba anasoma gazeti sasa.  
A. Gazeti  
B. Baba  
C. anasoma  
D. Sasa
28. Kinyume cha keti ni  
A. simama  
B. lala  
C. tembea  
D. amka
29. Kamilisha sentensi ifuatayo:  
Tunu amesimama \_\_\_\_\_ barabara.  
A. juu ya  
B. kando ya  
C. chini ya  
D. baina ya
30. Umoja wa sentensi ifuatayo ni:  
Vitabu vyetu vimesahihishwa  
A. Kitabu changu kimesahihishwa.  
B. Kitabu chetu kimesahihishwa  
C. Kitabu changu vimesahihishwa  
D. Vitabu vyangu vimesahihishwa



# TARGETER WINGS

KUTATHMINI HATUA YA MWANAFUNZI

**GREDI 4 - 2026**

**KISWAHILI : INSHA**

Wings  
001

**Muda: Dakika 40**

**(Alama 10)**

**Andika insha kuhusu:**

**MWALIMU WANGU**

# TARGETER WINGS

## MONITORING LEARNER'S PROGRESS

### GRADE 4 -2026

#### CREATIVE ARTS



**TIME: 1 Hour 40 Minutes**


1. Grade four learners were asked to name an animal that moves through galloping. Who among the following learners gave the **correct** answer?

A. Benard - Hen  
B. Daniel - Snake  
C. Christa - Tortoise  
D. Juma - Horse

2. Naomi was skipping a rope. Which pairs of her body parts did she **mainly** use while skipping the rope?

A. Legs, stomach  
B. Hands, waist  
C. Hands, legs  
D. Head, stomach

3. The instrument drawn below is played by which technique?



A. Blowing  
C. Shaking  
B. Bowing  
D. Hitting

4. The following are ways of creating a rhythm except

A. sitting  
C. clapping  
B. snapping  
D. tapping

5. How many colours are there in the Kenya National flag?

A. 6  
C. 4  
B. 3  
D. 5

6. Which of the games can be played through pulling and pushing one another?

A. Running  
C. Swimming  
B. Football  
D. Tug of war

7. Which of the following items is **not** an example of an ornament?

A. Shield  
C. Necklace  
B. Bracelet  
D. Anklet




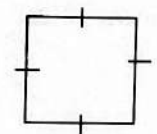
8. The highness or lowness of sound in a song is known as

A. tempo  
C. volume  
B. rhythm  
D. pitch

9. Which of the following is found in the second line of the first stanza of the Kenya National Anthem?

A. With hearts both strong and true.  
B. Bless this our land and nation.  
C. May we dwell in unity.  
D. Plenty be found within our borders.

10. Which of the following shapes in an oval?

A.   
C.   
B.   
D. 

11. Jerry wanted to mix two colours. Which of the methods below would be **most** suitable to mix the colours?





A. Dropping  
B. Colouring  
C. Painting  
D. Spraying

12. Which of the following is a melodic percussion instrument?


A. Marimba  
B. Shakers  
C. Rattles  
D. Drum





13. Grade four learners were asked to draw pictures of drums. They used all the following items to draw **except**

A. drawing paper  
C. pencil  
B. crayons  
D. green sticks

14. Which of the following is used to apply paint on a dry surface?  
 A. Crayon                      B. Pencil  
 C. Brush                        D. Straw
15. Nyangile was pasting pictures in his portfolio. Which of the following would he use to paste the pictures?  
 A. A pair of scissors    B. Glue  
 C. Water                        D. Paint
16. Kayamba is a Kenyan percussion musical instrument that is played through which technique?  
 A. Plucking                    B. Bowing  
 C. Shaking                    D. Blowing
17. Grade four learners want to cut green sticks for making charcoal sticks. Which of the tools below will be suitable in cutting the sticks?  
 A. Sharpener                B. Knife  
 C. Broken glass            D. A piece of metal
18. The Kenyan National Anthem was composed in how many languages?  
 A. 4                              B. 1  
 C. 3                              D. 2
19. Which of the following items can be modelled using soil?  
 A. Pot                            B. Water  
 C. Basket                      D. Rope
20. Which of the following musical instruments is a marimba?  
 A.                       B.   
 C.                       D. 
21. Maria wanted to make a necklace but she realised that she was not having beads. Which of the following would she use instead of beads?  
 A. Needles                      B. Seeds  
 C. Wire                         D. Tissue paper
22. The idea of making something from what is available in the local environment is known as  
 A. drawing                      B. buying  
 C. generating                D. improvising
23. Which of the following parts of a drum is hit to produce sound?  
 A. Sling                         B. Membrane  
 C. Tuning laces              D. Open end

24. Which of the following is not a material that can be used to make a shaker?  
 A. Metallic bottle tops  
 B. Y- shaped stick  
 C. Wires  
 D. Papers
25. Study the following picture and identify the skill being displayed.




- A. T-balance  
 B. V-balance  
 C. Egg roll  
 D. lean back balance
26. Mbone, a grade four learner drew an Isikuti. From which Kenyan community did the instrument originate?  
 A. Giriama                      B. Luo  
 C. Luhya                        D. Dawiola
27. The charcoal sticks can be used to shade which colour on the Kenya National flag?  
 A. Blue                         B. Green  
 C. Black                        D. Red
28. The following are ways of playing a percussion instrument **except**  
 A. bowing                        B. shaking  
 C. hitting                        D. scraping
29. Physical exercises helps our bodies to be  
 A. weak                         B. tired  
 C. sick                          D. strong
30. Which one of the following is an irregular shape?  
 A.                       B.   
 C.                       D. 

31. The technique of art that has been used to create tonal variation on the instrument below is known as



- A. painting                      B. smudging  
 C. drawing                      D. tinting

32. Aleka was playing a drum. She noticed that the sound produced was **not** appealing to the ears. What was she to do to the drum to get a good sound?
- Use several sticks at a time.
  - Wash the drum.
  - Tune the drum.
  - Put the drum on the table.
33. Which one of the following is a safety precaution while performing a forward roll?
- Practising under the supervision of the teacher.
  - Requesting friends to push you.
  - Practising on stony surface.
  - Engaging on dangerous activities that you watch on the television.
34. Grade three learners are planning for a swimming lesson. Which of the following water bodies is safe for swimming?
- Deep river
  - Swimming pool
  - Ocean
  - Dam
35. Jared wanted to improvise skipping rope. Which of the following materials will he **not** use?
- Wooven bags
  - Old piece of cloth
  - Sisal fibre
  - Manila paper
36. Identify the line drawn below.

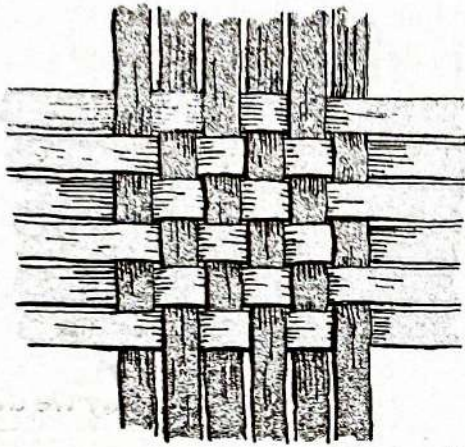


- Spiral line
- Wavy line
- Zigzag line
- Curved line

37. The following are importance of songs **except**
- to educate
  - to show unity
  - for enjoyment
  - to spread messages of hatred
38. Which of the following materials can be used in block printing?
- Maize cob
  - Dry leaf
  - Crayon
  - Pencil
39. The following are directions that can be made while skipping **except**
- backward
  - upward
  - forward
  - right
40. In which one of the following occasions is the Kenya National flag **not** hoisted?
- National holidays.
  - School assemblies.
  - When a school gets a new headteacher
  - Head of states visits.
41. Why is it important to clean the painting brush after painting?
- So that your friends can borrow it.
  - So that it cannot get lost.
  - To make it look new.
  - To make it last long.
42. Ambitho was asked by her friend to create a song using long and short sounds. Which of the following is the longest sound from what she created?
- taa-aa-aa-aa
  - taa-aa
  - ta-te
  - taa
43. Which of the following materials cannot be used when making a collage pictorial composition?
- Papers
  - Sheet of metal
  - Buttons
  - Coloured ribbons

44. During a song performance, the singers accompanied their performance with some string instruments. The instruments made the performance
- dull
  - more enjoyable
  - more hurting
  - boring

45. Study the diagram below.



Which technique has been used to create the item above?

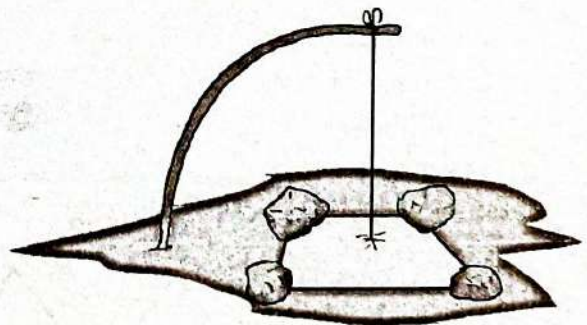
- Modelling
  - Painting
  - Weaving
  - Sculpturing
46. The following are factors to consider when performing round songs **except**
- posture
  - clarity of words
  - accuracy of time
  - ornaments

47. Grade three learners were learning about the importance of water safety awareness. Which of the following is one of the reasons they came up with?
- To encourage drowning
  - To prevent dangers that might cause death.
  - Encourages laziness.
  - Encourages dangerous games in water.

48. Which of the following is an example of a round song.
- Tushangilie Kenya.
  - Happy birthday to you.
  - Yesu anipenda sana.
  - Row, row, row your boat.

49. Which of the animals below can provide a skin for making a drum?
- Cow
  - Chicken
  - Pig
  - Duck

50. Study and identify the string instrument shown below.



- Mouthbow
- Wandindi
- Ground bow
- Flute



# TARGETER WINGS

## MONITORING LEARNER'S PROGRESS

### GRADE 4 - 2026

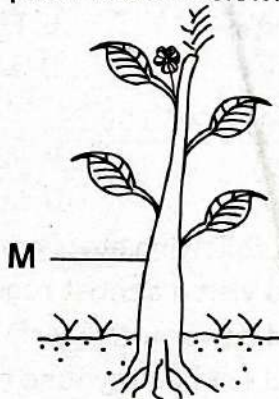
### INTEGRATED SCIENCE

Wings  
001

TIME: 1hr 40 mins

#### SCIENCE AND TECHNOLOGY

- Which one is a characteristic of plants?
  - They breathe using lungs.
  - They make their own food.
  - They move from place to place.
  - They give birth to young ones.
- Which external part of a plant hold the plant firmly in the soil?
  - Stem
  - Leaves
  - Roots
  - Flower
- Which one of the following is a function of the part of plant shown below.



- Absorbing water
  - Making food
  - Transporting water
  - Holding the plant
- Learners were discussing importance of plant leaves. Which one of the following would you pick as one of the **main** functions of the leaves?
    - Making food
    - Storage of food
    - Supporting the plant
    - Taking water from the soil
  - Which one of the following is a good way of taking care of plants?
    - Cutting the leaves.
    - Not watering the soil.
    - Removing weeds around the stem.
    - Putting a dark shade over the plants.
  - Three of the following are reasons of caring for plants except one. Which **one** is it?
    - Plants are the main source of food.
    - Plants provide oxygen that we breathe.
    - Plants make our environment beautiful.
    - Plants compete with animals for space in the environment.
  - Three of the following are characteristics of animals as living things except one. Which **one** is it?
    - They grow.
    - They make food.
    - They respond to changes in the environment.
    - They reproduce.
  - Which pair of animals given consists of vertebrates **only**?
    - Millipede and cockroach.
    - Bee and snake.
    - Dog and rabbit.
    - Snail and frog.
  - Which of the following **best** describes a vertebrate?
    - They lack backbone.
    - They give birth.
    - They have a backbone.
    - They live on land.
  - Which one of the following is a good practice when caring for animals?
    - Giving them enough food.
    - Beating them when they destroy crops.
    - Tying them on the leg while feeding.
    - Keeping them in overcrowded shed for warmth.

11. Which one is **not** a way of managing waste?
  - A. Reusing waste
  - B. Producing waste
  - C. Recycling waste
  - D. Reducing waste
12. Which of the following wastes can be used to make shakers?
  - A. Glass
  - B. Plastic bottles
  - C. Old papers
  - D. Bottle tops
13. Grade 3 learners want to collect waste in the school compound. Which of the following will they wear on their hands to protect the hands?
  - A. Gloves
  - B. Goggles
  - C. Gumboots
  - D. Watch
14. The picture below shows a method of making water clean.



The method is called

- A. decanting
  - B. filtration
  - C. boiling
  - D. cooling
15. A seedling kept without water for a week begins to wilt. What is the **main** reason?
    - A. Water helps the plants to breathe.
    - B. Water kills nutrients.
    - C. Water removes dust from leaves.
    - D. Water helps the plant to grow big.
  16. A goat kept in a dirty wet pen becomes sick. Which care was **not** provided?
    - A. Enough light
    - B. Clean shelter
    - C. Balanced diet
    - D. Enough exercise
  17. Which one is **not** a use of heat?
    - A. Cooking food
    - B. Ironing clothes
    - C. Washing clothes
    - D. Drying grains

18. Which one is **not** a way of keeping safe when dealing with sources of heat?
  - A. Not putting a lighting candle near bed.
  - B. Not playing with fire.
  - C. Touching fire with dry hand.
  - D. Not staying in the sun for long.
19. Why is washing hand before eating important for the digestive system?
  - A. It helps the food to be digested well.
  - B. Helps the food to be soft.
  - C. Prevents germs from entering the body.
  - D. Makes the food more nutritious.
20. Which one of the following is **not** a reason why we should care for animals?
  - A. Wild animals attract tourists.
  - B. Termites destroy wood.
  - C. Bees help in pollination.
  - D. Sheep provide us with meat and wool.
21. Which one is **not** a source of heat?
  - A. Kerosene stove
  - B. Firewood
  - C. Gas cooker
  - D. Moon
22. Which one is a living thing?
  - A. Soil
  - B. Wood
  - C. Onion plant
  - D. Stone
23. Which of the following statements is **false**?
  - A. We should visit a dentist regularly.
  - B. We should deworm regularly.
  - C. We should eat healthy food regularly.
  - D. We should not exercise regularly.
24. Which one is **not** a safety precaution that one should observe when handling plants?
  - A. Do not touch or smell plants.
  - B. Do not taste plant leaves.
  - C. Do not wear protective clothing.
  - D. Always wash your hands after handling plants.
25. Which characteristic of plants is when a plant produces flowers and seeds?
  - A. They respond to changes in the environment.
  - B. They reproduce.
  - C. They grow.
  - D. They feed.

## AGRICULTURE AND NUTRITION

26. Grade 4 learners wanted to clean the school compound. They used the tool below. It is called a \_\_\_\_\_



- A. panga                      B. jembe  
C. trowel                      D. slasher

27. Tite has a kitchen garden at home. He has planted the following vegetable.



What is the name of the vegetable he has in his garden?

- A. Cabbage                      B. Kales  
C. Spinach                      D. Carrot

28. What food protects us against diseases?

- A. Carbohydrates              B. Vitamins  
C. Fats                              D. Proteins

29. What is the name of this fruit?



- A. Melon                              B. Banana  
C. Pineapple                      D. Apple

30. Which type of soil feels rough between fingers?

- A. Sand                              B. Clay  
C. Loam                              D. Silt

31. This item is used for watering crops.



It is called a \_\_\_\_\_

- A. basin                              B. bucket  
C. watering can                      D. bottle

32. The animal below is used for transport at home.



It is called a \_\_\_\_\_

- A. camel                              B. cow  
C. donkey                              D. horse

33. The boy below is practising good grooming.



What practice is he practising?

- A. Combing hair                      B. Washing hands  
C. Cutting nails                      D. Brushing teeth

34. Grade 4 learners were asked to clean their classroom. They used all the following material **except**


- A. broom                              B. dustbin  
C. mop                              D. knife

35. Jane realised that her garden has weeds.

Which practice did she do to remove weeds?

- A. Weeding                              B. Watering  
C. Mulching                              D. Gapping

36. This animal is kept at home.



It gives us \_\_\_\_\_

- A. wool                              B. milk  
C. pork                              D. beef

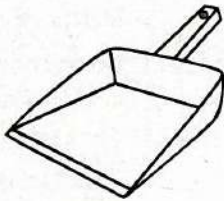
37. Which is the **best** type of soil for growing maize?

- A. Clay
- B. Sand
- C. Loam
- D. Silt

38. What nutrients do we get from fruits?

- A. Proteins
- B. Vitamins
- C. Fats
- D. Carbohydrates

39. This item is used for collecting dirt.



It is called a \_\_\_\_\_

- A. dustbin
- B. dustpan
- C. broom
- D. mop


40. We cut thread using a \_\_\_\_\_

- A. razor blade
- B. pair of scissors
- C. knife
- D. panga

41. One of the following is a wild animal that destroys our crops in the farm. Which **one** is it?

- A. Monkey
- B. Goat
- C. Chicken
- D. Sheep

42. This item is used to scoop soil when constructing an organic waste pit.



It is called a \_\_\_\_\_

- A. trowel
- B. panga
- C. shovel
- D. jembe

43. We plant \_\_\_\_\_ in the soil for them to germinate.

- A. sticks
- B. water
- C. seeds
- D. weeds

44. The following are **body building** foods. Which one is **not**?

- A. Meat
- B. Eggs
- C. Fish
- D. Maize

45. The following cleaning item was made by a grade 4 learner.



It is called a \_\_\_\_\_

- A. mop
- B. duster
- C. rug
- D. clothe

46. Which material is **not** good for making compost manure?

- A. Wood ash
- B. Pieces of glass
- C. Kitchen waste
- D. Animal waste

47. Young plants are called


- A. seedlings
- B. crops
- C. seeds
- D. trees

48. The animal below gives us \_\_\_\_\_



- A. milk
- B. honey
- C. meat
- D. pork

49. This item is used for digging.



It is called a \_\_\_\_\_

- A. slasher
- B. panga
- C. jembe
- D. spade

50. Which one of the following foods is **not** good for our teeth?

- A. Carrots
- B. Milk
- C. Sugarcane
- D. Chocolate

# TARGETER WINGS

## MONITORING LEARNER'S PROGRESS

### GRADE 4 - 2026



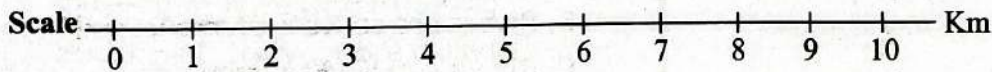
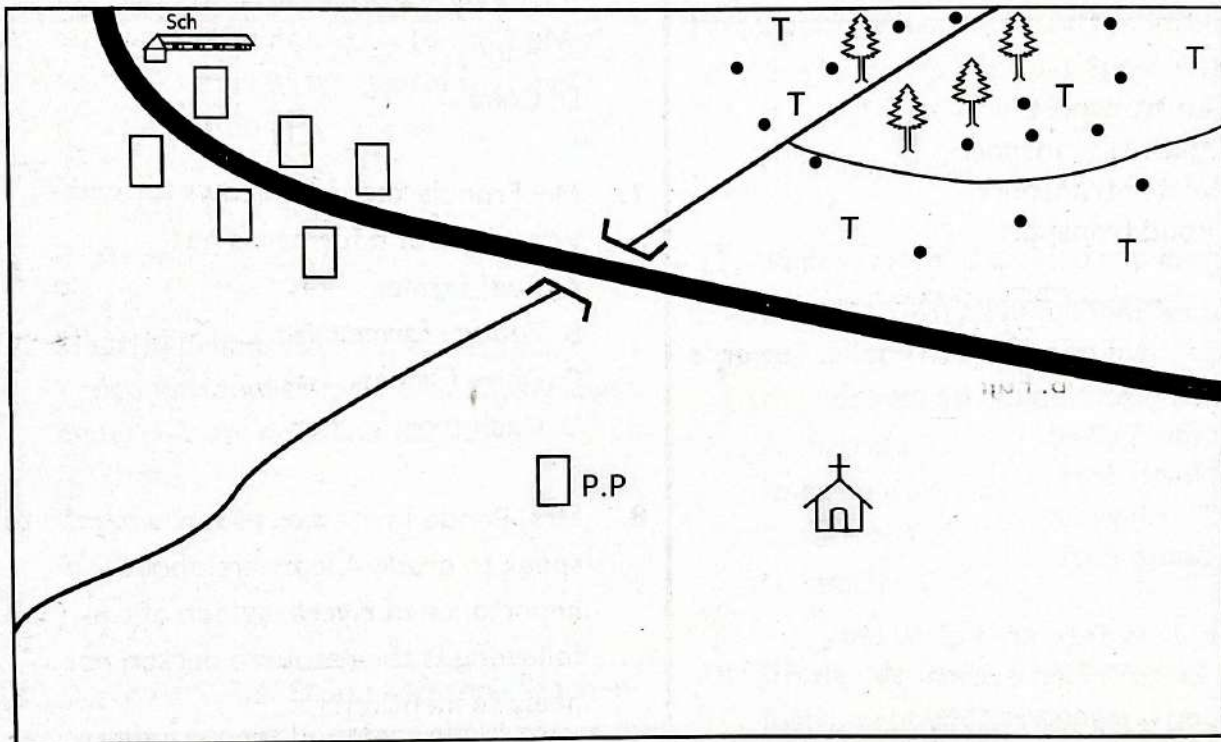
Wings  
001

## SOCIAL STUDIES/RE










**TIME: 1 Hour 40 Minutes**

### SOCIAL STUDIES

#### TETU AREA



**KEY**









	School		Police post		Tarmac road
	Town		Forest		Settlement
	Church		Tea farm		Bridge

**Use the map of Tetu area to answer questions 1 to 4 below**

- The highest point in Tetu area is likely to be \_\_\_\_\_.
  - at the town
  - near the church
  - at the tea growing area
  - near the school
- A group of Grade 4 learners were studying means of transport in Tetu area. Which of the following did they identify as the main means of transport in the area?
  - Air transport
  - Railway transport
  - Water transport
  - Road transport
- Pastor Shane moved from the church to the school to preach to pupils. Towards which direction did he move?
  - North West
  - North East
  - South West
  - South East
- People in Tetu area grow tea \_\_\_\_\_.
  - for their home use
  - for firewood
  - to feed their animals
  - for sale

**Grade 4 learners in Milimani school observed weather in four days and made the following chart. Use the weather chart to answer questions 5 and 6**

**Weather Chart**

Day	Morning	Afternoon
Monday		
Tuesday		
Wednesday		
Thursday		

- Which would be the best day for Josphat to wash his clothes?
  - Monday
  - Tuesday
  - Wednesday
  - Thursday
- Which of the following describes the weather on Tuesday morning?
  - Rainy
  - Windy
  - Sunny
  - Calm
- Mr. Francis keeps five cows for milk. What kind of a farmer is he?
  - Beef farmer
  - Poultry farmer
  - Dairy farmer
  - Cash crop farmer
- Mrs. Pendo invited a resource person to speak to grade 4 learners about the importance of rivers. Which of the following is the resource person not likely to mention?
  - Rivers can act as boundaries
  - Rivers are sources of sand
  - Rivers can lead to flooding
  - Rivers can be a source of fish.
- Mr. John wants to cross a busy road at a point where there are traffic lights. He should cross the road when the lights turn
  - green
  - red
  - orange
  - white.

10. Grade 4 learners in Wema primary found a young gazelle that was abandoned by its parents. Where should this young animal be taken for care?
- A. Animal orphanage
  - B. A national park
  - C. A game reserve
  - D. National archive
11. Mr. John taught his grade 4 class about physical features. Which one of the following is he not likely to have given as an example of a physical feature?
- A. A mountain
  - B. A valley
  - C. A lake
  - D. A road
12. Maarifa primary school hoists the Kenya national flag on Mondays. How many colours does the flag have?
- A. Three
  - B. Four
  - C. Five
  - D. Six
13. During a Social Studies lesson, Teacher Jasmine taught her class about rivers. Rivers that have water flowing throughout the year are called
- A. seasonal rivers
  - B. major rivers
  - C. waterfalls
  - D. permanent rivers
14. Julia noted that in their county, there is a police station. The main duty of the police is to
- A. punish law breakers
  - B. arrest thieves
  - C. maintain law and order
  - D. control community leaders
15. Isaac was driven to school by her mother. They passed through an area where many trees were growing. Such an area is called a
- A. mountain
  - B. forest
  - C. farm
  - D. game park
16. Places where homes of people are far apart are said to be
- A. densely populated
  - B. sparsely populated
  - C. rural areas
  - D. urban areas
17. James watched a video clip and saw some men who were arrested by the police for killing wild animals to benefit themselves. Such people are called
- A. hunters
  - B. game wardens
  - C. terrorists
  - D. poachers
18. Grade 4 learners in Bidii school made an instrument which they used to show the direction of places. Such an instrument is called a
- A. compass
  - B. toy
  - C. kite
  - D. map
19. School learners are required to have values. Which one of the following is not a value?
- A. Obedience
  - B. Respect
  - C. Humility
  - D. Fear

20. Emma has the following relatives in their family. Who among them is **not** a member of the nuclear family?
- Cousin
  - Mother
  - Brother
  - Father
21. Grade 4 learners were asked to name the current president of Kenya. Who gave the correct answer?
- Juma- Daniel Arap Moi
  - Jane- William Ruto
  - Newton- Uhuru Kenyatta
  - Shirleen - Mwai Kibaki
22. The person in charge of a school is called a
- Senior teacher
  - Head teacher
  - Learners' president
  - Class teacher
23. Mohammed is a Muslim. His special place of worship is a
- Mosque
  - Temple
  - Church
  - Mountain
24. Grade 4 learners had gone for a class trip. They saw many people who had come from other countries to see Kenya's wildlife. Such people are called
- guests
  - strangers
  - whitemen
  - tourists
25. Your county has received too much rainfall. Such rainfall can cause
- flooding
  - drought
  - famine
  - a very good harvest of crops
26. Rehema wanted to model a pot. The best soil for her to use would be
- sandy soil
  - loam soil
  - clay soil
  - soil from tarmac road
27. Amina is planning to travel. She realizes that the weather of the day is cold. What kind of clothes should she wear?
- Heavy clothes
  - Light clothes
  - A T-shirt and a skirt
  - A dress
28. Every county in Kenya is subdivided into major units called
- villages
  - sub-counties
  - towns
  - shopping centres
29. A large depression occupied by water is called a
- lake
  - river
  - mountain
  - valley
30. People who walk on foot along roads are called
- passengers
  - pedestrians
  - travelers
  - cyclists

**C.R.E**

31. Grade four learners of Bidii School were discussing about creation. Who gave the **correct** answer about creation?
- A. John - God hates human beings.
  - B. Jane - All things were not created.
  - C. James - Human beings were created in the image of God.
  - D. Joy- We should not protect God's creation.
32. Your CRE teacher told you to name the son of Abraham. Which answer did you give?
- A. Moses
  - B. John
  - C. Paul
  - D. Isaac
33. In groups, you were discussing about the Bible. Your friend asked you to tell him how many books are in the Old Testament. Which answer did you give?
- A. 66
  - B. 39
  - C. 27
  - D. 72
34. Your CRE teacher taught you that there are different members of a family. From the choices given, select a member of the extended family
- A. Aunt
  - B. Mother
  - C. Children
  - D. Father
35. After watching a video clip about the birth of Jesus, your teacher asked you to state where Jesus was placed when he was born. Which correct answer did you give?
- A. Bed
  - B. Chair
  - C. Table
  - D. Manger
36. After learning about the gifts that were presented to baby Jesus by the wisemen, your teacher asked you to identify the gift that was **not** presented to baby Jesus by the wisemen. Which answer did you give?
- A. Gold
  - B. Silver
  - C. Myrrh
  - D. Frankincense
37. Grade 4 learners were discussing about feelings they experience when they go through good or bad experiences. These feelings are referred to as
- A. emotions
  - B. honesty
  - C. hatred
  - D. love
38. Joseph asked his friend to tell him the birth place of Jesus Christ. Which answer did his friend give him?
- A. Jerusalem
  - B. Nazareth
  - C. Bethlehem
  - D. Canaan
39. You watched a video clip about the characteristics and attributes of God. Which one of the following is not an attribute of God?
- A. Loving
  - B. Sole creator
  - C. Unjust
  - D. Holy
40. Grade 4 learners were told a story about John the Baptist. Who was the father of John the Baptist?
- A. Zachariah
  - B. Joseph
  - C. Elikanah
  - D. Abraham

41. A CRE teacher told learners that the Bible teaches that children have a duty to \_\_\_\_\_ their parents.
- disobey
  - hate
  - beat
  - respect
42. Grade 4 learners were asked by their CRE teacher to list the disciples of Jesus. Who among the listed people below was **not** a disciple of Jesus?
- Peter
  - John
  - Adam
  - Andrew
43. During the CRE lesson, you learnt that Jesus said that let the children come to me because the \_\_\_\_\_ of heaven belongs to them.
- rule
  - kingdom
  - good
  - Jesus
44. I was the prophet of God. I was thrown into the den of lions because I refused to worship the image of the king. Whom am I?
- Daniel
  - Jeremiah
  - Isaiah
  - Micah
45. During a CRE lesson, you learnt that we should \_\_\_\_\_ our enemies.
- curse
  - beat
  - hate
  - love
46. In groups, you discussed about the books of the Bible. Your friend asked you, the number of books that are in the New Testament. Which answer did you give her?
- 39
  - 66
  - 27
  - 72
47. Four learners were given money by their mother to spend as pocket money. Which child used the money in the **best** way?
- Susan - bought sweets.
  - Peter - gave as a donation to a children's home.
  - Jane - bought a watch
  - Waridi - bought a cake
48. During the CRE lesson, you learnt that we should use social media responsibly by
- watching movies all the time.
  - chatting with strangers.
  - doing research on given assignment.
  - accepting friend request from strangers.
49. Which of the following is **not** a good thought?
- Being happy
  - Helping parents
  - Respecting others
  - Being angry
50. In groups, you discussed about the three sons of Noah. Who among the following is **not** the son of Noah?
- Seth
  - Shem
  - Japheth
  - Ham

**I.R.E**

31. How many verses are there in surah Al-Fatiha?  
A. Seven  
B. Eight  
C. Six  
D. Five
32. While learning about the pillars of swalah, Zubisha came across a surah that is a pillar of swalah. Which surah was she learning about?  
A. Al-Ikhlās  
B. Al-Fatiha  
C. Al-Falaq  
D. An-Nas
33. According to the teachings of surah Al-Ikhlās, the only one worthy of human worship is  
A. Angels  
B. Prophets  
C. Allah  
D. Jinn
34. Worshipping of idols and other things besides Allah (S.W.T) is discouraged in surah  
A. Al-Falaq  
B. Al-Fatiha  
C. An-Nas  
D. Al-Ikhlās
35. "I do not worship what you worship". This quotation is verse from surah  
A. Al-Fatiha  
B. Al-Kafirun  
C. Al-Quraish  
D. Al-Falaq
36. The prophet (S.A.W) said; "Worship Allah as if you see Him for if you do not see Him He sees you". This Hadith teaches on  
A. Iman  
B. Islam  
C. Ihsan  
D. Taqwa
37. Complete the following Hadith of the prophet; "Speak the truth even if it is .....".  
A. bitter  
B. good  
C. bad  
D. sweet
38. The sixth pillar of Islam is belief in  
A. Allah  
B. Prophets  
C. Day of Judgement  
D. Power of Allah
39. Three of the following are among the other names of the Day of Judgement. Which one is **not**?  
A. Yaumul Hisab  
B. Yaumul Jazaa  
C. Yaumul Jum'a  
D. Yaumul Baath
40. Who among the following was the first prophet of Allah (S.W.T) to be sent to the world?  
A. Muhammad (S.A.W)  
B. Adam (A.S)  
C. Issa (A.S)  
D. Nuh (A.S)
41. Which of the following is the third pillar of Islam?  
A. Zakat  
B. Saum  
C. Shahada  
D. Hajj

42. Three of the following are among the pillars of swalah. Which one is **not**?
- A. Qiyam
  - B. Takbiratul Ihram
  - C. Jalsa
  - D. Wudhu
43. While studying on the pillars of swalah, Majid, a grade four learner came across the term 'Taslim'. This term is the same as
- A. Maashallah
  - B. Subhnallah
  - C. Asalaam aleykum
  - D. Ash hadu anlaa ilaha ilallah
44. Which of the following fardh prayer, is performed early in the morning?
- A. Dhuhr
  - B. Fajr
  - C. Asr
  - D. Maghrib
45. Rahma heard her friend saying; "Allahumma ftahly abwaba rahmatik". Where do you think her friend was entering?
- A. The mosque
  - B. The house
  - C. The field
  - D. The toilet
46. The best place for a Muslim to perform his prayers is the
- A. Mosque
  - B. House
  - C. The field
  - D. The class
47. Zamzam, a grade four learner has a friend who worships in the church. Which of the following is the religion of Zamzam's friend?
- A. Islam
  - B. Judaism
  - C. Christianity
  - D. Hinduism
48. Three of the following are examples of caring for domestic animals. Which one is **not**?
- A. Giving them water
  - B. Feeding them
  - C. Treating them when they are sick
  - D. Beating them when they misbehave
49. Who among the following was the mother of prophet Muhammad (S.A.W)?
- A. Halima
  - B. Amina
  - C. Maryam
  - D. Khadijah
50. Three of the following were among the noble qualities of prophet Muhammad (S.A.W). Which one is **not**?
- A. He was honest
  - B. He was respectful
  - C. He was trustful
  - D. He was arrogant

# TARGETER WINGS GRADE 4 - 2026

## MONITORING LEARNER'S PROGRESS



### MARKING SCHEME

MATHS	ENGLISH	KISWAHILI	INTEGRATED SCIENCE	CREATIVE ARTS	SOCIAL STUDIES /RE
1. C	1. B	1. B	<b><u>SCIENCE AGRI&amp; NUTRITION</u></b>	1. D 26. C	<b><u>SOCIAL STUDIES</u></b>
2. D	2. D	2. B	1. B 26. D	2. C 27. C	1. C 27. A <b><u>I.R.E</u></b>
3. B	3. C	3. B	2. C 27. A	3. B 28. A	2. D 28. B 31. A
4. A	4. A	4. D	3. C 28. B	4. A 29. D	3. A 29. A 32. B
5. C	5. D	5. A	4. A 29. C	5. C 30. B	4. D 30. B 33. C
6. B	6. B	6. B	5. C 30. A	6. D 31. B	5. C 34. D
7. B	7. A	7. C	6. D 31. C	7. A 32. C	6. D <b><u>C.R.E</u></b> 35. B
8. D	8. B	8. B	7. B 32. C	8. D 33. A	7. C 31. C 36. C
9. C	9. C	9. B	8. C 33. B	9. B 34. B	8. C 32. D 37. A
10. D	10. D	10. B	9. C 34. D	10. B 35. D	9. B 33. B 38. D
11. C	11. B	11. C	10. A 35. A	11. D 36. C	10. A 34. A 39. C
12. B	12. A	12. C	11. B 36. A	12. A 37. D	11. D 35. D 40. B
13. D	13. B	13. B	12. D 37. C	13. D 38. A	12. B 36. B 41. A
14. A	14. A	14. D	13. A 38. B	14. C 39. B	13. D 37. A 42. D
15. A	15. D	15. B	14. B 39. B	15. B 40. C	14. C 38. C 43. C
16. C	16. C	16. A	15. D 40. B	16. C 41. D	15. B 39. C 44. B
17. B	17. B	17. A	16. B 41. A	17. B 42. A	16. B 40. A 45. A
18. C	18. D	18. B	17. C 42. C	18. D 43. B	17. D 41. D 46. A
19. D	19. A	19. D	18. C 43. C	19. A 44. B	18. A 42. C 47. C
20. A	20. C	20. B	19. C 44. D	20. C 45. C	19. D 43. B 48. D
21. B	21. A	21. C	20. B 45. A	21. B 46. D	20. A 44. A 49. B
22. D	22. B	22. B	21. D 46. B	22. D 47. B	21. B 45. D 50. D
23. A	23. C	23. A	22. C 47. A	23. B 48. D	22. B 46. C
24. B	24. B	24. B	23. D 48. B	24. D 49. A	23. A 47. B
25. C	25. D	25. C	24. C 49. C	25. B 50. C	24. D 48. C
26. A	26. A	26. B	25. B 50. D		25. A 49. D
27. D	27. C	27. C			26. C 50. A
28. B	28. B	28. A			
29. B	29. A	29. B			
30. C	30. D	30. A			

*Published by Targeter Educational Publishers Ltd.*

**N.B: Teachers are requested to scrutinize this marking scheme before use. It is worth.**