



001

# STEP FLYER SERIES

## MONITORING LEARNERS PROGRESS

### GRADE 4 - YEAR 2026

### MATHEMATICS

4

Time: 2hrs

#### READ THESE INSTRUCTIONS CAREFULLY.

- You have been given this question paper and a separate answer sheet. The question paper contains 30 questions.
- Make sure that you have written on the answer sheet.

(i) Your name \_\_\_\_\_ (ii) Name of your school \_\_\_\_\_ (iii) Assessment number \_\_\_\_\_

1. The price of a blanket in the supermarket was labelled at **Ksh.785**. Write the figure in words.

- A. Seventy eighty five
- B. Seven hundred and eighty five
- C. Seven thousand and eight five
- D. Seven hundred and eight five

2. Grade Four learners were learning about months of the year. Which one of the following is the eleventh month of the year?

- A. January
- B. February
- C. November
- D. December

3. Work out;

$$\frac{1}{3} \text{ of } 24 =$$

- A. 27
- B. 21
- C. 7
- D. 8

4. What is the value of;

$$523$$

$$+ 85$$


---



---

- A. 608
- B. 708
- C. 602
- D. 448

5. Find the sum of the missing numbers.

$$330, 350, 370, \underline{\quad}, \underline{\quad}, 430$$

- A. 400
- B. 820
- C. 420
- D. 800

6. Joshua's shop had **682** blouses. He sold **143** blouses. How many blouses were left in the shop?

- A. 825
- B. 541
- C. 539
- D. 529

7. Multiply;

$$6 \times 8 =$$

- A. 42
- B. 49
- C. 56
- D. 48

8. What is the time?



- A. A quarter past three O'clock
- B. A quarter to four o'clock
- C. A quarter to three o'clock
- D. A quarter past nine o'clock

9. Work out;

$$72 \div 9 =$$

- A. 8
- B. 81
- C. 63
- D. 9

10. Jacob was counting his money below. How much was he having?



- A. Sh. 2250
- B. Sh. 1700
- C. Sh. 1250
- D. Sh. 350

11. Joy had Sh. 500 note. She bought the following items, from the shop:

**Sugar Sh. 120**

**Tea leaves Sh. 50**

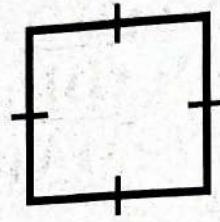
**Wheat flour Sh. 165**

**Salt Sh. 15**

What balance was she given after paying?

- A. Sh. 350
- B. Sh. 250
- C. Sh. 850
- D. Sh. 150

12. Identify the type of the figure drawn below




- A. Pyramid
- B. A rectangle
- C. A square
- D. A cone

13. What is the next number in the following pattern?

889, 879, 869, \_\_\_\_\_

- A. 849
- B. 859
- C. 869
- D. 879

14. What fraction is unshaded?



- A.  $\frac{8}{16}$
- B.  $\frac{9}{16}$
- C.  $\frac{7}{16}$
- D.  $\frac{7}{15}$

15. What is a quarter of 36?

- A. 32
- B. 40
- C. 12
- D. 9

16. Work out;

$$542 + 89 =$$

- A. 631
- B. 621
- C. 641
- D. 1432

17. Multiply;

$$\begin{array}{r} 9 \\ \times 7 \\ \hline \\ \hline \end{array}$$

- A. 16
- B. 63
- C. 2
- D. 72

18. Seven hundred and eighty nine bags of rice were given to a certain zone. Rusinga Primary School received forty three bags. How many bags of rice were left for others schools?

- A. 746
- B. 756
- C. 755
- D. 764

19. Nine learners shared 54 pineapples equally. How many pineapples did each learner get?

- A. 63
- B. 6
- C. 45
- D. 5

20. Ruth ran 340 metres on Monday morning. She also ran 185 metres in the evening. How many metres did she run altogether?

- A. 425m
- B. 625m
- C. 525m
- D. 155m

21. Njeri has 32kg of sugar. She gave Naomi 20kg. How many kg of sugar was she left with?

- A. 52kg
- B. 42kg
- C. 18kg
- D. 12kg

22. Amina had 849 litres of fuel of the diesel. She sold 381 litres. How many litres of diesel were left?

- A. 468
- B. 548
- C. 478
- D. 568

23. Peter has Sh.1000 note. How many Sh.200 notes will he get?

- A. 8
- B. 4
- C. 6
- D. 5

24. What is the value of;

$$684 + 28 =$$

- A. 964
- B. 702
- C. 712
- D. 722

25. Below are two containers A and B.



18 Litres



$\frac{1}{2}$  Litres

How many of container B will be needed to fill container A?

- A. 9
- B. 36
- C. 16
- D. 8

26. Work out;

$$8 \overline{) 64}$$

- A. 8
- B. 9
- C. 72
- D. 56


27. Subtract 560 metres from 825 metres

- A. 365 metres
- B. 345 metres
- C. 1385 metres
- D. 265 metres

28. Which one of the following is not a need?

- A. Toy
- B. Food
- C. Clothes
- D. House

29. John and James had the following amounts of money:



John



James

If all this amount of money was put together, how much was it?

- A. Sh.169
- B. Sh.731
- C. Sh. 791
- D. Sh. 801

30. In the year 2024, the month of February had how many days?

- A. 28
- B. 29
- C. 30
- D. 31



001

# STEP FLYER SERIES

## MONITORING LEARNERS PROGRESS

### GRADE 4 - YEAR 2026

### ENGLISH : LANGUAGE

4

Time: 1 hour 40 minutes

**READ THESE INSTRUCTIONS CAREFULLY**

1. You have been given this question paper and a separate answer sheet. The question paper contains 30 questions.

2. Make sure that you have written on the answer sheet.

(i) Your name

(ii) Name of your school

(iii) Assessment number

**Read the dialogue below and then answer questions 1 to 5.**

Learner: \_\_\_ 1 \_\_\_, teacher.

Teacher: Good morning, \_\_\_ 2 \_\_\_?

Learner: I wanted to \_\_\_ 3 \_\_\_ you a question about the exam.

Teacher: \_\_\_ 4 \_\_\_. What would you like to know?

Learner: Can you tell me the exam date, \_\_\_ 5 \_\_\_?

Teacher: The exam will be next Monday.

Learner: Thank you for your help.

Teacher: You're welcome and good luck!




- 1. A. Hello
- B. Good afternoon
- C. How are you
- D. Good morning

- 2. A. How can I help you today
- B. Why are you here
- C. What is your name
- D. What do you want

- 3. A. tell
- B. ask
- C. show
- D. write

- 4. A. Of course                      B. Not yet
- C. That's wrong                  D. Sorry
- 5. A. okay                              B. alright
- C. please                              D. sure

**Read the passage below and then answer questions 6 to 10.**



The common forms of vehicles are cars, trucks, motorcycles, bicycles and boats. Cars are for personal transport, trucks carry goods, motorcycles for quick rides, bicycles for short distances and boats for water travel.

6. How many types of vehicles are in the passage?  
 A. 7                                      B. 4  
 C. 6                                      D. 5
7. For short distances, we use \_\_\_\_\_.  
 A. trucks  
 B. bicycles  
 C. boats  
 D. cars
8. Boats are suitable for travelling in \_\_\_\_\_.  
 A. water                                  B. land  
 C. air                                      D. space
9. \_\_\_\_\_ are used to carry goods.  
 A. Cars  
 B. Motorcycles  
 C. Trucks  
 D. Boats
10. We use \_\_\_\_\_ for personal transport.  
 A. boats  
 B. cars  
 C. bicycles  
 D. trucks

**Read the passage below and then answer questions 11 to 15.**

One day, a woodcutter was cutting a tree by the riverside. Suddenly his only axe fell into the water. The woodcutter was worried because he did not have money to buy another one. He sat down by the river and cried bitterly.

The river fairy heard him crying. She appeared before him and asked why he was crying. The woodcutter told her about the axe. The river fairy disappeared and appeared again with a golden axe.

“Is this your axe” she asked the woodcutter.

“This is not my axe,?” the woodcutter shook his head.

The river fairy showed him a silver axe. Again the woodcutter shook his head and said it was not his either. The fairy then showed him an iron axe. The woodcutter wiped his tears and smiled. He said, “Yes, this is my axe!” The fairy, pleased by his honesty, told the woodcutter to take the three axes.

11. Why was the woodcutter worried?  
 A. The tree did not fall  
 B. The river was deep  
 C. His axe fell into the water  
 D. He had little money
12. From the story, we can say that, the river fairy was  
 A. mean  
 B. jealous  
 C. greedy  
 D. kind
13. Which word has been used in the passage to mean “go out of sight”?  
 A. Disappeared                              B. Fell  
 C. Appeared                                  D. Cried
14. The woodcutter went home with the following axes **except**  
 A. golden axe  
 B. iron axe  
 C. copper axe  
 D. silver axe
15. Choose the **best** title for this passage  
 A. Cutting a tree  
 B. The honest woodcutter  
 C. Three axes  
 D. The unfriendly fairy

**Read the passage below. It contains blank spaces numbered 16 to 20. For each blank space, select the best alternative from the choices given.**

My name is Dennis. I 16 seven years old. I 17 with my parents 18 my brother in Konza village. 19 love playing football and reading books. My 20 learning areas are English and Mathematics.

16. A. was                      B. am                      C. are                      D. have  
 17. A. living                    B. lives                    C. live                    D. lived  
 18. A. and                      B. or                      C. than                    D. but  
 19. A. We                      B. She                      C. He                      D. I  
 20. A. worst                    B. favourite              C. good                    D. hard

**For questions 21 to 30, fill in the blank spaces with the correct alternative from the choices given.**

21. The tourist saw \_\_\_\_\_ elephant.  
 A. the  
 B. any  
 C. a  
 D. an
22. Halima \_\_\_\_\_ Akinyi are friends.  
 A. or  
 B. and  
 C. but  
 D. then
23. Yesterday, I \_\_\_\_\_ home very early.  
 A. go  
 B. gone  
 C. went  
 D. going
24. When I arrived, there was \_\_\_\_\_ in the house.  
 A. nothing                    B. something  
 C. anybody                    D. nobody
25. This bag is \_\_\_\_\_ heavy to carry.  
 A. too  
 B. so  
 C. very  
 D. also
26. Our cat caught two \_\_\_\_\_.  
 A. mices  
 B. mouse  
 C. mice  
 D. mouses
27. She \_\_\_\_\_ visit her grandmother next week.  
 A. can  
 B. could  
 C. would  
 D. will
28. The cat was sleeping \_\_\_\_\_ the table.  
 A. under  
 B. into  
 C. over  
 D. through
29. Your oranges are \_\_\_\_\_ than mine.  
 A. many  
 B. more  
 C. much  
 D. most
30. **Choose the opposite of the underlined word.**  
 We placed our bags on top of the table.  
 A. Deep  
 B. Wide  
 C. Bottom  
 D. Thin



**SOMA MAAGIZO HAYA KWA MAKINI**

1. Umepeva kijikaratasi hiki cha maswali na karatasi ya majibu. Kijikaratasi hiki kina maswali 30.
2. Katika karatasi ya majibu hakikisha umeandika:-  
(i) Jina lako (ii) Jina la shule yako (iii). Nambari ya Assessment

**Soma mazungumzo yafuatayo kisha ujibu maswali 1 hadi 5.**

(Amara na Tasha wamekuwa wa kwanza kufika shuleni asubuhi na mapema)

- Amara** : Hujambo rafiki?  
**Tasha** : \_\_\_ 1 \_\_\_ Amara. Uhali gani?  
**Amara** : (Kwa furaha) Njema.  
**Tasha** : Nimekamilisha zoezi tuliopewa na mwalimu; wewe je?  
**Lina** : Nimefanya japo kuna swali moja linalohusu maamkizi sijaweza kupata jibu. Nakusihi unisaidie.  
**Amara** : Swali lipi hilo rafiki?  
**Tasha** : Jibu la shikamoo ni lipi?..  
**Amara** : \_\_\_ 5 \_\_\_  
**Tasha** : Asante sana.



- |  |  |
|--|--|
| <ol style="list-style-type: none"> <li>1. Ni jibu lipi bora linalofaa kujaza sehemu ya ___ 1 ___ iliyoachwa?<br/>A. Njema<br/>B. Hatujambo<br/>C. Sijambo<br/>D. Vyema</li> <li>2. Mazungumzo haya yanafanyika wapi?<br/>A. Shuleni<br/>B. Nyumbani<br/>C. Shambani<br/>D. Njiani</li> </ol> | <ol style="list-style-type: none"> <li>3. Tasha hakuweza kukamilisha zoezi kwa nini?<br/>A. Alipoteza kitabu<br/>B. Hakuwa na kalamu<br/>C. Alikuwa anaumwa na kichwa<br/>D. Hakuweza kupata jibu la swali moja</li> <li>4. Mazungumzo haya yanafanyika wakati gani?<br/>A. Jioni<br/>B. Usiku<br/>C. Mchana<br/>D. Asubuhi</li> <li>5. Chagua jibu bora kujazia nafasi iliyoachwa ya 5<br/>A. Kheri<br/>B. Vyema<br/>C. Marhaba<br/>D. Nzuri</li> </ol> |
|--|--|

**Soma kifungu kifuatacho kisha ujibu maswali 6 hadi 10.**

Siku moja Baraka alipokuwa akitoka shuleni alishikwa na kikohozi. Usiku huo alikohoa sana. Keshoye mama yake alimpeleka hospitalini.

Daktari alimkagua na kumpa dawa iliyokuwa katika chupa. Daktari alimwambia Baraka awe akitikisa chupa kabla ya kuinywa dawa.

Baada ya siku mbili, Baraka alikunywa dawa hiyo bila kutikisa chupa. Mara tu alipokumbuka masharti ya daktari alimwita dada yake. Alimwamuru dada yake amtikise kama chupa ya dawa.

Mama yake aliingia na akauliza kwa nini Baraka alikuwa akitikiswa. Baraka alimjibu kuwa ni kwa sababu aliinywa dawa bila kutikisa chupa, ndipo akaamua atikiswe ili dawa ichanganyike tumboni.

Mama yake alimwambia kuwa ni hatari kusahau masharti ya daktari kwa sababu kunaweza kusababisha madhara makubwa zaidi.

- |   |   |
|---|---|
| <p>6. Baraka aliugua nini?<br/>A. Kikohozi                      B. Vidonda<br/>C. Saratani                      D. Kipindupindu</p> <p>7. Baraka alitibiwaje na daktari?<br/>A. Kudungwa sindano<br/>B. Alipewa dawa majimaji<br/>C. Alipewa dawa ya kupaka<br/>D. Alipewa tembe</p> <p>8. Dada yake Baraka aliamuriwa kufanya nini?<br/>A. Kuitikisa chupa              B. Kuitikisa dawa<br/>C. Kumtikisa mama              D. Kumtikisa Baraka</p> | <p>9. Kusahau masharti ya daktari kunaweza kusababisha<br/>A. furaha<br/>B. faida<br/>C. madhara<br/>D. uponyaji</p> <p>10. Taarifa hii inatufundisha nini?<br/>A. Tuzingatie masharti tunayopewa<br/>B. Tusifuate maagizo<br/>C. Tupuuze masharti tunayopewa<br/>D. Tupuuze maagizo ya daktari</p> |
|---|---|

**Soma kifungu kifuatacho kisha ujibu maswali 11 hadi 15.**

Wanafunzi wa shule ya Busara walishirikishwa na mwalimu wao kutengeneza jedwali la vyakula. Lifuatalo ni jedwali linaloonyesha matunda ambavyo kila mmoja atakula kwa siku tatu.

Siku Mwanafunzi	Jumatatu	Jumanne	Jumatano
<b>Jabali</b>	Papaya	Zabibu	Parachichi
<b>Neema</b>	Embe	Ndizi	Pera
<b>Malia</b>	Tikitimaji	Pera	Ndizi
<b>Baraka</b>	Ndizi	Zabibu	Tikitimaji

- |  |  |
|--|--|
| <p>11. Ni tunda lipi huliwa na mwanafunzi mmoja pekee?<br/>A. Papaya<br/>B. Tikitimaji<br/>C. Embe<br/>D. Ndizi</p> <p>12. Wanafunzi wangapi walishirikishwa kwenye habari hii?<br/>A. Wanane<br/>B. Watatu<br/>C. Wanne<br/>D. Sita</p> | <p>13. Ni tunda lipi halijatajwa katika habari hii?<br/>A. Ndizi                              B. Fenesi<br/>C. Zabibu                              D. Embe</p> <p>14. Ni tunda lipi huliwa na Baraka na Neema?<br/>A. Ndizi<br/>B. Tikitimaji<br/>C. Embe<br/>D. Zabibu</p> <p>15. Ni mwanafunzi yupi hula pera siku ya Jumanne?<br/>A. Neema                              B. Jabali<br/>C. Malia                                  D. Baraka</p> |
|--|--|


**Jaza nafasi zilizoachwa wazi kutoka swali la 16 hadi 20 kwa jibu sahihi.**

Wawindaji haramu wanaharibu uchumi \_\_\_16\_\_\_ nchi yetu. Wao \_\_\_17\_\_\_ wanyama wa porini. Wanyama \_\_\_18\_\_\_ wanaletea nchi yetu pesa nyingi. \_\_\_19\_\_\_ huja nchini \_\_\_20\_\_\_ kuwaona wanyama hawa.

- |                  |              |           |             |
|------------------|--------------|-----------|-------------|
| 16. A. ya        | B. wa        | C. la     | D. za       |
| 17. A. wanauwa   | B. wanawauwa | C. wanaua | D. wanawaua |
| 18. A. hizi      | B. huyu      | C. hawa   | D. haya     |
| 19. A. Wakimbizi | B. Watalii   | C. Watoro | D. Walowezi |
| 20. A. mwetu     | B. yetu      | C. letu   | D. muetu    |

**Kutoka swali la 21 hadi 30, jibu kila swali kulingana na maagizo uliyopewa.**

21. Adrian ni \_\_\_\_\_ kuliko Ishmael.  
A. msafi  
B. nzuri  
C. mhodari  
D. safi
22. Umbo hili ni



- A. pia  
B. mraba  
C. duara  
D. mstatili
23. Kamilisha methali hii;  
Haraka haraka haina \_\_\_\_\_  
A. amani  
B. baraka  
C. ushindi  
D. usalama
24. Mwezi wa tano wa mwaka huitwa  
A. Mei  
B. Juni  
C. Aprili  
D. Julai

25. Tumia kihusishi kifaacho.



- Mpira uko \_\_\_\_\_ meza.  
A. ndani ya  
B. chini ya  
C. mbele ya  
D. juu ya
26. Kamilisha sentensi hii;  
Msichana \_\_\_\_\_ ni mtiifu.  
A. hawa  
B. ule  
C. huyu  
D. wale
27. Mzoga wa mbwa unanuka \_\_\_\_\_!  
A. fe  
B. pu  
C. fye  
D. chubwi
28. Andika umoja wa;  
Maswali haya ni magumu.  
A. Swali hii ni ngumu  
B. Swali hili ni gumu  
C. Swali hili ni ngumu  
D. Swali hii ni gumu
29. Unataka nguo yako ishonwe \_\_\_\_\_?  
A. upi  
B. ipi  
C. nani  
D. vipi
30. Neno 'samaki' liko katika ngeli gani?  
A. I-ZI  
B. LI-YA  
C. A-WA  
D. YA-YA



# STEP FLYER SERIES

## MONITORING LEARNERS PROGRESS

### GRADE 4 - YEAR 2026

### CREATIVE ARTS

4



001





READ THESE INSTRUCTIONS CAREFULLY.

- You have been given this question paper and a separate answer sheet. The question paper contains 50 questions.
- Make sure that you have written on the answer sheet.

Time: 2hrs 15mins

(i) Your name (ii) Name of your school (iii) Assessment number

- A basket is made by \_\_\_\_\_.  
A. modelling B. weaving  
C. plaiting D. carving
- Which of the following is a direction of hopping?  
A. To the center  
B. To the north  
C. Zigzag  
D. Forward
- Which of the following body parts are in contact with the ground when jumping?  
A. Head B. Knees  
C. Shoulders D. Feet
- Which of the following is **not** a body percussion?  
A. Clapping B. Tapping  
C. Snapping D. Dancing
- Study the following lines. Identify the one that is **wrongly** matched with its name?

Line	Name
A. 	zigzag
B. 	curved
C. 	horizontal
D. 	vertical

- Which of the following is a tool used in painting?  
A. Toothpick B. Paper  
C. Brush D. Crayons
- Study the following image.



Identify what the learner in the image above is doing.

- Which one of the following is **not** a percussion instrument?



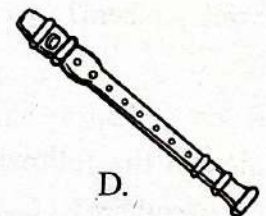
A.



B.



C.

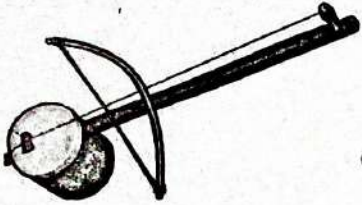


D.

- Which of the following is a way of creating rhythm?  
A. Clapping B. Drawing  
C. Painting D. Blotting

10. The clothes that we wear when performing a song are known as
- Props
  - Costumes
  - Ornaments
  - Singing clothes

11. Study the following image of the string instrument.



Identify the method used to play the instrument above.

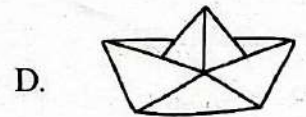
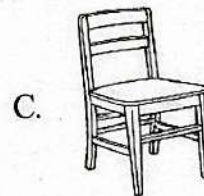
- Bowing
  - Plucking
  - Striking
  - Hitting
12. Which one of the following is **not** a type of song?
- Folk song
  - Topical song
  - Sacred song
  - Celebration song
13. Which one of the following colours is **not** found on the Kenyan flag?
- Red
  - White
  - Black
  - Blue
14. How many stanzas are there in the Kenyan National Anthem?
- 3
  - 2
  - 4
  - 1
15. Which of the following line is on the Kenya national anthem?
- Ee mungu twaomba uilinde
  - Ilete baraka kwetu
  - Jumuiya ya Afrika Mashariki
  - Tuwezeshe kuishi kwa amani

16. Study the following item.



Identify the part of the body where the item above is worn.

- Hand
  - Neck
  - Leg
  - Head
17. When pulling we use our \_\_\_\_\_.
- necks
  - hands
  - legs
  - shoulders
18. Which of the following items is made using clay?



19. Animals give us one of the following items that we use to make costumes. Which one?
- Flowers
  - Sisal
  - Hides
  - Paper
20. Skipping ropes makes us \_\_\_\_\_.
- brave
  - sad
  - weak
  - strong
21. When playing, we wear the correct \_\_\_\_\_.
- costume
  - uniform
  - games attire
  - props
22. Which of the following items is **not** used when dancing?
- Animal tails
  - Toys
  - Paper crafts
  - Pangas

23. Which of the following is an emotion that we feel when we listen to music?

- A. Happiness
- B. Hunger
- C. Tiredness
- D. Sickness

24. Study the following image.



The art above is known as

- A. collage
- B. drawing
- C. mosaic
- D. painting

25. We use paper craft to make the following items **except** one. Which one?

- A. Flowers
- B. Balls
- C. Boats
- D. Aeroplane

26. The songs that we sing and do what the songs are talking about are known as

- A. action songs
- B. national anthems
- C. happy songs
- D. topical songs

27. The process of making items using clay or plasticine is known as

- A. modelling
- B. carving
- C. paper craft
- D. pleating

28. How is the following instrument played?



- A. Blowing
- B. Bowing
- C. Hitting
- D. Striking

29. A special tune of a song that we can easily remember is known as \_\_\_\_\_.

- A. pitch
- B. melody
- C. sound
- D. wind instrument

30. We imitate rhythm by \_\_\_\_\_

- A. talking
- B. eating
- C. humming
- D. screaming

31. Kimani was locking the door, he saw the teacher coming and changed the direction to face his friend who sits behind him to tell him. What did he do?

- A. Turning
- B. Dancing
- C. Stretching
- D. Balancing

32. Study the following picture.



The clothing above is used in swimming. It is known as

- A. jerrican
- B. life jacket
- C. costume
- D. Warmth Jacket

33. When we feel tired we should

- A. play
- B. eat
- C. rest
- D. sing

34. Grade Four learners were making mosaic. Which of the following items was **not** used?

- A. Glue
- B. Coloured paper
- C. Egg shells
- D. Water

35. \_\_\_\_\_ is the appearance of an object.

- A. Quantity
- B. Square
- C. Colour
- D. Shape

36. Study the following image.




Identify the sound made by the item above.

- A. Tick-tock Tick-tock
- B. Coo-coo
- C. Clunk-clunk
- D. Hee-hoo hee-hoo

37. Which of the following items is used to stick items on a surface?

- A. Water
- B. Glue
- C. Paint
- D. Crayons

38. Which of the following has a smooth surface?



39. When a surface is smooth or rough we call it \_\_\_\_\_.

- A. drawing
- B. doodle
- C. texture
- D. shading

40. How does the following animal move?



- A. Walking
- B. Crawling
- C. Hopping
- D. Running

41. Creating rhythm by speaking is called

- A. clapping
- B. humming
- C. stamping
- D. reciting

42. Which of the following body parts is used when kicking a ball?

- A. Head
- B. Feet
- C. Knees
- D. Hands

43. Study the image.



Which game is played using the item above?

- A. Hide and seek
- B. Singing game
- C. Football
- D. Swimming


44. Decorations that we wear to look good are known as

- A. ornaments
- B. clothes
- C. costumes
- D. toys

45. We use \_\_\_\_\_ to plait.

- A. clay
- B. string
- C. wood
- D. water

46. What is the boy in the following image doing?



- A. Tuning
- B. Swan balance
- C. Egg roll
- D. Crawling

47. When do we sing the National Anthem?

- A. In church
- B. During the Monday and Friday school assemblies
- C. Before learning in class
- D. Before going home

48. Objects used to support movement in singing games are known as

- A. props
- B. costumes
- C. toys
- D. instruments

49. Which of the following is a singing game?

- A. Brikicho
- B. O God of all creation
- C. Ee Mungu twaomba uilinde
- D. Our father who is in heaven

50. Grade Four learners collected the following items.



Identify the musical instrument that they were making.

- A. Shakers
- B. Drums
- C. Horn
- D. Marimba

# STEP FLYER SERIES

## MONITORING LEARNERS PROGRESS

### GRADE 4 - YEAR 2026

## INTEGRATED SCIENCE

**READ THESE INSTRUCTIONS CAREFULLY.**

1. You have been given this question paper and a separate answer sheet. The question paper contains 30 questions.
2. Make sure that you have written on the answer sheet.

**Time: 2hours 15minutes**

(i) Your name

(ii) Name of your school


(iii) Assessment number

### SECTION A : SCIENCE AND TECHNOLOGY

1. Plants as living things show the following characteristics. Which one is **not**?

- A. Plants grow
- B. Plants feed
- C. Plants reproduce
- D. Plants work

2. The diagram below a shows a characteristic of plants.



It shows that plants

- A. feed
  - B. grow
  - C. remove waste
  - D. die
3. Flowers and seeds of plants that germinate into new plants show that plants
    - A. reproduce
    - B. breathe
    - C. move
    - D. grow
  4. During drought many plants dried. This shows that plants
    - A. feed
    - B. die
    - C. move
    - D. remove waste

5. Grade Four learners went for Science and Technology nature walk. They should observe safety measures by

- A. wearing gloves
- B. tasting the plants
- C. smelling the plants
- D. touching with bare hands

6. Which statement is **not** true when handling plants?

- A. We should use gloves to handle thorny plants
- B. We can walk barefoot in places with thorn plants
- C. Wash hands after handling plants
- D. Protect eyes by wearing goggles

7. The following are sources of heat. Which one is **not**?

- A. Sun
- B. Fire
- C. Soil
- D. Gas cooker

8. We can use heat to

- A. wash clothes
- B. water animals
- C. clean the house
- D. cook food

9. You can dry maize seeds using heat from

- A. fire
- B. sun
- C. stove
- D. jiko


10. Abdi matched the sources of heat and their fuels. Which one is **wrongly** matched?

Sources of heat	Fuels
A. Gas cooker	Charcoal
B. Electric cooker	Electricity
C. Stove	Kerosene
D. Traditional jiko	Firewood

11. Which one of the following animals lives in water?

- A. Monkey                      B. Cow  
C. Fish                          D. Chameleon

12. The sources of heat below is

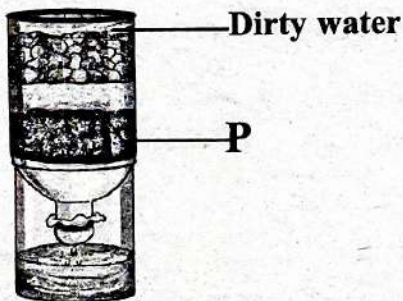


- A. the moon                  B. the star  
C. the sun                    D. the clouds

13. My name is Brenda. Instead of lighting a jiko to keep myself warm, on a cold day, I \_\_\_\_\_ to conserve heat.

- A. wear heavy clothes  
B. wear light clothes  
C. sleep indoors  
D. walk naked

**Grade Four learners constructed a water filter as shown. Use it to answer question 14 and 15.**



14. They improvised the water filter using

- A. a piece of wood  
B. a glass bottle  
C. a watering can  
D. a plastic bottle

15. What did they put at the part market P?

- A. Gravel                      B. Water  
C. Charcoal                    D. Sand

16. One day, Sarah saw people contaminating water in the river. State one way they contaminated water.

- A. By drinking  
B. Urinating in water  
C. Fetching water  
D. Fishing in water

17. We can make water safe for drinking by

- A. soiling it                    B. filtering it  
C. boiling it                  D. cooling it

18. Tembo collected edible plants from the school compound. Which one is it?

- A. Sodom apple  
B. Thorn apple  
C. Acacia  
D. Sugarcane

19. Nuru observed the plant below in the school environment.



The plant is

- A. a thorny plant  
B. an edible plant  
C. a tall plant  
D. a flower plant


20. An example of a poisonous plant is

- A. maize                      B. sodom apple  
C. cabbage                    D. tomatoes

21. Can wastes can be used to make

- A. pencil holders  
B. chicken water points  
C. chicken feeders  
D. flower vases

22. Name the weather condition shown below.



- A. Windy                      B. Rainy  
C. Sunny                      D. Cloudy

23. Instead of throwing away old glass jars, we can \_\_\_\_\_ them to create beautiful candle holders.

- A. reuse                      B. throw  
C. break                      D. bury

24. Water becomes \_\_\_\_\_ if it is stored in one container for a long time.

- A. good                      B. sweet  
C. clean                      D. unsafe

25. We open windows to let the light of the \_\_\_\_\_ in during the day.


- A. moon                      B. stars  
C. sun                      D. fire

**SECTION B: AGRICULTURE**

26. Organic matter that has decomposed is called

- A. fertilizer                      B. compost manure  
C. dry leaves                      D. inorganic manure

27. You can make compost manure using the following. Which one?



- A                      B                      C                      D

28. Njeri used the following animal wastes to make compost manure. Which one is **wrong**?

- A. Dog droppings  
B. Chicken droppings  
C. Cowdung  
D. Goat droppings

29. Loamy soil is good for

- A. farming  
B. building  
C. modelling  
D. making pots

30. Grade 4 learners brought samples of soil with large particles. The soil they brought is

- A. clay                      B. loam  
C. salt                      D. sand

31. Abdi's grandmother makes pots. She uses

- A. sandy soil                      B. clay soil  
C. alluvial soil                      D. loam soil


32. The soil is rough when you touch. The soil is

- A. clay  
B. loamy  
C. sand  
D. black cotton soil

33. A young tree is called a

- A. seed                      B. bush  
C. plant                      D. seedling

**Matoi took care of small plants in the farm by doing the following as shown in the diagram. Use it to answer questions 34 and 35.**



34. The method used to care for the young plant is known as


- A. mulching                      B. weeding  
C. watering                      D. shading

35. Apart from dry leaves, Matoi can use

- A. plastic bottles  
B. polythene bags  
C. broken pieces of glass  
D. dry grass


36. Emma collected soil along river banks and swampy places. The type of soil Emma collected is
- A. sand                      B. clay  
C. loam                      D. silt

**Rahab uses the equipment below to care for plants. Use it to answer questions 37 and 38.**



37. The equipment is called
- A. bottle                      B. watering can  
C. sprayer                    D. jerrican
38. The equipment is used for
- A. watering plants  
B. weeding plants  
C. spraying chemicals  
D. feeding animals
39. Carol was sleeping on her bed. Name the bedding material used to support her head while sleeping.
- A. Bedcover                  B. Mattress  
C. Pillow                      D. Blanket
40. Children who wet their beds should sleep on a
- A. mat                          B. mackintosh  
C. blanket                      D. pillow
41. I use a \_\_\_\_\_ to sweep my sleeping area.
- A. broom                      B. brush  
C. mop                          D. basin
42. Levi wets his bed at times. Give one reason for having the problem of bed-wetting?
- A. Habit of laughing  
B. Eating too much food  
C. Watching TV too much  
D. Drinking too much water
43. After bed-wetting you should do the following. Which one is **not**?
- A. Take a shower  
B. Wash the bedding  
C. Spread the bed neatly  
D. Dry your bedding outside

44. Ali ate the food item below.



What food group does the food belong to?

- A. Energy giving food  
B. Body building food  
C. Protective food  
D. Vitamin food
45. When we eat oranges, we get
- A. energy from the food  
B. our body tissues repaired  
C. protection from diseases  
D. water from the food
46. Which one is **not** good table manners?
- A. Talking with food in mouth  
B. Washing hands before eating  
C. Eating while quiet  
D. Sitting well while eating
47. A space near kitchen area where vegetables, fruits and herbs are grown is called
- A. school garden          B. plantation  
C. kitchen garden          D. yard
48. We can prevent soil erosion by
- A. watering plants  
B. planting trees  
C. adding manure to the farms  
D. cutting down trees
49. Which one is **not** a domestic animal?
- A. Zebra                          B. Donkey  
C. Cat                              D. Cow
50. Which domestic animal is **correctly** matched with its product?

	Domestic animal	Product
A.	Goat	Eggs
B.	Dog	Meat
C.	Cat	Milk
D.	Camel	Meat

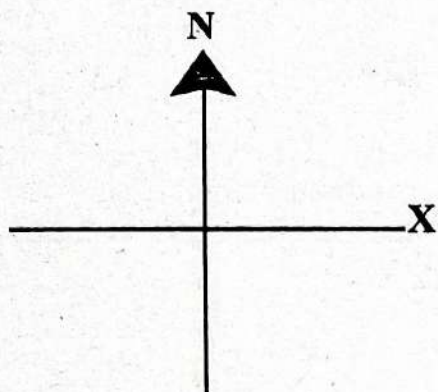
**READ THESE INSTRUCTIONS CAREFULLY**

1. You have been given this question paper and a separate answer sheet. The question paper contains 50 questions.  
2. Make sure that you have written on the answer sheet.

Time: 2hrs 15mins

(i) Your name \_\_\_\_\_ (ii) Name of your school \_\_\_\_\_ (iii) Assessment number \_\_\_\_\_

1. Morara walked towards the direction marked X.



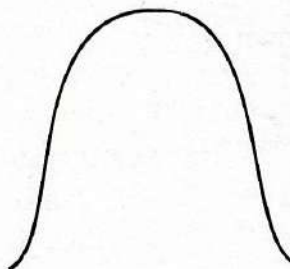
The direction was \_\_\_\_\_.

- A. South  
B. East  
C. West  
D. South East
2. The following are cash crops **except**
- A. beans  
B. coffee  
C. tea  
D. cotton
3. Most people in our county travel by \_\_\_\_\_.
- A. water  
B. air  
C. road  
D. railway
4. Who is the head of a county?
- A. Chief  
B. MCA  
C. President  
D. Governor
5. Law and order in our county is maintained by the
- A. teachers  
B. elders  
C. police officers  
D. chiefs

6. Before you cross a road, you should look

- A. right, right, left  
B. left, right, left  
C. left, right, right  
D. right, left, right

7. The feature below is called



- A. hill  
B. river  
C. lake  
D. swamp
8. The **quickest** form of transport is by
- A. road  
B. water  
C. air  
D. railway
9. Tabby, a Grade 4 learner, was carrying an umbrella. It was **likely** that the weather was
- A. windy  
B. rainy  
C. cool  
D. chilly
10. The **smallest** county in Kenya is
- A. Narok  
B. Kirinyanga  
C. Kisii  
D. Mombasa

11. Which of the following is an example of a modern industry in our county?

- A. Pottery
- B. Textile
- C. Carpentry
- D. Weaving

12. The president of Kenya is called

- A. Raila Odinga
- B. Uhuru Kenyatta
- C. William Ruto
- D. Kithure Kindiki

13. Our country Kenya is divided into how many counties?

- A. 57
- B. 47
- C. 37
- D. 27

14. The gadget below is known as



- A. television
- B. laptop
- C. radio
- D. mobile phone

15. Which of the following is an example of a cultural activity in a Kenyan community?

- A. Singing folk songs
- B. Building classrooms
- C. Shopping in a supermarket
- D. Using a computer in class

16. Crops grown for sale are called

- A. food crops
- B. subsistence crops
- C. cash crop
- D. flowers

17. The white colour in our flag represents

- A. blood
- B. peace
- C. plants
- D. colour of our skin

18. The weather sign below indicates



- A. windy day
- B. sunny day
- C. calm day
- D. rainy day

19. Public schools in Kenya are headed by the

- A. head teacher
- B. senior teacher
- C. manager
- D. chief

20. A compass is an instrument for finding

- A. home
- B. temperature
- C. direction
- D. north

21. What are the two ways of caring for historic built environment in your county?

- A. Selling items, neglecting
- B. Cleaning, repairing
- C. Neglecting, destroying
- D. Stealing, destroying

22. The following are basic needs. Which one is **not**?

- A. Shelter
- B. Clothing
- C. Food
- D. Chair

23. A good citizen should **not**

- A. break the law
- B. care for the environment
- C. respect others
- D. love his country

24. People who use vehicles on the road are called

- A. traffic police
- B. cyclists
- C. motorists
- D. pedestrians

25. The diagram below shows a



- A. drum
- B. spear
- C. shield
- D. manyatta

26. Interdependence enables people living in a county  
 A. to steal what does not belong to them  
 B. to fight one another  
 C. to hate one another  
 D. to live together peacefully
27. A compass has how many cardinal points?  
 A. Four  
 B. Eight  
 C. Two  
 D. Six
28. The sun sets in which direction?  
 A. West  
 B. North  
 C. East  
 D. South
29. On the Kenyan National flag, the colour at the top is  
 A. green  
 B. red  
 C. black  
 D. white
30. A drainage feature that serves as a source of water for animals and people is a  
 A. mountain  
 B. river  
 C. valley  
 D. hill
31. Which one is a traditional artefact that we can find in a Museum?  
 A. Pen  
 B. Textbook  
 C. Computer  
 D. Calabash
32. Identify the item drawn below.



- A. Radio  
 B. Microphone  
 C. Desk  
 D. Camera
33. Which of these animals is **not** used for transport?  
 A. Horse  
 B. Donkey  
 C. Pig  
 D. Carmel

34. In olden days, grains were stored in  
 A. bags  
 B. granaries  
 C. fridges  
 D. silos
35. Floods **mainly** occur in which season?  
 A. Dry  
 B. Hot  
 C. Cold  
 D. Rainy

### SECTION B

#### CHRISTIAN RELIGIOUS EDUCATION

36. The Holy Bible consists of how many books in total?  
 A. 66  
 B. 27  
 C. 39  
 D. 58
37. A good leader is someone who is  
 A. harsh  
 B. arrogant  
 C. polite  
 D. selfish
38. Who among the following people asked for wisdom from God?  
 A. Saul  
 B. Solomon  
 C. Goliath  
 D. John
39. The home town of Lazarus was in  
 A. Bethlehem  
 B. Nazareth  
 C. Nain  
 D. Bethany
40. The first disciples of Jesus were  
 A. fishermen  
 B. traders  
 C. preacher  
 D. prophets
41. **Philippians 4:4** encourages Christians always to have  
 A. joy  
 B. respect  
 C. hope  
 D. love
42. Three of the following books are found in the New Testament. Which one is **not**?  
 A. Mark  
 B. Exodus  
 C. John  
 D. Acts of Apostles
43. Deciding what to do, whether right or wrong is called  
 A. a right  
 B. emotion  
 C. a feeling  
 D. a choice
44. For how many days did God take to create the earth and everything in it?  
 A. 6 days  
 B. 7 days  
 C. 9 days  
 D. 5 days

45. Who among the following people was stoned because of preaching the word of God?  
 A. Peter                      B. John  
 C. Stephen                  D. Paul
46. Which of the following is not a value acquired from using the Holy Bible?  
 A. Humility  
 B. Disobedience  
 C. Bravery  
 D. Respect
47. Jesus had \_\_\_\_\_ disciples.  
 A. 20                          B. 15  
 C. 9                            D. 12
48. The mother of Jesus was called  
 A. Mary                      B. Peninah  
 C. Hannah                  D. Elizabeth
49. Jesus was born in a place called  
 A. Judea  
 B. Jericho  
 C. Bethlehem  
 D. Nazareth
50. When do Christians celebrate the birth of Jesus Christ?  
 A. Jamhuri                  B. Christmas  
 C. Easter                      D. Madaraka

## **SECTION B**

### **ISLAMIC RELIGIOUS EDUCATION**

36. A Muslim believes in only one  
 A. prophet  
 B. angel  
 C. Allah  
 D. Book
37. The holybook of Muslims is the  
 A. Taurat                      B. Injil  
 C. Quran                      D. Zabur
38. Muslim face \_\_\_\_\_ while praying.  
 A. mosque  
 B. Kaaba  
 C. Madinah  
 D. Jerusalem
39. The name of the last prophet of Allah is  
 A. Issa (A.S)  
 B. Ibrahim (A.S)  
 C. Muhamad (S.A.W)  
 D. Musa (A.S)

40. The call to prayer in Islam is called  
 A. Khutbah  
 B. Wudhu  
 C. Adhan  
 D. Hajj
41. Before prayer, a Muslim performs  
 A. wudhu  
 B. zakat  
 C. saum  
 D. hajj
42. The place where Muslims go for worship is called  
 A. church                      B. shrine  
 C. temple                      D. mosque
43. The month of fasting is  
 A. muharram  
 B. shawwal  
 C. Ramadhan  
 D. Rajab
44. The greetings used by Muslim is  
 A. jambo                      B. goodbye  
 C. how are you              D. Assalamu Alaikum
45. The Angel who brought messages from Allah is  
 A. Mikail                      B. Israfil  
 C. Izrail                        D. Jibril
46. Who is the creator of everything?  
 A. Muhammad (S.A.W)  
 B. Adam (A.S)  
 C. Allah (S.W.T)  
 D. Jibril (A.S)
47. The religion taught by prophet Muhammad (S.A.W) is  
 A. Christianity  
 B. Judaism  
 C. Hinduism  
 D. Islam
48. What is used to perform wudhu?  
 A. Milk                         B. Juice  
 C. Clean water                D. Tea
49. Which of the following is the pillar of Islam?  
 A. Reading books  
 B. Swalah  
 C. Dancing  
 D. Singing
50. The fast observed by Muslims is called  
 A. Zakat                        B. Saum  
 C. Hajj                         D. Khutbah



STEP FLYER

001

# STEP FLYER SERIES

## GRADE 4 - YEAR 2026

### MARKING SCHEME

4

MATHS	ENGLISH	KISWAHILI	INTEGRATED SCIENCE	CREATIVE ARTS	SOCIAL STUDIES & R.E
1. B	1. D	1. C	1. D 31. B	1. B 31. A	SST C.R.E
2. C	2. A	2. A	2. B 32. C	2. D 32. B	1. B 36. A
3. D	3. B	3. D	3. A 33. D	3. D 33. C	2. A 37. C
4. A	4. A	4. D	4. D 34. A	4. D 34. D	3. A 38. B
5. D	5. C	5. C	5. A 35. D	5. C 35. D	4. D 39. D
6. C	6. D	6. A	6. B 36. B	6. C 36. A	5. C 40. A
7. D	7. B	7. B	7. C 37. B	7. A 37. B	6. D 41. C
8. B	8. A	8. D	8. D 38. A	8. D 38. D	7. A 42. B
9. A	9. C	9. C	9. B 39. C	9. A 39. C	8. C 43. D
10. C	10. B	10. A	10. A 40. B	10. B 40. C	9. B 44. A
11. A	11. C	11. C	11. C 41. A	11. A 41. B	10. D 45. C
12. C	12. D	12. C	12. C 42. D	12. D 42. B	11. B 46. B
13. B	13. A	13. B	13. A 43. C	13. D 43. C	12. C 47. A
14. C	14. C	14. A	14. D 44. B	14. A 44. A	13. B 48. A
15. D	15. B	15. C	15. C 45. C	15. B 45. B	14. D 49. C
16. A	16. B	16. B	16. B 46. A	16. B 46. C	15. A 50. B
17. B	17. C	17. D	17. C 47. C	17. B 47. B	16. C I.R.E
18. A	18. A	18. C	18. D 48. B	18. A 48. A	17. B 36. C
19. B	19. D	19. B	19. A 49. A	19. C 49. A	18. D 37. C
20. C	20. B	20. A	20. B 50. D	20. D 50. A	19. A 38. B
21. D	21. D	21. D	21. D	21. C	20. C 39. C
22. A	22. B	22. C	22. B	22. D	21. B 40. C
23. D	23. C	23. B	23. A	23. A	22. D 41. A
24. C	24. D	24. A	24. D	24. C	23. A 42. D
25. B	25. A	25. D	25. C	25. B	24. C 43. C
26. A	26. C	26. C	26. B	26. A	25. B 44. D
27. D	27. D	27. A	27. C	27. A	26. D 45. D
28. A	28. A	28. B	28. A	28. A	27. A 46. C
29. D	29. B	29. D	29. A	29. B	28. A 47. D
30. B	30. C	30. C	30. D	30. C	29. C 48. C
					30. B 49. B
					31. D 50. B
					32. A
					33. C
					34. B
					35. D

NB: Please teachers are requested to scrutinize this marking scheme before use. Its worthy.

GRADE 4