



STARLIGHT ASSESSMENT TEST

COMPETENCY BASED EDUCATION

GRADE 4 2026

STR001 - 26

- MATHEMATICS -

Time: 1hr 15min

Learner's Name: Admission No:

School: Date:

- During a mathematics lesson, Tr. Felister asked one of her pupils to name the third day of the week. The correct answer is:
 - Tuesday
 - Wednesday
 - Thursday
 - Monday
- Complete the pattern below:
81, 80, 79, ____
 - 80
 - 77
 - 78
 - 82
- What is the place value of digit three in the following number: 347
 - Ones
 - Thousands
 - hundreds
 - Tens
- Miriam was given 608 bottles of soda, write the number in words.
 - Six hundred and eighteen
 - eight hundred and six
 - Six hundred and eight
 - Sixty eight.
- What is two hundred and nineteen in figures?
 - 2019
 - 209
 - 219
 - 2009
- Peter had 246 bottles of soda. His brother gave him 70 more bottles of soda. How many bottles of soda did he have altogether?
 - 316
 - 176
 - 326
 - 216
- Muga had sh. 896. He spent sh. 648. How much money was he left with?
 - 240
 - 248
 - 262
 - 1544
- A lorry has 6 wheels. What is the total number of wheels on 4 such lorries?
 - 24
 - 10
 - 20
 - 2

ASSESSMENT RUBRICS

Exceeding Expectation			Meeting Expectation			Approaching Expectation			Below Expectation		
EE1	4.0	90-99	ME1	3.0	58-74	AE1	2.0	31-40	BE1	1.0	11-20
EE2	3.5	75-89	ME2	2.5	41-57	AE2	1.5	21-30	BE2	0.5	1-10

9. Joshua had 63 apples. He packed the apples into boxes. Each box had 7 apples.

How many boxes did Joshua use?

- A. 19
- B. 9
- C. 70
- D. 44

10. 100 shillings note has how many 5 shillings coin?

- A. 10
- B. 50
- C. 20
- D. 15

11. Ouma has sh. 300. Kamau has sh.200 and Timothy has sh.50. How much money do they have altogether?

- A. 300
- B. 500
- C. 50
- D. 550

12. Arrange the following numbers from the smallest to the largest.

250, 150, 950, 356, 655

- A. 655, 950, 356, 250, 150
- B. 950, 150, 356, 250, 655
- C. 950, 655, 356, 250, 150
- D. 150, 250, 356, 655, 950

13. Add

$$\begin{array}{r} 437 \\ + 526 \\ \hline \\ \hline \end{array}$$

- A. 953
- B. 89
- C. 963
- D. 863

14. In a school there are 267 girls and 174 boys. How many pupils are there altogether?

- A. 441
- B. 93
- C. 331
- D. 431

Subtract

$$\begin{array}{r} 383 \\ -137 \\ \hline \\ \hline \end{array}$$

- A. 255
- B. 254
- C. 246
- D. 354

16. Joshua bought 999 sheep. He sold 99 of them. How many sheep did he remain with?

- A. 909
- B. 900
- C. 1099
- D. 899

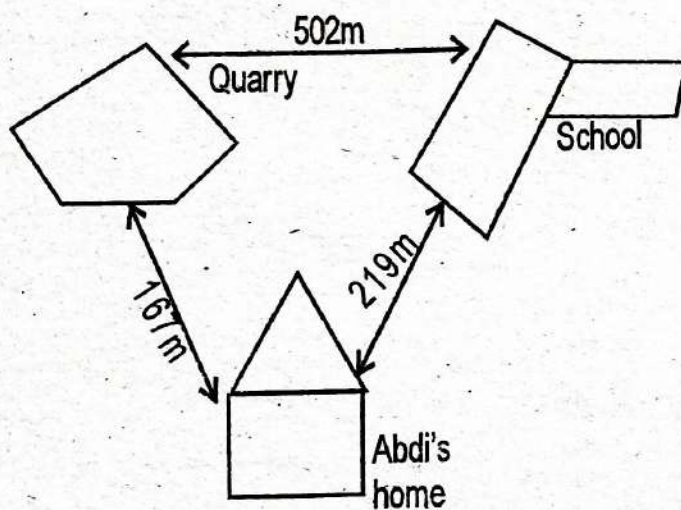
17. Eight passengers sit on one seat. How many seats are needed for 64 passengers?

- A. 56
- B. 72
- C. 7
- D. 8

18. Alice shared twenty four books among her 4 children equally, How many books did each get?

- A. 6
- B. 4
- C. 96
- D. 28

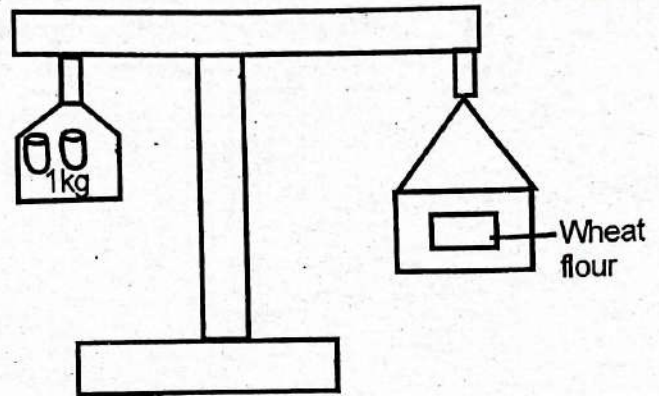
19. Study the diagram below.



Abdi left his home to school through the quarry. How many metres did he cover?

- A. 669m
- B. 219m
- C. 167m
- D. 502m

Look at the diagram below.



The weight of wheat flour is

- A. 1kg
- B. 2kg
- C. 4kg
- D. 5kg

21. Brian's mother bought 5kg of cake for Brian's birthday. Brian and his friends ate 3kg of the cake. How much cake was left over?

- A. 8kg
- B. 15kg
- C. 2kg
- D. 5kg


22. Odoyo bought 7 litres of paraffin. He put 2 litres in one lamp and 3 litres in another lamp. How many litres were left?

- A. 2 litres
- B. 12 litres
- C. 10 litres
- D. 9 litres

23. 120 minutes make _____ hours.

- A. 3
- B. 4
- C. 2
- D. 4

24. What time is it?



- A. 15 minutes to 11
- B. 15 minutes past 11
- C. 3.55pm
- D. 5 minutes to 3


25. A bus took 4 hours 51 minutes to travel from Mombasa to Nyeri and 4 hours 5 minutes to travel from Nyeri to Kisumu. How much time did it take from Mombasa to Kisumu?

- A. 8hrs 56minutes
- B. 8hours
- C. 8hrs 51 minutes
- D. 8hrs 55 minutes

26. A basket ball match started at 12:15pm. It lasted 1 hour and 20 minutes. At what time did the game end?

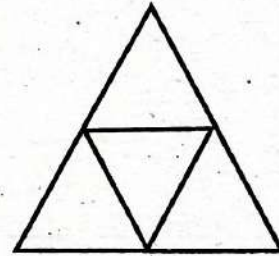
- A. 1.35pm
- B. 1.35am
- C. 1.15pm
- D. 2.35pm

27. The shape below is a



- A. square
- B. rectangle
- C. triangle
- D. circle.

28. How many triangles are in the figure below?







- A. 4
- B. 3
- C. 5
- D. 6

29. Multiply 12×4

- A. 48
- B. 16
- C. 3
- D. 46

30. Complete the pattern.



- A. 
- B. 
- C. 
- D. 



STARLIGHT ASSESSMENT TEST

COMPETENCY BASED EDUCATION

GRADE 4 2026

STR001 - 26

– ENGLISH –

Time: 1hr 15min

Learner's Name: Admission No:
 School: Date:

Read the dialogue below and answer questions 1-5

Teacher: Good morning Juma
Juma: Good morning teacher.
Teacher: I noticed you were not in school yesterday. What was the problem?
Juma: I am sorry I was not feeling well.
Teacher: Did you go to the hospital?
Juma: Yes, I was diagnosed with Malaria.
Teacher: I hope you are taking the medication as instructed.
Juma: Yes, I am feeling better.
Teacher: Remember to take a lot of water too during the day.
Juma: Thank you teacher for the concern.
Teacher: You are welcome.

- | | |
|--|---|
| <p>1. At what time of the day is the conversation happening?</p> <p>A. Evening
 B. Mid morning
 C. Afternoon
 D. Morning</p> <p>2. Why was Juma absent from school?</p> <p>A. He was tired
 B. He had gone on a trip
 C. He was sick
 D. He was feeling well</p> <p>3. Which disease was Juma suffering from?</p> <p>A. Malaria
 B. Flu
 C. Marasmus
 D. Cholera</p> | <p>4. Where did Juma go when he was not feeling well?</p> <p>A. School
 B. Hospital
 C. Market
 D. Class</p> <p>5. Which one of the following is not a word or an etiquette phrased used in the dialogue?</p> <p>A. I hope
 B. Thank you
 C. I am sorry
 D. You are welcome</p> |
|--|---|

ASSESSMENT RUBRICS

Exceeding Expectation			Meeting Expectation			Approaching Expectation			Below Expectation		
EE1	4.0	90-99	ME1	3.0	58-74	AE1	2.0	31-40	BE1	1.0	11-20
EE2	3.5	75-89	ME2	2.5	41-57	AE2	1.5	21-30	BE2	0.5	1-10

Read the passage below then answer questions that follows.

Three brothers named Joe, Tedd and Rob like to help their parents at home. On Saturday morning, the boys began their work early. They knew if they worked fast, they would have time to play.

Joe quickly finished washing the dishes, Rob mopped the house and Tedd swept the compound.

In the end, they all finished about the same time. Afterwards, they cleaned themselves up and enjoyed the rest of the afternoon.

6. What do the three brothers like to do at home?
- A. Play
 - B. Help their parents
 - C. Do homework
 - D. Sleep
7. Why did the boys work fast?
- A. So that they would have time to play.
 - B. So that they would not be late for school.
 - C. To avoid finishing early.
 - D. To finish the same time.
8. The brothers did the following chores except
- A. washing dishes
 - B. mopping the house
 - C. sweeping the compound
 - D. washing clothes

9. What did the brothers do after they finished their work?
- A. They washed clothes.
 - B. They cleaned the compound.
 - C. They cleaned themselves.
 - D. They worked fast.
10. At what time did they finish doing their work?
- A. Early morning
 - B. Evening
 - C. Mid morning
 - D. Afternoon

Read the passage below then answer questions that follow.

A computer is a machine. It makes our work easier. We can use a computer to do many things. We can type letters using a computer. It can do work faster than us.

One day Henry's father bought him a tablet. It was yellow in colour. Henry was very excited to use a tablet for the first time. He did many things with it. He read stories and played games using the tablet. He also wrote a short story on his tablet.

11. What is a computer?
- A. A mobile phone
 - B. A machine
 - C. A book
 - D. A tool
12. Why is a computer useful?
- A. It makes our work easier.
 - B. It is easy to operate.
 - C. It is cheap.
 - D. It does many things.
13. What did Henry's father buy?
- A. A phone
 - B. An Ipad
 - C. A laptop
 - D. A tablet
14. How did Henry feel after receiving the tablet?
- A. Sad
 - B. Angry
 - C. Proud
 - D. Happy
15. Henry did the following with the tablet except
- A. read stories
 - B. played games
 - C. texted people
 - D. wrote a short story

Cloze test

Fill in the blank spaces 16 to 20 by choosing the best answer from the choices given.

Dennis 16 to be a good person when 17 grows up. He 18 not decided which job he wants to do. 19 father told him that he can be a pilot and fly an 20.

- | | | | |
|-----------------|--------------|--------------|--------------|
| 16. A. wants | B. want | C. wanting | D. need |
| 17. A. they | B. I | C. he | D. she |
| 18. A. have | B. haven't | C. has | D. hasn't |
| 19. A. Her | B. His | C. He's | D. Him |
| 20. A. eroplane | B. aeloplane | C. aeroplane | D. aeroplane |

Choose the best conjunction to complete the sentences.

21. Ted is friendly kind.
A. but B. or
C. and D. yet
22. Ann is sad she did not go on the trip.
A. because B. and
C. nor D. or

Choose the correctly spelt word

23. A. safety B. swimming
C. fifteen D. adres
24. A. hamble B. extended
C. foreward D. handge

Choose the correct word to fill in the gaps and read.

25. Mary her room everyday
A. Clean
B. Cleaned
C. cleans
D. cleaning
26. July is than January.
A. coldest
B. colder
C. more cold
D. very cold

Fill the gaps with the opposites of the underlined word.

27. The desert is cold at night.
A. dark
B. hot
C. warm
D. bright
28. The ants looked small next to the apple tree.
A. big
B. little
C. tiny
D. dull

Choose the correct occupation for the question 29 and 30.

29. A person who makes furniture is called
A. mason
B. plumber
C. barber
D. carpenter
30. A person who flies aeroplanes is called.
A. mechanic
B. pilot
C. judge
D. jockey



STARLIGHT ASSESSMENT TEST

COMPETENCY BASED EDUCATION

GRADI LA 4 2026

STR001 - 26

Muda: Saa 1 Dakika 15

– KISWAHILI –

Jina la mtahiniwa:..... Nambari ya Tathmini:

Jina la shule:..... Tarehe:.....

Soma mazungumzo yafuatayo kisha ujibu maswali 1-5.

Timina: Mama mimi sitaki dawa.

Mama: Timina dawa ndizo zitakusaidia upone.

Timina: Lakini mama najihisi nimepona.

Mama: Kujihisi ni tofauti na kupona. Ili upone na malaria itoke mwilini, lazima ukamilishe dawa zote ulizopewa na daktari.

Timina: Mama lakini...

Mama: (*akimkata kauli*): Hakuna cha lakini hapa, shika tembe hizi umeze kisha unywe uji.

Timina: Mama unajua sipendi uji, nitakunywa sharubati.

Mama: Uji ndiyo itakusaidia kuwa na nguvu.

Timina: Mama, Daktari Pendo hakusema hivyo.

Mama: Kazi ya daktari ni kukupima na kukupa dawa, ni jukumu langu kama mama kuhakikisha umemeza dawa na umekula vyema ili kuwa na nguvu.

1. Timina alikuwa anaugua ugonjwa upi?

- A. Malale
- B. Malaria
- C. Kipindupindu
- D. Ukoma

2. Mbona Timina hakutaka kumeza tembe?

- A. Alikuwa anajihisi mgonjwa.
- B. Alikuwa anajihisi amepona.
- C. Mama yake alikuwa anamlazimisha.
- D. Alikuwa amepona.

3. Timina alitaka kunywa nini badala ya uji?

- A. Sharubati
- B. Chai
- C. Maziwa
- D. Maji

4. Daktari aliyemtibu Timina alikuwa anaitwa

- A. Juma
- B. Zawadi
- C. Pendo
- D. Ouma

5. Timina alitakiwa kula vyema ili

- A. opone
- B. ameze dawa
- C. apate nguzu
- D. ashibe

VIWANGO VYA KUTATHMINI

Kuzindisha Matarajio			Kufikia Matarajio			Kukaribia Matarajio			Mbali na Matarajio		
KZ1	4.0	90-99	KF1	3.0	58-74	KK1	2.0	31-40	MB1	1.0	11-20
KZ2	3.5	75-89	KF2	2.5	41-57	KK2	1.5	21-30	MB2	0.5	1-10

Soma ufahamu ufuatao kisha ujibu maswali.

Shamba la Bwana Ombati lina miti na mimea iliyo na afya. Katika shamba hili Mzee Ombati amefuga mbuzi, ng'ombe na kondoo wengi. Ana wafanyakazi zaidi ya kumi ambao humsaidia kulima, kupalilia na kutunza mifugo wake. Anaishi sehemu ambayo ina mvua nyingi ambayo husaidia ukuaji wa mazao. Hewa shambani ni safi na yenye amani.

- | | |
|---|--|
| <p>6. Ni mnyama gani kati ya hawa hapatikani katika shamba la Mzee Ombati?
A. Ng'ombe B. Mbuzi
C. Punda D. Kondoo</p> <p>7. Mzee Ombati alikuwa na wafanyakazi wangapi?
A. Kumi
B. Kumi na wawili
C. Zaidi ya kumi
D. Ishirini</p> | <p>8. Ni nini husaidia ukuaji wa mazao ya Bwana Ombati?
A. Milna
B. Wafanyakazi
C. Mvua
D. ardhi</p> <p>9. Hewa katika shamba la mzee Ombati ni?
A. chafu B. safi
C. kali D. baridi</p> |
|---|--|

Soma taarifa fupi kisha ujibu maswali

Paliondoka dada watatu. Walipendana sana kama chanda na pete. Majina yao yalikuwa Maria, Mariamu na Mariamba. Maria alisaidia kupika, Mariamu alifua nguo na kuosha vyombo. Naye Mariamba alipiga nguo pasi na kuzipanga kabatini.

- | | |
|--|--|
| <p>10. Hadithi inahusu dada wangapi?
A. Wawili B. Wanne
C. Watano D. Watatu</p> <p>11. Ni dada yupi alizipiga nguo pasi?
A. Mariamu B. Mariamba
C. Maria D. Hatujaambiwa</p> | <p>12. Mariamu alijihusisha na nini?
A. Kupika
B. Kufua nguo
C. Kuvua nguo
D. Kupanga nguo kabatini.</p> |
|--|--|

Soma taarifa ifuatayo kisha ujibu maswali.

Mama ni mwalimu bora kuliko wote duniani. Ndiye mwalimu wa kwanza katika maisha ya mtoto. Maneno na mafunzo ya kwanza hutoka kwa mama.

Mama mzuri humfunza mtoto usafi, bidii na heshima. Mama akiwa mzuri na watoto huwa vivyo hivyo.

Mama mchoyo huwafunza wana wake uchoyo. Naye mama mwenye kelele na ukali huwapiga watoto wake ovyo. Mtoto wa mama mwema huwa mfano mzuri shuleni. Hupendwa na walimu na kuheshimiwa na wanafunzi wengine. Lazima tuwape wazazi shukrani zetu.

- | | |
|---|--|
| <p>13. Ni nani humpa mtoto mafunzo ya kwanza?
A. Baba B. Mwalimu
C. Mama D. Daktari</p> <p>14. Ni mtoto yupi ambaye hupendwa na walimu?
A. Wa mama mwema
B. Wa baba mwema
C. Mtukutu
D. Mchafu</p> | <p>15. Mwandishi anasema tuwafanyie nini wazazi wetu?
A. shukrani
B. chakula
C. mavazi
D. kazi</p> |
|---|--|

Chagua jibu sahihi kujaza mapengo katika kifungu kifuatacho.

Bendera ya Kenya 16 rangi 17. Nyekundu, kijani, nyeupe na 18.
Rangi zote hizi zinawakilisha vitu tofauti. Bendera 19 ina picha ya shujaa wa vita -
Mshale na upinde - ambayo inamaanisha ujasiri, nguvu, na mshikamano 20 watu wa
Kenya.

- | | | | |
|---------------|-------------|------------|---------------|
| 16. A. zina | B. lina | C. kina | D. ina |
| 17. A. tatu | B. mbili | C. tano | D. nne |
| 18. A. nyeusi | B. zambarau | C. manjano | D. hudhurungi |
| 19. A. hili | B. hii | C. hizi | D. hicho |
| 20. A. ya | B. cha | C. wa | D. la |

Katika swali la 21-30, jibu kila swali kulingana na maagizo uliyopewa.

21. Ni neno lipi kati ya haya halijaambatanishwa na wingi wake sahihi?

- A. Karatasi - karatasi
B. Muuvi - wauvi
C. Jiko - majiko
D. Mlima - malima

22. Tumia neno sahihi Kujaza pengo.

Ugali _____ ni mtamu.

- A. hii B. huu
C. hiki D. huyu

23. Kanusha sentensi:

Yeye alisoma kitabu.

- A. Yeye alisoma vitabu.
B. Yeye hakusoma vitabu
C. Wao walisoma vitaby.
D. Yeye hakusoma kitabu.

24. Kinyume cha kitenzi keti ni

- A. cheka
B. simama
C. lala
D. meza

25. Tumia Kiulizi sahihi kukamilisha Sentensi:

Unalia kwa _____?

- A. gani
B. mbona
C. nani
D. nini

Jibu salamu zifuatazo

26. Hodi

- A. starehe
B. ingia
C. ni nani
D. karibu

27. Hujambo

- A. Sijui
B. Njema
C. Muzuri
D. Sijambo.

28. Kamilisha Methali:

Mkono mtupu.

- A. haurambwi
B. haurabwi
C. haulambwi
D. haulei mwana.

29. **Andika kwa maneno:**

531

- A. Mia tano thelathini.
B. Elfu tano na thelathini na moja.
C. Mia tano thelathini na moja.
D. Tano tatu moja.

30. Tenganisha silabi: chakula

- A. ch-a-k-u-l-a
B. cha-ku-la
C. ch-aku-la
D. ch-ak-ula.



STARLIGHT ASSESSMENT TEST

COMPETENCY BASED EDUCATION

GRADE 4 2026

STR001 - 26

- CREATIVE ARTS & SPORTS -

Time: 1hr 15min





Learner's Name: Admission No:
 School: Date:

INSTRUCTIONS

- Write your name, school, admission number and date in the spaces provided above.
- Answer all questions in this paper.
- Circle the answer of the questions with multiple choices.

1. Pulling and pushing can be done in all the following directions **except**
- backwards
 - forwards
 - upwards
 - sideways

2. Which of the lines drawn below is a wavy?

- 
- 
- 
- 

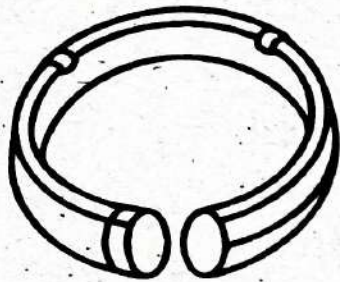
3. Which of the following body parts are used when skipping?
- legs
 - shoulder
 - stomach
 - chest
4. All the following materials can be used for colour mixing. Which one cannot?
- water
 - palettes
 - glue
 - brush
5. Rhythm can be created by doing all the following **except**
- skipping
 - clapping
 - shouting
 - stamping

ASSESSMENT RUBRICS

Exceeding Expectation			Meeting Expectation			Approaching Expectation			Below Expectation		
EE1	4.0	90-99	ME1	3.0	58-74	AE1	2.0	31-40	BE1	1.0	11-20
EE2	3.5	75-89	ME2	2.5	41-57	AE2	1.5	21-30	BE2	0.5	1-10

6. Grade 4 pupils were asked by their Creative Art teacher to name one animal that gallops. Which of the following is correct?
- A. horse
 - B. cat
 - C. lion
 - D. dog

7. Look at the ornament below




The ornament shown above is worn on which body part?

- A. Ears
 - B. Wrist
 - C. Neck
 - D. Waist
8. Grade three pupils of Bidii primary wanted to make a necklace. Which of a materials will they not need?
- A. String
 - B. Beads
 - C. Needle
 - D. Stick

9. The Kenya National Anthem is sang in _____ languages.
- A. two
 - B. three
 - C. one
 - D. four

10. The picture below shows a drawing of the Kenyan flag. Which colour should be used at the part marked M if he wants it to look like the real flag?



- A. Red
- B. Green
- C. white
- D. Black

11. All the following animals can make melodic sounds. Which one does not?
- A. Frog
 - B. Rooster
 - C. Parrot
 - D. Snail
12. A tune of a song is called
- A. melody
 - B. rhythm
 - C. pitch
 - D. choir

13. Winnie wanted to move a heavy object.

She can do so by

- A. lifting
- B. pulling
- C. cutting
- D. weighing


14. Grade 4 pupils at Bondeni Primary were discussing about ways of skipping. They identified all the following ways except

- A. Fast skipping
- B. Rolling
- C. Side skipping
- D. Partner skipping

15. Pupils of Meru Primary wanted to make a collage. They required all the following materials except

- A. cardboard
- B. adhesives
- C. scissors
- D. soil

16. Look at the item below.



The item shown above has been made using

- A. loam
- B. sand
- C. clay
- D. alluvial

17. Songs sang to soothe babies to sleep are called

- A. worship songs
- B. lullabies
- C. folk songs
- D. patriotic songs

18. All the following objects can be made by weaving except

- A. hats
- B. baskets
- C. bags
- D. sufuria

19. The loudness or softness of a sound is called

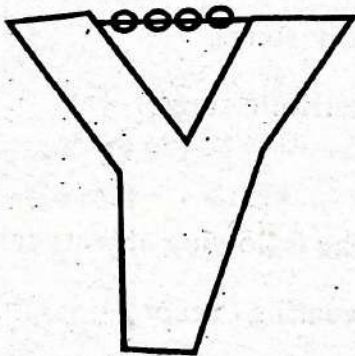
- A. pitch
- B. melody
- C. rhythm
- D. tempo

20. Name the following parts of the body one used when performing rounds.

Which one is not?

- A. Legs
- B. Arms
- C. Shoulders
- D. Head

21. The musical instrument below is played by



- A. shaking
- B. plucking
- C. bowing
- D. blowing

22. Which one of the following materials can be used to paint?

- A. Hammer
- B. Earpad
- C. Brush
- D. Scissors


23. Songs do all the following in society except

- A. they entertain
- B. they are a source of income
- C. they encourage
- D. they abuse leaders

24. The Kenya National Anthem has _____ stanzas.

- A. one
- B. two
- C. four
- D. three

25. Draw and paint a guitar in the space provided below. (5mks)





STARLIGHT ASSESSMENT TEST

COMPETENCY BASED EDUCATION

GRADE 4 2026

STR001 - 26

- INTEGRATED SCIENCE -

Time: 1hr 15min

Learner's Name:..... Admission No:
 School:..... Date:.....

INSTRUCTIONS

- a) Write your name, school, admission number and date in the spaces provided above.
- b) Answer all questions in this paper.
- c) Circle the answer of the questions with multiple choices.

1. _____ hygiene is about the cleanliness of the mouth.
 - A. Table
 - B. Oral
 - C. Kitchen
 - D. Body

2. The following materials are used as beddings, except
 - A. mattress
 - B. bedsheet
 - C. blankets
 - D. wipers

3. We should _____ our beddings after we have wet the bed.
 - A. wash
 - B. throw away
 - C. burn
 - D. replace

4. A _____ checks our teeth
 - A. veterinary
 - B. dentist
 - C. doctor
 - D. nurse

5. The following are groups of food except
 - A. carbohydrates
 - B. vitamins
 - C. proteins
 - D. sweets

6. What do we use to make our hair neat?
 - A. nailcutter
 - B. handkerchief
 - C. comb
 - D. sponge

ASSESSMENT RUBRICS

Exceeding Expectation			Meeting Expectation			Approaching Expectation			Below Expectation		
EE1	4.0	90-99	ME1	3.0	58-74	AE1	2.0	31-40	BE1	1.0	11-20
EE2	3.5	75-89	ME2	2.5	41-57	AE2	1.5	21-30	BE2	0.5	1-10

7. Jane was sent to the market to buy vegetables. She bought all the following **except**

- A. avocado
- B. kales
- C. spinach
- D. tomatoes

8. Grade four learners were asked to bring energy giving foods to school. Which of the following did they bring?

- A. onions
- B. rice
- C. chicken
- D. pork

9. Four pupils ate the following meals during lunch time. Who ate a balanced diet?

- A. Kate - Rice, chapati, beans
- B. Brenda - Pizza, juice, chicken
- C. Ben - Ugali, beef, cabbage
- D. Caro - Sukuma wiki, beans, chicken

10. The following are sources of heat **except**

- A. candle
- B. charcoal
- C. electricity
- D. sun

11. Naomi was asked to name the uses of heat. She gave the following answers, which answer is **incorrect**?

- A. Cooking
- B. Ironing clothes
- C. Drying clothes
- D. Reading at night

12. The picture below shows an animal. The animal is used for



- A. transportation
- B. chasing rats
- C. gives milk
- D. produces meat

13. Throwing away of waste responsibly is called

- A. disposing
- B. collecting
- C. washing
- D. sweeping

14. The following items can be found inside a first aid kit **except**

- A. bandage
- B. antiseptics
- C. syringe
- D. pain killer

15. Which one of the following foods can we eat raw?

- A. carrot
- B. beef
- C. kales
- D. eggs

16. Which of the following foods is correctly matched with the part that we eat

A.  leaves

B.  roots

C.  fruit

D.  stem

17. Which one of the following animals whose waste is not used as manure?

A. cow

B. hen

C. rabbit

D. dog

18. The following are correct ways of handling food except


A. use clean utensils to serve food.

B. food should be left open

C. store food in a clean place.

D. wash hands before handling food

19. The picture below shows a leaf



This leaf has holes because of

A. insects

B. cows

C. birds

D. medicine

20. Mkulima, a farmer noticed some unwanted plants growing among his maize crops, unwanted crops or plants are called

A. vegetables

B. fruits

C. trees

D. weeds

21. Which part of a plant grows underground?

A. Roots

B. Stem

C. Leaves

D. Flowers

22. The picture below shows a protective cloth worn when handling food



What is the name of the clothing

- A. hat
 - B. gloves
 - C. apron
 - D. oven goggles
23. What do plants need to make their own food?
- A. Soil, heat, wind
 - B. Water, air, sunlight
 - C. Rocks, sunlight
 - D. Soil, fire, water
24. We use salty water when washing handkerchiefs to remove
- A. dust
 - B. colour
 - C. mucus
 - D. stains
25. Otieno has fallen down and injured his hand. You can help him by giving him
- A. money
 - B. food
 - C. first aid
 - D. Gifts

26. All the following areas can cause accidents
Except

- A. open pits
- B. slippery floor
- C. thorny bushes
- D. organized bedroom

27. We can care for plants in all the following ways **except**

- A. adding manure
- B. pruning
- C. watering them
- D. cutting them

28. All the following can form shadows **except**

- A. clear glass
- B. stones
- C. times
- D. animals

29. Which of the following is **not** a source of light?

- A. sunshine
- B. firefly
- C. stars
- D. bulb.

30. Which of the following animals is **wrongly** matched with the food we get from it?

- A. Hen - Chicken
- B. Cow - Fillet
- C. Pig - Pork
- D. Sheep - Mutton



STARLIGHT ASSESSMENT TEST

COMPETENCY BASED EDUCATION

GRADE 4 2026

STR001 - 26

SOCIAL STUDIES & RELIGIOUS EDUCATION

Time: 1hr 15min

Learner's Name: Admission No:
 School: Date:

1. Nyamaiya area in Nyamira County received too much rain. The rain was likely to cause
 - A. drought
 - B. floods
 - C. light winds
 - D. clear skies

2. Floods can destroy all the following except
 - A. homes
 - B. crops
 - C. rivers
 - D. animals

3. Grade four pupils were asked by their teacher. Unfavourable weather conditions by their teacher. Which of the following is not correct
 - A. floods
 - B. drought
 - C. light winds
 - D. strong wind

4. All the following happen during a dry season except
 - A. crops dry
 - B. Animals die
 - C. seeds germinate
 - D. Water sources dry

5. All the following are sources of water except
 - A. well
 - B. rivers
 - C. tank
 - D. borehole

6. To make water safe for drinking we can
 - A. add manure
 - B. add fertilizer
 - C. boil
 - D. add salt

7. Which of the following is not a method used to remove dirt from water?
 - A. Decanting
 - B. Washing
 - C. Filtration
 - D. Boiling

8. Which of the following is not a type of soil?
 - A. Loom
 - B. Plasticine
 - C. Sand
 - D. Clay

9. The smoothness or roughness of soil is called
 - A. feel
 - B. fertility
 - C. texture
 - D. alluvial

ASSESSMENT RUBRICS

Exceeding Expectation			Meeting Expectation			Approaching Expectation			Below Expectation		
EE1	4.0	90-99	ME1	3.0	58-74	AE1	2.0	31-40	BE1	1.0	11-20
EE2	3.5	75-89	ME2	2.5	41-57	AE2	1.5	21-30	BE2	0.5	1-10

10. A hill of soil made by ants is called an
A. Mountain
B. anthill
C. sand dune
D. swamp

11. Tina wanted to transport some sweet potatoes to the market. Which of the following animals can she use??
A. Dog
B. Cow
C. Donkey
D. Sheep

12. A group of people living in the same area are called
A. school
B. community
C. family
D. church

13. Which of the following is a safe place in the Community
A. Church
B. forest
C. abandoned house
D. Caves

14. A person walking on foot is known as
A. pedestrian
B. walker
C. motorist
D. cyclist

15. The road sign below means




- A. children not allowed
- B. stop
- C. children crossing
- D. no entry

16. Dances, songs and poems are examples of events
A. environmental
B. cultural
C. church
D. school

17. People who buy and sell goods are called
A. buyers
B. traders
C. sellers
D. tourists

18. Which soil did pupils used to make the object below?



- A. loam
- B. clay
- C. sand
- D. alluvial

19. Trees are important because they help to _____ the soil.
A. destroy
B. conserve
C. dirtify
D. litter

20. Which of the following wastes cannot be reused?
A. Cow dung
B. Plastic bottles
C. Vegetable waste
D. Broken pieces of mirror

CHRISTIAN RELIGIOUS EDUCATION

21. God sent Jonah to the people of
- A. Bethlehem
 - B. Nazareth
 - C. Nineva
 - D. Jericho
22. The new Testament has _____ books.
- A. 27
 - B. 21
 - C. 39
 - D. 66
23. Naaman had a bad
- A. headache
 - B. stomachache
 - C. skin disease
 - D. fever
24. When we pray we show _____ to God.
- A. pride
 - B. respect
 - C. hatred
 - D. dishonour
25. We should not follow
- A. teachers
 - B. relatives
 - C. strangers
 - D. parents
26. Jesus taught his disciples how to
- A. pray
 - B. disobey
 - C. sin
 - D. play
27. Shadrach, Meshack and _____ refused to worship a golden statue.
- A. Solomon
 - B. Moses
 - C. Daniel
 - D. Abedinego
28. Peace, love and Joy are fruits of the
- A. Holy Spirit
 - B. parents
 - C. teachers
 - D. devil
29. Respecting the elderly people can earn us
- A. diseases
 - B. curses
 - C. blessings
 - D. money
30. Moses was told to remove his sandals because he was standing on a _____ place.
- A. dirty
 - B. clean
 - C. holy
 - D. dangerous

ISLAMIC RELIGIOUS EDUCATION

21. In every swalah we must recite Surah

Fatiha and _____

- A. Surah Ikhlas
- B. any other surah
- C. Surah Al-Falaq
- D. Surah Naas

22. Allah (S.W.T) cursed Abulahab at

- A. Mount Swafa
- B. Mount Nur
- C. Mount Arafah
- D. Mount Rahma

23. In Surah Nasr, the prophet (S.A.W) got the _____ of Allah. (S.W.T)

- A. call
- B. guidance
- C. help
- D. protection

24. Ustadh tells you to carry the Qur'an for him. You should first

- A. wear Kanzu
- B. wash your bag
- C. say dua
- D. perform wudhu

25. There are _____ pillars of Iman.

- A. six
- B. five
- C. four
- D. three

26. People who do good deeds will be rewarded in

- A. Qabr
- B. Jahannam
- C. Heaven
- D. Janna

27. Allah created different animals, birds and people the way He wished. And that is

- A. Islam
- B. Qadr
- C. Ihsaan
- D. Iman

28. Lady _____ convinced prophet Muhammad (SAW) to work for her as a businessman.

- A. Halima
- B. Amina
- C. Khadja
- D. Zuliikha

29. Telling lies is a sign of a

- A. Munafiq
- B. Dayuth
- C. Kafir
- D. a thief

30. If you meet an elder person _____ him first.

- A. greet
- B. salute
- C. give way for
- D. bend for

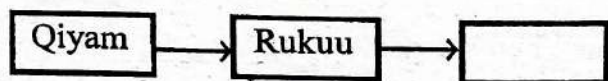
31. A person who says adhaan in the mosque is called the

- A. Immam
- B. Bilal
- C. Amir
- D. Sheikh

32. We perform swalatu Maghrib

- A. at noon
- B. at night
- C. in the dawn
- D. at sunset

33. Fill the missing posture of swalah in the Rakaa.



- A. Jasla
- B. Tahiyatu
- C. I'tidal
- D. Sujud

34. Always enter a mosque with

- A. left leg
- B. silence
- C. right leg
- D. water

35. _____ is not a place of worship.

- A. Cave
- B. Masjid
- C. Church
- D. Temple



STARLIGHT ASSESSMENT TEST

COMPETENCY BASED EDUCATION

GRADE 4 2026

KPSEA

MARKING SCHEME

STR001 - 26

MATHEMATICS ACTIVITIES	ENGLISH ACTIVITIES	KISWAHILI ACTIVITIES	INTERGRATED SCIENCE ACTIVITIES	CREATIVE ARTS & ACTIVITIES	SOCIAL STUDIES & RELIGIOUS ACT.
1. A	1. D	1. B	1. B	1. C	1. B <u>IRE</u>
2. C	2. C	2. B	2. D	2. B	2. C 31. B
3. C	3. A	3. A	3. A	3. A	3. C 32. A
4. C	4. B	4. C	4. B	4. C	4. C 33. C
5. C	5. A	5. C	5. D	5. C	5. C 34. D
6. A	6. B	6. C	6. C	6. A	6. C 35. A
7. B	7. A	7. C	7. A	7. B	7. B 36. D
8. A	8. D	8. C	8. B	8. D	8. B 37. B
9. B	9. C	9. B	9. C	9. A	9. C 38. C
10. C	10. D	10. D	10. A	10. B	10. B 39. A
11. D	11. B	11. B	11. D	11. D	11. C 40. A
12. D	12. A	12. B	12. B	12. A	12. B 41. B
13. C	13. D	13. C	13. A	13. B	13. A 42. D
14. A	14. D	14. A	14. C	14. B	14. A 43. C
15. C	15. C	15. A	15. A	15. D	15. C 44. C
16. B	16. A	16. D	16. B	16. D	16. B 45. A
17. D	17. C	17. D	17. D	17. B	17. B
18. A	18. C	18. A	18. B	18. D	18. B
19. A	19. B	19. B	19. A	19. A	19. B
20. B	20. D	20. C	20. D	20. C	20. D
21. C	21. C	21. D	21. A	21. A	<u>CRE</u>
22. A	22. A	22. A	22. C	22. C	21. C
23. C	23. A	23. D	23. B	23. D	22. A
24. D	24. B	24. B	24. C	24. D	23. C
25. A	25. C	25. D	25. C		24. B
26. A	26. B	26. D	26. D		25. C
27. B	27. B	27. D	27. D		26. A
28. C	28. A	28. C	28. A		27. D
29. A	29. D	29. C	29. D		28. A
30. A	30. B	30. B	30. B		29. C
					30. C