



SCHOOL BASED ASSESSMENT

ENGLISH:
LANGUAGE
GRADE 4 - 2026

001

TIME: 1 hour

Read the conversation below and then answer questions 1 to 5.



Mr. Masumbuko : Good morning class?
Learners : 1
Mr. Masumbuko : How are you?
Learners : 2
Mr. Masumbuko : I am also fine. I wish to welcome you all to grade four.
Learners : 3
Mr. Masumbuko : You are all welcome.
Omanyala : Excuse me Mr. Masumbuko, are you going to be our class teacher?
Mr. Masumbuko : 4
Aminata : As a class, we are very lucky to have you as our class teacher.
Mr. Masumbuko : Let us settle down. I will be teaching you English 5
Christian Religious Education.

- 1. A. Good morning teacher
C. Good morning to you
B. Good morning Masumbuko
D. Good morning Mr. Masumbuko
2. A. We are a bit okay
C. Fine
B. We are fine thank you Mr. Masumbuko
D. Not well thank you Mr. Masumbuko
3. A. Waa! that is good
C. We are comfortable already
B. That is very exciting
D. Thank you Mr. Masumbuko
4. A. Oh yes, I will be the class teacher for grade four
B. Oh no, I will be the class teacher for this class
C. Oh yes, I am not sure yet
D. Yes, I will not be
5. A. although B. together C. and D. but

Read the passage below and then answer questions 6 to 9.



Once upon a time, the monkey and the fox were great friends. However, the monkey was very hardworking while the fox was lazy. The monkey would go out to search for food while the fox slept. The monkey was very kind and would share the food with his friend. Since he had a lot of food, the monkey did not mind. After sometime, a drought occurred and there was no rain. The animals had no food to eat. The two friends objected to go out to look for food but there wasn't any.

6. The monkey and fox were

A. once friends	B. always friends	C. great friends	D. never friends
-----------------	-------------------	------------------	------------------
7. Who went searching for food?

A. The fox and the monkey	B. The fox only	C. The monkey only	D. None of the above
---------------------------	-----------------	--------------------	----------------------
8. The word **drought** as used in the story means

A. too much rain	B. lack of rain	C. lack of food	D. bad weather
------------------	-----------------	-----------------	----------------
9. We say a _____ of bees.

A. flight	B. group	C. swarm	D. honey
-----------	----------	----------	----------

Read the passage below and then answer questions 10 to 12.



Science lessons are always interesting. Practical nature keeps pupils alert all the times. One of the practical topics is Health Education. Much about personal and environmental cleanliness covered gives the rule of cleanliness which is also called hygiene.

Eating of clean food is also hygiene. For one to be clean everyday, one requires some items like toothbrush, handkerchief, towel, nailcutter and many others. All these help in staying clean hence are referred to as personal items. They should not be shared as they spread diseases some of which cannot be cured.

10. A teeth doctor is called a _____
11. Toothbrush, towel, nailcutter are all _____.
12. Personal items should not be shared because
- A. they spread diseases which have no cure
 - B. it is a healthy habit
 - C. they are costly
 - D. some of the diseases they spread have no cure

Read the letter below carefully and then answer questions 13 to 15.



When our scout patron, Mr. Omondi announced a four-day scouts camp at the famous Hippo Campsite in Naivasha, my heart skipped a beat. I knew very well that I would not miss such a trip because I as an active member of the scout and headed the Simba Troupe. I jumped up and down in excitement. I was sure of spending my Easter holiday away from home. My parents received the news about the trip in a happy mood. They had earlier promised to pay me a treat if I did well in school. Now that I had passed well in my exam, it was no doubt that I would attend the camp.

13. Where was the scouts camp located? _____
14. The scout's patron was called _____
15. The camp must have happened in the month of _____

Complete the passage below using the correct option from the choices provided.

Long time ago 16 lived 17 old man 18 Onyanje. He 19 very hardworking. He always woke up 20 before everyone else in the homestead.

- | | | | |
|--------------|-----------|----------|----------|
| 16. A. they | B. their | C. there | D. thier |
| 17. A. a | B. an | C. the | D. this |
| 18. A. known | B. called | C. name | D. calls |
| 19. A. was | B. were | C. is | D. had |
| 20. A. fast | B. fasten | C. vast | D. first |

Complete the following sentence correctly.

21. On day one at school this year, our class was as quiet as _____

- | | | | |
|-------------|---------|----------|---------|
| A. the rain | B. snow | C. grave | D. mice |
|-------------|---------|----------|---------|

For questions 22 to 24, choose the odd one out.

- | | | | |
|---------------|----------|----------|------------|
| 22. A. Dog | B. Cat | C. Goat | D. Lion |
| 23. A. Red | B. House | C. Green | D. Yellow |
| 24. A. Better | B. Worse | C. Clean | D. Smaller |

For questions 25 to 27, choose one word for many.

25. Apples, mangoes, grapes, pears.

- | | | | |
|---------------|-----------|--------------|---------|
| A. Vegetables | B. Fruits | C. Groceries | D. Food |
|---------------|-----------|--------------|---------|

26. Books, rulers, pens, erasers, manila paper.

27. Hen, duck, goose, turkey.

For questions 28 to 30, write the plurals of the given words.

28. Roof - _____

29. Lady - _____

30. Donkey - _____

Lined writing area with 25 horizontal lines.



KISWAHILI: LUGHA

GREDI YA NNE - 2026

001

MUDA: SAA 1

Soma mazungumzo yafuatayo kisha ujibu swali la 1 hadi la 5.



(Ni sokoni, Teya anapita sokoni akitoka kazini)

Teya: Umeshindaje? Naona unazo mboga zinazovutia kwelikweli. Bei gani fungu hili?

Mwuzaji: Vyema sana mwenzangu. Hizi nimezivuna kutoka shambani mwangu leo. Pia kuna nyanya, pilipili, vitunguu na karoti. Leo, siku zote bei hutegemea mapatano.

Teya: Hahaha! Leo wateja wote watapitia hapa kibandani pako. Haya naomba uniuzie mafungu mawili ya sukumawiki na....

Mwuzaji: Samahani dada. Natumai unajua bei ya mwaka huu mpya. Fungu moja la sukumawiki sasa ni shilingi ishirini.

Teya: Gharama ya maisha nayo! Niuzie mafungu mawili ya sukumawiki, fungu moja la nyanya na vitunguu fungu moja.

Mwuzaji: Karoti leo?

Teya: Bado zipo. Nilinunua nyingi. Vyote ni shilingi ngapi?

Mwuzaji: Naam, vyote ni shilingi themanini.

Teya: Shika noti ya mia moja unipe salio.

1. Teya alinunua bidhaa aina ngapi?

- A. Tatu B. Nne
C. Mbili D. Moja

2. Ni kweli kusema kuwa

- A. Mwuzaji alikuwa na shamba
B. Teya aliuza bidhaa sokoni
C. Teya na Mwuzaji walikuwa maadui
D. Mwuzaji alikuwa shambani

SBA001

3. Ni bidhaa gani ilinunuliwa na Teya na huwa tunda?

- A. Karoti
B. Sukuma
C. Kitunguu
D. Nyanya

1

KISWA GREDI YA NNE

4. Teya alitumia pesa ngapi kununua bidhaa?
 A.40
 B.50
 C.80
 D.100

5. Mwuzaji alifaa kumpa Teya pesa ngapi?
 A.Shilingi themanini
 B.Shilingi ishirini
 C.Shilingi mia moja
 D.Shilingi hamsini

Soma kifungu hiki kisha ujibu swali la 6 hadi la 9.



Mzee Busara alikuwa **amekula chumvi nyingi**. Yaani alikuwa amezeeka sana. Moja ya sifa zake kuu kijijini ilikuwa ni kusimulia hadithi. Matamshi yake yalikuwa bora, nayo sauti yake ilikuwa kama ya ninga. Wakati wa jioni wajukuu wake walimzingira ili kupata uhondo wa hadithi zake zisizo na mwisho. Mara nyingi hadithi zake zilihusu jinsi ambavyo watu wa kitambo waliishi. Wajukuu wake walizidi kufurahia kila siku kwa sababu hadithi za babu yao ziliwachangamsha na kuwarekebisha kitabia.

6. Ni nini maana ya nahau **amekula chumvi nyingi**? _____
7. Mzee Busara alikuwa na sifa gani kuu?

8. Ni nani walihadithiwa kulingana na kifungu hiki?
 A.Wajukuu B.Wazee C.Vijana D.Wanakijiji
9. Wajukuu walifurahia nini?

Wanafunzi wa gredi ya nne waliambiwa wataje wanyama. Tazama jedwali hili kisha ujibu swali la 10 hadi la 12.

MWANAFUNZI	WANYAMA
Pato	Ngamia, punda
Maria	Kuku, bata
Osewe	Swara, simba
Musa	Mwewe, mbuzi
Kulei	Chura, samaki

10. Ni mwanafunzi yupi alitaja ndege pekee?

- A.Pato B.Maria
C.Musa D.Osewe

11. Chagua mnyama ambaye huishi majini.

- A.Kuku B.Punda
C.Mbuzi D. Samaki

12. Ni mnyama gani ambaye hafugwi nyumbani?

- A.Punda
B.Swara
C.Ngamia
D.Mbuzi

Soma kifungu kifuatacho kisha ujibu swali la 13 hadi la 15.



Chifu wa kijiji cha Huruma, Bwana Jaliwatu, ametoa mwito kwa wauzaji wa vyakula wazingatie usafi. Alisema kuwa, hiyo ndiyo njia pekee ya kuzuia kuenea kwa ugonjwa hatari wa kipindupindu.

Bwana Jaliwatu aliyasema hayo kufuatia kuripotiwa visa vya ugonjwa huo katika kata jirani ya Matopeni. Aliwashauri wakazi watafute huduma za matibabu upesi, endapo watakuwa wa dalili za kuendesha, kutapika na kuumwa na tumbo.

Bwana Jaliwatu aliwahimiza wananchi wachimbe vyoo.

“Wale ambao watakosa kufanya hivyo watachukuliwa hatua kali za kisheria,” Chifu alisema.

13. Chifu wa kijiji cha Huruma alitwa nani?

14. Andika dalili moja ya ugonjwa wa kipindupindu

15. Ni jambo gani Bwana Jaliwatu aliwahimiza wananchi?

- A.Kuwa wagonjwa B.Kuchimba visima
C.Kuchimba vyoo D.Kuwa wachafu

Soma kifungu kifuatacho. Kina nafasi 16 hadi 20. Umepewa majibu manne hapo. Chagua jibu lifaalo zaidi kati ya yale uliyopewa.

Jana nilienda kumtembelea shangazi yangu. Anaishi katika ___ 16 ___ kidogo cha Starehe. Alinikaribisha kwa tabasamu na kunipa ___ 17 ___ ya maji baridi. Tuliketi sebuleni na kutazama ___ 18 ___. Baadaye alinipa ___ 19 ___ ya ndizi, zilikuwa tamu sana. Nilishukuru na kumuaga, nikarudi ___ 20 ___ jioni.

- | | | | |
|---------------|---------------|-----------|------------|
| 16. A.mtaa | B.nyumba | C.kijiji | D.shule |
| 17. A.bilauri | B.sahani | C.bakuli | D.kikombe |
| 18. A.ukuta | B.televisheni | C.redio | D.pazia |
| 19. A.mkungu | B.kifungu | C.chane | D.kikapu |
| 20. A.jikoni | B.uwanjani | C.shuleni | D.nyumbani |

Kutoka swali la 21 hadi la 30, chagua jibu sahihi kulingana na maagizo uliyopewa.

21. Je, jua huchomoza wakati gani?
 A.Asubuhi B.Jioni C.Adhuhuri D.Alasiri
22. Ni kifaa kipi ambacho mwanafunzi hutumia kuandikia?
 A.Meza B.Kalamu C.Kifutio D.Chaki
23. Kamilisha methali: **Mtoto umleavyo** _____
 A.ndivyo aliavyo B.huwa mkubwa C.ndivyo akuavyo D.hutazama kisogo
24. Mtu akikusalimia **hujambo** utajibu
 A.asante B.poa C.marhaba D.sijambo
25. Kanusha: **Ninaenda.**
 A.Siendi B.Hakuenda C.Sikuenda D.Sitaenda
26. Andika rangi moja ya bendera ya nchi ya Kenya.

27. Mtu anayeendesha ndege huitwa

28. Andika wingi wa sentensi hii: **Kichwa changu.**

29. Andika kinyume cha neno **toka.**

30. Panga herufi hizi ili kuunda neno sahihi la Kiswahili

aemz

Lined writing area with 25 horizontal lines.



SCHOOL BASED ASSESSMENT
**SOCIAL STUDIES & RELIGIOUS
EDUCATION**

GRADE 4 - 2026

001

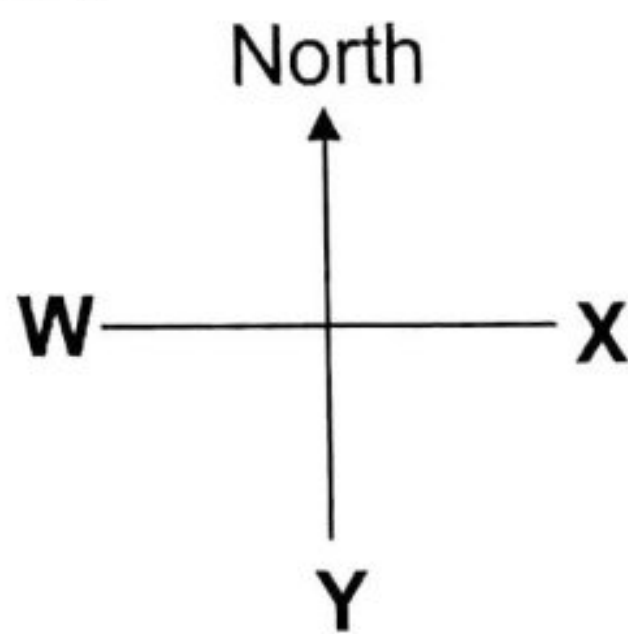
Time: 1hr 40mins

SECTION A: SOCIAL STUDIES

1. A place where a person is or something is, is called _____

Use the diagram below to answer questions

2 to 4



2. The diagram above represents a _____

3. The cardinal point marked **W** is called _____

4. Okongo faces the direction labelled **Y**. The direction is _____

5. The sun rises in the _____

6. Write one cardinal point of a compass.

7. Julia is always happy. She can express her feelings by _____

8. What does amber in traffic lights tell motorists to do? _____

9. Elvis is experiencing a sad cultural event. The event is likely to be _____

10. Amina was seen using the umbrella as shown on a certain day.



The weather condition was _____

SBA001

11. When I make my friend sad I should say

- A. thank you
- B. sorry
- C. welcome
- D. stupid

12. Ben saw a basic road sign that shows red, amber and green colours. This is likely to be

- A. bump ahead
- B. children crossing
- C. zebra crossing
- D. traffic lights

13. The weather today in Madiani area is unfavourable. There is heavy rainfall that has uprooted trees and destroyed property. The unfavourable weather condition is

- A. flooding
- B. famine
- C. drought
- D. storm

14. Jim observed some wild animals in a zoo. He observed all the following **except**

- A. warthog
- B. lion
- C. camel
- D. cheetah

15. Last year there was no rainfall for a long time in Mamba area. The sun was very hot and crops dried in the fields. What type of unfavourable weather condition did they experience?


- A. Flooding
- B. Harvesting
- C. Windy
- D. Drought

CALL FOR MORE EXAMS

16. People living in extreme cold weather condition should
- store enough water
 - shelter in doors
 - dress warmly
 - spend less time in the sun
17. Gogoo wants to cross a busy road. Which place is the safest to cross?
- Road junction
 - Zebra crossing
 - Bus stage
 - At a bump
18. How do you feel when you see a hungry street child?
- Happy
 - Sad
 - Fearful
 - Shocked
19. How do you feel when you are praised by your friend?
- Happy
 - Sad
 - Angry
 - Afraid
20. Nasra stopped on the road when she saw traffic lights turn red. What do you think Nasra should do if the traffic lights turn green?
- Stop
 - Sit
 - Shout
 - Go
21. A stranger has approached you on the road. How are you supposed to keep safe from the stranger?
- Follow him or her
 - Tell him your name
 - Run away
 - Enjoy his stories
22. Oloo's community has a place where you can report a case if you are wronged. This is a safe place. Which is other safe place in the community?
- Cave
 - Busy road
 - Disco hall
 - Chief's camp

23. A person walking on foot is called
- pedestrian
 - vehicle
 - passenger
 - motorist
24. Tim attended a cultural event in his community. The people were singing praise songs to a new born baby. The event Tim attended was
- initiation
 - naming ceremony
 - funeral ceremony
 - wedding ceremony
25. A grade four learner observed the sun setting. What is the direction of the setting sun?
- East
 - West
 - North
 - South

Look at the picture below and use it to answer questions 26 to 28.



26. The picture above shows the use of a
- tree
 - arrow
 - compass
 - road
27. What direction is the cat?
- South
 - East
 - West
 - North
28. Which animal is in the West?
- Cat
 - Hen
 - Goat
 - Rabbit
29. An instrument that helps us tell the direction of one place from another is called
- pen
 - compass
 - ruler
 - set
30. When you stand facing North, what direction is the right arm?
- North
 - South
 - East
 - West

SECTION B: RELIGIOUS EDUCATION
PART A: CRE

31. In Genesis 1:27, we learn that God created human beings in His own
A. image and likeness
B. height and likeness
C. image and colour
D. colour and height
32. Who were the first parents of human beings?
A. Adam and Sarah
B. Abraham and Sarah
C. Adam and Eve
D. Isaac and Eve
33. From the following lists, which one contains members on an extended family only?
A. Father, grandmother, brother
B. Aunt, cousin, grandfather
C. Cousin, brother, sister
D. Brother, sister, mother
34. From the following books of the New Testament Bible, which one is not a gospel book?
A. Matthew
B. Mark
C. Acts
D. Luke
35. Who among the following people did God appear to in a burning bush?
A. Paul
B. Joseph
C. Daniel
D. Moses
36. In Ephesians 6:1-3, we learn that for us to live long we should _____ our parents.
A. obey
B. disobey
C. disrespect
D. hate
37. The following are lessons we learn from the story of Amnon and Tamar **except**
A. rape is evil
B. we should be careful when left alone with people of the opposite sex
C. we should control our emotions
D. we should not worry when left alone with relatives of opposite sex
38. Apostle Paul taught that our bodies are the temple of the Holy Spirit, therefore we should
A. abuse drugs with it
B. engage in sex with it
C. live a holy life
D. do evil with it
39. Grade four learners were discussing the books that make up the Old Testament in the Bible. Which one of the following is not among them?
A. Genesis
B. Jude
C. Isaiah
D. Psalms
40. Who among the following kings wanted Balaam to curse the Israelites?
A. Solomon
B. Ahab
C. Balak
D. David
41. How many people did Jesus feed using two fish and five loaves of bread? _____
42. Who among the disciples of Jesus tried to walk on water as Jesus did? _____
43. Write **True** or **False**. We should trust strangers for our safety. _____
44. As learners, you should be honest. From the Bible the family of _____ and _____ showed dishonesty by hiding part of the money they sold their property from the apostles.
45. "Go and lie down but if you hear the voice again, say, "Speak Lord for your servant is listening." (1 Samuel 3:10) Who said these words?

46. How many people were saved during the flood in the time of Noah? _____
47. By healing Jairu's daughter, Jesus showed that He has power over _____
48. The day Jesus died is referred to as _____
49. John, a rich man in Shauri Moyo village always donates food and school fees for his fellow villagers. Which fruit of the Holy Spirit does he demonstrate? _____
50. A _____ is anyone who needs our help.

PART B: IRE

31. Which of the following surah talks about the uncle of the prophet who was an enemy of Islam?
A. An-Nas B. Al-Masad
C. An-Nasr D. Al-Kafirun
32. Imran picked a pen on the field and took it to his teacher. Which character did Imran learn from prophet Muhammad(S.A.W)?
A. Obedience B. Respect
C. Honesty D. Loyalty
33. Yaumul Baath means the Day of ____
A. Rising B. Reward
C. Resurrection D. Happiness
34. Ali was seen putting his forehead on the prayer mat during swalah. Ali was in ____ position.
A. Qiyaam B. Rukuu
C. Jalsa D. Sujud
35. We should enter the mosque using our ____ foot.
A. right B. left
C. both D. any
36. "Laa ba-asa, twahurun in shaa Allah." This dua is recited for the ____ people.
A. sick B. dead
C. mad D. poor
37. Allah (S.W.T) loves those who are ____ to animals.
A. cruel B. unkind
C. kind D. bad
38. As a Muslim, I believe in ____ pillars of Iman.
A. 5 B. 6
C. 7 D. 8

39. I should say Alhamdulillah _____ sneezing.
A. during B. before
C. when D. after
40. During Jum'ah prayer, Imam stands on _____ when giving Khutbah or sermon.
A. Mihrab B. Mimbar
C. Muswala D. Minaret
41. Muslims fast in the month of _____
42. Complete the Hadith.
Prophet Muhammad(S.A.W) said, "Speak the truth even if it is _____."
43. We should care of our environment by _____
44. During Eid-ul _____ Muslims sacrifice an animal for the sake of Allah(S.W.T).
45. Surah Al-Kafirun has _____ verses.
46. Swalah starts with Takibiratul-Ihram and ends with _____
47. During swalah, Nasra was seen putting her forehead on the ground. This positive of swalah is called _____
48. The Fardh prayer performed in the morning is called _____
- Write any two things we do to our parents to show love.**
49. _____
50. _____



SCHOOL BASED ASSESSMENT
INTEGRATED SCIENCE
GRADE 4 - 2026

001

Time: 1hr 40mins

SECTION A: SCIENCE & TECHNOLOGY

- One of the characteristics of plants is that plants
A. play
B. die
C. jump
D. sleep
- Lombo observed the characteristic of plants as shown below.




It shows that plants

- grow
 - feed
 - breathe
 - reproduce
- You can use all the following when handling plants during Science and Technology nature walk. Which one is **not**?
A. Hand gloves
B. Goggles
C. Apron
D. Spade
 - Fruits and flowers in a plant shows that plants
A. breathe
B. reproduce
C. die
D. remove wastes

The diagram below shows a weather condition in one afternoon. Use it to answer questions 5 and 6.



- The weather was
A. cloudy
B. windy
C. rainy
D. sunny
- What can one do during such weather?
A. Drink a lot of water
B. Wear light clothes
C. Sit under the trees
D. Carry umbrellas
- Edible plants include the following. Which one is **not**?
A. Cabbage
B. Rice
C. Sodom apples
D. Pineapples
- During a _____ there are loud sounds, bright flashes of lightning and heavy rain.
A. thunderstorm
B. storm
C. hot
D. wind
- Pado drew a source of heat as shown



The source of heat is called

- sun
- moon
- star
- cloud

10. Grade four learners can make water safe for drinking by
- drinking
 - adding salt
 - boiling
 - filtering

11. Dirty water contains
- heat
 - germs
 - salt
 - sugar

12. Plastic bottle waste can be used to make the following. Which one is wrong?
- Flower pots
 - Pencil holders
 - Bird feeder
 - Beaded necklace

13. Munka uses the source of light below at night. Which one is it?

A.



B.



C.



D.



14. We save _____ when we conserve light in the environment.

- water
- heat
- animals
- money

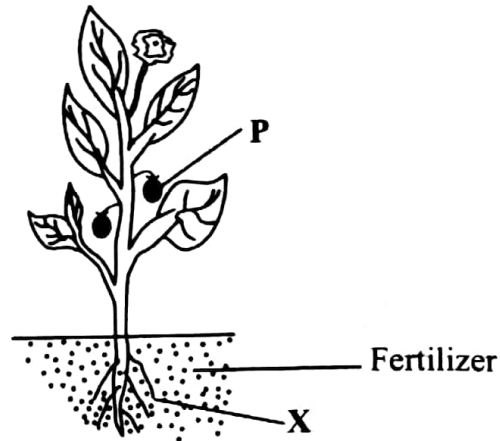
15. Switch _____ the lights when you leave the room.

- in
- off
- on
- from

16. Write down one characteristic of plants.
- _____

SBA001

A grade four boy took a photo of characteristic of plants as shown. Use it to answer questions 17 and 19.



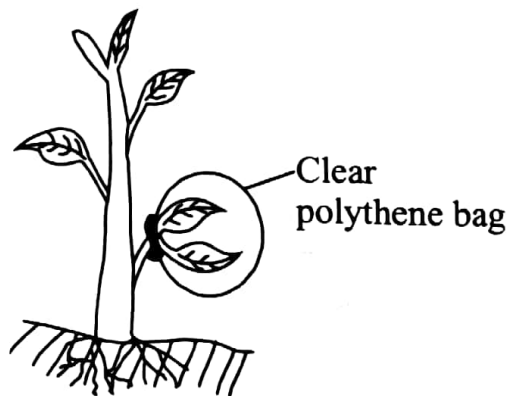
17. At the part marked X, it shows that the plant _____

18. What shows in the picture that plants reproduce? _____

19. The part marked P is called a _____

20. Presence of dry plants shows that plants _____

Grade four learners carried out an investigation in characteristics of plants as shown. Use it to answer questions 21 and 22.



21. After sometime, what will they observe in the polythene bag? _____

22. The learners were trying to find out that plants _____

23. We can observe a certain source of heat in the sky during day time. The source is the _____

Mukau collected the following waste materials. Use it to answer questions 24 and 25.



24. The waste materials are _____
25. How can we make money from the waste materials above?
- _____

SECTION B: AGRICULTURE

26. Rambo used the following to make compost manure. Which one is **not**?



27. The main medium through which plants grow is
- A. air
- B. water
- C. soil
- D. food

28. A farmer was advised not to use dog and cat waste when making compost manure because they
- A. cannot decompose
- B. attract flies
- C. spread diseases
- D. are heavy
29. Compost manure can be ready in
- A. 3 to 4 days
- B. 3 to 4 months
- C. 3 to 4 weeks
- D. 3 to 4 years
30. I use a _____ and a toothpaste to brush my teeth.
- A. stone
- B. shoe brush
- C. charcoal
- D. tooth brush
31. When we grow crops in our school farm we get
- A. water
- B. food
- C. air
- D. soil
32. Playing near fire can cause
- A. burns
- B. falls
- C. cuts
- D. bumps
33. Mary made long ribbons using _____ soil.
- A. sand
- B. silt
- C. loam
- D. clay
34. A farm can get good harvest when he plants his crops in _____ soil.
- A. clay
- B. alluvial
- C. loam
- D. sand

35. Clay soil is

- A. hard
- B. smooth
- C. rough
- D. bumpy

36. Ken modelled a pot using _____ soil.

- A. loam
- B. clay
- C. sandy
- D. silt

37. A small garden located near the kitchen that can be used to grow vegetables is known as

- A. school garden
- B. school farm
- C. kitchen garden
- D. plantation

38. Which of the pictures below is a mattress?

A.



B.



C.



D.



39. Which food item in the picture is a protective food?

A.



B.



C.




D.



40. When not eating enough food you are

- A. over eating
- B. bed wetting
- C. dehydrating
- D. undereating

41. Name the domestic animal in the picture below



42. We can care for domestic animals by

43. Identify one crop that can be grown in the kitchen garden. _____

44. Amanda can reuse the water she had to wash uniform to _____

45. Grade four learners are asked to eat foods like meat, eggs and milk. Which food group do the foods belong?

46. What happens if you do not clean your sleeping area?

47. Organic manure that has decomposed is called

48. Write down one material grade 4 learners can use to make compost manure.

49. Identify one use of compost manure in the farm.

50. Menjo collected animal droppings to prepare compost manure. Write down the name of the animal droppings she used. _____

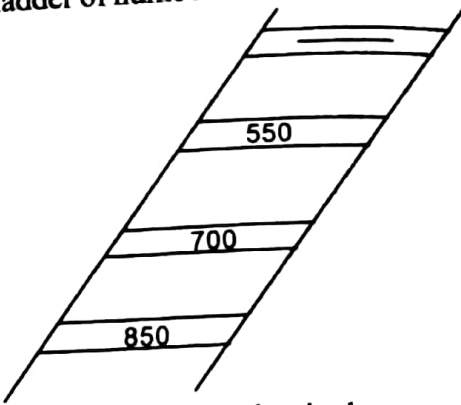


SCHOOL BASED ASSESSMENT
MATHEMATICS
GRADE 4 - 2026

001

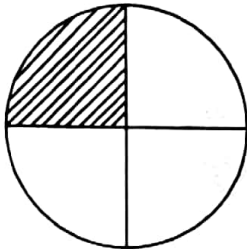
TIME: 1 hour 20 minutes

1. Rahab wrote the place value of digit 6 in the number 7601. The place value is
 - A. ones
 - B. tens
 - C. hundreds
 - D. thousands
2. A school has 974 learners. What is the total value of digit 7 in the number?
 - A. 70
 - B. 7
 - C. 700
 - D. 7000
3. Read and write the number below.
5 thousands 2 hundreds 9 tens 4 ones.
 - A. 4925
 - B. 5294
 - C. 2594
 - D. 9452
4. What is 222 in words?
 - A. Two two two
 - B. Two twenty two
 - C. Two hundred and twenty
 - D. Two hundred and twenty two
5. Mugo was reading numbers from 10 upto 200. Which number comes just before 200?
 - A. 199
 - B. 210
 - C. 100
 - D. 300
6. If number one car in safari rally is in the first position, what is the position of a car number six?
 - A. Six
 - B. Sixteen
 - C. Sixth
 - D. Sixty
7. Paul was in the ninth position in class. Paul was number
 - A. 99
 - B. 90
 - C. 19
 - D. 9
8. Peter had 246 bottles of soda in his shop. He bought 70 more bottles of soda. How many bottles of soda does he have altogether?
 - A. 176
 - B. 216
 - C. 316
 - D. 276

9. Muso had 200 packets of pencil. He bought 66 more packets of pencils. How many packets of pencils does he have altogether?
- A. 134
B. 266
C. 366
D. 166
10. Which one of the following is the biggest?
- A. $\frac{1}{4}$ of 24
B. $\frac{1}{2}$ of 24
C. $\frac{1}{8}$ of 24
D. $\frac{1}{4}$ of 12
11. A town has 196 adults. There are 84 men. How many women are there?
- A. 102
B. 92
C. 112
D. 122
12. A forester had 638 seedlings. He gave out 475 seedlings. How many seedlings was he left with?
- A. 1113
B. 363
C. 263
D. 163
13. A ladder of numbers is drawn below
- 
- Find the missing number in the pattern.
- A. 500
B. 400
C. 600
D. 450
14. Work out the value of:
- 9×5
- A. 55
B. 25
C. 14
D. 45
15. A cow produces 8 litres of milk in a day. How many litres will it produce in 5 days?
- A. 40
B. 13
C. 30
D. 48
16. What is the value of $7 \overline{)49}$?
- A. 6
B. 8
C. 7
D. 5

17. Perez shared 24 biscuits equally among 6 children. How many biscuits did each child get?
- A. 3
B. 2
C. 6
D. 4

18. Naru shaded part of a circle as shown.



What is the fraction of the shaded part?

- A. $\frac{1}{2}$ B. $\frac{1}{4}$
C. $\frac{1}{8}$ D. $\frac{1}{3}$

19. Work out the following.

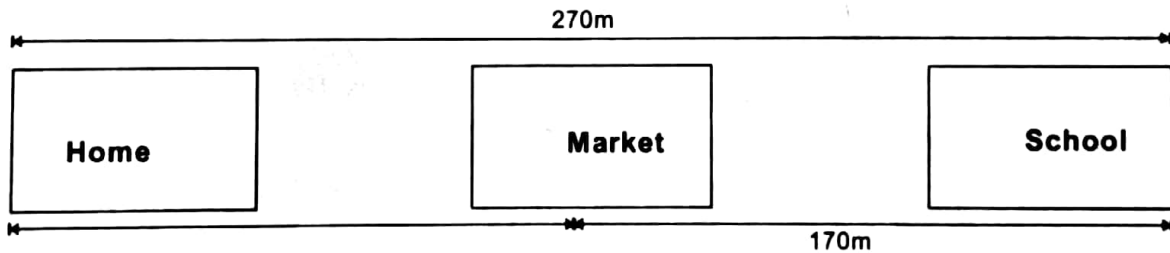
$\frac{1}{4}$ of 16.

- A. 4
B. 2
C. 20
D. 12

20. Hellen has five 100 notes. How many sh 50 notes will she get?

- A. Two
B. Four
C. Five
D. Ten

The diagram below shows distance between Home, School and the Market. Use it to answer questions 21 to 23.




21. Asha walks from home to the school. How many metres does she walk?

22. Asha walks from school to the market. How many metres does she walk altogether?

23. How many metres does Asha walk from the market to her home? _____

24. Punga woke up at the time shown on the clock face below.



At what time did he wake up? _____

25. Mary had sh 345. Her mother gave her sh 225 more. How much money did she have altogether?

26. Cyprine has 773 litres of water at a party. 429 litres of water was used. How many litres of water was left? _____

27. A bus used 4 hours 51 minutes to move to Nairobi. A lorry used 5 hours 4 minutes to move to Nairobi. How many hours and minutes did the bus and the lorry use altogether?

28. John received sh 300 from his uncle. He spent sh 50 on a book. How much did he save?

29. Fatuma was asked to write down one need she knows. Help her write one need.

30. Complete the pattern.





CREATIVE ARTS

GRADE 4 - 2026

001

Time: 1hr 40mins

1. Percussion instruments produce sound by

- A. blowing
- B. plucking
- C. bowing
- D. shaking

2. Arama is playing the percussion instrument in the picture below.



What is its name?

- A. Kayamba
- B. Shaker
- C. Marimba
- D. Drum

3. A percussion instrument played by the Teso community in Kenya is

- A. Adongo
- B. Kigamba
- C. Bul
- D. Isukuti

4. Nyoremo played a percussion instrument by hitting. Which instrument did she play?


- A. Kayamba
- B. Isukuti drum
- C. Adongo
- D. Shaker

5. Colours used in drawing and painting can be mixed using

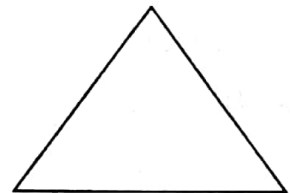
- A. shoe brush
- B. buckets
- C. paint brush
- D. basins

6. Mumbe used regular shapes to come up with a picture. Which one is not one of the regular shapes she used?

A.



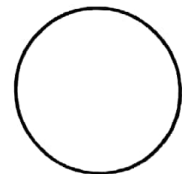
B.



C.



D.



7. Sounds that last longer are called

- A. short sounds
- B. long sounds
- C. brief sounds
- D. quick sounds

8. Grade four learners were skipping ropes in different directions. Which one is wrong?

- A. Skipping forward
- B. Skipping to the right
- C. Skipping backward
- D. Skipping upwards

9. A type of artwork where different materials like paper, pictures etc are glued into a surface or cardboard to make a new picture is called
- photomontage
 - collage
 - mosaic
 - painting
10. Agolla heard an animal in her home that produces low pitch sound. The animal was likely to be
- frog
 - bats
 - birds
 - mice
11. How fast or slow a piece of music is, is called
- pitch
 - melody
 - volume
 - tempo

12. Identify the instrument below

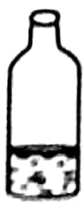


- | | |
|---------|------------|
| A. Drum | B. Kayamba |
| C. Jug | D. Shaker |

13. Openja created melodic patterns using four bottles as shown.



W



X



Y




Z

SBA001

When hit, which bottle will produce low sound?

- X
 - Y
 - Z
 - W
14. Grade four learners made mats using plain weave. They used the materials below **except**
- plastic strips
 - metallic rods
 - paper strips
 - fabric strips
15. When singing round songs, ensure you
- sit down always
 - sing other parts
 - sing at the right time
 - sing the tunes incorrectly
16. Galloping can be performed in the following directions. Which one is **not**?
- Downwards
 - Forward
 - To the right
 - To the left
17. Making new toys, one can use the following materials. Which one is it?
- Clay soil
 - Papier mache
 - Wood
 - Old boxes


18. Maina performed the balance shown in the picture.



The balance is called

- A. V-balance
- B. T-balance
- C. leg balance
- D. hand stand

19. Njue performed a gymnastic roll shown below.




The roll is

- A. T-balance
- B. forward roll
- C. head stand
- D. hand walk

20. Choose one material you can use to make a mouth bow.

- A. Bucket
- B. Jerrycan
- C. Paper
- D. String

The diagram below shows a certain string instrument. Use it to answer questions 21 and 22.



21. The instrument above is called _____

22. The instrument above is played by _____

23. Jakagor collected soil for modelling. The best soil for modelling he should use is _____

24. Write down the words in the first line stanza one of the Kenya National Anthem in English.

25. Identify any special event when the Kenya National Anthem is sung.

26. How should you stand when singing the Kenya National Anthem?

27. The figure below shows a percussion instrument



Its played by _____

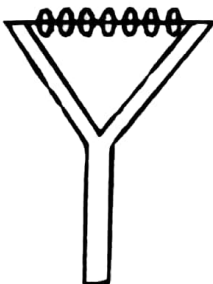
28. A grade four learner made the instrument shown below.



The percussion instrument shown above is played by _____

29. Which community in Kenya plays Isukuti drums? _____

30. Grade 4 learners drew a percussion instrument shown below.




It is called a _____



SCHOOL BASED ASSESSMENT
GRADE 4 - 2026
MARKING SCHEME

001

MATHS	ENGLISH	KISWAHILI
1. C	1. D	1. A
2. A	2. B	2. A
3. B	3. D	3. D
4. D	4. A	4. C
5. A	5. C	5. B
6. C	6. C	6. Kuzeeka au kuwa na miaka mingi
7. D	7. C	7. Kusimulia hadith
8. C	8. B	8. A
9. B	9. C	9. Hadithi
10. B	10. dentist	10. B
11. C	11. personal items	11. D
12. D	12. D	12. B
13. B	13. Hippo Campsite Naivasha	13. Jaliwatu
14. D	14. Mr Omondi	14. Kuendesha, kutapika, kuumwa na tumbo
15. A	15. April	15. C
16. C	16. C	16. C
17. D	17. B	17. A
18. B	18. B	18. B
19. A	19. A	19. C
20. D	20. D	20. D
21. 270 metres	21. C	21. A
22. 170 metres	22. D	22. B
23. 100 metres	23. B	23. C
24. 10 minutes past six	24. C	24. D
25. sh 570	25. B	25. A
26. 344 litres	26. Stationary	26. Nyekundu, nyeupe, nyeusi, kijani
27. 9 hours 55 minutes	27. Poultry	27. rubani
28. sh 250	28. Roofs	28. Vichwa vyetu.
29. House, food, shelter, clothes	29. Ladies	29. Ingia
30. 	30. Donkeys	30. Meza

INTEG-SCIENCE	CREATIVE ARTS	
<p>SCIENCE & TECHNOLOGY</p> <ol style="list-style-type: none"> 1. B 2. A 3. D 4. B 5. C 6. D 7. C 8. A 9. A 10. C 11. B 12. D 13. A 14. D 15. B 16. grow, feed, reproduce, die 17. feed 18. Flower and fruits 19. fruit 20. die 21. water droplets 22. remove waste 23. the sun 24. plastic bottles 25. By making chicken water points 	<ol style="list-style-type: none"> 1. D 2. A 3. A 4. B 5. C 6. C 7. B 8. D 9. B 10. A 11. D 12. A 13. C 14. B 15. C 16. A 17. D 18. A 19. B 20. D 21. ground bow 22. bowling 23. clay 24. Oh God of all creation 25. National day 26. At attention 27. hitting 28. shaking 29. Luhya 30. shaker 	<ol style="list-style-type: none"> 27. A 28. D 29. B 30. C <p>CRE</p> <ol style="list-style-type: none"> 31. A 32. C 33. B 34. C 35. D 36. A 37. D 38. C 39. B 40. C 41. 5000 42. Simon Peter 43. False 44. Hannaniah, Sapphira 45. Eli 46. 8 47. Death 48. Good Friday 49. Kindness 50. neighbour
<p>AGRICULTURE</p> <ol style="list-style-type: none"> 26. A 27. C 28. C 29. B 30. D 31. B 32. A 33. D 34. C 35. B 36. B 37. C 38. A 39. D 40. D 41. Goat 42. feeding them, watering them 43. Tomatoes 44. clean the house 45. Body building food 46. Germs will be more 47. compost 48. papers, kitchen wastes 49. Improves soil fertility 50. Goat droppings 	<p>S/ST & RELIGIOUS EDU.</p> <p>SST</p> <ol style="list-style-type: none"> 1. direction 2. compass 3. West 4. South 5. East 6. East, West, South, North 7. smiling 8. Get ready 9. burial 10. rainy 11. B 12. D 13. A 14. C 15. D 16. C 17. B 18. B 19. A 20. D 21. C 22. D 23. A 24. B 25. B 26. C 	<p>IRE</p> <ol style="list-style-type: none"> 31. B 32. C 33. C 34. D 35. A 36. A 37. C 38. B 39. D 40. B 41. Ramadhan 42. Bitter 43. -Picking litter, weeding, sweeping 44. Adh-ha 45. 6 46. Salaam / Tasleem 47. Sujuud/prostration 48. Fajr 49. Any correct answer 50. Any correct answer