

TARGETER WINGS

KENYA PRIMARY SCHOOL EDUCATION ASSESSMENT

GRADE 6 - YEAR 2026

SOCIAL STUDIES /RE



TIME: 1 hour 40 minutes

INSTRUCTIONS TO CANDIDATES (Please read these instructions carefully)

1. You have been given this question booklet and a separate answer sheet. The question booklet contains 50 questions.
2. Do any necessary rough work in this booklet.
3. When you have chosen your answer, mark it on the **ANSWER SHEET**, not in this question booklet.

HOW TO USE THE ANSWER SHEET

4. Use an ordinary pencil.
5. Confirm that the answer sheet that you have been provided with has the following:
YOUR ASSESSMENT NUMBER
YOUR NAME
NAME OF YOUR SCHOOL
NAME OF SUBJECT
6. Do not make any marks outside the boxes.
7. Keep the sheet as clean as possible and do not fold it.
8. For each of the questions 1 - 50, four choices are given. The choices are lettered **A, B, C** and **D**. In each case, only **ONE** of the four choices is correct. Choose the **correct** answer from the choices.
9. On the answer sheet, the correct answer is to be shown by drawing a **dark line** inside the box in which the letter you have chosen is written.

Example

In the Question Booklet:

17. Which one is a historical built environment?
- A. Hill
 - B. Cultural centre
 - C. Swamp
 - D. Beach

The correct answer is **B**.

On the Answer Sheet:

In the set of boxes numbered 17, draw a **dark line** inside the box with the letter **B** printed in it as indicated below.

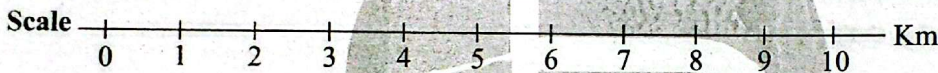
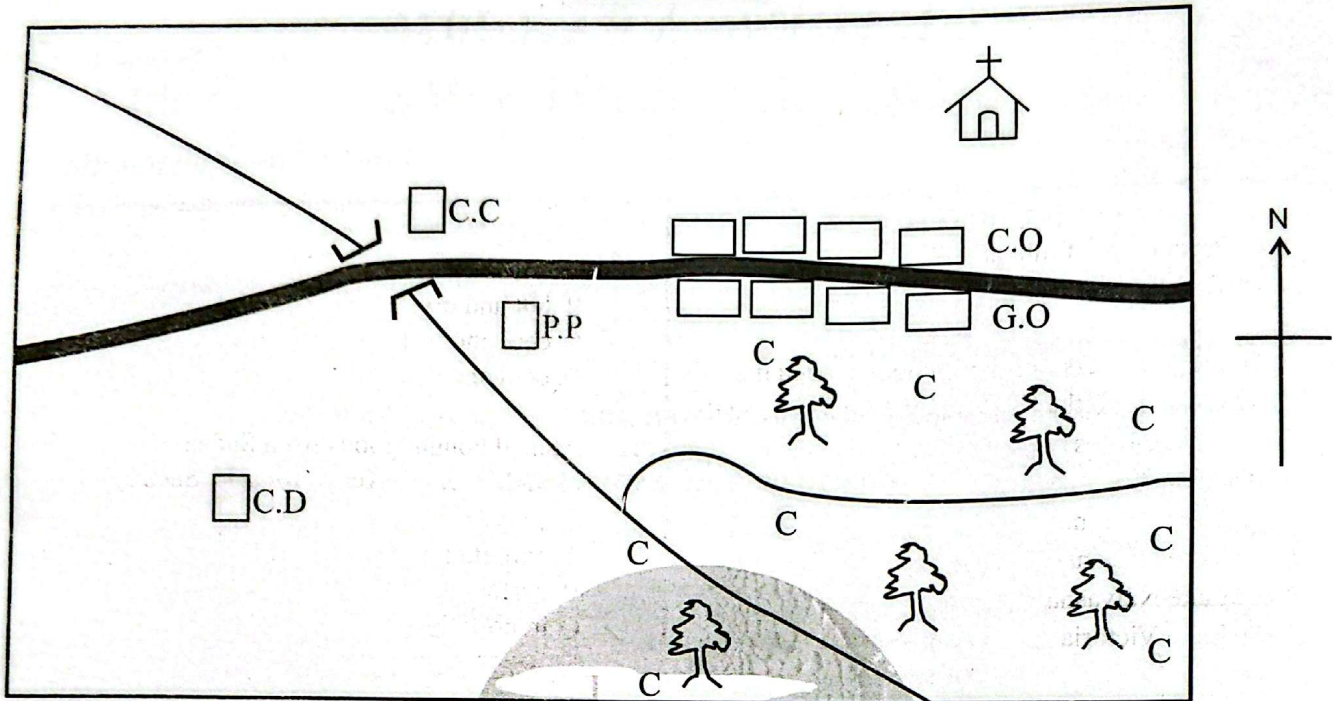
14. [A] [B] [C] [D] 15. [A] [B] [C] [D] 16. [A] [B] [C] [D] 17. [A] [B] [C] [D]

10. Your **dark line** **MUST** be within the box.
11. For each question, **ONLY ONE** box is to be marked in each set of four boxes.

This question paper consists of 8 printed pages

SOCIAL STUDIES

MAVUNO AREA



KEY

| | | | | | |
|--|------------------|-----|-------------------|-----|----------------|
| | Forest | CCC | Coffee | C.C | Chief's camp |
| | River and Bridge | G.O | Governor's Office | C.O | County Offices |
| | Tarmac Road | P.P | Police Post | | Church |
| | | C.D | Cattle dip | | |

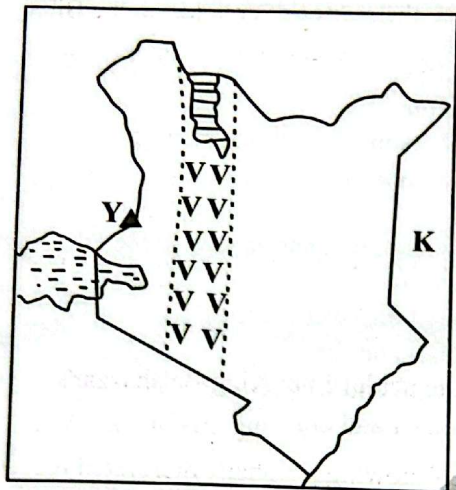
Study the map of Mavuno area and answer questions 1-5

- The climate of the South Eastern part of Mavuno area is likely to be
 - hot and dry
 - cool and wet
 - cool and dry
 - hot and wet
- Mr. Ombima wants to start a shop at the market in Mavuno area. He should acquire a trading license from the
 - Chief's camp

- Police post
 - County offices
 - Governor's office
- Mrs. Komo has been elected the governor of Mavuno area. The most urgent facility to establish in the area is-
 - hospital
 - a coffee processing company
 - an airport
 - a road

4. The river in Mavuno area flows from
 A. North West
 B. South West
 C. South East
 D. North East
5. Which economic activity is not practised in Mavuno area?
 A. Crop farming
 B. Livestock keeping
 C. Production of timber
 D. Trading
6. Grade 6 learners in Imani school studied the lakes found in the Rift Valley. Which among the following lakes are they likely not to have discussed?
 A. Lake Turkana
 B. Lake Nakuru
 C. Lake Naivasha
 D. Lake Victoria
7. Teacher Jumana asked his learners to model the physical features they saw during their class trip. One group made a model of a high flat land that has a table appearance. Such a physical feature is called
 A. a plain
 B. a plateau
 C. a rift valley
 D. a mountain
8. The president of Kenya wants to send a message to reach the citizens. Which means of communication will reach to the highest number of people?
 A. Telephone call
 B. Use of newspapers
 C. Use of television
 D. Use of a radio
9. Grade 6 learners were asked to name minerals and the places they are mined in Kenya. Who among the following pupils gave the correct answer?
 A. Khalisa- Soda ash- Kariandusi
 B. Godfrey-Limestone-Bamburi
 C. Joan-Flourspar-Lake Magadi
 D. John-Salt- Athi River
10. Teacher Nickson asked his learners to mention the countries that boarder Kenya. How many countries did they mention in total?
 A. Five
 B. Four
 C. Eleven
 D. Seven
11. The climate experienced in the lake Victoria basin is
 A. hot and wet
 B. hot and dry
 C. cool and wet
 D. cool and dry
12. Ahmed bought goods from Sudan. He brought them to Kenya for sale. Such an activity is called
 A. exportation
 B. custom duty
 C. importation
 D. barter trade
13. In the traditional African society, the youth were educated through various methods. Which among the following is **not** a form of education conducted in the past?
 A. Storytelling
 B. Apprenticeship
 C. Riddles and proverbs
 D. Learning through video clips
14. Mr. Malaba invited a resource person to speak to his class about industries. The main industrial town in Kenya that he gave was
 A. Thika
 B. Nairobi
 C. Mombasa
 D. Nakuru
15. Jane and her classmates visited the arm of the government of Kenya that makes laws to learn more about it. The arm of government they visited was
 A. Executive
 B. Judiciary
 C. Parliament
 D. Independent Electoral and Boundaries Commission.

Use the map of Kenya drawn below to answer questions 16, 17 and 18



16. The mountain marked Y in the map is called
 - A. Mt. Kenya
 - B. Mt. Kilimanjaro
 - C. Mt. Elgon
 - D. Mt. Longonot
17. The country marked K is called
 - A. Somalia
 - B. Tanzania
 - C. Uganda
 - D. Ethiopia
18. The region marked V V V in the map is known as
 - A. The Lake Victoria basin
 - B. The coastal region
 - C. The Rift Valley region
 - D. The central highlands region
19. The staple food for the countries of Eastern Africa is
 - A. maize
 - B. rice
 - C. bread
 - D. meat
20. The quickest means of transport across all the countries in Eastern Africa is
 - A. air transport
 - B. railway transport
 - C. road transport
 - D. water transport

21. Learners in Mzima school watched a video about size of countries in Eastern Africa. They noted that the smallest country is
 - A. Eritrea
 - B. Djibouti
 - C. Uganda
 - D. Rwanda

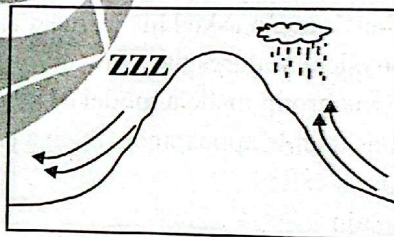
22. Joseph came across the names of the following communities.

| | | | |
|--------|---------|---|---------|
| Maasai | Turkana | M | Samburu |
|--------|---------|---|---------|

The community that best fits at M is

- A. Nandi
- B. Agikuyu
- C. Rendile
- D. Njemps

Use the diagram below to answer question 23 and 24



23. The diagram above shows the formation of
 - A. relief rainfall
 - B. convectional rainfall
 - C. annual rainfall
 - D. regular rainfall
24. The best economic activity to practice on the side marked ZZZ is
 - A. crop farming
 - B. dairy farming
 - C. lumbering
 - D. bee keeping
25. Grade 6 learners went for a class trip at the coastal region of Kenya and Tanzania. The main tourist attraction in this region is
 - A. wildlife
 - B. beautiful scenery
 - C. snowcapped mountains
 - D. sandy beaches

26. Georgina asked her Social Studies teacher about the main cause of road accidents in Kenya. The best answer the teacher would give is
- careless road use
 - drunk drivers
 - speeding of vehicles
 - poor state of roads
27. During a class trip, grade 6 learners asked a tour guide why it is important to keep traditional artefacts in museums. The best answer the tour guide would give is
- to preserve our culture.
 - to help study the life of our grandparents
 - to attract tourists
 - to create employment.
28. The following points describe a traditional leader
- She resisted colonialism of her people by the British*
 - She was deported to Kismayu*
 - She was a courageous woman*
- Who among the following traditional leaders is described above?
- Koitalel Arap Samoei
 - Nabongo Mumia
 - Mekatilili Wa Menza
 - Masaku
29. General elections in Kenya are conducted after every
- ten years
 - five years
 - seven years
 - eight years
30. Amina is a grade 6 pupil in Bondeni school. She was asked by her friend to tell her the person in charge of discipline in their school. The best answer Amina gave was
- the headteacher
 - the senior teacher
 - the school headboy
 - the deputy headteacher

SECTION B:

C.R.E

31. According to the stories of creation in the Bible, human beings are considered special among God's creation. This is because
- they were created male and female.
 - God gave them all types of food.
 - God put them in the Garden of Eden.
 - they were created in the image and likeness of God.
32. You read the Bible about King Belshazzar's party and the strange writing on the wall. Who among the following prophets interpreted the writing on the wall for the king?
- Isaiah
 - Daniel
 - Jeremiah
 - Elijah
33. A Christian value that learners acquire from the miracle in which Jesus healed the ten lepers is
- purity
 - unity
 - thankfulness
 - Faithfulness
34. Christians should bear the fruit of the Holy Spirit in order to live a Godly life. Which one of the following is one of the fruits of the Holy Spirit a Christian should bear?
- Healing
 - Courage
 - Faith
 - Faithfulness
35. Which one of the following events took place during the baptism of Jesus Christ?
- A voice was heard from heaven.
 - The disciples praised God .
 - There was an earthquake.
 - The appearance of Jesus was changed.

36. The lesson that Jesus wanted to pass to his listeners through the parable of the lost coin is that people should
- take care of their properties.
 - work hard in their lives.
 - bring sinners to God.
 - tell others what God has done for them.
37. The main lesson from the parable of the friend at midnight is that we should
- lock our doors at night.
 - provide help to our friends.
 - be persistent in prayer.
 - welcome visitors in our homes.
38. You read the Bible about the story of Ananias and Sapphira of the Early Church. What value do Christians learn from the story of Ananias and Sapphira?
- Mercy
 - Perseverance
 - Tolerance
 - Honesty
39. You watched a video clip on ways in which we can use our talents well. Which one of the following is **not** a proper way of using our talents?
- Serving God
 - Discriminating others
 - Serving others
 - Conserving the environment
40. Your CRE teacher asked you to tell the class what we call a person's natural ability to do something very well. What answer did you give?
- Responsibility
 - Talent
 - Morality
 - Integrity
41. After discussing the Bible in groups, your friend asked you to state the only historical book in the New Testament. Which answer did you give him?
- Acts
 - Matthew
 - Romans
 - Revelation
42. After watching a video clip about the miracles performed by prophet Elisha, your CRE teacher asked you to name one miracle performed by prophet Elisha. Which answer did you give?
- Healing Naaman's leprosy.
 - Raised the son of the widow of Zarephath.
 - Prophesied about the drought which lasted for three and a half years.
 - Healed the ten lepers.
43. You were asked by your friend to name the person who is referred to as the father of faith. Which answer did you give?
- Moses
 - Isaac
 - Abraham
 - Jacob
44. You read a story in the Bible about the twelve disciples of Jesus. Who was the **most** loved disciple of Jesus?
- Peter
 - John
 - James
 - Andrew
45. You read the Bible about the Beatitudes. Complete the following beatitude. Happy are the pure in heart;
- they will receive what God has promised.
 - the kingdom of heaven belongs to them.
 - God will satisfy them fully.
 - they will see God.

46. The main lesson learners can share with their parents after learning about the temptations of Jesus Christ in the wilderness is to
- depend on bread for their survival.
 - avoid praying to God in lonely places.
 - use the word of God in their daily lives.
 - give their possessions to others.
47. The main lesson we learn from the miracle of Jesus Christ feeding 5,000 people by multiplying 5 loaves of bread and 2 fish is that we should be
- joyful
 - merciful
 - gentle
 - generous
48. Grade 5 learners were told a story on how baby Moses was saved by Pharaoh's daughter. Which value did they learn from the story?
- Kindness
 - Holiness
 - Loyalty
 - Peace
49. Grade 6 learners used their leisure time as shown below:
- David- playing soccer
Solomon - watching movies
Jeremiah- visiting the children's home.
Isaiah - reading story books.
- Who used his leisure time in the best way?
- Jeremiah
 - Solomon
 - Isaiah
 - David
50. Social Media is one of the quickest ways of communication in the world today. Which of the following activities would be the best use of social media by Grade 6 learners?
- Watching all kinds of videos.
 - Exchanging messages about what they have learnt in their learning areas.
 - Chatting with friends all the time.
 - Taking and posting their pictures.

SECTION B

I.R.E

31. "So pray to your Lord and sacrifice to Him alone". This quotation is a verse from surah
- Al-Kauthar
 - Al-Maun
 - Al-Masad
 - An-Nasr
32. Mariam, a grade six learner has a habit of performing the fardh prayers late despite the fact that each prayer has its own time for performance. Which surah of the Qur'an discourages this behaviour?
- Al-Humaza
 - Al-Kauthar
 - Al-Maun
 - Al-Fatiha
33. How many verses are there in surah Al-Quraish?
- Five
 - Six
 - Seven
 - Four
34. While learning the teachings and lessons that are found in surah Al-Fiil, Khalfan came across animals that were used by Allah to destroy the army of Abraha Al-Ashram. Which animals were used?
- Camels
 - Elephants
 - Birds
 - Cows
35. Zakaria wants to perform swalatul Maghrib. Which of the following swalat must he perform in order for his swalah to be accepted by Allah (S.W.T)?
- Al-Kauthar
 - Al-Ikhlash
 - Al-Fatiha
 - An-Nas
36. The first revelation that came to prophet Muhammad (S.A.W) was emphasizing on the significance of
- patience
 - love
 - swalat
 - knowledge

37. According to the teachings of the prophet (S.A.W), the person who is closest to Allah (S.W.T) is the one who
- starts greeting the others
 - prays regularly
 - is kind to the old people
 - loves his parents
38. Musa, a grade six learner was planning to steal from his friend's desk but suddenly stopped upon remembering a certain attribute of Allah. Which of the following attributes is he likely to have remembered?
- Al-Aalim
 - Al-Basir
 - Al-Samiu
 - Ar-Rahman
39. Three of the following are among the characteristics of the angels of Allah (S.W.T). Which among the following is **not** one of those characteristics?
- They are neither male nor female
 - They eat and drink
 - They do not disobey Allah
 - They were created from light
40. Who among the following prophets of Allah (S.A.W) spoke when he was only two days old?
- Musa (A.S)
 - Ibrahim (A.S)
 - Muhammad (S.A.W)
 - Issa (A.S)
41. Which of the following acts will nullify one's wudhu?
- Laughing
 - Breathing
 - Breaking wind
 - Standing
42. After performing swalatul Dhuhr, Salim, a grade six learner performed a two rakaat prayer. What was the name of that prayer?
- Baadiyah
 - Witr
 - Qabliyah
 - Tahajud
43. Shamsa, a grade six learner wants to observe saum during the month of Ramadhan. Which among the following is one of the conditions that she must fulfill?
- Wearing new clothes
 - Making intention
 - Clearing all her debts
 - Feeding the poor
44. Which of the following prayers is composed of only two rakaat?
- Subh
 - Dhuhr
 - Maghrib
 - Asr
45. Three of the following situations requires Sabr. Which one does not?
- Sickness
 - Hunger
 - Loss of property
 - Planning for a wedding
46. Munira, a grade six learner has started engaging in gambling. Which of the following is **not** one of the effects of gambling?
- It is a waste of time
 - It is a waste of money
 - It will make one to be famous
 - It may lead to family break-up
47. Three of the following are among the rights of a neighbour. Which one is **not**?
- Right to be greeted
 - Right to be visited
 - Right to be respected
 - Right to be fed
48. Jamal, a grade six learner has joined a new school and wants to choose a new friend. Which among the following qualities should he avoid?
- Pride
 - Prayerful
 - Truthful
 - Honest
49. Who among the following accompanied the prophet (S.A.W) during Hijrah to Madina?
- Angel Jibril
 - Abubakr (R.A)
 - Uthman (R.A)
 - Ali (R.A)
50. Three of the following were the daughters of the prophet (S.A.W). Who was not?
- Zainab
 - Ruqaya
 - Ummu Kulthum
 - Mariam