

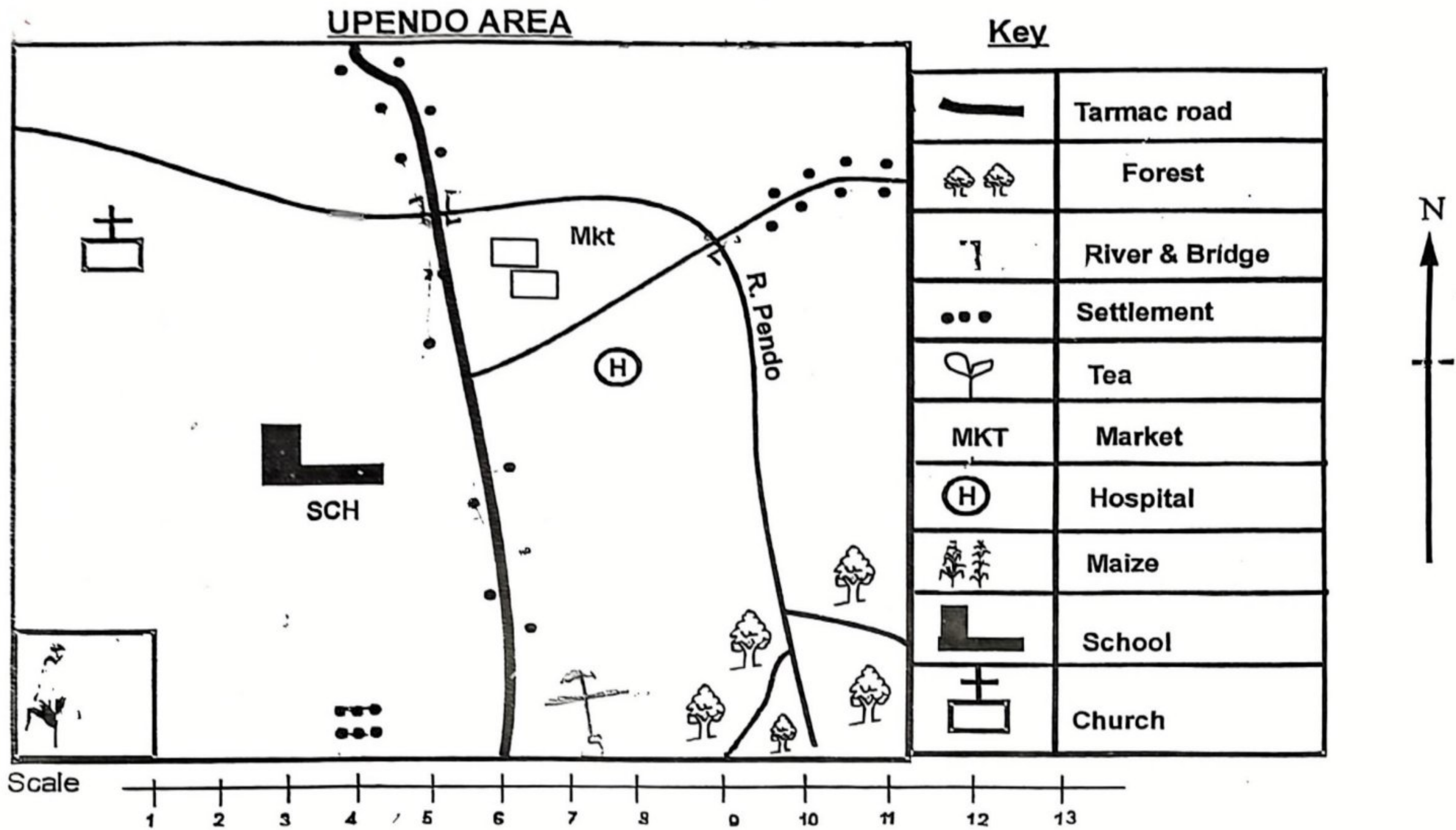
# COMPETENCY BASED CURRICULUM EXAM

PIONEER MARK  
SERIES

## GRADE SIX YEAR- 2025 SOCIAL STUDIES/ R.E

Name \_\_\_\_\_

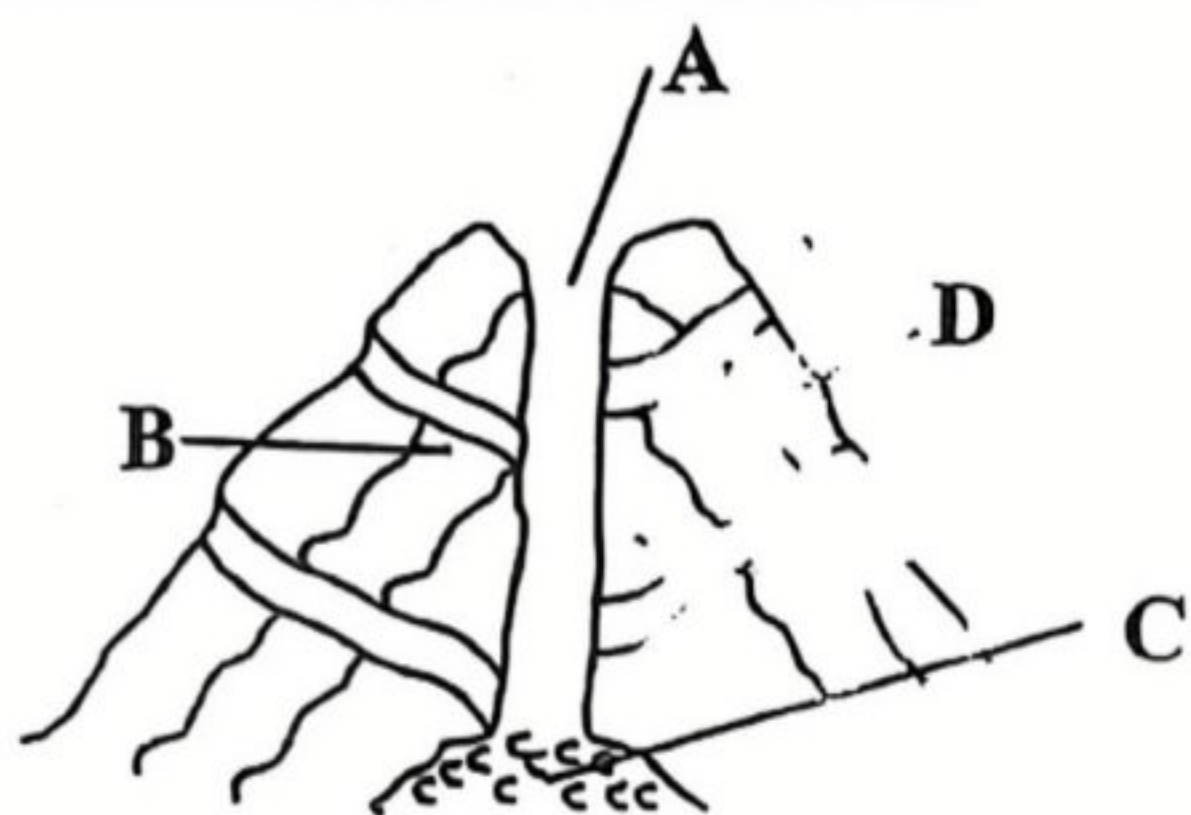
School \_\_\_\_\_



- Which is the main cash crop grown in Upendo are a  
 A. Tea                      B. Maize  
 C. Coffee                  D. Sisal
- River Pendo flows from  
 A. North west              B. East  
 C. South East              D. South
- Identify the settlement pattern shown from Upendo area  
 A. Dense                      B. Sparse  
 C. Clustered                D. Linear
- What is the direction of maize farm from the forest  
 A. North                      B. West  
 C. East                        D. South
- The people of Upendo area are likely to be  
 A. Traditionalist            B. Christians  
 C. Muslim                    D. Pagans
- Which of the following groups of communities of Kenya consists of central bantus only?  
 A. Agikuyu, Ameru, Akamba  
 B. Abaluhya, Abakuria, Abasuba  
 C. Ameru, Kuria, Pokomo  
 D. Mijikenda, Abagusi, Aembu

- Which one of the following groups shows drainage features only  
 A. Mountains, lakes, hills  
 B. Hills, valley, mountains  
 C. Oceans, lakes, river  
 D. Plains, plateaus, rivers
- Which country neighbours Kenya to the north west?  
 A. Somalia                      B. Kenya  
 C. Ethiopia                    D. Tanzania
- Which historical built environment is found in Mombasa?  
 A. Vasco Da-Gama pillar  
 B. Jomo Kenyatta monument  
 C. Fort Jesus  
 D. Black hawk
- Special house where horticultural crops are grown are known as?  
 A. Greenhouses              B. Huts  
 C. Homes                      D. Sheds
- Which is the smallest country in Eastern Africa?  
 A. Djibouti                      B. Sudan  
 C. Rwanda                      D. Burundi

12. The other name for the imaginary line (Prime meridian) that runs north to south is known as  
 A. Equator  
 B. Prime meridian  
 C. Greenwich meridian  
 D. Longitude
13. Eastern Africa lies between longitudes  
 A. 22°E and 51°E B. 23°E and 12°S  
 C. 12°S and 22°E D. 51°E and 23°E
14. Four grade 6 learners were told to identify three countries of eastern Africa that are closed by equator. Who among them gave the correct answers  
 A. Mary- Uganda, South Sudan, Tanzania  
 B. Lemaiyan- Kenya, Ethiopia, Rwanda  
 C. Kamau- Kenya, Uganda, Somalia  
 D. Wanjiru- Somalia, Kenya, Sudan
15. Study the diagram below and answer the question that follows

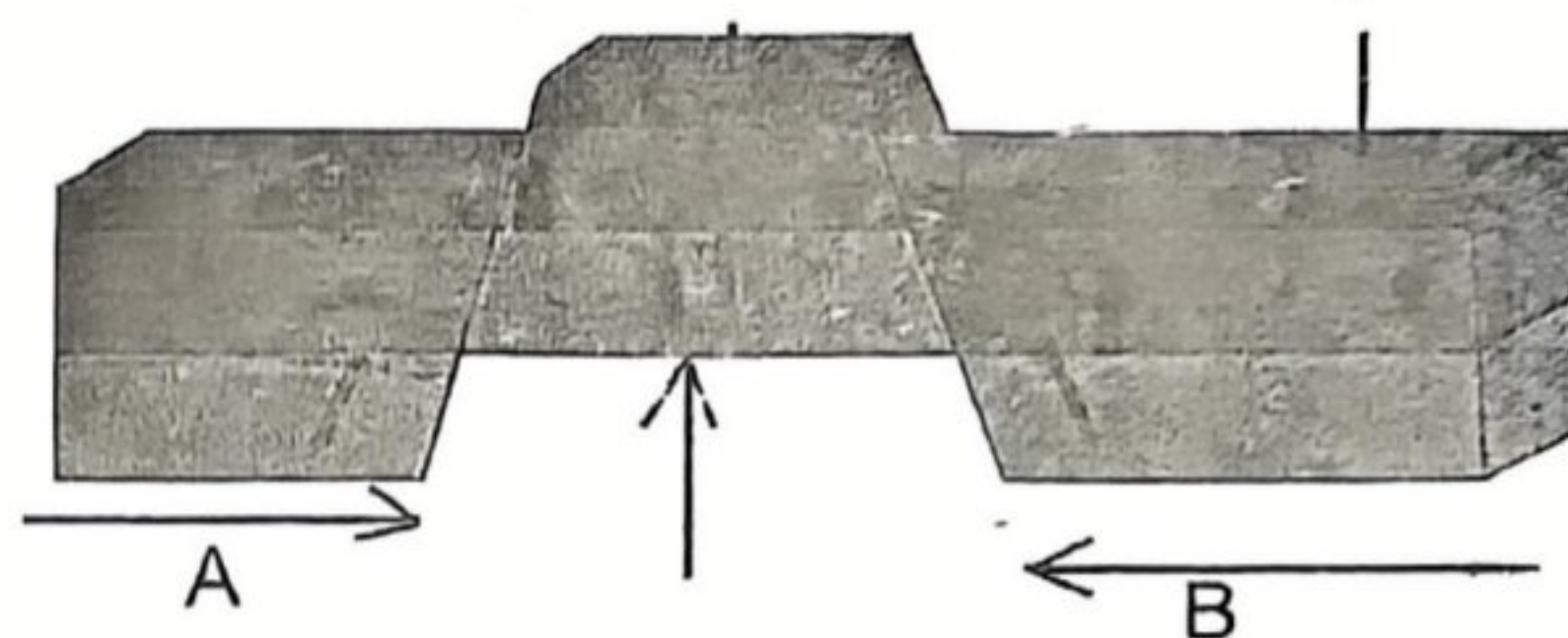


Learners were asked by their social studies teacher to identify the parts labelled A, B, C, and D of volcanic mountain who among them gave the correct answer

- A. Susan-vent- crater- subsidiary vent- magma  
 B. Lekord- magma- crater- vent- subsidiary vent  
 C. John- crater- vent- magma- subsidiary vent  
 D. Ayango- subsidiary vent- vent- magma- crater
16. Identify one crater lake found in Kenya?  
 A. Paradise B. Kyoga  
 C. Ngozi D. shalla
17. The following are characteristics of certain climatic region  
 i) cloudless sky throughout the year  
 ii) less than 250mm of rainfall per year  
 iii) hot and dry in most months of the year  
 A. Equatorial B. Mountain  
 C. Desert D. Sub-tropical
18. Which of the following crops is not grown large scale  
 A. Coffee B. Spinach  
 C. Tea D. Sugarcane
19. Which is the capital city of the country that border Kenya to the south?  
 A. Khartuom B. Djibouti  
 C. Addis-Ababa D. Dodoma
20. The following are reasons for the migration of the Bantus which is the main reason for migration

- A. Running away from outbreak of diseases  
 B. Drought and famine  
 C. Increased populations  
 D. they were looking for fertile land for farming

21. Which of the following is not a way of taking care of historical build environment?  
 A. Destroying them B. Cleaning them  
 C. Painting them D. fencing them
22. Which one of the following mountains consist of block mountains or the horst  
 A. Mt kenya, Mt kirisimbi, Mt longonot  
 B. Mt Ruwenzori, Mt pare, Mt usambara  
 C. Danakil alps, Mt elgon, Mt kenya  
 D. Mt longonot, Mt usambara, Mt meru
23. Which of the following is a historical built environment found in Rwanda?  
 A. Fort Jesus museum  
 B. Roman kiosk  
 C. Kigali genocide memorial  
 D. Black hawk
24. Use the diagram below to answer the question that follows



Identify the force marked A and B

- A. Tensional force  
 B. Upthrust force  
 C. Compressional forces  
 D. Gravity force
25. Grade 6 learner were asked to match the following leader and the areas they represent. Which pupil matched correctly  
 A. MCA- ward  
 B. governor-sub-county  
 C. M.P - location  
 D. Senator- country
26. Pure democracy is also called  
 A. Kenya democracy  
 B. Indirect democracy  
 C. Direct democracy  
 D. Funny democracy
27. Which of the following is not a method of acquiring Kenya citizenship  
 A. Registration B. Dual- citizenship  
 C. Birth D. Assimilation
28. \_\_\_ is not a modern means of communication  
 A. Messenger B. Newspaper  
 C. Postal service D. Radio
29. National days include the following except  
 A. Taifa day B. Jamhuri day  
 C. Mashujaa day D. Madaraka

30. Which factor promote peace?  
 A. Poverty  
 B. Equal sharing of resources  
 C. Unemployment  
 D. Corruption

**CHRISTIAN RELIGIOUS EDUCATION**

31. Which of the following is an appropriate activity to engage in during your leisure time?  
 A. Participating in betting games  
 B. Attending disco parties  
 C. Sitting by the road side  
 D. Doing physical exercise

32. What value do Christian learn from the story of Ananias and Sapphira of the early church?

- A. Tolerance                      B. Mercy  
 C. perseverance                D. Honesty

Which one of the following is not a value that a learner can use to nature his/her talents and abilities

- A. Humility                      B. Irresponsibility  
 C. Integrity                      D. Peace

34. Grade 6 learners were asked to name the type of marriage conducted in the office of the registrar of marriage, deputy county commissioner or assistant county commissioner. They gave the following responses.

- A. Christian marriage- Alice  
 B. African customary marriage- John  
 C. Civil marriage- Ann  
 D. Come we stay- Peter

Who gave the correct answer

- A. Alice                              B. John  
 C. Ann                                D. Peter

Grade 6 learners were discussing about the genesis story of creation. They concluded that on the fourth day God created

- A. Birds and sea creatures  
 B. Land and animals  
 C. Light and darkness  
 D. Sun, moon and stars

36. A CRE teacher asked pupils to group the books of the bible according to the old and New Testaments. Select the box that contains only the books of the Old Testament

- A. Mathew, Genesis, acts.  
 B. Hebrews, Luke, Titus  
 C. Exodus, Judges, Malachi  
 D. Esther, Mark, Revelation

37. Which commandment has a promise in it

- A. Worship no god but me  
 B. Do not commit adultery  
 C. Observe the sabbath day and keep it holy  
 D. respect your father and mother

38. Jesus promised that the pure in heart shall?

- A. See God  
 B. Be called sons of God

- C. Inherit the earth  
 D. be comforted

39. When Jesus was being baptized the holy spirit came down in form of?

- A. Fire  
 B. clouds  
 C. dove  
 D. Thunder storms

40. Christians celebrate the death and resurrection of Jesus during?

- A. Christmas                      B. Easter  
 C. Passover                        D. Advent

41. When Jesus fed the five thousand people, where did he get food from?

- A. His disciples                  B. A farm  
 C. A little boy                      D. A market

42. The first disciple to be called by Jesus were?

- A. James and John                B. James and Simon  
 C. Simon and Andrew            D. Andrew and Philip

43. Who helped Jesus to carry the cross to calvary

- A. John  
 B. Peter  
 C. Joseph of Arimathea  
 D. Simon of Cyrene

44. Who among the following Kings built the temple in Jerusalem for worship?

- A. Solomon                        B. Ahab  
 C. David                            D. Saul

45. Which one of the following qualities did Jesus mostly require from the people he healed?

- A. Respect                        B. Faith  
 C. Obedience                      D. Love

46. On your way to school a stranger offers you a lift. What is the best action for you to take?

- A. Accept the lift and get into the car  
 B. refuse and go back home  
 C. Refuse and continue walking to school  
 D. Hide in the bush

47. Eva picked a sh1000 note while sweeping the class. As a Christian, what should she do

- A. Use the money to buy lunch  
 B. Take the money and give it as an offering in church  
 C. Give it to the teacher on duty  
 D. Keep it and keep quiet

48. Which one of the following is not a quality of a good leader

- A. Orderly and sober  
 B. Mature in faith  
 C. Drunkard and violent  
 D. Trustworthy with self-control

49. The rite of passage which marks the end of childhood and the beginning of adulthood in African traditional society is?

- A. Marriage                        B. Birth

50. Who among the following prophets recovered the axe head.  
 C. Initiation                      D. Death  
 A. Samson                       B. Elisha  
 C. Jacob                      D. Moses

**ISLAMIC RELIGIOUS EDUCATION**

31. The following are verses from surah Al-maun.  
 i) *Fawaylulilmuswallin*  
 ii) *Fadhalikalladhiiyadu'ultaxim*  
 iii) *Walaa yahudhu 'alaatwa' amil miskin*  
 What is the correct order of the verse is

32. Which of the following Surahs discourages backbiting?  
 A. Maun                      B. Nas  
 C. Humaza                      D. Takathur
33. Which Surah wants us to be kind to orphan?  
 A. Humaza                      B. Ikhlas  
 C. Maun                      D. Kauthar
34. The migration of Muslims from Makkah to Madirah is commonly known as  
 A. Haji                      B. Arafat  
 C. Mirraaj                      D. Hijrah
35. Which one of the following Surahs got its name from an animal?  
 A. Fatiha                      B. Fitl  
 C. Ikhlas                      D. Taubah
36. Saadia, a grade 6 pupil likes having wealth and good things of the world. Which Surah will you encourage her to read?  
 A. Maun                      B. Ikhlas  
 C. Humaza                      D. Takathur
37. Medium najasat is also known as  
 A. Mughaladha                      B. Mutawasita  
 C. Khafif                      D. Hadithi
38. Which one of the following is a good example of a medium najasat  
 A. Urine of a baby boy who is still breastfeeding  
 B. Stool  
 C. Pig  
 D. Dog
39. Musa, a grade five learner wishes to earn more rewards from Allah by performing a Sunnah prayer that is only observed in the month of Ramadhan. the sunnah prayer you would advise him to observe is  
 A. Dhuhur                      B. Witr  
 C. Taraweh                      D. Eid
40. Complete the following Hadith of the prophet (PBUH). "Seeking knowledge is obligatory upon every  
 A. Woman                      B. Male  
 C. Muslim                      D. Children
41. What is the best way of appreciating the bounties of Allah (S.W.T) in your life as a Muslim?  
 A. Using them the way you want  
 B. Using them responsibly to please Allah (S.W.T)

- C. Using them to benefit your family members.  
 D. Being more active and productive when we have various bounties.
42. Which pillar of Iman helps Muslims to strive to perform good deeds and avoid bad deed because all their deeds are recorded. Belief in  
 A. The angels of Allah (S.W.T)  
 B. His books  
 C. Qadar  
 D. His messengers
43. \_\_\_\_\_ are the people who migrated from Makkah to Madina.  
 A. Ansar                      B. Muhajideen  
 C. Muhajirun                      D. Al-Amileen
44. Identify two things that Allah (S.W.T) is specifically interested in according to the Hadith on purity actions  
 A. Heart and deeds  
 B. Appearance and education  
 C. Wealth and children  
 D. Wealth and appearance
45. According to prophet Muhammad (PBUH). Which type of swadaqa is tree planting?  
 A. Halal                      B. Haram  
 C. Jariyah                      D. Muamalat
46. The following Muslim ladies were seen wearing the clothes described.  
 Zuena : *Along sleeved blouse with tight sweatpants*  
 Zainabu : *A loose dress with a hijab covering her face*  
 Aisha : *A t-shirt with a pair of shorts*  
 Amina : *A short-sleeved blouse with a pair of jeans trousers*  
 Who among them was in good dress code according to Islam?  
 A. Zuena                      B. Amina  
 C. Aisha                      D. Zainab
47. Which one among the following is not a pair of Iman? Belief in.  
 A. Angels                      B. Allah  
 C. Zakar                      D. Quran
48. Which of the statements below is not true on the responsible use of human resources? We should take advantage of  
 A. Our faith before old age  
 B. Our poverty before we become rich  
 C. Our free time before becoming busy  
 D. Life before death
49. Which angel of Allah takes care of the doors of hellfire?  
 A. Munkar                      B. Mikail  
 C. Malik                      D) Atid
50. Which of the following surahs means the terrible calamity?  
 A. Al-Qarah                      B. An-Nas  
 C. Al-Humaza                      D. Al-Takathur