

**SIGNAL CBC ASSESSMENT
 FOURTH TRIAL JUNIOR SCHOOL ASSESSMENT**

— CREATIVE ARTS AND SPORTS —

TIME: 1 hr 30 min

Learner's Name:

Grade:

School Name:

Assessment No:

Instructions for Learners:

1. Write down your name, name of your school and assessment number in the spaces provided.
2. This paper consists of 30 questions.
3. Ensure you check the question paper to ascertain that all the pages are printed and that no questions are missing.
4. Answer all the questions in the spaces provided.
5. Be sure to sign the **honour pledge** below at the end of this assessment.

Score Grid			
Question	Score	Question	Score
1- 20.		27.	
21.		28.	
22.		29.	
23.		30.	
24.			
25.			
26.			
Total score			
Assessed out of			50

Honour pledge: "I swear on my honour that I have not violated the honour code before or during this assessment".

Signature or Initial:

Date:

ASSESSMENT RUBRICS

Learning area	Performance	Exceeds Expectations (4)	Meets Expectations (3)	Approaching Expectations (2)	Below Expectations (1)
Creative Arts					

SECTION A: (20 Marks)

1. Kanini grouped colours into warm and cool colours.

Cool colours	Warm colours
Red	Yellow
Orange	Green
Blue	Purple

- Which one of the following pair of colours is wrongly placed?
- A. Green and Red B. Purple and Orange
 C. Blue and Yellow D. Orange and Yellow
2. During a group discussion, Grade 9 learners used a digital device to search for long-distance races. Which of the following races was **not** among their findings?
- A. 15 000 metres B. 1500 metres
 C. 5 000 metres D. 10 000 metres


3. Below is a section of a melody that was composed by a group of learners.



What is the value of the tied notes?

- A. Three beats B. One and half beats
 C. Two and half beats D. Half beat
4. Mr. John, a teacher of Creative Arts and Sports, described the major scale of F. Which one of the following is **not** true about the scale of F major?
- A. It has one flat in its key signature.
 B. It has no accidental.
 C. Its relative minor is A minor.
 D. The fourth degree of the scale is B \flat .

5. Creative Arts and Sports can lead to different careers. Which of the following is not a career related to Creative Arts and Sports?
- A. Graphic Designer B. Professional Athlete
C. Financial Analyst D. Choreographer
6. The picture below shows an activity that learners practiced to improve a component of physical fitness.



Which physical fitness did the learners improve by practicing the activity?

- A. Power B. Reaction time
C. Agility D. Flexibility
7. Which of the following is the correct Kodaly hand sign for sol-fa syllable mi?



8. A group of learners discussed the elements of a play and presented their work in class. Which of the following is not a feature they discussed about setting?
- A. Time B. Place
C. Social and Cultural Context D. Conflict
9. The chart below was prepared by a group of learners and displayed in class to analogous colours. Which pair of colours were wrongly matched?

A.	Yellow	Yellow-Green	Green
B.	Red	Red-Orange	Orange
C.	Blue	Blue-Green	Green
D.	Blue	Blue-Violet	Green

10. Kimani is an artist and wants to make his visual artwork appealing by employing the use of visual arts elements. Which one of the following is not an element that Kimani is likely to employ?

- A. Proportion B. Space
C. Line D. Value

11. Wanza, a grade 9 learner notated the piece of melody shown below



Which was the correct notation of the second bar?

- A. doh reh mi B. reh reh mi
C. fah mi re D. doh ti ti

12. Which one of the following is the correct definition of the term horizon as used when painting a landscape or a seascape?

- A. The line where the sky meets the land or sea when observed from a distance.
B. Farthest point a person can see in any direction.
C. Imaginary boundary where the Earth's surface ends.
D. Point where the sky physically touches the ground.

13. The picture below shows a painting technique that was used by Grade 9 learners during a painting lesson.



Which technique did they use?

- A. Splattering B. Wash
C. Dabbing D. Stippling

14. Which one of the following is not a western solo instrument?

- A. Descant recorder B. Violin
C. Guitar D. Marimba

15. Dodging is an important skill in the game of netball. Which one of the following is not a reason for dodging in the game of netball?

- A. Move randomly and waste time.
B. Get free from a defender and receive a pass.
C. Create space for teammates to move into.
D. Confuse the opponent and gain an advantage.

16. Which of the following is not a perfect fourth interval?

- A. C to F B. D to A
C. F to Bb D. A to D

17. Grade 7 learners practiced the skill shown in the picture below during a lesson on football.



Which skill were the learners practicing?

- A. Trapping B. Stopping
C. Shielding D. Dribbling


18. Which one of the following is **not** an element of good craftsmanship when creating artworks?
 A. Attention to detail.
 B. Use of low-quality materials.
 C. Precision and accuracy.
 D. Proper technique and skill.
19. A group of learners improvised relay batons to be used during interhouse athletics competitions. Which one of the following is **not** one of the materials they used?
 A. Glass
 B. Plastic

- C. Bamboo
 D. Aluminium
20. Which one of the following is true about doing warm-up activities before performing the main sports activity?
 A. They are unnecessary and do not affect performance.
 B. They help increase blood flow, flexibility and reduce the risk of injury.
 C. A proper warm-up should consist only of static stretching.
 D. They make athletes feel more tired before the main activity.

SECTION B. (30 Marks)


21. Grade 9 learners were discussing the use of melody in Creative Arts and Sports. State two uses they included in their list. (2 marks)
-
-

22. The picture below shows a long-distance race that Muendo observed while using a digital device.



- (a) Name the long-distance race shown in the picture above. (1 mark)
-
- (b) The Kenya long distance athletics team is training in preparation for Olympic games. State three techniques they need to train to enhance their performance. (3 marks)
-
-
-

23. The activity shown below is used to enhance a component of physical fitness.



- (a) Name the activity shown above. (1 mark)
- (b) Which component of physical fitness is enhanced by the activity shown above. (1 mark)
-
- (c) State two other activity that is used to enhance the component stated in (ii) above. (2 marks)
-
-

