

COMPETENCY BASED CURRICULUM EXAM

PIONEER MARK
SERIES

GRADE SIX YEAR- 2025

CREATIVE ARTS

Name: _____

AN

DATE: _____

1. Kamau collected the following materials;
i) Picture cut outs
ii) Adhesives
iii) Manila paper
Which paper making technique did he want to practise?
A. Montage B. Collage
C. Stipping D. Sticking
2. Primary colours when mixed with secondary colours in equal amounts produce _____ colours.
A. secondary B. black
C. tertiary D. rainbow
3. Nelson drew the following diagram in his exercise book during Creative Arts lesson.



- Which musical instrument did he draw?
A. Nzumari B. Bung'o
C. Chivoti D. Biringi
4. Grade 6 learners decorated their bodies using paints during a folk dance performance. This is called
A. body ornaments
B. body costumes
C. body colouring
D. body adornment
5. Grade 6 learners were having a swimming lesson. One girl lay on one side in the water as she swam in water. What is the name given to this swimming stroke?
A. Back stroke
B. Side stroke
C. Butterfly stroke
D. Breast stroke
6. What action is taken against a player who does not respect the rules of a soccer game?

- A. The player is removed from the game
B. The player is made to run around the field
C. The player's position is changed
D. The player is made the goalkeeper
7. Which sound is represented by the hand sign below?



- A. d B. f
C. s D. m
8. A person who manipulates and control puppet is called
A. acrobat B. puppeteer
C. magician D. marionette
9. Douglas used the printed fabric shown below to decorate a book cover. How many motif have been used?



- A. Two B. Three
C. Nine D. Six
10. A group of learners was seen practising single hand dig pass. Which game were they preparing for?
A. Volleyball B. Football
C. Basketball D. Handball
11. Grade 6 learners were asked by their teacher to collect materials to improvise a relay baton. Which of the following materials they brought was used?
A. Broken glasses B. Threads
C. Maize stalks D. Old clothes
12. Wind instruments are played by
A. shaking B. hitting
C. blowing D. plucking

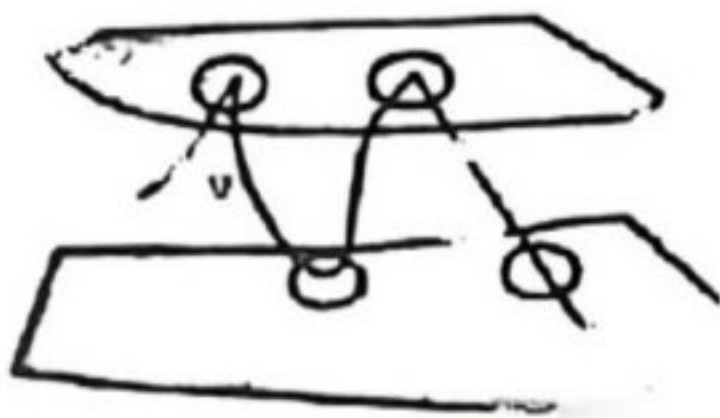
13. Three of the following are benefits of songs except songs

- A. accuse B. console
C. educate D. entertain

14. Grade 6 Creation Arts teacher drew the following letters on the blackboard. Which letter is an upper case letter?

- A. g B. H
C. a D. b

15. Geoffry a grade 6 learner was seen joining two pieces of leather as drawn below.



This process is called

- A. etching B. hemming
C. thonging D. beading

16. Kelly a grade 6 learner is drawing a wind instrument while looking at it. This is drawing from

- A. observation B. printing
C. memory D. imagination

17. The diagram below is of a grade 6 learner demonstrating a certain skill in volleyball.



Which technique is being executed above?

- A. Overarm technique
B. overhead pass
C. dig pass
D. under arm technique

18. During an interclass volleyball game, grade six learners wanted to label their playing kits by adding cut out pieces of cloths on their school games skits by stitching at the back of the T-shirts. What is the name of the labelling technique they used?

- A. collage B. coil
C. dying D. applique

19. Grade 6 Creative Arts teacher asked the learners to mention dry media that can be used in block shading technique. They gave the following answers. Who gave the wrong answer

- A. Tedy - Crayons
B. Damaris - Charcoal
C. Bosco - Pencils
D. Joy - Ink


20. Omollo was mounting artworks for display using the window mounting technique. What did he use to paste the artworks on a surface?

- A. Glue B. Indian ink
C. Candle wax D. Tooth pick

21. Beatrice wants to make membrane of a string instrument. Which of the following materials is the best?

- A. Leather B. Banana leaves
C. Papyrus reeds D. Sugar paper

22. The note below was drawn by a grade 6 learner.



Which is the french rhythm of the note above?

- A. Taa-aa B. Taa-aa-aa-aa
C. Taa D. Taa-aa-a

23. During a pitch lesson, learners practiced the following type of passes. Which of the below passes is used to pass the ball over short distance?

- A) Overarm pass B) Underarm pass
C) Chest pass D) Bounce pass

24. A group of grade 6 learners made a wristband like the one shown below.



Which of the following pair of material were they likely to have used?

- A. Leather and beads
B. Wax and glue
C. Beads and plastic
D. Hard paper and leather

25. Which of the following can be decorated using applique?
 A. Book jackets
 B. Clay materials
 C. Finished woodwork items
 D. Plastic items
26. The commands on **your marks, set and go** are associated with
 A. swimming in deep ends
 B. gymnastics
 C. jumping for height
 D. bunch ~~start~~ technique
27. Grade 6 learners wanted to play handball, how many players are expected in the court at the beginning of a match?
 A. Fourteen B. Seven
 C. Eleven D. Twenty two
28. Brian is practising the game below.



The player above is practising
 A. sprints B. javelin
 C. shot put D. long jump

29. When three people sing a three part song, we say they are singing in a
 A. pair B. solo
 C. trio D. duet
30. Grade 6 learners created a still-life composition shown below.



They then gave the meaning of still-life drawing. Which of the following was the correct answer?

- A. Drawing of small objects
 B. A drawing of non moving objects
 C. A drawing of living organisms
 D. A drawing of objects with different shapes and sizes
31. Grade six learners had to consider the following factors when painting different pictorial composition. Which one is **not**?

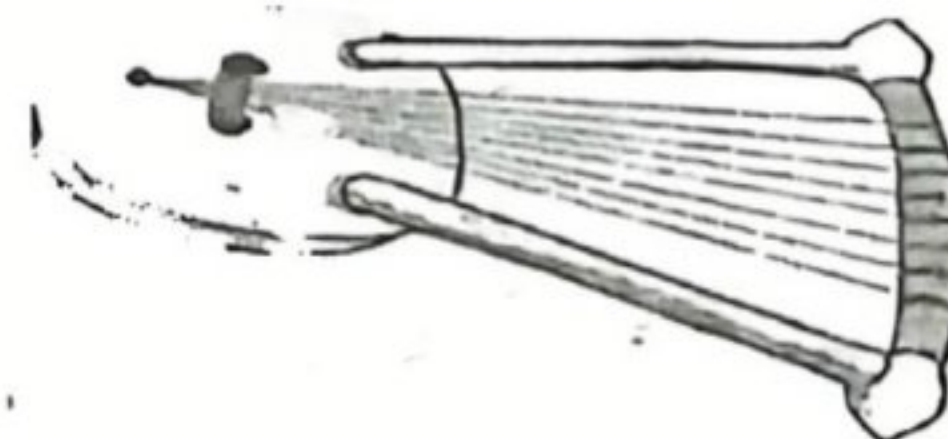
- A. Centre of interest
 B. Subject matter
 C. Proportionality
 D. Contrasting colours

32. George a PHE instructor asked his learners to mention some of the equipments necessary used during high jump activity. They mentioned all the following **except**
 A. cross bar B. tape measure
 C. take off board D. landing mat
33. During an interschool shot put competition, boys under the age of 13 years were required to use a shot weighing
 A. 3kg B. 5kg
 C. 72kg D. 15kg
34. The following are different ways used to make tie and dye patterns onto fabrics **except**
 A. folding B. knotting
 C. scratching D. tying objects
35. Grade 6 learners drew the diagram below.



Which principal of art was lacking in the diagram above?

- A. Proportion B. Balance
 C. Rhythm D. Space
36. Stanley a grade 6 learner heard a song on the radio. The song was about a certain country praising what they own and their beauty. The song Stanley heard was a
 A. patriotic song B. Lullaby song
 C. topical song D. religious song
37. Grade 6 learners were asked by their teacher to state the community that used the indigenous instrument below.



Who among the following learners was correct?

- A. Ruth - Luyhā B. Esther - Ameru
 C. Henry - Kamba D. Fred - Kisii

38. A string instrument is tuned by
 A. putting them near the heat
 B. changing strings
 C. wiping the resonator
 D. tightening or loosening the strings
39. Stacy, a grade 6 learner wants to make improvised crayons from locally available materials. Which of these does she not need?
 A. Candle wax B. Pigments
 C. Clay soil D. Bees wax
40. Kelly wants to serve the ball in game of volleyball. Where should he stand?
 A. Under the net
 B. Anywhere in the court
 C. At the attack line
 D. Behind the service line
41. A player who is not a goalkeeper in the game of football is allowed to use all the following parts of the body to stop the ball except
 A. hands B. head
 C. thighs D. legs
42. During the interschool games competition, a player sustained an injury at a point marked Y as shown in the diagram below. He experienced joint pain, muscle pain, swelling and joint stiffness.



What type of injury could the player have sustained?

- A. Fainting B. Sprain
 C. Bruises D. Fracture
43. Grade 6 learners learnt how to make wax crayons. Why was paraffin and bee wax mixed and used in the process?
 A. To prevent getting burnt when handling
 B. To create different shapes of the wax crayons
 C. To make wax crayons smoother for easy application
 D. To hold the reaction firmly

44. The following are tools that are needed when you want to carve a wooden ladle except one. Which one is it?
 A. Gouge
 B. Chisel
 C. Wood carving knives
 D. Scissors
45. How do we refer to the process of applying even force when pulling the things through the punched holes?
 A. Overcoat B. Stitching
 C. Skiving D. Sagging
46. Moses was asked by his teacher to mention aspects of a folk song. Which one was wrong?
 A. Appreciation B. Instrumentation
 C. Message D. Participants
47. Grade 6 learners performed different songs in class with their teacher. Which performance cue word is likely to show gradually getting louder in a song?
 A. Phrasing B. Diminuendo
 C. Crescendo D. Voice blending
48. The following picture shows a gymnast performing a



- A. head stand
 B. hand stand
 C. inverted stand
 D. hand and head stand
49. A grade 6 facilitator gave the following description to her learners. A swimmer lies on one side in the water. It is used for life saving and leisure. Which swimming style did he described?
 A. Breaststroke
 B. Back stroke
 C. Side stroke
 D. Invented backstroke
50. The following are East African community member state. Which one is not a member?
 A. Tanzania B. Ethiopia
 C. Somalia D. Southern Sudan