

COMPETENCY BASED CURRICULUM EXAM

PIONEER MARK
SERIES

GRADE FIVE YEAR- 2025

CREATIVE ARTS

1. A grade 5 learner was asked to look for locally available material which can be used to make costumes to be worn during a folk dance performance. Which materials did the learner collect?

A. Net
B. Text books
C. Sisal fibres
D. Threads

2. Nathan is playing the game shown below.



Which equipment is he using to play?

A. Stick
B. Rope
C. Needle thread
D. Long wire

3. Grade 4 learners made a picture using collage technique. What is collage?

A. Modelling using clay
B. Carving using a panga
C. Drawing on a plain paper.
D. Cutting and pasting of materials on a surface

4. Which one of the following is a good behaviour during any musical performance?

A. Push those who block your way
B. Abuse those who block your way
C. Sing loudly always

D. Avoid singing using abusive words

5. Which item can be used while doing crayon etching technique?

A. Thread
B. Sharp pencil
C. Water can
D. Paper

6. Grade 5 learners performed the gymnastic activity shown below.



The type of gymnastic activity that they performed is called

A. head balance
B. egg roll
C. crab balance
D. T-balance

7. Grade 5 Creative Arts teacher asked the learners to write the importance of music in the society. Which learner gave the correct answer?

A. Abel - Music can be used to pass message

B. David - Music is used in war zones

C. Musembi - Music is a way of inciting people

D. Moses - music is important when doing house chores.

8. A learner wanted to join two pieces of paper together. What was the most appropriate item to use to join the papers?

A. Glue

B. Water

C. Saliva

D. Ink

9. Grade 5 learners were asked to mark a volleyball pitch to be used the following day. Which locally available materials are they likely to use?

A. Sand

B. Colours

C. Ash

D. Paints

10. Which hand sign shows doh sign in the solfa sound?

A.



B.



C.



D.



11. Some learners were practising the skills below.
 i) Fielding ii) Bowling
 iii) Battling
 Which game uses these skills?
 A. Rounders B. Netball
 C. Rugby D. Football
12. Grade 5 learners were asked to name primary colours. Which group contains primary colours?
 A. Black, orange, white
 B. Green, yellow, black
 C. Pink, purple, yellow
 D. Blue, red, yellow
13. A learner was singing a song faster, while another learner was singing slowly. Singing a song slowly or fast is known as
 A. pitch B. dynamic
 C. sound D. tempo
14. Grade 5 Creative Arts teacher arranged the following items on top of the table in front of the classroom as shown below.



Learners were asked to draw the items placed on the table. This kind of drawing is known as

- A. painting B. still life
 C. montage D. colouring
15. Which one of the following is an importance of skipping a rope?
 A. Makes one to be lazy
 B. Increase body weight
 C. Gives us a chance to win
 D. Improves body flexibility
16. Grade 5 learners were playing the item drawn below during inter-class competition.



Which technique did they use to play the instrument?

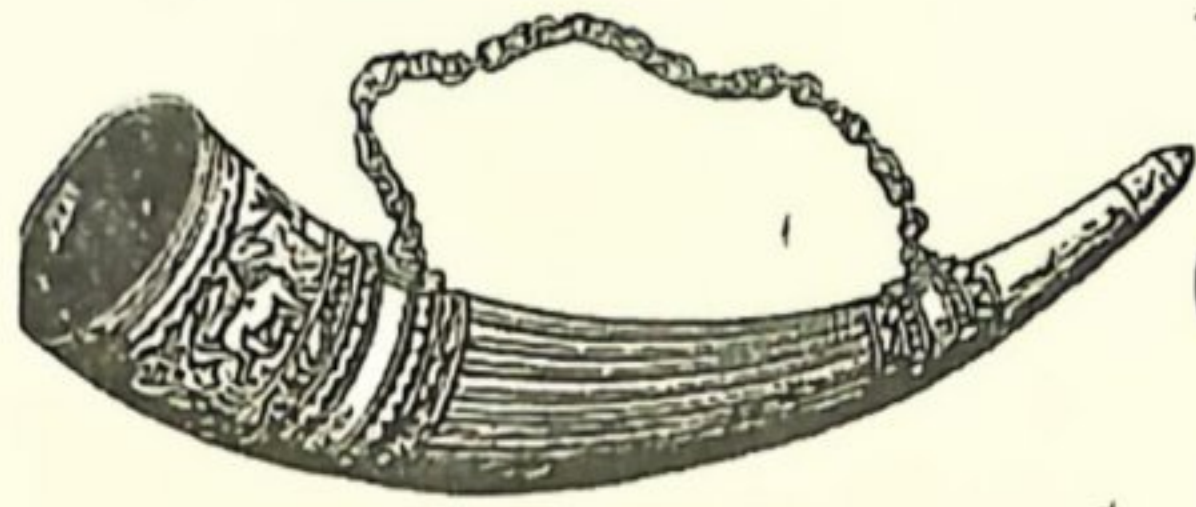
- A. Shaking B. Hitting
 C. Blowing D. Plucking

17. During Labour day celebrations, grade 5 learners were invited to entertain guests. They wore their traditional costumes before performing. The kind of song they were likely to perform was
 A. folk song B. sacred song
 C. patriotic song D. group song
18. Grade 5 learners modelled a pot using clay soil. They placed it outside where the sun was shining. What happened to the pot?
 A. It dried up quickly
 B. It was save
 C. It cracked
 D. It grew smaller
19. Grade 5 learners were practising a certain game using their legs. No player was supposed to use his hands except the goalkeeper. Which game were they practicing?
 A. Volleyball B. Netball
 C. Handball D. Football
20. The picture below shows a stripe made by grade 5 learners. It is called



- A. Gradation stripe
 B. Layout stripe
 C. Paper stripe
 D. Colour stripe
21. The black colour in our Kenya National flag represents
 A. peace B. our people
 C. our land D. blood shed
22. Which rule should be followed to ensure safety in sprinting?
 A. Run bare foot
 B. Skip the warm-up
 C. Ignore commands
 D. Use the lane assigned for you
23. Scola wanted to decorate her t-shirt. Which technique will you advise her to use?
 A. Crayon etching
 B. Painting
 C. Tie and dye
 D. Cross hatching

24. Teacher Eunice drew the following wind instrument on the black board during Creative Arts lesson.



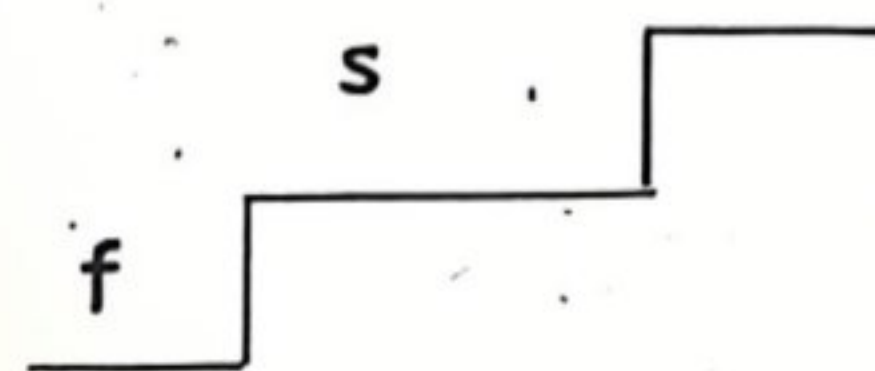
The instrument is played by _____

- A. shaking B. hitting
C. ringing D. blowing
25. What do we call a person who plays against another person in a game?
A. Opponent B. Enemy
C. Defender D. Team mate
26. The Maasai community make ornaments which are so beautiful. Which materials do they use?
A. Wine B. Seeds
C. Beads D. Bottle tops
27. In drawing, the change of tone from dark to light is called
A. smudge technique
B. tonal variation
C. colour change
D. tonal change
28. The item drawn below cannot be used in playing _____

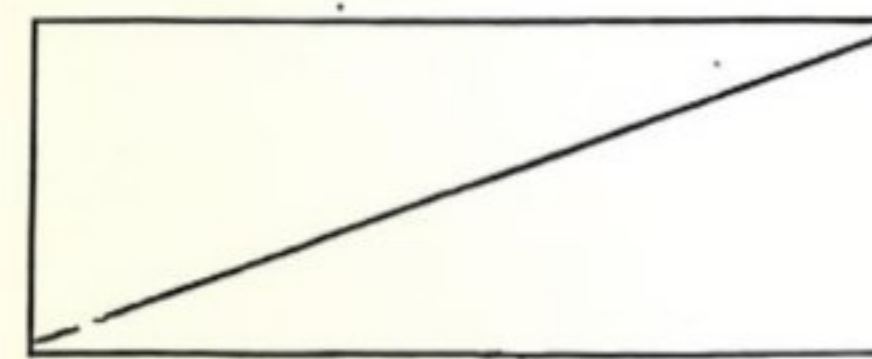


- A. football B. net ball
C. volley ball D. hide and seek
29. During a swimming lesson, learners were asked to mention any precaution to be observed. What did they say?
A. Play hide and seek in the pool
B. Observe swimming rules
C. Throwing stones in the pool
D. Jumping across the pool
30. Grade 5 learners were asked by their teacher to name melodic percussion instruments. Which one of the following is the correct answer they gave?
A. Kayamba B. Drum
C. Marimba D. Jingles

31. Complete the solfa sounds below.



- A. r B. m
C. d D. l
32. A teacher told grade 5 learners to name sharp cutting tools for cutting pictures from magazines and news papers. Which was the correct answer?
A. Ruler B. Razor blade
C. Scissors D. Knife
33. Grade five learners were asked to collect materials needed to make a simple drum. Who among the following learners did not bring a suitable material?
A. Maria - old tin
B. Aggy - knife
C. Lewis - old clothes
D. Nelly - a leather material
34. Juma drew a line from one corner of a rectangle to the opposite corner as shown below.



What do we call the line he drew?

- A. Diagonal line B. Vertical line
C. Horizontal line D. Wavy line
35. Which one of the following games is not played in the athletic track?
A. 800m race B. 200m race
C. net ball D. 100m race
36. During an outdoor activity, grade 5 learners sang the song below.
Askari ee vitani ee
Askari ee vitani ee
Amevaa kofia ya chuma linda nchi
The type of song they sang is
A. patriotic song B. lullaby song
C. topical song D. folk song
37. What is the name of the musical note shown below?



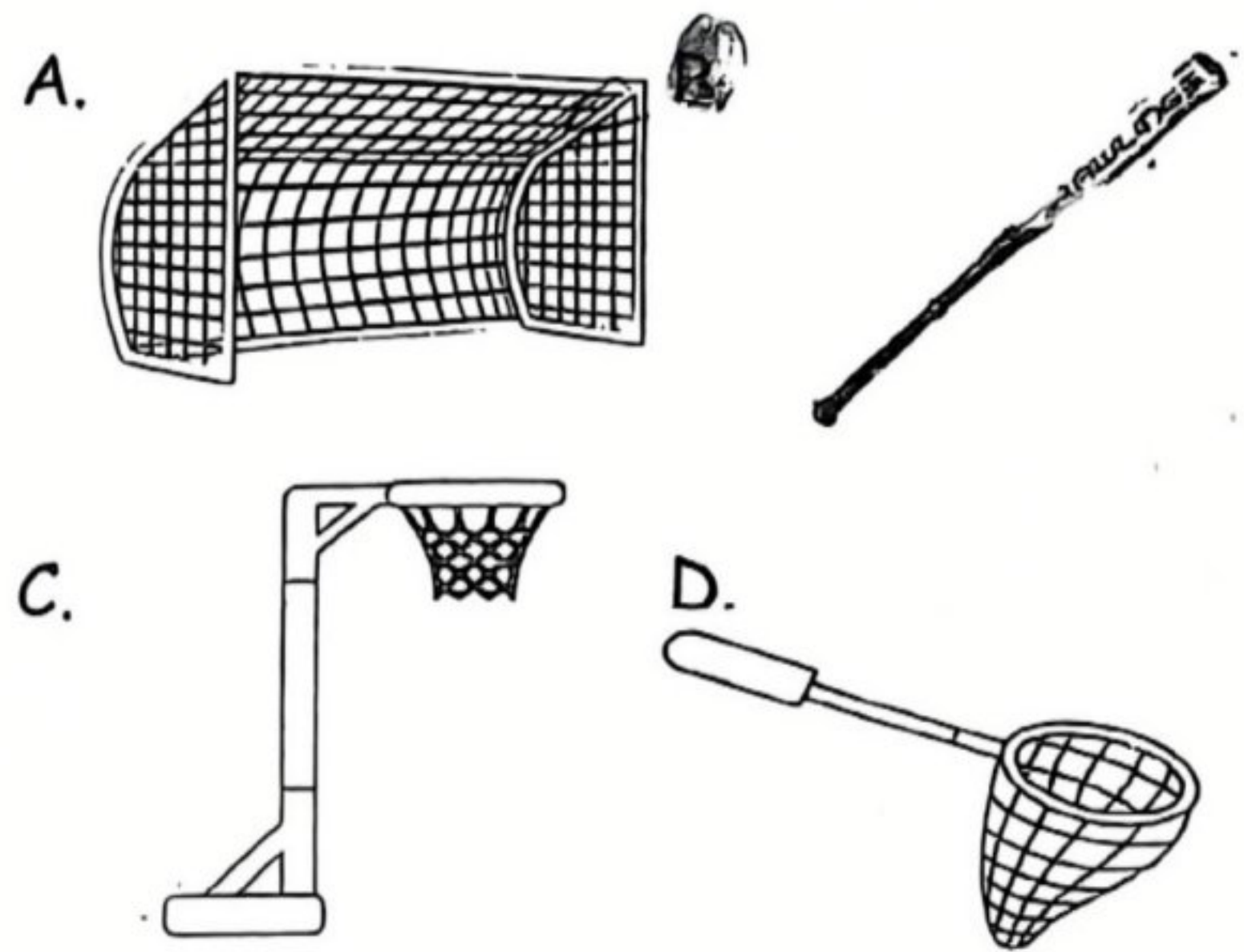
- A. Crotchet
B. Quaver
C. Minim
D. Semibreve

38. A Creative Arts teacher wanted to show learners, some carving techniques using digital devices. Which device did the teacher use?
 A. Radio B. Laptop
 C. Knife D. Panga
39. After making ornaments using locally available materials, which environmental conservation should learners observe?
 A. Play with the remaining materials
 B. Give the remaining materials cows to eat
 C. Dispose the waste materials
 D. Burn the remaining materials
40. While performing a folk dance, a grade 5 used the item shown below.

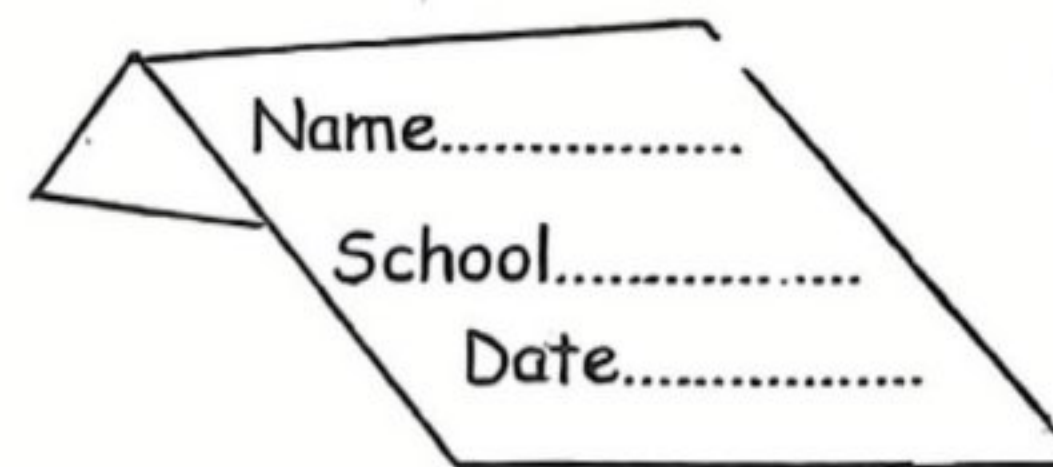


The item is referred to as

- A. prop B. tail
 C. tool D. theme
41. Grade 6 learners were preparing themselves to play volleyball. Which of the following activities is not a warm-up activity?
 A. Sleeping B. Jogging
 C. Running D. Stretching
42. What is the importance of showing respect to others and obeying rules of a game?
 A. So as to win
 B. To avoid others
 C. It is a sign of defeat
 D. To promote health competition
43. A drum was placed outside the grade 5 classroom and the sun was shining brightly. What was the need of placing the instrument outside?
 A. For proper storage
 B. To kill germs
 C. For tuning purpose
 D. To make it more dry
44. Which one of the following items is used when playing a game of rounders?



45. What is the purpose of a starting block in athletics?
 A. To count the laps
 B. To mark the lane
 C. To give athlete a faster start
 D. To mark the end of the race
46. Which of the following is not a part of a crotchet?
 A. Stem B. Hooktail
 C. Head D. Body
47. Samuel made the artwork shown below.



- The artwork was made using
 A. 2 B. plate
 C. 3D D. number
48. The following are examples of passes. Which one is not?
 A. Over arm pass
 B. Chest pass
 C. Overhead pass
 D. Kneel pass
49. A grade 4 learners coiled the line below using clay soil.



- Which line did the learner coil?
 A. Spiral line B. Wavy line
 C. Zigzag line D. Vertical line
50. Which of the following is not a way of creating a rhythm?
 A. Tapping B. Clamping
 C. Crying D. Stamping