

TARGETER WINGS
KENYA PRIMARY SCHOOL EDUCATION ASSESSMENT
GRADE 6 - YEAR 2025
SOCIAL STUDIES /RE



TIME: 1 hour 40 minutes

INSTRUCTIONS TO CANDIDATES (Please read these instructions carefully)

1. You have been given this question booklet and a separate answer sheet. The question booklet contains 50 questions.
2. Do any necessary rough work in this booklet.
3. When you have chosen your answer, mark it on the **ANSWER SHEET**, not in this question booklet.

HOW TO USE THE ANSWER SHEET

4. Use an ordinary pencil.
5. Confirm that the answer sheet that you have been provided with has the following:
YOUR ASSESSMENT NUMBER
YOUR NAME
NAME OF YOUR SCHOOL
NAME OF SUBJECT
6. Do not make any marks outside the boxes.
7. Keep the sheet as clean as possible and do not fold it.
8. For each of the questions 1 - 50, four choices are given. The choices are lettered **A, B, C** and **D**. In each case, only **ONE** of the four choices is correct. Choose the **correct** answer from the choices.
9. On the answer sheet, the correct answer is to be shown by drawing a **dark line** inside the box in which the letter you have chosen is written.

Example

In the Question Booklet:

17. Which one of the following lakes is found in Ethiopia?
- A. Lake Natron
 - B. Lake Tana
 - C. Lake Turkana
 - D. Lake Eyasi

The correct answer is **B**.

On the Answer Sheet:

In the set of boxes numbered 17, draw a **dark line** inside the box with the letter **B** printed in it as indicated below.

14. [A] [B] [C] [D]

15. [A] [B] [C] [D]

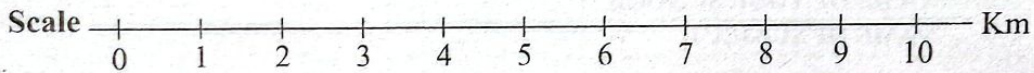
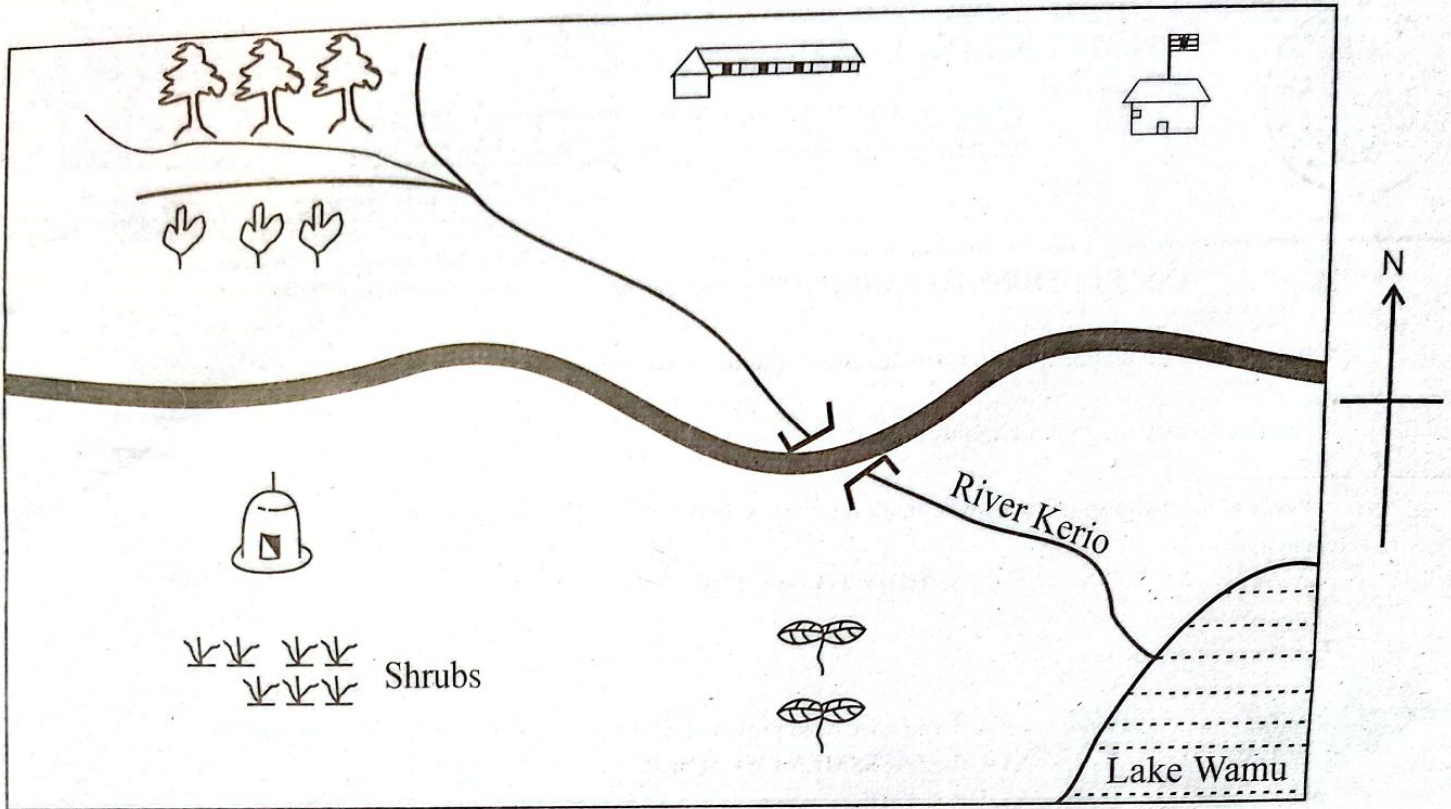
16. [A] [B] [C] [D]

17. [A] [**B**] [C] [D]

10. Your **dark line** **MUST** be within the box.
11. For each question, **ONLY ONE** box is to be marked in each set of four boxes.

This question paper consists of 8 printed pages

SOCIAL STUDIES
MAPUTO AREA



KEY

	Forest		School		Tarmac Road
	Tea plantations		Chief's office		River and Bridge
	Mosque		Rice field		

Study the map of Maputo area and answer questions 1-4

- Who is the likely administrative head of Maputo area?
 A. The governor B. Chief
 C. Assistant chief D. The president
- Juma lives near the mosque at Maputo area. Which is the direction of the school from his home?
 A. North East B. North West
 C. South West D. South East
- The **main** means of transport of the people living in Maputo area is
 A. air
 B. railway
 C. road
 D. water
- The people living in Maputo area mostly use which crop as their food crop?
 A. Tea
 B. Shrubs
 C. Maize
 D. Rice

5. Grade six learners visited Kijiji farm. Kamau the owner kept a few number of animals like cows to provide milk for the family. He also grew crops like maize, beans and kept one chicken. Mr Kamau can be said to be practising
- Plantation farming
 - Subsistence farming
 - Large scale farming
 - Dairy farming
6. The following minerals are mined in Kenya. Which one among the given minerals below is **correctly** matched with the place of mining?
- Fluorspar - Bamburi
 - Limestone - Kerio valley
 - Soda Ash - Lake Magadi
 - Diatomite - Malindi
7. Keisha found grade four boys fighting their classmates girls for ownership of a new ball. She tried her best to stop the fight but they could not listen to her. What was the best action for her to take?
- Scream to attract the attention of other learners.
 - Assume them and continue minding her business.
 - Call other learners to help her beat them.
 - Call the teacher on-duty to solve the case.
8. Grade six learners came across the road sign below on their way to Nairobi National Park.



The road sign indicated that there was

- an accident ahead
- a bump ahead
- road block ahead
- a closed road ahead

9. Learners at Makini School always practice a democratic exercise at the end of every year. What do they likely do to exercise democracy in their school?
- Choosing members of the children government

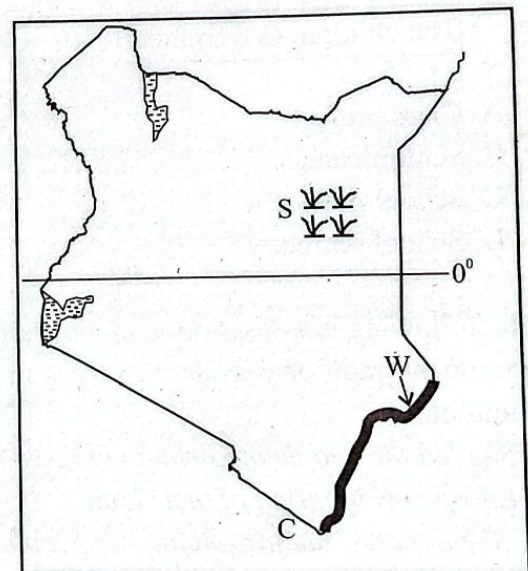
- Removing bad teachers from school
- Organizing school timetable the way they like
- Painting the school gate with colours of their choice.

10. Bakari experiences the following climatic conditions while he visits his uncle.
- Hot and wet weather condition
 - Receives convectional rainfall mostly in the evening

Which town is Bakari's uncle likely to be living in Kenya?

- Nairobi
- Mandera
- Mombasa
- Nyeri

Use the map of Kenya below to answer questions 11-13.

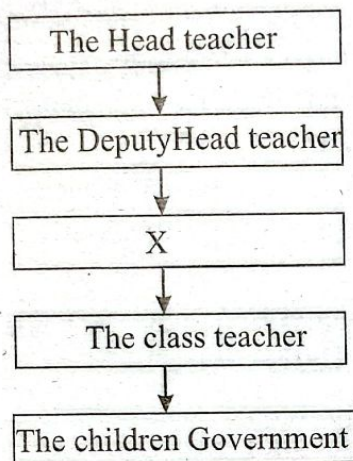


11. Abdalla and his family lives near the shaded area marked **W**. Which is the most likely climatic condition that they experience?
- Modified tropical climate
 - Arid and semi-arid conditions
 - Modified equatorial climate
 - Mountain climatic condition
12. The swamp marked **S** is Lorian swamp. It is a drainage system for one of the following rivers. Which one would it be?
- River Omo
 - River Athi
 - River Tana
 - River Ewaso Nyiro North

13. Kenya has several neighbours. The country marked C is one of her neighbours. Which country is it?

- A. Tanzania B. Uganda
C. South Sudan D. Ethiopia

14. The following is the structure of a school administration of Boma School. Which school administrator is represented by letter X?



- A. Class prefect
B. Senior teacher
C. School president
D. School secretary

15. The following is a description of a certain prominent traditional leader in a Kenyan community

- i. She led the people of Giriama to resist the Europeans invasion of their land.
- ii. She opposed hut tax among her people.
- iii. She wanted to stop the destruction of their Kayas and their places of worship
- iv. She was captured by the British soldiers and deported to Kismayu

Who was the leader?

- A. Kivoi wa Mwendwa B. Oloibon Lenana
C. Mekatilili wa Menza D. Mugwe

16. During a case study, grade six learners concluded that Nairobi city has more people living there as compared to other towns in Kenya. What could be the reason for this?

A. Nairobi is a bigger town than other towns in Kenya.
B. Nairobi is more beautiful and attractive for one to live in.

C. Other towns have no roads, water and big houses.

D. Nairobi has many job opportunities for people to take.

17. Johana was born in Europe by her Kenyan Father and her Kenyan Mother. Her mother is a Kenyan citizen by registration while her father is a Kenyan citizen by birth. So Johana is a Kenyan citizen by which virtue?

- A. Dual citizenship B. By registration
C. By birth D. By selection

18. Teacher Pendo mentioned the following language groups found in Kenya. Kipsigis, Nandi, Tugen and Marakwet. She later asked grade six learners to identify one similarity among the groups. Which was the most suitable outcome?

- A. All are Bantus living in central Kenya.
B. All members in the group are Nilotes
C. The whole group originated from Congo
D. They were attacked by hostile neighbours and taken back to their land

19. After a visit to Nairobi National Museum in Kenya, Mr. Asher asked the learners to write a report about why the Museum was preserved at its present area for so many years. Who wrote an **incorrect** answer?


- A. Bingo: We get to learn our past history through it
B. Brian : It attracts tourists
C. Biker: It is used to preserve traditional artefacts
D. Bindan: It is a good site for birthday parties

20. Kiboko was caught while stealing a chicken from a neighbour's farm. The other neighbours raised an alarm and beat up Kiboko to death. Kiboko was denied two most important human rights. Which ones?

- A. Right to vote and right to security
B. Right to good healthcare and freedom of expression
C. Right to life and right to fair trial
D. Right to own property and right to be heard.

21. " The government of Kenya is made of three arms, Legislature, Judiciary and the Executive. Who heads the Executive arm of the government?
 A. The speaker
 B. The Attorney General
 C. The President
 D. The Governor
22. Who maintains law and order in the country?
 A. The police B. The legislature
 C. The judiciary D. The president
23. Which of the following groups consists of Cushites only?
 A. Oromo, Somalia, Gabbra
 B. Oromo, Rendile, Tugen
 C. Nandi, Kipsigis, Tugen
 D. Somalia, Luo, Ameru
24. Learners made a research on the members of Judiciary arm of the government in Kenya. Who among the following is **not** an outcome of their research?
 A. Chief justice B. The president
 C. The magistrate D. The judges
25. Children in traditional African society were taught through the following methods apart from one. Which one?
 A. Riddles
 B. Proverbs and short saying
 C. Stories
 D. Computers and tablets
26. Which means of transport is the slowest and cheapest?
 A. Railway B. Road
 C. Air D. Water
27. After a visit to Mavuno horticultural farm, Grade six learners were asked to mention some of the crops growing in the horticultural farm they visited. Who wrote the correct answer?
 A. Joy – sisal B. John – rose flower
 C. Jemimah – coconut D. Jamlick – tea

28. The following method is used in Indian ocean for commercial fishing. It is called



- A. Hook and line B. Trawling
 C. Long lining D. Purse seining
29. Which is the best method of transporting water and other liquids over land?
 A. Cable transport B. Tankers transport
 C. Air transport D. Pipeline transport
30. The main source of the county government revenue is
 A. licences and bonds
 B. court fines
 C. taxes
 D. grants from the National government

SECTION B:

C.R.E

31. God created the earth and everything in it. What was created on the 4th day?
 A. Sun, moon and stars
 B. Sea creatures and birds
 C. Land animals
 D. Earth, sea and plants
32. Human beings were created to do all the following apart from one. Which one?
 A. Rule over other creations
 B. Kill animals and destroy the forest
 C. Reproduce
 D. Protect God's creation
33. Maryann and her friends take their leisure time on Saturdays to do most of the following activities. Which activity does not make God happy?
 A. Singing gospel songs
 B. Visiting friends
 C. Smoking bhang
 D. Reading story books

34. The bible is the word of God and it was written by people who were inspired by God. Which writer wrote the book of Genesis?
 A. Paul
 B. Solomon
 C. David
 D. Moses
35. Jesus summarized the Ten Commandments into two. Complete them.
 i) *Love your God with all your _____, soul and mind and*
 ii) *Love your neighbour as you love _____*
 A. power, you parents
 B. heart, yourself
 C. strength, your friends
 D. property, money
36. Elisha was a prophet of God. He performed a lot of miracles during his time. He
 A. healed Naaman the army officer of leprosy
 B. raised the son of the Zarephath's woman
 C. raised Lazarus from death
 D. separated the waters of river Jordan
37. Jacob was the son of Isaac and Rebecca. He wrestled with an angel of God the whole night. His name changed from Jacob to
 A. King
 B. David
 C. Joseph
 D. Israel
38. Jesus said, "**Come to me and I will teach you how to catch people**". Jesus said these words when he was calling his first pair of disciples who were brothers. Who were those brothers?
 A. Matthew and Mark
 B. Zaccheaus and Judas
 C. Simon Peter and Andrew
 D. John and Bartholomew
39. After Jesus was baptized, he went into the desert where he fasted for forty days and forty nights. After the fasting, the devil tempted Jesus. What was Jesus response to the following temptation? "**I will give you power and wealth if you worship me**"
 A. Human beings cannot live by bread alone
 B. Do not put the Lord your God to test
 C. Honour God who created you
 D. Worship the Lord your God and serve only Him.
40. In **Luke 8:43-48**, there is a story of a woman who suffered loss of blood for 12 years. When she heard about Jesus, she went to the place where Jesus was teaching, touched the hem of Jesus robe and she was healed. What do you think made this woman to be healed?
 A. Her Faith
 B. Her pain
 C. Her love for God
 D. Her determination
41. Caroline skips school most of the time to visit her boyfriend who lives in town. Recently, you have discovered that Caroline is pregnant for her boyfriend. Caroline is only 12 years old and her boyfriend is 18 years old. As a Christian friend, what would you advise Caroline to do now that her boyfriend has chased her away?
 A. Abort the unborn child and continue with school.
 B. Get another boyfriend who is more responsible.
 C. Refuse to be chased away and insist she loves the boy.
 D. Keep the pregnancy and ask her parents for forgiveness.
42. Lazarus, a good friend of Jesus lived in Bethany with his two sisters _____ and _____ before he fell sick and died.
 A. Mary and Elizabeth
 B. Dorcas and Deborah
 C. Mary and Martha
 D. Esther and Martha
43. The following are reasons that make young people to abuse drugs apart from one. Which one is it?
 A. Peer pressure
 B. Bible teachings and love of God
 C. Idleness
 D. Availability of drugs
44. Makau is a needy child who lives with her grandmother in the village. As a Christian, how **best** can you help Makau?
 A. Give him your food everyday
 B. Ask your parents to help send Makau to school
 C. Organize for him to be employed at a mining site.
 D. Take him to the streets to beg.

45. Jesus Christ was baptized by _____ on
river Jordan.
- A. John the Baptist
 - B. Priest Eli
 - C. The holy spirit
 - D. His father Joseph
46. The early Christian community did all the following together to foster unity among themselves. Which one is **not**?
- A. Prayed together
 - B. Shared the holy communion
 - C. Cared for the sick and the needy
 - D. Staged robbery and cooperated
47. Jane sat for her KPSEA assessment and she has been sitting idle at home. What would you advise Jane to do with the excess time she has?
- A. Look for employment
 - B. Start knitting scarfs and sweaters
 - C. Join the gang in the estate and start stealing
 - D. Go to clubs at night to dance for customers.
48. Gideon went to war with how many men against the Midianites?
- A. 30
 - B. 300
 - C. 3,000
 - D. 30,000
49. It is the only prophetic book in the New Testament and talks about the end time. This is the book of
- A. Revelation
 - B. Acts
 - C. Colossians
 - D. Matthew
50. Why did Jesus go to the desert after baptism?
- A. To think about temptation
 - B. To pray
 - C. To watch over his disciples
 - D. To consult the King of Israel at the time.

I.R.E

31. Mwangangi, a Grade six learner has always been known to be a backbiter and a rumour monger. Which surah of the Qur'an do you think Mwangangi has **not** read and understood its meaning?
- A. Al-Maun
 - B. Al-Fatiha
 - C. Al-Humaza
 - D. Al-Ikhlās
32. "**Except those who believe and recommend one another to patience**". This quotation is verse from surah
- A. Al-Asr
 - B. Al-Falaq
 - C. Al-Kafirun
 - D. Al-Maun
33. Muzdalifah, a Grade six learner likes helping the poor with food and showing kindness to the orphans. Which surah of the Qur'an do you think Muzdalifah is practising its teachings?
- A. At-Takathur
 - B. Al-Qariah
 - C. Al-Maun
 - D. Al-Asr
34. During an I.R.E lesson, learners were asked by their teacher to recite the verses of surah Al-Fatiha in their correct order. The third verse they recited was
- A. all praise be to Allah, Lord of all the Worlds
 - B. most Beneficent, Ever-Merciful
 - C. you alone we worship, and to you alone turn for help
 - D. King of the Day of Judgement
35. Which one of the following is a lesson that Muslims can learn from surah Al-Fil?
- A. Allah is the Most powerful
 - B. Allah is one
 - C. Allah is Most Merciful
 - D. Allah is the King of the Day of Judgement
36. Grade six learners were asked to explain why Muslims greet each other. Who among them was wrong?
- A. **Munira** : It promotes love
 - B. **Nasteha**: It shows equality
 - C. **Warda**: It brings rewards from Allah
 - D. **Saman**: It promotes Islamic knowledge

37. When she came back from school, Mwanatena, a Grade six learner found her mother in the kitchen preparing dinner. What was the right cause of action for her to take?
- Greet her and start doing her homework
 - Greet and ask her to serve her with tea
 - Greet and assist her with cooking
 - Greet and ask her what she is cooking
38. Zaitun is revising on the attributes of Allah (S.W.T). Which attribute means that Allah is the forgiver?
- Al-Malik
 - Ar-Rahman
 - Al-Ghaffar
 - Al-Aalim
39. Grade six learners were discussing on the characteristics of the angels of Allah. Who among them was **correct**?
- Salim**: They are male and female
 - Swaleh**: They are made from light
 - Nasra**: They eat and drink
 - Ali**: They cannot change their shape
40. Three of the following are qualities of the prophets of Allah (S.W.T). Which one is **not**?
- They were not human
 - They were intelligent
 - They were wise
 - They were free from sins
41. Munir, a Grade six learner was performing swalat when he suddenly stopped and went to perform wudhu. Which of the following things is **likely** to have happened to Munir?
- He breathed loudly
 - He forgot to recite surah Al-Fatiha
 - He became tired
 - He broke wind
42. Before performing Swalatul Dhuhur, Mwashighadi, a grade six learner was seen performing a two rakaats swalah. Which Sunnah prayer was he likely to be performing?
- Dhuha
 - Qabliyah
 - Taraweh
 - Baadiyah
43. What is the right time to perform Swalatul Witr?
- After Dhuhur
 - After Isha
 - After Maghrib
 - After Asr

44. Barakat is planning to start fasting during the forthcoming month of Ramadhan. Which of the following is one of the conditions that he should fulfill?
- He must have niyyah
 - He must be rich
 - He must have enough food
 - He must be married
45. Which of the following is a virtue that all Muslims should have?
- Selfishness
 - Laziness
 - Sabr
 - Pride
46. Mara, a Grade six learner has started engaging in gambling and betting on football matches. Which of the following might have been a **likely** cause of this behaviour?
- Hard work
 - Fasting
 - Idleness
 - Prayerfulness
47. Which one of the following is a right of a neighbour according to the teachings of Islam?
- Taking part of their wealth
 - Quarreling
 - Bakbiting them
 - Visiting them when they are sick
48. Junet was heard saying the following Dua; "*Allahumma-nfa'nee bimaa'allamtanee, wa 'allimnee maa yanfaa'unee, wa zidnee ilmaa*". This is a Dua for
- increase on knowledge
 - increase on wealth
 - increase on love
 - increase on sympathy
49. During which year of prophethood was the first pledge of Al-Aqabah signed between the Muslims and the Aws and Khazraj?
- 10th year
 - 11th year
 - 12th year
 - 13th year
50. Who among the following was the grandfather of Prophet Muhammad (S.A.W)?
- Abu Talib
 - Abdul Mutalib
 - Abu Sufyan
 - Abu Lahab