

TARGETER WINGS

KENYA PRIMARY SCHOOL EDUCATION ASSESSMENT

GRADE 6 - YEAR 2025

CREATIVE ARTS



Wings
001

TIME: 1 hour 40 minutes

INSTRUCTIONS TO CANDIDATES (Please read these instructions carefully)

1. You have been given this question booklet and a separate answer sheet. The question booklet contains 50 questions.
2. Do any necessary rough work in this booklet.
3. When you have chosen your answer, mark it on the **ANSWER SHEET**, not in this question booklet.

HOW TO USE THE ANSWER SHEET

4. Use an ordinary pencil.
5. Confirm that the answer sheet that you have been provided with has the following:
YOUR ASSESSMENT NUMBER
YOUR NAME
NAME OF YOUR SCHOOL
NAME OF SUBJECT
6. Do not make any marks outside the boxes.
7. Keep the sheet as clean as possible and do not fold it.
8. For each of the questions 1 - 50, four choices are given. The choices are lettered **A, B, C and D**. In each case, only **ONE** of the four choices is correct. Choose the **correct** answer from the choices.
9. On the answer sheet, the correct answer is to be shown by drawing a **dark line** inside the box in which the letter you have chosen is written.

Example

In the Question Booklet:

17. The following colours can be obtained by mixing two colours in equal proportions **except**
- A. orange
 - B. white
 - C. green
 - D. purple

The correct answer is **B**.

On the Answer Sheet:

In the set of boxes numbered 17, draw a **dark line** inside the box with the letter **B** printed in it as indicated below.

14. [A] [B] [C] [D]

15. [A] [B] [C] [D]


16. [A] [B] [C] [D]

17. [A] [**B**] [C] [D]

10. Your **dark line** **MUST** be within the box.
11. For each question, **ONLY ONE** box is to be marked in each set of four boxes.

This question paper consists of 8 printed pages


1. Alex was asked by his teacher to state the gymnastic skill illustrated in the picture below.



Identify the correct answer.

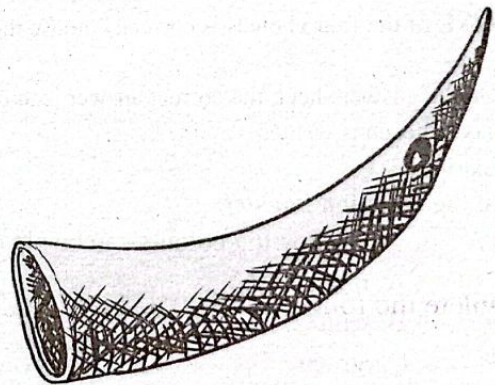
- A. Head stand
 - B. Forward roll
 - C. Swan balance
 - D. Side roll
2. What is the name given to how dark or light a given colour or shade is?
- A. Tinting
 - B. Smudging
 - C. Tonal variation
 - D. Stippling
3. Which of the following is **not** a value learnt from the East African Community anthem?
- A. Unity
 - B. Peace
 - C. Patriotism
 - D. Laziness
4. Wandindi is a musical instrument from which community?
- A. Abakuria
 - B. Abaluhya
 - C. Taita
 - D. Agikuyu

5. The picture below shows a learner swimming in a swimming pool.



Which one is **not** a safety measure that he should observe?

- A. Swimming while eating
 - B. Wearing appropriate swimming costumes
 - C. Never swim alone
 - D. Do not push each other into the pool
6. The technique used in drawing the picture below is known as



- A. smudge
- B. cross hatching
- C. stippling
- D. montage

7. Grade six learners were asked to name the following symbols respectively. Who gave the **correct** answer?



- A. **Anne**: Quaver, semibreve, crotchet, minim
 B. **Mercy**: Semibreve, minim, quaver, crotchet
 C. **Victoria**: Crotchet, minim, semibreve, quaver
 D. **Kui**: Semibreve, crotchet, minim, quaver

8. Which part of a drum is hit to produce sound ?

- A. Sling
 B. Tuning laces
 C. Resonator
 D. Membrane

9. Which of the following is not a wind instrument?


- A. Kayamba
 B. Ndurerut
 C. Nzumari
 D. Oporo

10. Complete the following line of the East African Community anthem.

Ee Mungu twaomba _____

- A. yetu
 B. ulinde
 C. amani
 D. Mashariki

11. Identify the solfa syllables represented by each of the following Kodaly hand signs respectively



- A. doh, re, mi, fa
 B. fa, mi, re, doh
 C. doh, mi, re, fa
 D. mi, re, doh, fa

12. Divinah was asked by her friend to name one material that would be used to make a papier mache. Which answer was **correct**?

- A. Pieces of clothes
 B. Waste papers
 C. Wood blocks
 D. Clay soil

13. How is a descant recorder played?

- A. Plucking
 B. Shaking
 C. Hitting
 D. Blowing

14. The following are letters that were written by a grade six learner on a chart. Which one is a descender?

- A. d
 B. m
 C. g
 D. h

15. The following are locally available materials that are used to make wind musical instruments **except** one. Name it.

- A. Reed
- B. Clay rolls
- C. Horn
- D. Bamboo

16. Grade five learners went out for an outdoor activity. They decided to practice skills in football. Which skill did they not learn?

- A. Batting
- B. Stopping
- C. Kicking
- D. Dribbling

17. The person who leads the others when performing a folk song is known as

- A. instrumentalist
- B. soloist
- C. response group
- D. audience

18. Group D in grade 6 West class was asked by the Creative Arts teacher to describe the function of a resonator in a fiddle. Who gave the **correct** answer?

- A. **Wambua:** Rubbed on the string to produce sound
- B. **Andrea:** Used to hold the instrument when playing it
- C. **Nyambura:** Used to amplify sound
- D. **Rabilo:** Lifts the string off the resonator and directs sound to the membrane

19. The tube used to improvise a wind instrument should be

- A. hollow
- B. curved
- C. blocked
- D. very heavy

20. The following is a musical note symbol.



How many beats does it have?

- A. One
- B. Four
- C. Three
- D. Two

21. Moraa wanted to compose a song that talks about the issues that affects the society. Which type of song was he likely to compose?

- A. Topical song
- B. Patriotic song
- C. Sacred song
- D. Folk song

22. The speed at which music is sang is known as


- A. dynamics
- B. pitch
- C. tempo
- D. rhythm

23. A player who throws the ball to the batter for the batter to hit in the game of rounders is known as
- A. defender
 - B. batter
 - C. dribbler
 - D. bowler

24. Angela asked her friend why salt was put in the dye bath as they were decorating a fabric using tie and dye technique. Which answer did she give?
- A. To add taste to the bath
 - B. For the fabric to dry faster
 - C. To reduce the rate at which the colour will fade
 - D. To avoid dirtifying the fabric

25. What is the third command given in the medium start sprint?
- A. On your mark
 - B. Go
 - C. Set
 - D. Relax

26. The indigenous wind musical instrument drawn below is known as chivoti. It originates from which community?



- A. Mijikenda
- B. Luhya
- C. Maasai
- D. Ameru

27. How many players are required in each team at the beginning of a soccer game?
- A. 22
 - B. 20
 - C. 11
 - D. 10

28. The best material for carving a rounders bat should be
- A. metallic rod
 - B. stone
 - C. manila paper
 - D. wood

29. Name the part marked Z in the diagram below.



- A. head
- B. neck
- C. stem
- D. flag

30. Decorated cotton fabric can be neatened by

- A. pasting
- B. tying
- C. colouring
- D. trimming

31. Which of the following French rhythm names are represented by the note symbols drawn below respectively?



- A. taa-aa ta-te taa taa-aa taa
 - B. ta-te taa-aa taa taa-aa-aa taa
 - C. taa taa-aa ta-te taa-aa ta-te
 - D. taa-aa-aa taa ta-te taa taa
32. Newton asked Munene why buttons and beads are needed when making a glove puppet. What **correct** possible answer was given by Munene?
- A. They are used to make glitters
 - B. They are used to make nose and eyes
 - C. They are used to make hairs and ears
 - D. They are used to enable the puppet balance on its own

33. Which one of the following is **not** a secondary colour?

- A. Orange
- B. Purple
- C. Blue
- D. Green

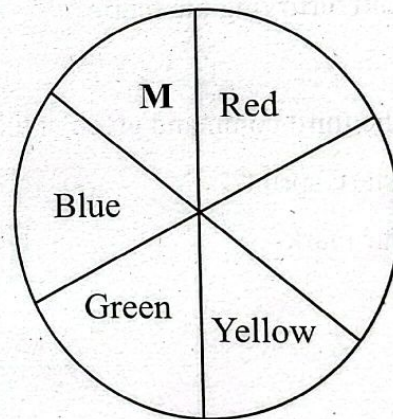
34. A type of baton change where both the runners involved look at each other as they change the baton is known as

- A. non-visual baton change
- B. downsweep baton change
- C. visual baton change
- D. upsweep baton change

35. How is a drum tuned?

- A. Warming the membrane next to fire or in the sun
- B. Painting the resonator
- C. Hitting it harder
- D. Keeping it in a dry place

36. Which colour is marked **M** in colour wheel drawn below?



- A. Orange
- B. White
- C. Black
- D. Purple

37. The following are functions of a folk dance in a community. Which one is **not**?

- A. Educating
- B. Spreading lies
- C. Preserving culture
- D. Entertainment

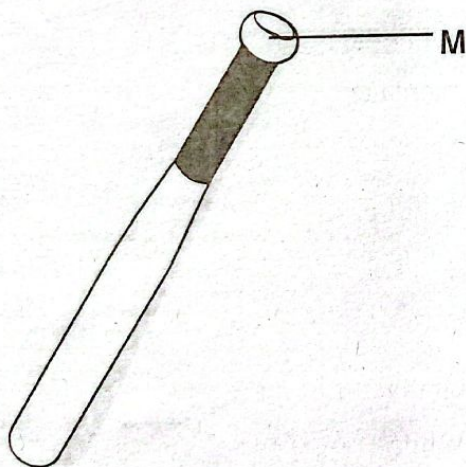
38. Relay baton can be improvised from all the following materials **except**

- A. clay slab
- B. plastic
- C. aluminium
- D. bamboo

39. Nanah was asked by his class teacher to name the highest pitch among d, r, m, f. What would be the correct answer that Nanah gave?

- A. d
- B. m
- C. f
- D. r

40. The following is a rounders bat. The part marked M is known as




- A. Knob
- B. Grip
- C. Handle
- D. End cap

41. The clarity in pronunciation of words when singing is known as

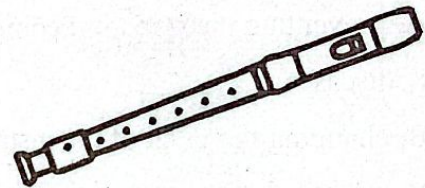
- A. etiquette
- B. texture
- C. gesture
- D. diction

42. Which one of the following is not an indigenous instrument that can be used to accompany a folk song?


A.




B.



C.




D.



43. The technique of drawing stationary objects is called

- A. montage
- B. mosaic
- C. still life
- D. stencil

44. Which musical symbol is correctly matched with its rest?



45. Wiping the mouth piece of a wind instrument helps in

- A. preventing the spread of communicable diseases
- B. changing the pitch of the instrument
- C. making the instrument darker
- D. making the instrument to produce correct tune

46. The part of the body that is mainly used to dribble the ball in the game of football is the

- A. hands
- B. legs
- C. head
- D. chest

47. In a wind instrument, air is blown through the

- A. fingerholes
- B. closed end
- C. barrel
- D. mouthpiece

48. In a step kicking technique of football, a player strikes the ball using which part of the foot?

- A. Back part
- B. Toes
- C. Top part
- D. The knee

49. Which one of the following is a one stringed instrument?

- A. Nyatiti
- B. Kimeng'eng
- C. Adeudeu
- D. Bukandit

50. Kazungu pasted similar pieces of material on a surface to make a picture composition. This technique is known as

- A. collage
- B. mosaic
- C. stippling
- D. montage