

INTERNATIONAL STAR ASSESSMENT


MONITORING LEARNER'S PROGRESS



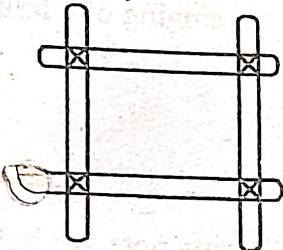
GRADE 6 TERM I - YEAR 2025

CREATIVE ARTS

1. Identify the drawing technique illustrated below



- A. cross hatching
B. stippling
C. still life
D. crayon etching
2. The tool below is used in weaving. Identify the tool.




- A. sticks
B. bar
C. stamp
D. dowel loom
3. Making clay articles by rolling clay into coils is
- A. slab technique
B. coil technique
C. block technique
D. rolling technique
4. The sharpness and the brightness of a photograph is referred to as _____
- A. focus
B. background
C. centre of interest
D. image quality

5. The musical instrument below is known as




- A. Nzumari
B. Muturiru
C. Ndererut
D. Chivoti
- 6.



The marionette above has how many main parts?

- A. 4
B. 3
C. 5
D. 6
7. What do you call the wind instrument shown below?



- A. Chivoti
B. Biringi
C. Bungo
D. Abu

8. The following are the elements of art that are used in still life composition. Which one is not?
 A. Texture
 B. Shape
 C. Paint
 D. Value
9. A song that belongs to people of the same community is called _____
 A. patriotic song
 B. folk song
 C. sacred song
 D. action song
10. When two voices are in agreement while singing together they create _____
 A. rhythm
 B. pitch
 C. harmony
 D. tempo
11. Name the balance shown in the picture







- A. frog balance
 B. hand walk
 C. hard balance
 D. upward balance
12. Which among the following is not a health measure to be observed during the outdoor activity?
 A. Do not overcrowd
 B. Sleep in a well ventilated place
 C. Washroom should be kept clean
 D. Sometimes cover drinking water
13. Identify the type of skill demonstrated below



A. One handed catch

GRADE 6

CAS

- B. Kneeling underarm throw
 C. One handed throw
 D. Kneeling overhead throw
14. The following are qualities of a good leader except
 A. creative
 B. well disciplined
 C. has no integrity
 D. quick in thinking
15. The following are social importance of songs among the people except
 A. entertainment
 B. encourage vices in the community
 C. promoting peace and unity
 D. passing peace message to people
16. Which one of the following elements of music talks about the combination of long and short sounds in music?
 A. Melody
 B. Rhythm
 C. Tempo
 D. Dynamic
17. A song that belongs to people of a same particular community is known as _____
 A. western song
 B. art song
 C. folk song
 D. European song
18. The participants that provide an answer to the soloist during the singing of a folk song are known as _____
 A. dancers
 B. instrumentalists
 C. response group
 D. audience
19. Which one of the following note symbols is correctly matched with its French rhythm name?
 A.  - Taa
 B.  - Taa-aa
 C.  - Ta- te
 D.  - Taa- aa
20. Which one of the following solfa syllable is represented by the hand shown below?



A. f

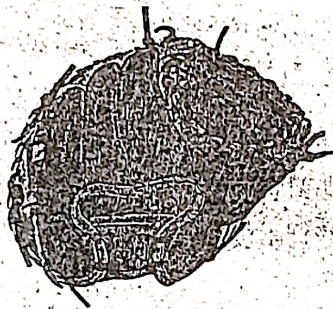
B. m

[Type here]

21. What do you call part labelled x in the diagram shown below?



- A. Head joint
B. Window
C. Sound holes
D. Mouth piece
22. When people sing together as a group in music, it is known as _____ singing
- A. solo
B. choral
C. duet
D. trio
23. The following are types of soccer passes. Which one requires loud and clear communication?
- A. Foot pass
B. Push pass
C. Wall pass
D. Outside of the foot pass
24. The softball equipment drawn below is called _____



- A. helmet
B. bat
C. glove
D. catcher's mitt
25. Choose the correct stages when performing standing discus technique
- A. stance, swing, grip, release and recovery
B. stance, grip, swing, release and recovery
C. grip, stance, swing, release and recovery
D. stance, swing, release and recovery
26. Which among the following is not an importance of sliding in softball?
- A. To prevent injury
B. To make a tag
C. To make a diversion

27. The following are ways of resolving conflicts except
- A. listening
B. being unfair
C. talking openly
D. asking for forgiveness
28. Grade 6 learners were playing football against grade 5. Which among the following is not one of the sports value they practised?
- A. dedication
B. commitment
C. unity
D. unfaithfulness
29. When you mix a primary and a secondary colour in equal amounts you get a _____ colour
- A. yellow orange
B. blue violet
C. red
D. tertiary colour
30. In a crayon etching, the scratching off of the paint from a layer of coloured crayons is called _____
- A. hatching
B. etching
C. painting
D. needle
31. Three of the following are ways of decorating a cooking stick. Which one is not?
- A. Polishing
B. Pasting
C. Smoking
D. Embossing
32. What item gives the following information?
- i) *The title of the book*
ii) *The author*
iii) *Illustration or picture*
- A. Book jacket
B. Collage
C. Cover
D. Montage
33. Focus is important in taking photographs. To get sharp and clear image what should be done to the camera?
- A. Hold it well
B. Adjust the camera lens well
C. Move away from the object
D. Use a bigger camera
34. Mounted work is attractive and easy to hang on a wall. What else is important on artwork that is mounted?
- A. Good to decorate

- B. Can't be painted
 - C. Gets damaged easily
 - D. Prevents creasing and folding
35. The following are leisure activities that grade six learners can engage in at school except
- A. swimming
 - B. athletics
 - C. football
 - D. fighting

36. Which of these materials is used in improvising a drum?
- A. bottle tops
 - B. animal hide
 - C. wires
 - D. Y-shaped stick
37. The ability to change direction of the body while maintaining motion is called
- A. recreation time
 - B. reach test
 - C. ability
 - D. agility

37. The picture below shows a technique in rope work. Which technique is it?



- A. heel taps
- B. swing kick
- C. straddle
- D. straddle cross

39. The following are signs and symptoms of a sprain except
- A. pain
 - B. bruising
 - C. skin colour change
 - D. swelling

40. Which among the following is not one of the quality of a team leader?

- A. Inspires others
- B. Has no integrity
- C. Creative
- D. Well disciplined

41. While choosing for a suitable place for outdoor activities, one should consider the following except

- A. cost
- B. type of trees
- C. security
- D. location

42. The following are passes used in the game of soccer. Which one is not?

- A. Ground pass
- B. Wall pass
- C. Push pass
- D. Outside of the foot


43. When passing in soccer, which part of the foot makes contact with the ball?

- A. Toes
- B. Heel
- C. Instep
- D. Shoelace

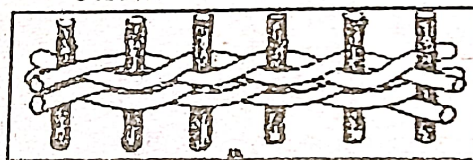
44. To create a dark tone with a secondary colour, which colour is used?

- A. black
 - B. green
 - C. grey
 - D. white
45. Players in the game of soccer apply slight pressure on top of a rolling ball using which part of the body?
- A. Thigh
 - B. Sole of the foot
 - C. Chest
 - D. Toes

The equipment below was drawn by a teacher on the board. Use it to answer questions



46. The equipment above is called a
- A. post
 - B. rounders bat
 - C. stick
 - D. ball
47. The parts labelled A and B show _____ and _____ respectively.
- A. knob, grip
 - B. handle, barrel
 - C. barrel, handle
 - D. end cap and grip
48. What is the main reason for exhibiting items? To
- A. enable people to have a clear view of items
 - B. display for sale
 - C. keep them for reference
 - D. encourage arrangement
49. Grade 6 learners visited Mrs. Wendy and found her weaving an item as shown below.



Which technique was Mrs. Wendy using?

- A. Plain technique
 - B. Coiling technique
 - C. Plaiting technique
 - D. Twine technique
50. Which of the following shows the second line of the second stanza of the national anthem?
- A. Bless this our land and nation
 - B. Heritage of splendour
 - C. Service be our earnest endeavour
 - D. With hearts both strong and true.